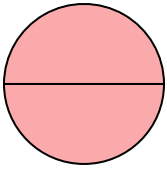




Determine which letter best describes the shaded portion.


Answers

1)



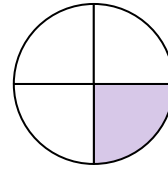
- A. one-half
- B. two-quarters
- C. two-halves

2)



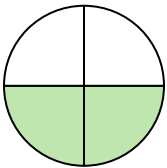
- A. two-quarters
- B. four-fourths
- C. one-half

3)




- A. two-quarters
- B. one-quarter
- C. one-half

4)



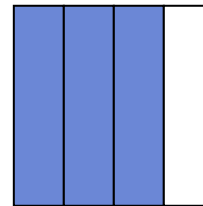
- A. four-fourths
- B. two-fourths
- C. one-half

5)



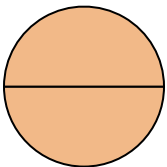
- A. one-half
- B. three-quarters
- C. one-fourth

6)



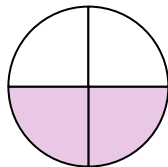
- A. one-half
- B. three-fourths
- C. four-quarters

7)



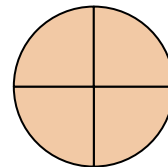
- A. two-quarters
- B. two-halves
- C. one-half

8)



- A. two-fourths
- B. one-half
- C. four-fourths

9)



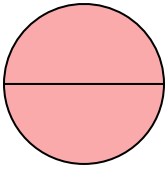
- A. three-quarters
- B. two-halves
- C. four-fourths

- 1. _____
- 2. _____
- 3. _____
- 4. _____
- 5. _____
- 6. _____
- 7. _____
- 8. _____
- 9. _____




Determine which letter best describes the shaded portion.

1)



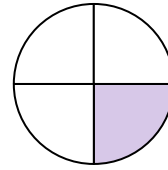
- A. one-half
- B. two-quarters
- C. two-halves

2)



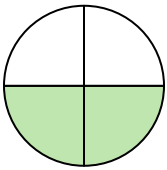
- A. two-quarters
- B. four-fourths
- C. one-half

3)




- A. two-quarters
- B. one-quarter
- C. one-half

4)



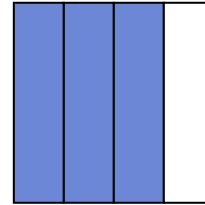
- A. four-fourths
- B. two-fourths
- C. one-half

5)



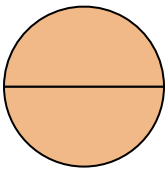
- A. one-half
- B. three-quarters
- C. one-fourth

6)



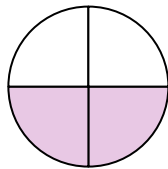
- A. one-half
- B. three-fourths
- C. four-quarters

7)



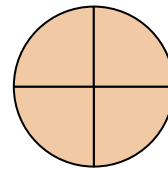
- A. two-quarters
- B. two-halves
- C. one-half

8)



- A. two-fourths
- B. one-half
- C. four-fourths

9)



- A. three-quarters
- B. two-halves
- C. four-fourths

Answers

1. **C**

2. **C**

3. **B**

4. **B**

5. **A**

6. **B**

7. **B**

8. **A**

9. **C**