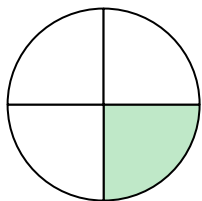



**Determine which letter best describes the shaded portion.****Answers**

1)




- A. one-quarter
B. two-quarters
C. two-halves

2)



- A. two-quarters
B. one-half
C. four-quarters

3)



- A. four-quarters
B. two-halves
C. one-quarter

1. _____

2. _____

3. _____

4. _____

5. _____


6. _____

7. _____

8. _____

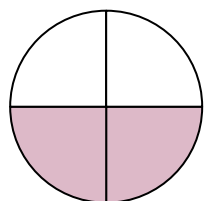
9. _____

4)



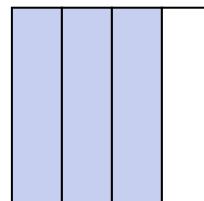
- A. two-halves
B. one-fourth
C. one-half

5)




- A. two-quarters
B. four-fourths
C. three-quarters

6)



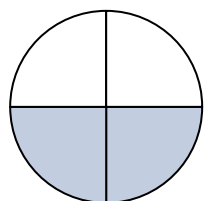
- A. two-fourths
B. three-quarters
C. four-fourths

7)



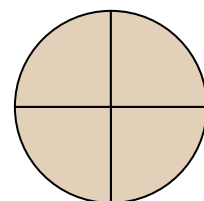
- A. one-half
B. two-halves
C. one-fourth

8)



- A. one-half
B. four-quarters
C. two-quarters

9)



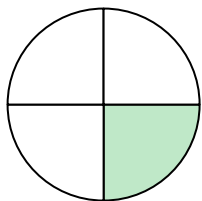
- A. two-halves
B. four-quarters
C. three-fourths



Determine which letter best describes the shaded portion.


Answers

1)




- A. one-quarter
B. two-quarters
C. two-halves

2)



- A. two-quarters
B. one-half
C. four-quarters


3)



- A. four-quarters
B. two-halves
C. one-quarter

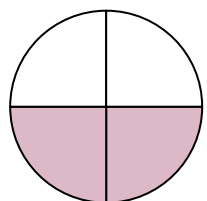
1. **A**2. **C**3. **C**4. **A**5. **A**6. **B**7. **B**8. **C**9. **B**

4)



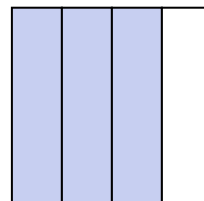
- A. two-halves
B. one-fourth
C. one-half

5)




- A. two-quarters
B. four-fourths
C. three-quarters

6)



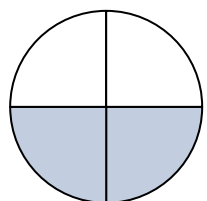
- A. two-fourths
B. three-quarters
C. four-fourths

7)



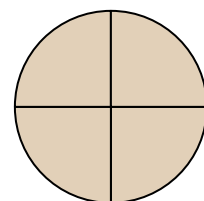
- A. one-half
B. two-halves
C. one-fourth

8)



- A. one-half
B. four-quarters
C. two-quarters

9)



- A. two-halves
B. four-quarters
C. three-fourths