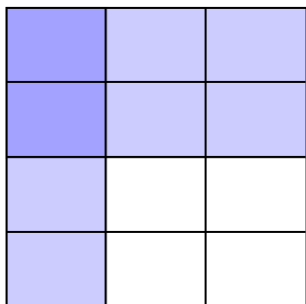


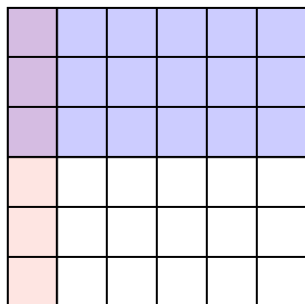


Use the box provided to show a visual example of how to multiply two fractions.

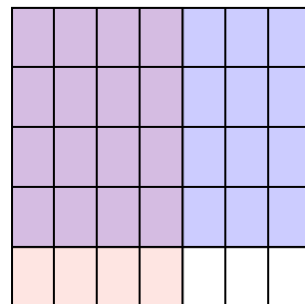
Ex) $\frac{1}{3} \times \frac{2}{4} =$



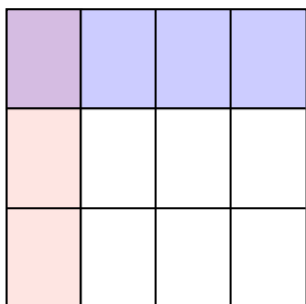
1) $\frac{1}{6} \times \frac{3}{6} =$



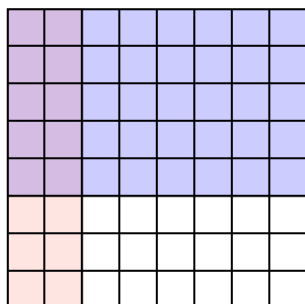
2) $\frac{4}{7} \times \frac{4}{5} =$




3) $\frac{1}{4} \times \frac{1}{3} =$



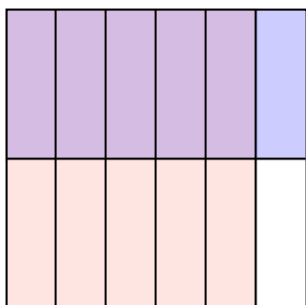
4) $\frac{2}{8} \times \frac{5}{8} =$



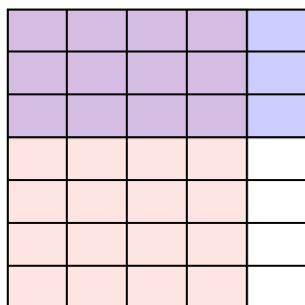
5) $\frac{3}{4} \times \frac{7}{9} =$



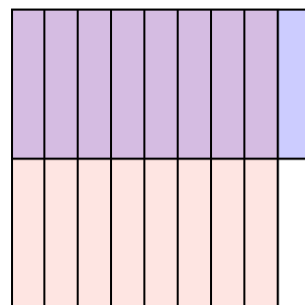
6) $\frac{5}{6} \times \frac{1}{2} =$




7) $\frac{4}{5} \times \frac{3}{7} =$



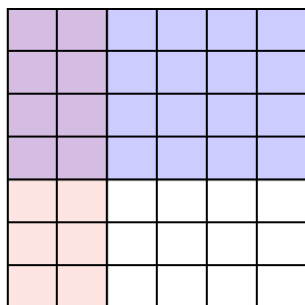
8) $\frac{8}{9} \times \frac{1}{2} =$




9) $\frac{7}{8} \times \frac{4}{8} =$



10) $\frac{2}{6} \times \frac{4}{7} =$



11) $\frac{1}{2} \times \frac{1}{2} =$



Answers

Ex. $\frac{2}{12}$

1. $\frac{3}{36}$

2. $\frac{16}{35}$

3. $\frac{1}{12}$

4. $\frac{10}{64}$

5. $\frac{21}{36}$

6. $\frac{5}{12}$

7. $\frac{12}{35}$

8. $\frac{8}{18}$

9. $\frac{28}{64}$

10. $\frac{8}{42}$

11. $\frac{1}{4}$