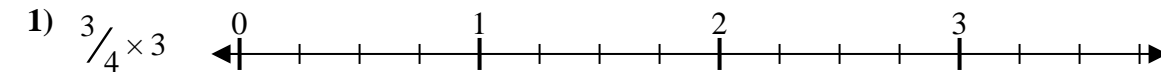


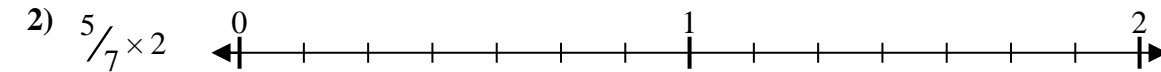


Solve each problem.

**Answers**



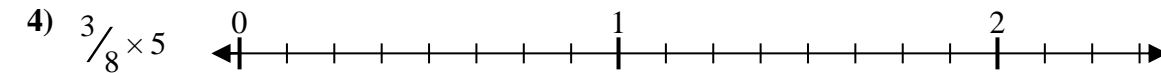
1. \_\_\_\_\_



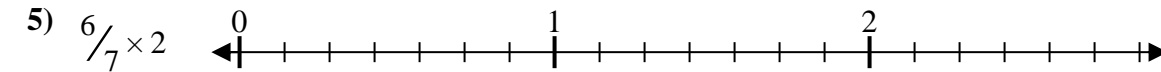
2. \_\_\_\_\_



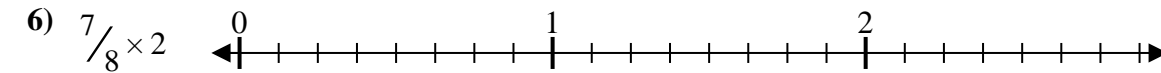
3. \_\_\_\_\_



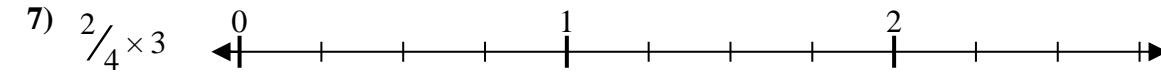
4. \_\_\_\_\_



5. \_\_\_\_\_



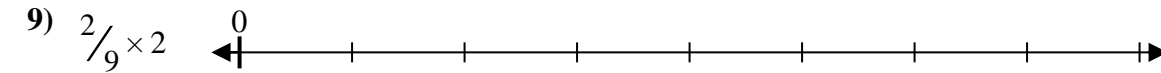
6. \_\_\_\_\_



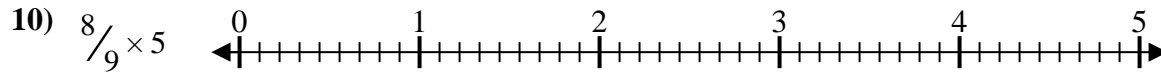
7. \_\_\_\_\_



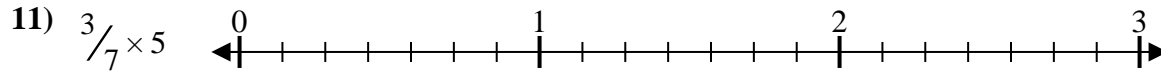
8. \_\_\_\_\_



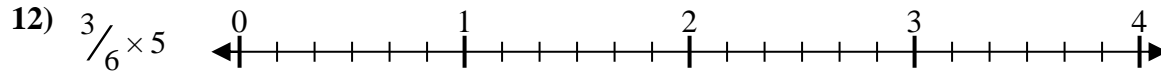
9. \_\_\_\_\_



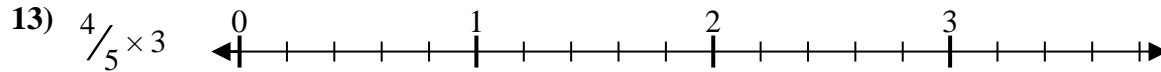
10. \_\_\_\_\_



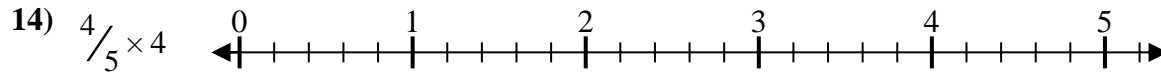
11. \_\_\_\_\_



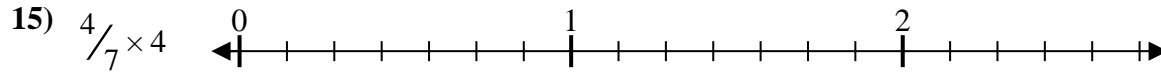
12. \_\_\_\_\_



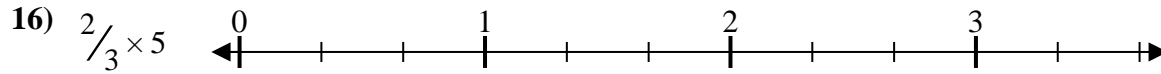
13. \_\_\_\_\_



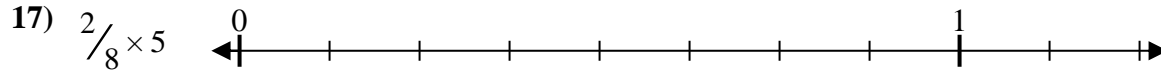
14. \_\_\_\_\_



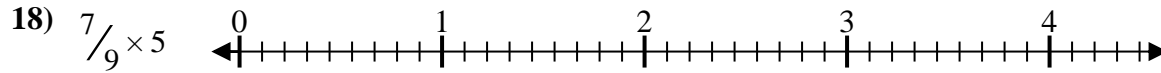
15. \_\_\_\_\_



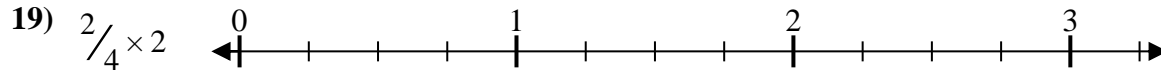
16. \_\_\_\_\_



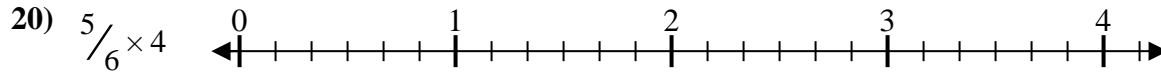
17. \_\_\_\_\_



18. \_\_\_\_\_



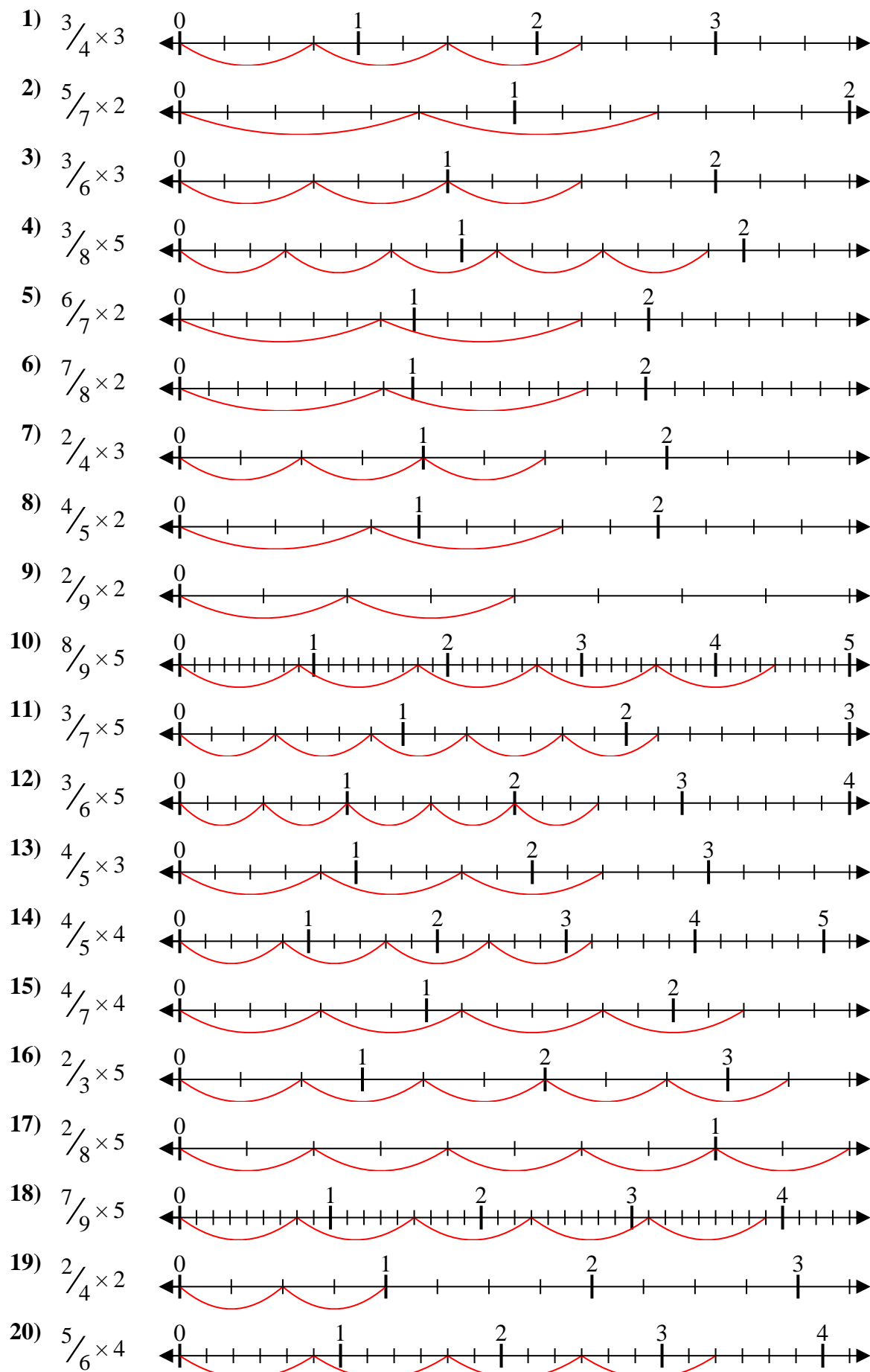
19. \_\_\_\_\_



20. \_\_\_\_\_



Solve each problem.



**Answers**

1.  $\frac{9}{4} = 2\frac{1}{4}$
2.  $\frac{10}{7} = 1\frac{3}{7}$
3.  $\frac{9}{6} = 1\frac{1}{2}$
4.  $\frac{15}{8} = 1\frac{7}{8}$
5.  $\frac{12}{7} = 1\frac{5}{7}$
6.  $\frac{14}{8} = 1\frac{3}{4}$
7.  $\frac{6}{4} = 1\frac{1}{2}$
8.  $\frac{8}{5} = 1\frac{3}{5}$
9.  $\frac{4}{9} = \frac{4}{9}$
10.  $\frac{40}{9} = 4\frac{4}{9}$
11.  $\frac{15}{7} = 2\frac{1}{7}$
12.  $\frac{15}{6} = 2\frac{1}{2}$
13.  $\frac{12}{5} = 2\frac{2}{5}$
14.  $\frac{16}{5} = 3\frac{1}{5}$
15.  $\frac{16}{7} = 2\frac{2}{7}$
16.  $\frac{10}{3} = 3\frac{1}{3}$
17.  $\frac{10}{8} = 1\frac{1}{4}$
18.  $\frac{35}{9} = 3\frac{8}{9}$
19.  $\frac{4}{4} = 1$
20.  $\frac{20}{6} = 3\frac{1}{3}$