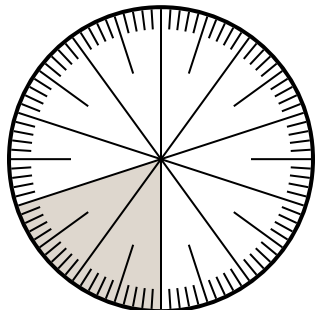




Solve each problem.

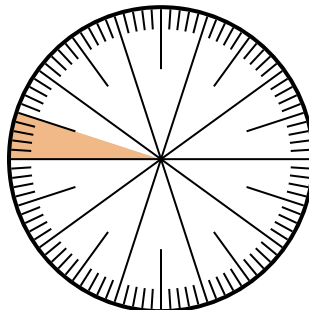
**Answers**

1) Which choice represents the shaded portion of the number wheel?



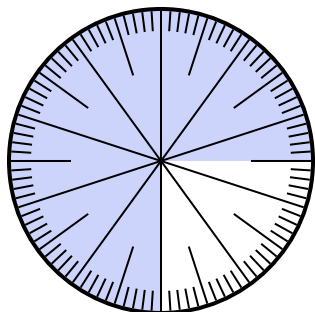
- A.  $\frac{80}{20}$       B. 0.20  
 C.  $\frac{20}{10}$       D.  $\frac{0.2}{100}$

2) Which choice represents the shaded portion of the number wheel?



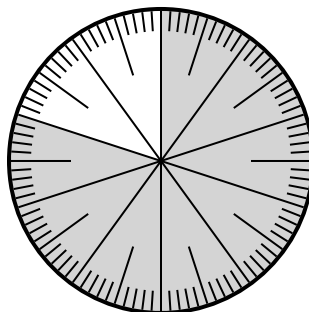
- A.  $\frac{0.05}{100}$       B. 0.05  
 C.  $\frac{5}{95}$       D.  $\frac{9.5}{100}$

3) Which choice represents the un-shaded portion of the number wheel?



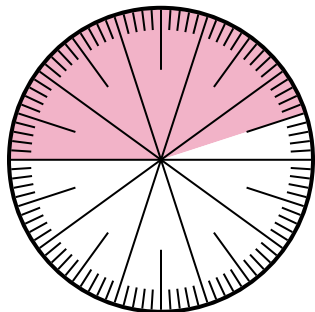
- A. 2.50      B.  $\frac{25}{100}$   
 C. 25      D. 2.5

4) Which choice represents the shaded portion of the number wheel?



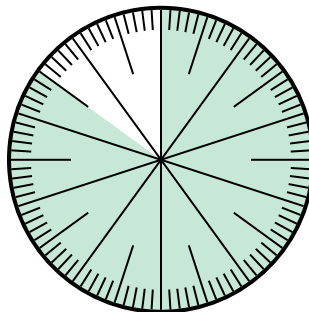
- A.  $\frac{80}{20}$       B.  $\frac{8.00}{100}$   
 C.  $\frac{80}{100}$       D. 8.00

5) Which choice represents the shaded portion of the number wheel?



- A. 55.0      B. 45  
 C. 4.5      D. 0.45

6) Which choice represents the un-shaded portion of the number wheel?




- A.  $\frac{1.5}{100}$       B.  $\frac{15}{100}$   
 C. 1.50      D. 1.5

1. \_\_\_\_\_  
 2. \_\_\_\_\_  
 3. \_\_\_\_\_  
 4. \_\_\_\_\_  
 5. \_\_\_\_\_  
 6. \_\_\_\_\_



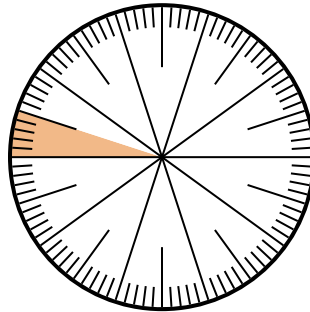
Solve each problem.

- 1) Which choice represents the shaded portion of the number wheel?



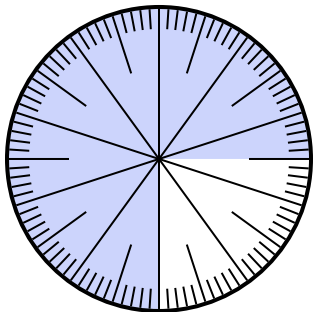
- A.  $\frac{80}{20}$       B. 0.20  
C.  $\frac{20}{10}$       D.  $\frac{0.2}{100}$

- 2) Which choice represents the shaded portion of the number wheel?



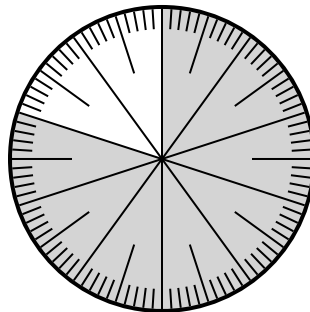
- A.  $\frac{0.05}{100}$       B. 0.05  
C.  $\frac{5}{95}$       D.  $\frac{9.5}{100}$

- 3) Which choice represents the un-shaded portion of the number wheel?



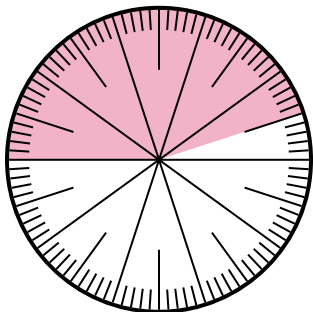
- A. 2.50      B.  $\frac{25}{100}$   
C. 25      D. 2.5

- 4) Which choice represents the shaded portion of the number wheel?



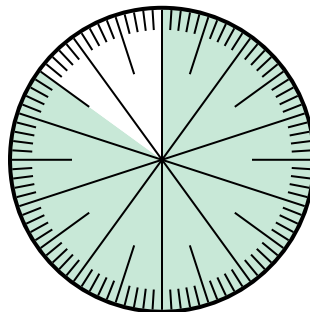
- A.  $\frac{80}{20}$       B.  $\frac{8.00}{100}$   
C.  $\frac{80}{100}$       D. 8.00

- 5) Which choice represents the shaded portion of the number wheel?



- A. 55.0      B. 45  
C. 4.5      D. 0.45

- 6) Which choice represents the un-shaded portion of the number wheel?



- A.  $\frac{1.5}{100}$       B.  $\frac{15}{100}$   
C. 1.50      D. 1.5

**Answers**

1.   **B**    
2.   **B**    
3.   **B**    
4.   **C**    
5.   **D**    
6.   **B**