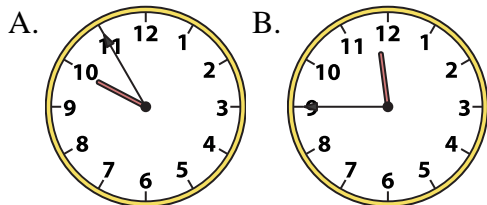




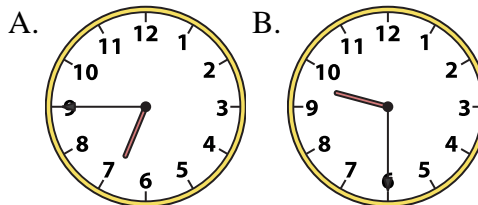
Determine which clock accurately shows the time.

**Answers**

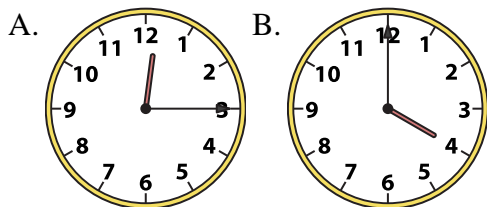
1) 11:45



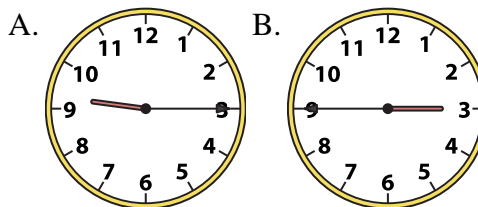
2) 9:30



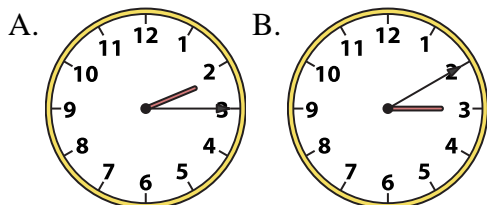
3) 12:15



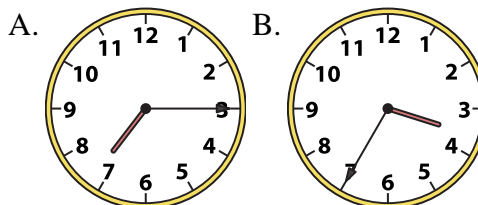
4) 9:15



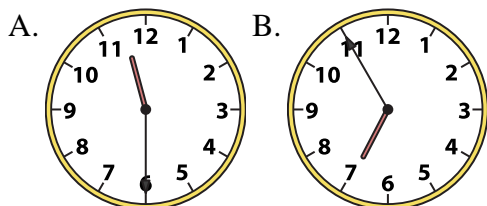
5) 2:15



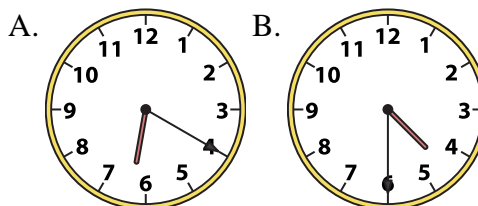
6) 7:15



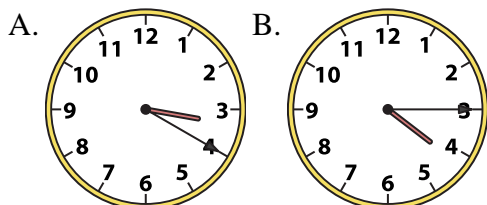
7) 11:30



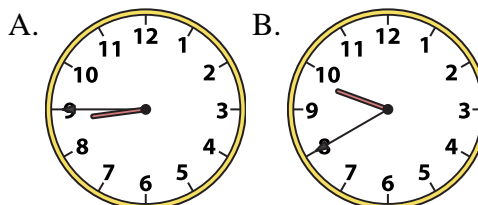
8) 4:30



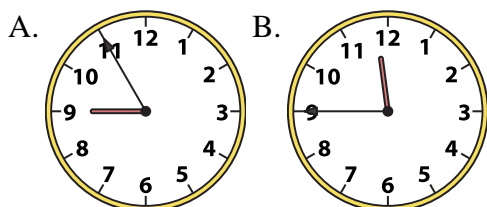
9) 4:15



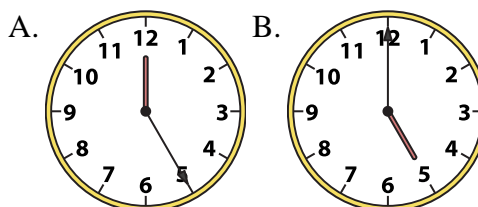
10) 8:45



11) 11:45



12) 5:00



1. \_\_\_\_\_
2. \_\_\_\_\_
3. \_\_\_\_\_
4. \_\_\_\_\_
5. \_\_\_\_\_
6. \_\_\_\_\_
7. \_\_\_\_\_
8. \_\_\_\_\_
9. \_\_\_\_\_
10. \_\_\_\_\_
11. \_\_\_\_\_
12. \_\_\_\_\_

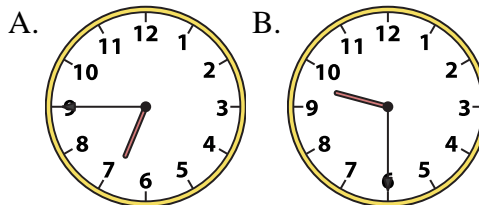
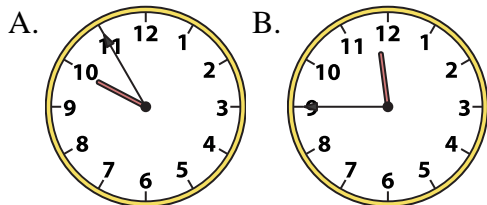


Determine which clock accurately shows the time.

**Answers**

1) 11:45

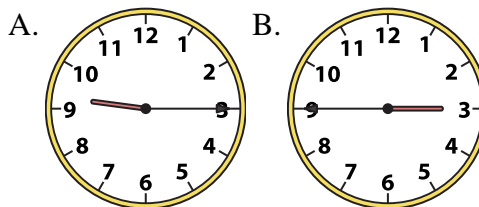
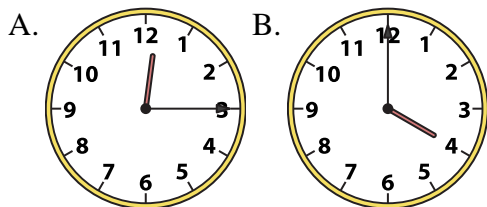
2) 9:30



1. **B**

3) 12:15

4) 9:15



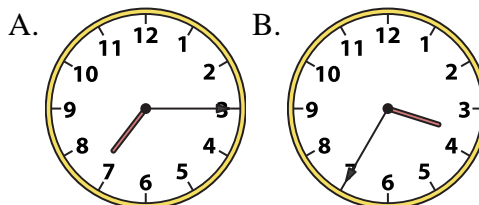
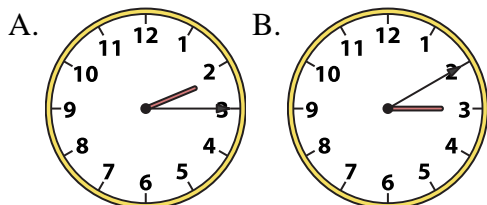
2. **B**

3. **A**

4. **A**

5) 2:15

6) 7:15



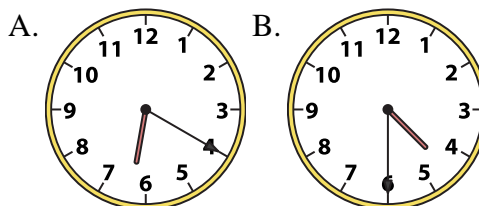
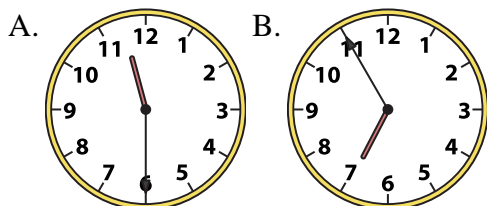
5. **A**

6. **A**

7. **A**

7) 11:30

8) 4:30



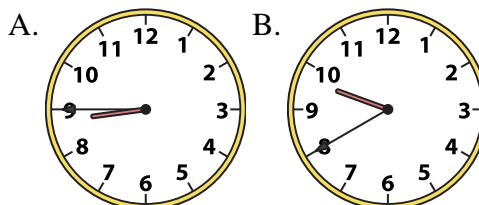
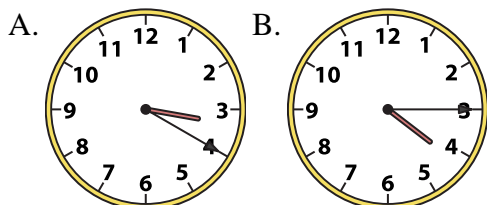
8. **B**

9. **B**

10. **A**

9) 4:15

10) 8:45



11. **B**

12. **B**

11) 11:45

12) 5:00

