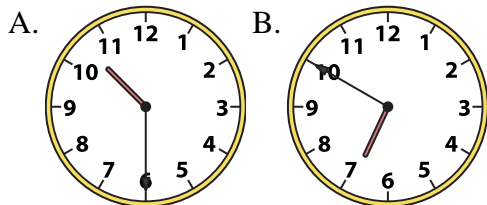




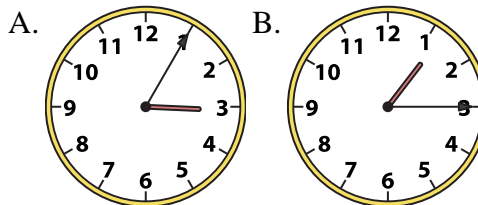
Determine which clock accurately shows the time.

**Answers**

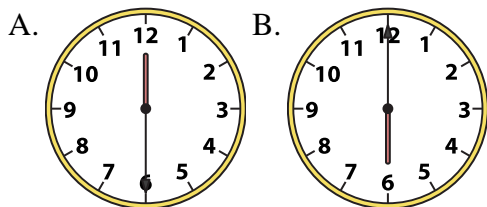
1) 10:30



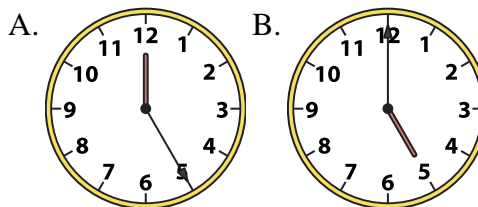
2) 1:15



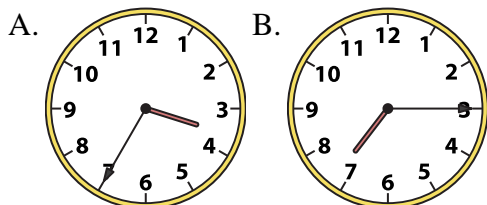
3) 6:00



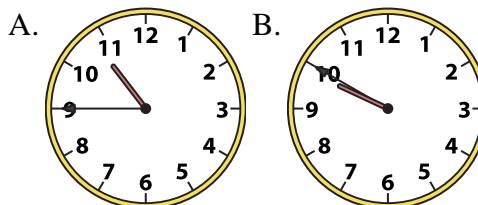
4) 5:00



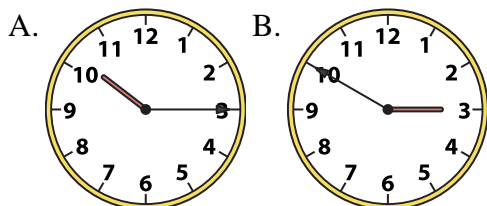
5) 7:15



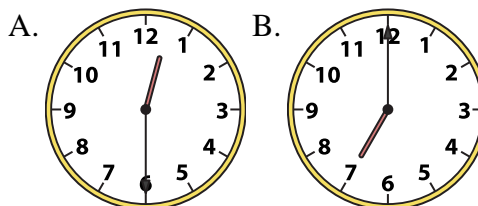
6) 10:45



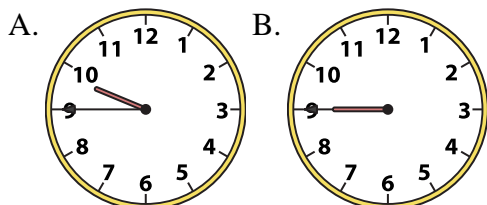
7) 10:15



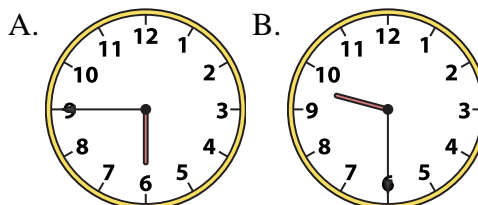
8) 12:30



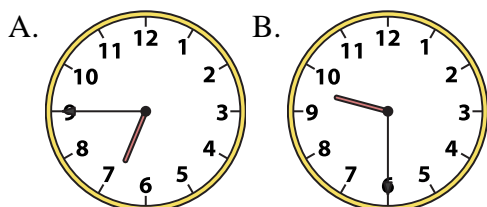
9) 9:45



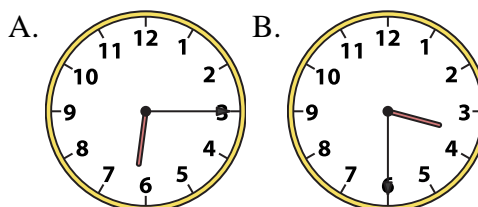
10) 9:30



11) 9:30



12) 3:30



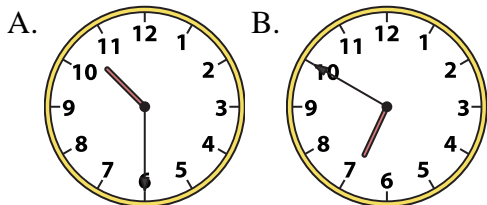
1. \_\_\_\_\_
2. \_\_\_\_\_
3. \_\_\_\_\_
4. \_\_\_\_\_
5. \_\_\_\_\_
6. \_\_\_\_\_
7. \_\_\_\_\_
8. \_\_\_\_\_
9. \_\_\_\_\_
10. \_\_\_\_\_
11. \_\_\_\_\_
12. \_\_\_\_\_



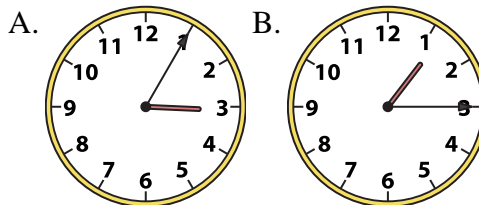
Determine which clock accurately shows the time.

**Answers**

1) 10:30



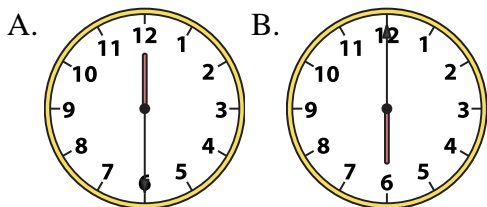
2) 1:15



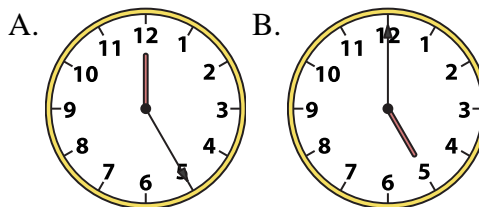
1. **A**

2. **B**

3) 6:00



4) 5:00

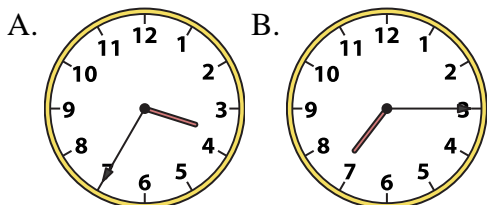


3. **B**

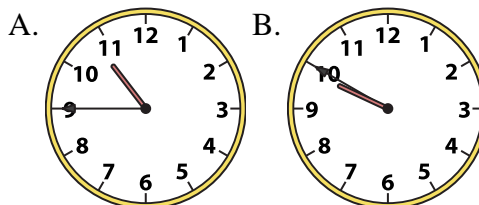
4. **B**

5. **B**

5) 7:15



6) 10:45

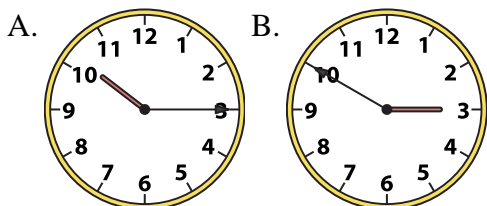


6. **A**

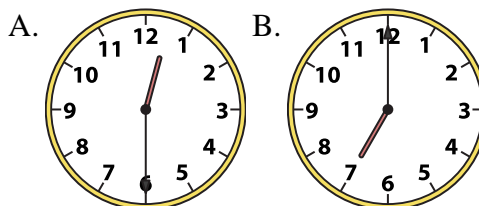
7. **A**

8. **A**

7) 10:15



8) 12:30



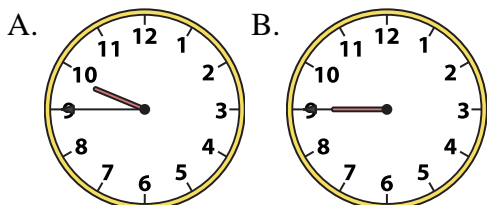
9. **A**

10. **B**

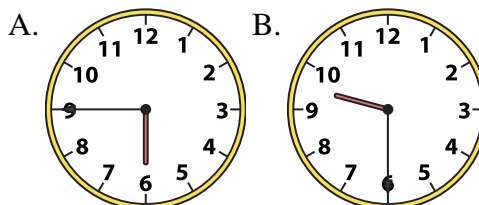
11. **B**

12. **B**

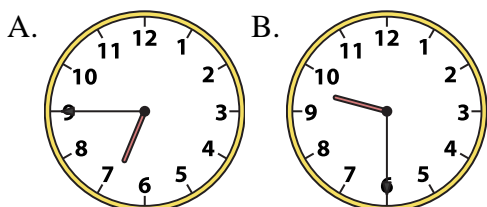
9) 9:45



10) 9:30



11) 9:30



12) 3:30

