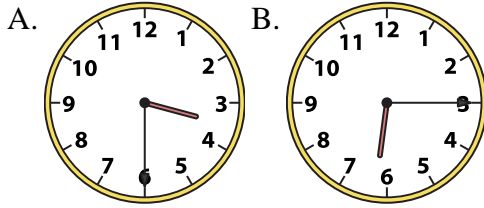




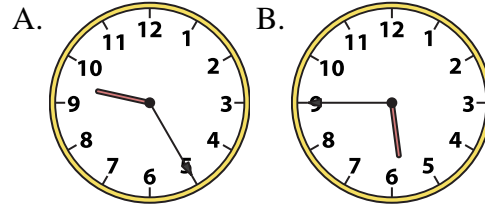
Determine which clock accurately shows the time.

Answers

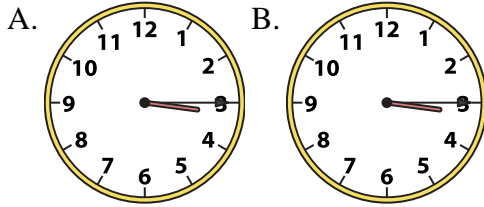
1) 3:30



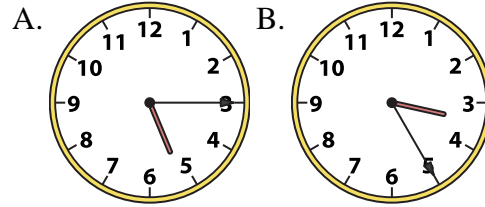
2) 5:45



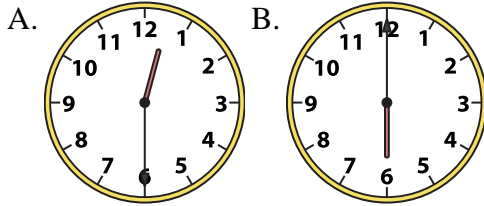
3) 3:15



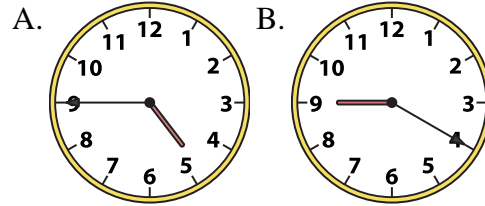
4) 5:15



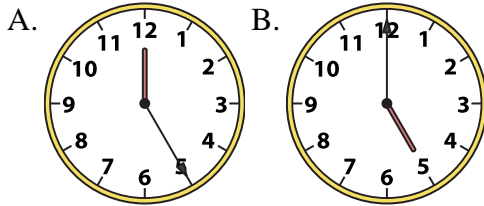
5) 12:30



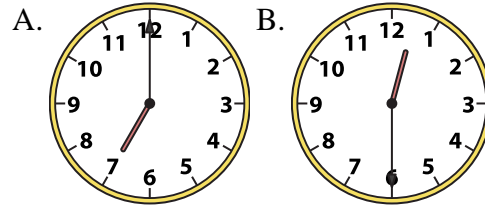
6) 4:45



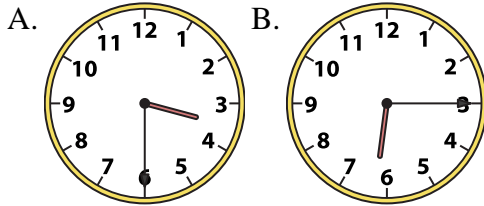
7) 5:00



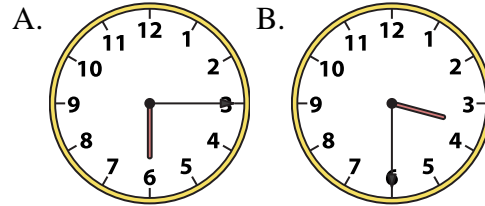
8) 12:30



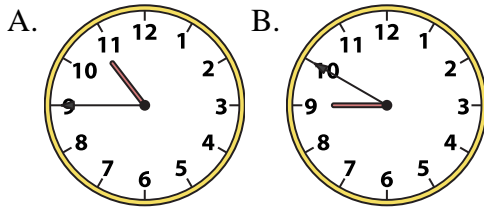
9) 6:15



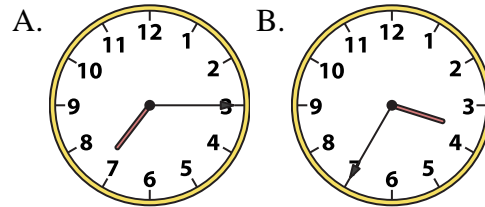
10) 3:30



11) 10:45



12) 7:15



1. _____
2. _____
3. _____
4. _____
5. _____
6. _____
7. _____
8. _____
9. _____
10. _____
11. _____
12. _____

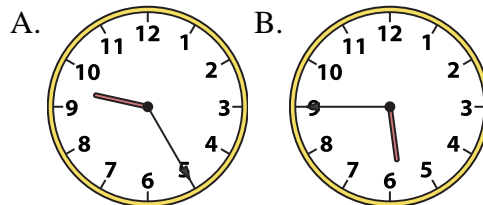
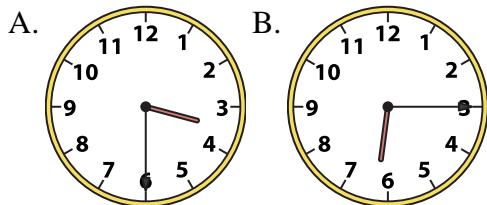


Determine which clock accurately shows the time.

Answers

1) 3:30

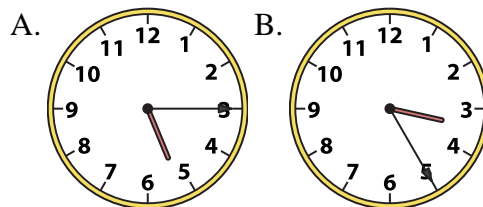
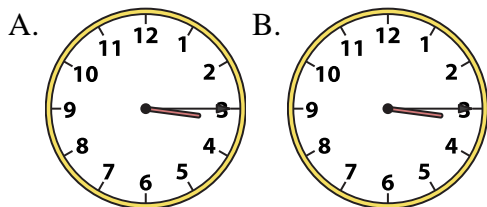
2) 5:45



- 1. **A**
- 2. **B**
- 3. **B**

3) 3:15

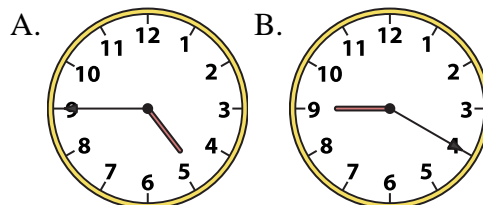
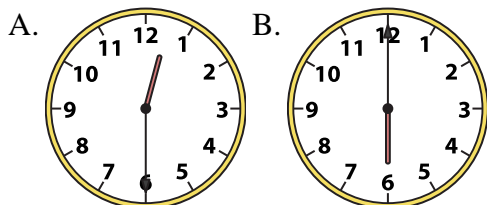
4) 5:15



- 4. **A**
- 5. **A**
- 6. **A**

5) 12:30

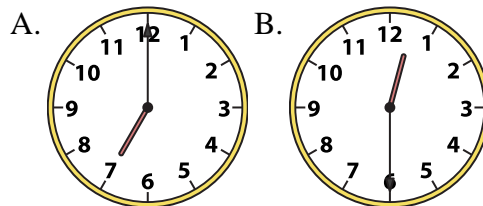
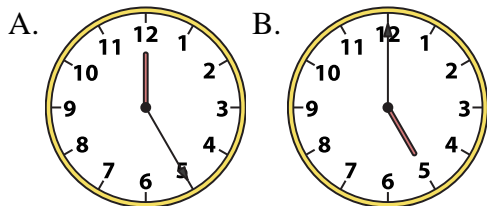
6) 4:45



- 7. **B**
- 8. **B**
- 9. **B**
- 10. **B**

7) 5:00

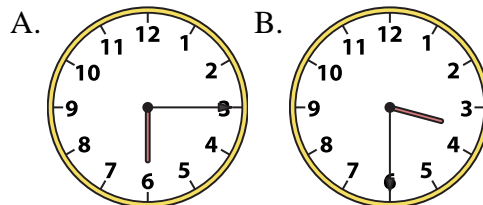
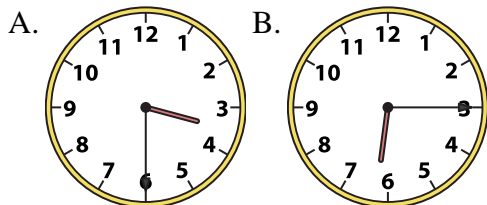
8) 12:30



- 11. **A**
- 12. **A**

9) 6:15

10) 3:30



11) 10:45

12) 7:15

