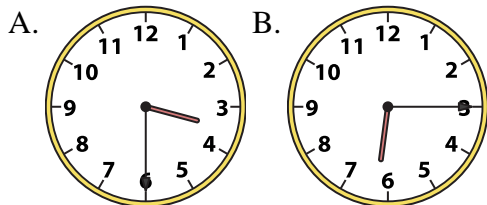




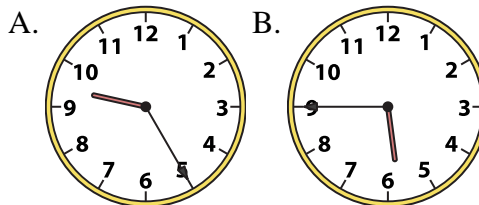
Determine which clock accurately shows the time.

Answers

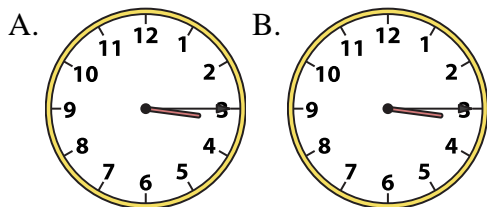
1) 3:30



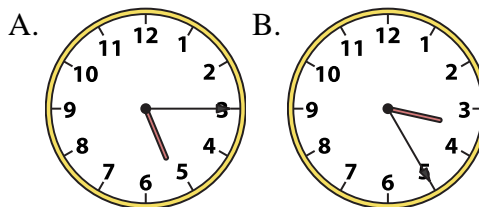
2) 5:45



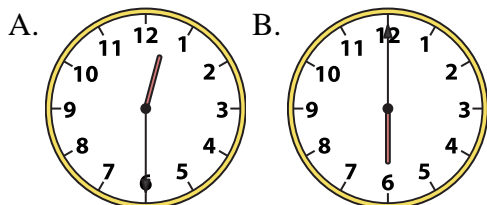
3) 3:15



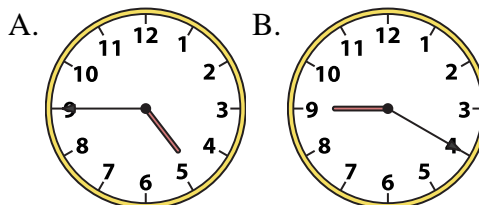
4) 5:15



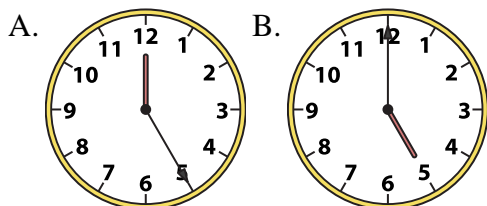
5) 12:30



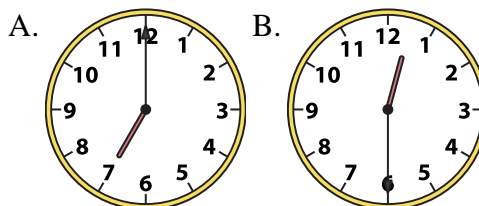
6) 4:45



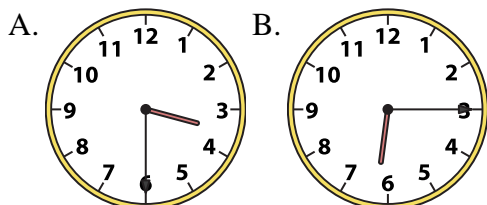
7) 5:00



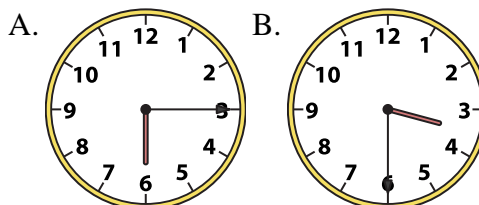
8) 12:30



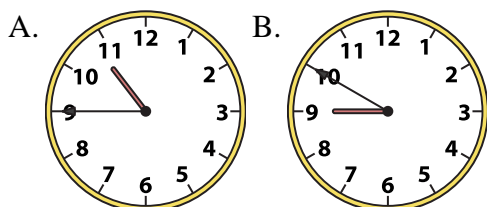
9) 6:15



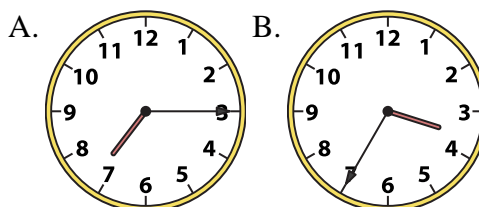
10) 3:30



11) 10:45



12) 7:15



1. _____
2. _____
3. _____
4. _____
5. _____
6. _____
7. _____
8. _____
9. _____
10. _____
11. _____
12. _____

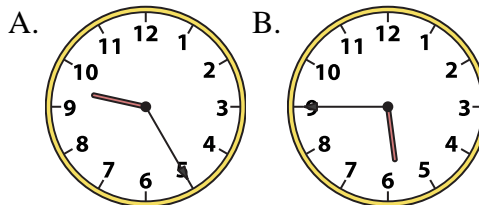
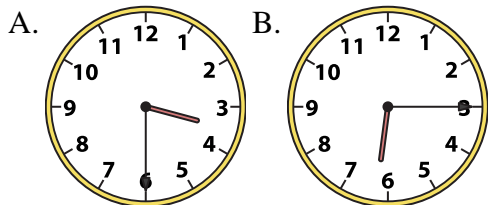


Determine which clock accurately shows the time.

Answers

1) 3:30

2) 5:45

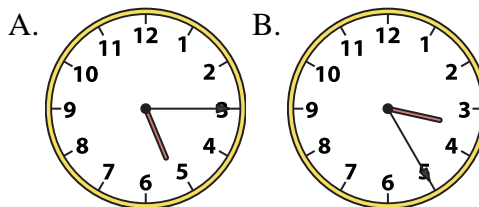
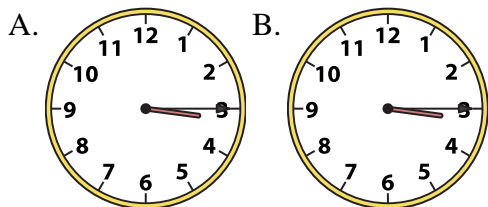


1. **A**

2. **B**

3) 3:15

4) 5:15



3. **B**

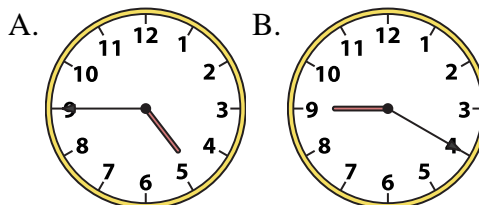
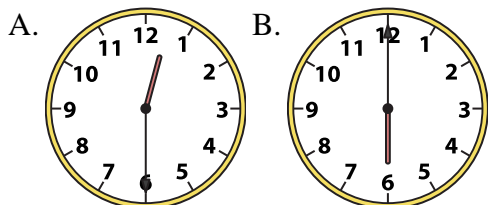
4. **A**

5. **A**

6. **A**

5) 12:30

6) 4:45



7. **B**

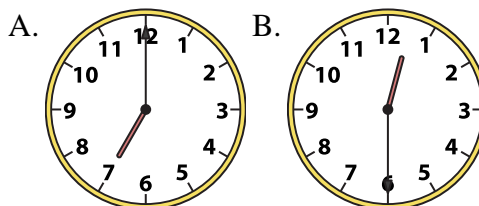
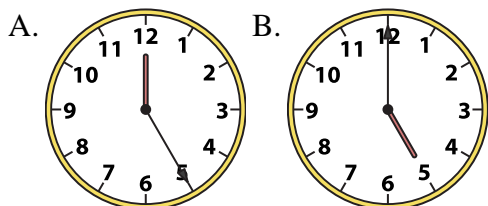
8. **B**

9. **B**

10. **B**

7) 5:00

8) 12:30

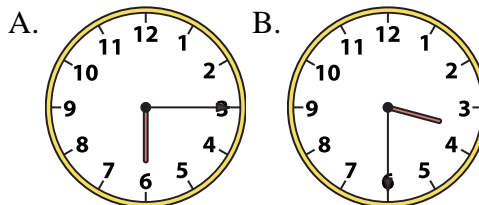
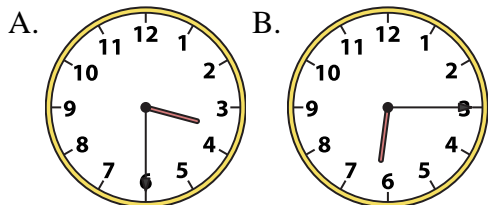


11. **A**

12. **A**

9) 6:15

10) 3:30



11) 10:45

12) 7:15

