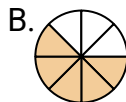
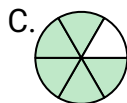


**Determine which letter best represents each fraction.****Answers**

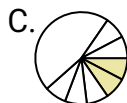
1)

Which choice best represents $\frac{5}{8}$?

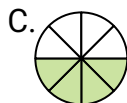
2)

Which choice best represents $\frac{5}{6}$?

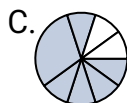
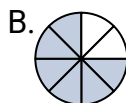
3)

Which choice best represents $\frac{2}{8}$?

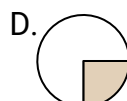
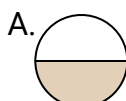
4)

Which choice best represents $\frac{4}{8}$?

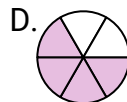
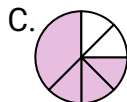
5)

Which choice best represents $\frac{6}{8}$?

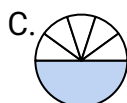
6)

Which choice best represents $\frac{1}{2}$?

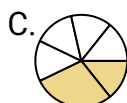
7)

Which choice best represents $\frac{4}{6}$?

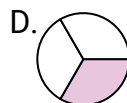
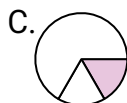
8)

Which choice best represents $\frac{1}{6}$?

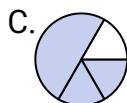
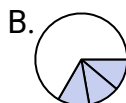
9)

Which choice best represents $\frac{2}{6}$?

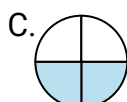
10)

Which choice best represents $\frac{1}{3}$?

11)

Which choice best represents $\frac{3}{4}$?

12)

Which choice best represents $\frac{2}{4}$?

1. _____

2. _____

3. _____

4. _____

5. _____

6. _____

7. _____

8. _____

9. _____

10. _____

11. _____

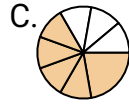
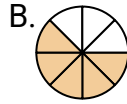
12. _____



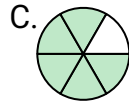
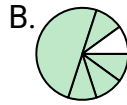
Determine which letter best represents each fraction.

Answers

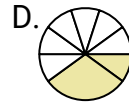
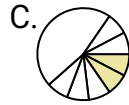
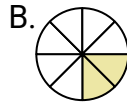
1)

Which choice best represents $\frac{5}{8}$?1. **B**

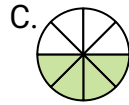
2)

Which choice best represents $\frac{5}{6}$?2. **C**

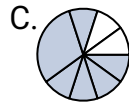
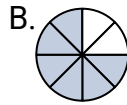
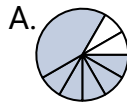
3)

Which choice best represents $\frac{2}{8}$?4. **C**

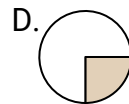
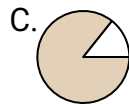
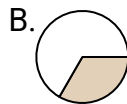
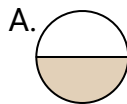
4)

Which choice best represents $\frac{4}{8}$?6. **A**

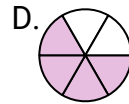
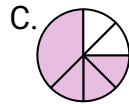
5)

Which choice best represents $\frac{6}{8}$?7. **D**

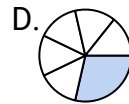
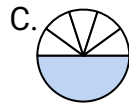
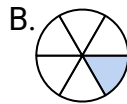
6)

Which choice best represents $\frac{1}{2}$?9. **D**

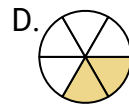
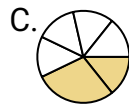
7)

Which choice best represents $\frac{4}{6}$?11. **A**

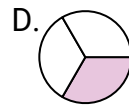
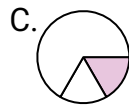
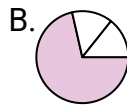
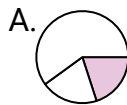
8)

Which choice best represents $\frac{1}{6}$?12. **C**

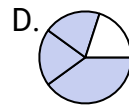
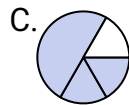
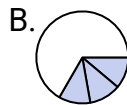
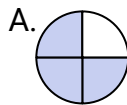
9)

Which choice best represents $\frac{2}{6}$?

10)

Which choice best represents $\frac{1}{3}$?

11)

Which choice best represents $\frac{3}{4}$?

12)

Which choice best represents $\frac{2}{4}$?