




Convert the fraction to a decimal.

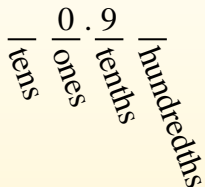
Answers

Converting from a fraction to a decimal is simple as long as you remember the place values.



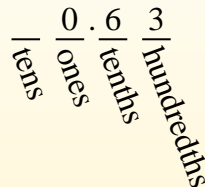
$$\frac{9}{10}$$

The example above is nine-tenths. Lets look at how we'd write that as a decimal.



$$\frac{63}{100}$$

We do the same thing for the problem above only make sure we're in the hundredths place.



Ex. **0.12**

Ex) $\frac{12}{100} = 0.12$

1) $\frac{8}{10} =$

2) $\frac{5}{10} =$

3) $\frac{51}{100} =$

4) $\frac{6}{10} =$

5) $\frac{8}{100} =$

6) $\frac{7}{10} =$

7) $\frac{1}{10} =$

8) $\frac{3}{10} =$

9) $\frac{59}{100} =$

10) $\frac{4}{10} =$

11) $\frac{5}{100} =$

12) $\frac{9}{100} =$

13) $\frac{58}{100} =$

14) $\frac{30}{100} =$

15) $\frac{4}{100} =$

16) $\frac{49}{100} =$

17) $\frac{1}{100} =$

18) $\frac{17}{100} =$

19) $\frac{7}{100} =$

20) $\frac{2}{100} =$

1. _____
2. _____
3. _____
4. _____
5. _____
6. _____
7. _____
8. _____
9. _____
10. _____
11. _____
12. _____
13. _____
14. _____
15. _____
16. _____
17. _____
18. _____
19. _____
20. _____



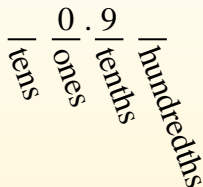
Convert the fraction to a decimal.

Converting from a fraction to a decimal is simple as long as you remember the place values.



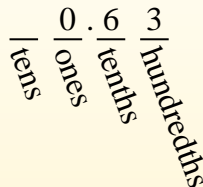
$$\frac{9}{10}$$

The example above is nine-tenths. Lets look at how we'd write that as a decimal.



$$\frac{63}{100}$$

We do the same thing for the problem above only make sure we're in the hundredths place.



Answers

Ex) $\frac{12}{100} = 0.12$

1) $\frac{8}{10} = 0.8$

2) $\frac{5}{10} = 0.5$

3) $\frac{51}{100} = 0.51$

4) $\frac{6}{10} = 0.6$

5) $\frac{8}{100} = 0.08$

6) $\frac{7}{10} = 0.7$

7) $\frac{1}{10} = 0.1$

8) $\frac{3}{10} = 0.3$

9) $\frac{59}{100} = 0.59$

10) $\frac{4}{10} = 0.4$

11) $\frac{5}{100} = 0.05$

12) $\frac{9}{100} = 0.09$

13) $\frac{58}{100} = 0.58$

14) $\frac{30}{100} = 0.30$

15) $\frac{4}{100} = 0.04$

16) $\frac{49}{100} = 0.49$

17) $\frac{1}{100} = 0.01$

18) $\frac{17}{100} = 0.17$

19) $\frac{7}{100} = 0.07$

20) $\frac{2}{100} = 0.02$

- Ex. 0.12
- 1. 0.8
- 2. 0.5
- 3. 0.51
- 4. 0.6
- 5. 0.08
- 6. 0.7
- 7. 0.1
- 8. 0.3
- 9. 0.59
- 10. 0.4
- 11. 0.05
- 12. 0.09
- 13. 0.58
- 14. 0.30
- 15. 0.04
- 16. 0.49
- 17. 0.01
- 18. 0.17
- 19. 0.07
- 20. 0.02



Convert the fraction to a decimal.

$$\frac{9}{10}$$

$$\frac{63}{100}$$

Converting from a fraction to a decimal is simple as long as you remember the place values.

The example above is nine-tenths. Lets look at how we'd write that as a decimal.

We do the same thing for the problem above only make sure we're in the hundredths place.

tens
ones
tenths
hundredths

0 . 9
tens ones tenths hundredths

0 . 6 3
tens ones tenths hundredths

Answers

 Ex. 0.04

1. _____

2. _____

3. _____

4. _____

5. _____

6. _____

7. _____

8. _____

9. _____

10. _____

11. _____

12. _____

13. _____

14. _____

15. _____

16. _____

17. _____

18. _____

19. _____

20. _____

Ex) $\frac{4}{100} = 0.04$

1) $\frac{9}{10} =$

2) $\frac{3}{10} =$

3) $\frac{1}{100} =$

4) $\frac{2}{100} =$

5) $\frac{44}{100} =$

6) $\frac{87}{100} =$

7) $\frac{80}{100} =$

8) $\frac{38}{100} =$

9) $\frac{6}{100} =$

10) $\frac{55}{100} =$

11) $\frac{7}{10} =$

12) $\frac{7}{100} =$

13) $\frac{2}{10} =$

14) $\frac{1}{10} =$

15) $\frac{5}{100} =$

16) $\frac{4}{10} =$

17) $\frac{3}{100} =$

18) $\frac{97}{100} =$


19) $\frac{70}{100} =$

20) $\frac{5}{10} =$



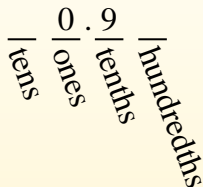
Convert the fraction to a decimal.

Converting from a fraction to a decimal is simple as long as you remember the place values.



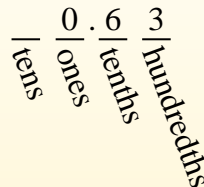
$$\frac{9}{10}$$

The example above is nine-tenths. Lets look at how we'd write that as a decimal.



$$\frac{63}{100}$$

We do the same thing for the problem above only make sure we're in the hundredths place.



Answers

- Ex. 0.04
- 1. 0.9
- 2. 0.3
- 3. 0.01
- 4. 0.02
- 5. 0.44
- 6. 0.87
- 7. 0.80
- 8. 0.38
- 9. 0.06
- 10. 0.55
- 11. 0.7
- 12. 0.07
- 13. 0.2
- 14. 0.1
- 15. 0.05
- 16. 0.4
- 17. 0.03
- 18. 0.97
- 19. 0.70
- 20. 0.5

Ex) $\frac{4}{100} = 0.04$

1) $\frac{9}{10} = 0.9$

2) $\frac{3}{10} = 0.3$

3) $\frac{1}{100} = 0.01$

4) $\frac{2}{100} = 0.02$

5) $\frac{44}{100} = 0.44$

6) $\frac{87}{100} = 0.87$

7) $\frac{80}{100} = 0.80$

8) $\frac{38}{100} = 0.38$

9) $\frac{6}{100} = 0.06$

10) $\frac{55}{100} = 0.55$

11) $\frac{7}{10} = 0.7$

12) $\frac{7}{100} = 0.07$

13) $\frac{2}{10} = 0.2$

14) $\frac{1}{10} = 0.1$

15) $\frac{5}{100} = 0.05$

16) $\frac{4}{10} = 0.4$

17) $\frac{3}{100} = 0.03$

18) $\frac{97}{100} = 0.97$

19) $\frac{70}{100} = 0.70$

20) $\frac{5}{10} = 0.5$


Convert the fraction to a decimal.

$$\frac{9}{10}$$

$$\frac{63}{100}$$

Converting from a fraction to a decimal is simple as long as you remember the place values.

The example above is nine-tenths. Lets look at how we'd write that as a decimal.

We do the same thing for the problem above only make sure we're in the hundredths place.

tens
ones
tenths
hundredths

tens
ones
tenths
hundredths

tens
ones
tenths
hundredths

Answers

 Ex. 0.1

1. _____

2. _____

3. _____

4. _____

5. _____

6. _____

7. _____

8. _____

9. _____

10. _____

11. _____

12. _____

13. _____

14. _____

15. _____

16. _____

17. _____

18. _____

19. _____

20. _____

Ex) $\frac{1}{10} = 0.1$

1) $\frac{5}{100} =$

2) $\frac{2}{100} =$

3) $\frac{62}{100} =$

4) $\frac{7}{100} =$

5) $\frac{6}{100} =$

6) $\frac{69}{100} =$

7) $\frac{8}{10} =$

8) $\frac{81}{100} =$

9) $\frac{3}{100} =$

10) $\frac{5}{10} =$

11) $\frac{7}{10} =$

12) $\frac{36}{100} =$

13) $\frac{4}{10} =$

14) $\frac{9}{100} =$

15) $\frac{1}{100} =$

16) $\frac{76}{100} =$

17) $\frac{59}{100} =$

18) $\frac{2}{10} =$

19) $\frac{99}{100} =$

20) $\frac{6}{10} =$



Convert the fraction to a decimal.

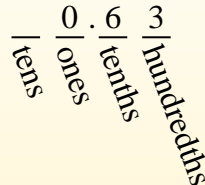
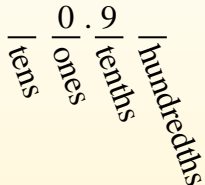

$$\frac{9}{10}$$

$$\frac{63}{100}$$

Converting from a fraction to a decimal is simple as long as you remember the place values.

The example above is nine-tenths. Lets look at how we'd write that as a decimal.

We do the same thing for the problem above only make sure we're in the hundredths place.



Answers

- Ex. 0.1
- 1. 0.05
- 2. 0.02
- 3. 0.62
- 4. 0.07
- 5. 0.06
- 6. 0.69
- 7. 0.8
- 8. 0.81
- 9. 0.03
- 10. 0.5
- 11. 0.7
- 12. 0.36
- 13. 0.4
- 14. 0.09
- 15. 0.01
- 16. 0.76
- 17. 0.59
- 18. 0.2
- 19. 0.99
- 20. 0.6

Ex) $\frac{1}{10} = 0.1$

1) $\frac{5}{100} = 0.05$

2) $\frac{2}{100} = 0.02$

3) $\frac{62}{100} = 0.62$

4) $\frac{7}{100} = 0.07$

5) $\frac{6}{100} = 0.06$

6) $\frac{69}{100} = 0.69$

7) $\frac{8}{10} = 0.8$

8) $\frac{81}{100} = 0.81$

9) $\frac{3}{100} = 0.03$

10) $\frac{5}{10} = 0.5$

11) $\frac{7}{10} = 0.7$

12) $\frac{36}{100} = 0.36$

13) $\frac{4}{10} = 0.4$

14) $\frac{9}{100} = 0.09$

15) $\frac{1}{100} = 0.01$

16) $\frac{76}{100} = 0.76$

17) $\frac{59}{100} = 0.59$

18) $\frac{2}{10} = 0.2$

19) $\frac{99}{100} = 0.99$

20) $\frac{6}{10} = 0.6$



Convert the fraction to a decimal.

$$\frac{9}{10}$$

$$\frac{63}{100}$$

Converting from a fraction to a decimal is simple as long as you remember the place values.

The example above is nine-tenths. Lets look at how we'd write that as a decimal.

We do the same thing for the problem above only make sure we're in the hundredths place.

tens
ones
tenths
hundredths

tens
ones
tenths
hundredths

tens
ones
tenths
hundredths

Answers

 Ex. 0.07

1. _____

2. _____

3. _____

4. _____

5. _____

6. _____

7. _____

8. _____

9. _____

10. _____

11. _____

12. _____

13. _____

14. _____

15. _____

16. _____

17. _____

18. _____

19. _____

20. _____

Ex) $\frac{7}{100} = 0.07$

1) $\frac{89}{100} =$

2) $\frac{62}{100} =$

3) $\frac{44}{100} =$

4) $\frac{9}{10} =$

5) $\frac{4}{10} =$

6) $\frac{12}{100} =$

7) $\frac{6}{100} =$

8) $\frac{7}{10} =$

9) $\frac{23}{100} =$

10) $\frac{8}{100} =$

11) $\frac{2}{10} =$

12) $\frac{72}{100} =$

13) $\frac{6}{10} =$

14) $\frac{3}{100} =$

15) $\frac{8}{10} =$

16) $\frac{5}{100} =$

17) $\frac{11}{100} =$

18) $\frac{4}{100} =$


19) $\frac{2}{100} =$

20) $\frac{5}{10} =$

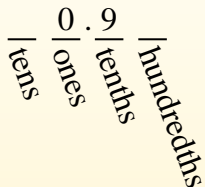


Convert the fraction to a decimal.

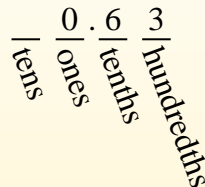
Converting from a fraction to a decimal is simple as long as you remember the place values.



$\frac{9}{10}$
The example above is nine-tenths. Lets look at how we'd write that as a decimal.



$\frac{63}{100}$
We do the same thing for the problem above only make sure we're in the hundredths place.



Ex) $\frac{7}{100} = 0.07$

1) $\frac{89}{100} = 0.89$

2) $\frac{62}{100} = 0.62$

3) $\frac{44}{100} = 0.44$

4) $\frac{9}{10} = 0.9$

5) $\frac{4}{10} = 0.4$

6) $\frac{12}{100} = 0.12$

7) $\frac{6}{100} = 0.06$

8) $\frac{7}{10} = 0.7$

9) $\frac{23}{100} = 0.23$

10) $\frac{8}{100} = 0.08$

11) $\frac{2}{10} = 0.2$

12) $\frac{72}{100} = 0.72$

13) $\frac{6}{10} = 0.6$

14) $\frac{3}{100} = 0.03$

15) $\frac{8}{10} = 0.8$

16) $\frac{5}{100} = 0.05$

17) $\frac{11}{100} = 0.11$

18) $\frac{4}{100} = 0.04$

19) $\frac{2}{100} = 0.02$

20) $\frac{5}{10} = 0.5$

Answers

Ex. 0.07

1. 0.89

2. 0.62

3. 0.44

4. 0.9

5. 0.4

6. 0.12

7. 0.06

8. 0.7

9. 0.23

10. 0.08

11. 0.2

12. 0.72

13. 0.6

14. 0.03

15. 0.8

16. 0.05

17. 0.11

18. 0.04

19. 0.02

20. 0.5

20. 0.5



Convert the fraction to a decimal.

Converting from a fraction to a decimal is simple as long as you remember the place values.

tens
ones
tenths
hundredths

$$\frac{9}{10}$$

The example above is nine-tenths. Lets look at how we'd write that as a decimal.

0.9
tens ones tenths hundredths

$$\frac{63}{100}$$

We do the same thing for the problem above only make sure we're in the hundredths place.

0.63
tens ones tenths hundredths

Answers

 Ex. 0.63

1. _____

2. _____

3. _____

4. _____

5. _____

6. _____

7. _____

8. _____

9. _____

10. _____

11. _____

12. _____

13. _____

14. _____

15. _____

16. _____

17. _____

18. _____

19. _____

20. _____

Ex) $\frac{63}{100} = 0.63$

1) $\frac{9}{10} =$

2) $\frac{3}{100} =$

3) $\frac{3}{10} =$

4) $\frac{7}{10} =$

5) $\frac{2}{10} =$

6) $\frac{5}{10} =$

7) $\frac{4}{100} =$

8) $\frac{4}{10} =$

9) $\frac{5}{100} =$

10) $\frac{8}{100} =$

11) $\frac{8}{10} =$

12) $\frac{2}{100} =$

13) $\frac{42}{100} =$

14) $\frac{19}{100} =$

15) $\frac{58}{100} =$

16) $\frac{6}{100} =$

17) $\frac{83}{100} =$

18) $\frac{26}{100} =$

19) $\frac{74}{100} =$

20) $\frac{1}{100} =$



Convert the fraction to a decimal.

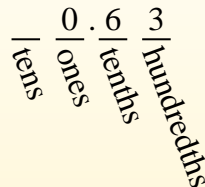
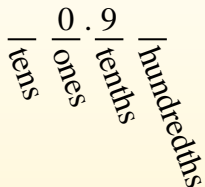

$$\frac{9}{10}$$

$$\frac{63}{100}$$

Converting from a fraction to a decimal is simple as long as you remember the place values.

The example above is nine-tenths. Lets look at how we'd write that as a decimal.

We do the same thing for the problem above only make sure we're in the hundredths place.



Answers

- Ex. 0.63
- 1. 0.9
- 2. 0.03
- 3. 0.3
- 4. 0.7
- 5. 0.2
- 6. 0.5
- 7. 0.04
- 8. 0.4
- 9. 0.05
- 10. 0.08
- 11. 0.8
- 12. 0.02
- 13. 0.42
- 14. 0.19
- 15. 0.58
- 16. 0.06
- 17. 0.83
- 18. 0.26
- 19. 0.74
- 20. 0.01

Ex) $\frac{63}{100} = 0.63$

1) $\frac{9}{10} = 0.9$

2) $\frac{3}{100} = 0.03$

3) $\frac{3}{10} = 0.3$

4) $\frac{7}{10} = 0.7$

5) $\frac{2}{10} = 0.2$

6) $\frac{5}{10} = 0.5$

7) $\frac{4}{100} = 0.04$

8) $\frac{4}{10} = 0.4$

9) $\frac{5}{100} = 0.05$

10) $\frac{8}{100} = 0.08$

11) $\frac{8}{10} = 0.8$

12) $\frac{2}{100} = 0.02$

13) $\frac{42}{100} = 0.42$

14) $\frac{19}{100} = 0.19$

15) $\frac{58}{100} = 0.58$

16) $\frac{6}{100} = 0.06$

17) $\frac{83}{100} = 0.83$

18) $\frac{26}{100} = 0.26$

19) $\frac{74}{100} = 0.74$

20) $\frac{1}{100} = 0.01$



Convert the fraction to a decimal.

Converting from a fraction to a decimal is simple as long as you remember the place values.

tens
ones
tenths
hundredths

$$\frac{9}{10}$$

The example above is nine-tenths. Lets look at how we'd write that as a decimal.

0.9
tens ones tenths hundredths

$$\frac{63}{100}$$

We do the same thing for the problem above only make sure we're in the hundredths place.

0.63
tens ones tenths hundredths

Answers

 Ex. 0.8

1. _____

2. _____

3. _____

4. _____

5. _____

6. _____

7. _____

8. _____

9. _____

10. _____

11. _____

12. _____

13. _____

14. _____

15. _____

16. _____

17. _____

18. _____

19. _____

20. _____

Ex) $\frac{8}{10} = 0.8$

1) $\frac{16}{100} =$

2) $\frac{6}{100} =$

3) $\frac{7}{100} =$

4) $\frac{3}{10} =$

5) $\frac{7}{10} =$

6) $\frac{2}{10} =$

7) $\frac{9}{100} =$

8) $\frac{3}{100} =$

9) $\frac{97}{100} =$

10) $\frac{4}{100} =$

11) $\frac{21}{100} =$

12) $\frac{5}{10} =$

13) $\frac{15}{100} =$

14) $\frac{42}{100} =$

15) $\frac{53}{100} =$

16) $\frac{2}{100} =$

17) $\frac{1}{10} =$

18) $\frac{8}{100} =$

19) $\frac{4}{10} =$

20) $\frac{46}{100} =$



Convert the fraction to a decimal.

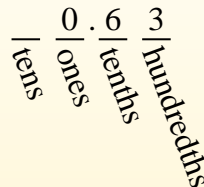
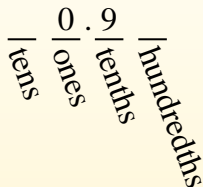

$$\frac{9}{10}$$

$$\frac{63}{100}$$

Converting from a fraction to a decimal is simple as long as you remember the place values.

The example above is nine-tenths. Lets look at how we'd write that as a decimal.

We do the same thing for the problem above only make sure we're in the hundredths place.



Answers

- Ex. 0.8
- 1. 0.16
- 2. 0.06
- 3. 0.07
- 4. 0.3
- 5. 0.7
- 6. 0.2
- 7. 0.09
- 8. 0.03
- 9. 0.97
- 10. 0.04
- 11. 0.21
- 12. 0.5
- 13. 0.15
- 14. 0.42
- 15. 0.53
- 16. 0.02
- 17. 0.1
- 18. 0.08
- 19. 0.4
- 20. 0.46

Ex) $\frac{8}{10} = 0.8$

1) $\frac{16}{100} = 0.16$

2) $\frac{6}{100} = 0.06$

3) $\frac{7}{100} = 0.07$

4) $\frac{3}{10} = 0.3$

5) $\frac{7}{10} = 0.7$

6) $\frac{2}{10} = 0.2$

7) $\frac{9}{100} = 0.09$

8) $\frac{3}{100} = 0.03$

9) $\frac{97}{100} = 0.97$

10) $\frac{4}{100} = 0.04$

11) $\frac{21}{100} = 0.21$

12) $\frac{5}{10} = 0.5$

13) $\frac{15}{100} = 0.15$

14) $\frac{42}{100} = 0.42$

15) $\frac{53}{100} = 0.53$

16) $\frac{2}{100} = 0.02$

17) $\frac{1}{10} = 0.1$

18) $\frac{8}{100} = 0.08$

19) $\frac{4}{10} = 0.4$

20) $\frac{46}{100} = 0.46$



Convert the fraction to a decimal.

Answers

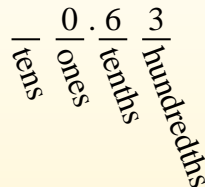
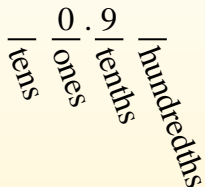

$$\frac{9}{10}$$

$$\frac{63}{100}$$

Converting from a fraction to a decimal is simple as long as you remember the place values.

The example above is nine-tenths. Lets look at how we'd write that as a decimal.

We do the same thing for the problem above only make sure we're in the hundredths place.



- Ex. 0.6
1. _____
 2. _____
 3. _____
 4. _____
 5. _____
 6. _____
 7. _____
 8. _____
 9. _____
 10. _____
 11. _____
 12. _____
 13. _____
 14. _____
 15. _____
 16. _____
 17. _____
 18. _____
 19. _____
 20. _____

Ex) $\frac{6}{10} = 0.6$

1) $\frac{70}{100} =$

2) $\frac{18}{100} =$

3) $\frac{4}{10} =$

4) $\frac{82}{100} =$

5) $\frac{7}{10} =$

6) $\frac{8}{100} =$

7) $\frac{2}{100} =$

8) $\frac{7}{100} =$

9) $\frac{2}{10} =$

10) $\frac{45}{100} =$

11) $\frac{50}{100} =$

12) $\frac{6}{100} =$

13) $\frac{1}{10} =$

14) $\frac{3}{10} =$

15) $\frac{80}{100} =$

16) $\frac{4}{100} =$

17) $\frac{60}{100} =$

18) $\frac{3}{100} =$


19) $\frac{9}{10} =$

20) $\frac{5}{100} =$



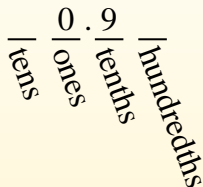
Convert the fraction to a decimal.

Converting from a fraction to a decimal is simple as long as you remember the place values.



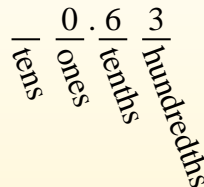
$$\frac{9}{10}$$

The example above is nine-tenths. Lets look at how we'd write that as a decimal.



$$\frac{63}{100}$$

We do the same thing for the problem above only make sure we're in the hundredths place.



Answers

Ex) $\frac{6}{10} = 0.6$

1) $\frac{70}{100} = 0.70$

2) $\frac{18}{100} = 0.18$

3) $\frac{4}{10} = 0.4$

4) $\frac{82}{100} = 0.82$

5) $\frac{7}{10} = 0.7$

6) $\frac{8}{100} = 0.08$

7) $\frac{2}{100} = 0.02$

8) $\frac{7}{100} = 0.07$

9) $\frac{2}{10} = 0.2$

10) $\frac{45}{100} = 0.45$

11) $\frac{50}{100} = 0.50$

12) $\frac{6}{100} = 0.06$

13) $\frac{1}{10} = 0.1$

14) $\frac{3}{10} = 0.3$

15) $\frac{80}{100} = 0.80$

16) $\frac{4}{100} = 0.04$

17) $\frac{60}{100} = 0.60$

18) $\frac{3}{100} = 0.03$

19) $\frac{9}{10} = 0.9$

20) $\frac{5}{100} = 0.05$

- Ex. 0.6
- 1. 0.70
- 2. 0.18
- 3. 0.4
- 4. 0.82
- 5. 0.7
- 6. 0.08
- 7. 0.02
- 8. 0.07
- 9. 0.2
- 10. 0.45
- 11. 0.50
- 12. 0.06
- 13. 0.1
- 14. 0.3
- 15. 0.80
- 16. 0.04
- 17. 0.60
- 18. 0.03
- 19. 0.9
- 20. 0.05



Convert the fraction to a decimal.

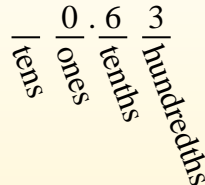
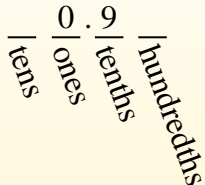

$$\frac{9}{10}$$

$$\frac{63}{100}$$

Converting from a fraction to a decimal is simple as long as you remember the place values.

The example above is nine-tenths. Lets look at how we'd write that as a decimal.

We do the same thing for the problem above only make sure we're in the hundredths place.



Answers

Ex. 0.05

1. _____

2. _____

3. _____

4. _____

5. _____

6. _____

7. _____

8. _____

9. _____

10. _____

11. _____

12. _____

13. _____

14. _____

15. _____

16. _____

17. _____

18. _____

19. _____

20. _____

Ex) $\frac{5}{100} = 0.05$

1) $\frac{6}{10} =$

2) $\frac{37}{100} =$

3) $\frac{2}{100} =$

4) $\frac{5}{10} =$

5) $\frac{7}{10} =$

6) $\frac{3}{100} =$

7) $\frac{3}{10} =$

8) $\frac{98}{100} =$

9) $\frac{91}{100} =$

10) $\frac{7}{100} =$

11) $\frac{6}{100} =$

12) $\frac{1}{10} =$

13) $\frac{4}{100} =$

14) $\frac{8}{100} =$

15) $\frac{4}{10} =$

16) $\frac{43}{100} =$

17) $\frac{2}{10} =$

18) $\frac{20}{100} =$


19) $\frac{21}{100} =$

20) $\frac{13}{100} =$



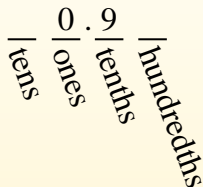
Convert the fraction to a decimal.

Converting from a fraction to a decimal is simple as long as you remember the place values.



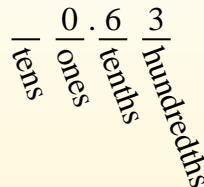
$$\frac{9}{10}$$

The example above is nine-tenths. Lets look at how we'd write that as a decimal.



$$\frac{63}{100}$$

We do the same thing for the problem above only make sure we're in the hundredths place.



Answers

- Ex. 0.05
- 1. 0.6
- 2. 0.37
- 3. 0.02
- 4. 0.5
- 5. 0.7
- 6. 0.03
- 7. 0.3
- 8. 0.98
- 9. 0.91
- 10. 0.07
- 11. 0.06
- 12. 0.1
- 13. 0.04
- 14. 0.08
- 15. 0.4
- 16. 0.43
- 17. 0.2
- 18. 0.20
- 19. 0.21
- 20. 0.13

Ex) $\frac{5}{100} = 0.05$

1) $\frac{6}{10} = 0.6$

2) $\frac{37}{100} = 0.37$

3) $\frac{2}{100} = 0.02$

4) $\frac{5}{10} = 0.5$

5) $\frac{7}{10} = 0.7$

6) $\frac{3}{100} = 0.03$

7) $\frac{3}{10} = 0.3$

8) $\frac{98}{100} = 0.98$

9) $\frac{91}{100} = 0.91$

10) $\frac{7}{100} = 0.07$

11) $\frac{6}{100} = 0.06$

12) $\frac{1}{10} = 0.1$

13) $\frac{4}{100} = 0.04$

14) $\frac{8}{100} = 0.08$

15) $\frac{4}{10} = 0.4$

16) $\frac{43}{100} = 0.43$

17) $\frac{2}{10} = 0.2$

18) $\frac{20}{100} = 0.20$

19) $\frac{21}{100} = 0.21$

20) $\frac{13}{100} = 0.13$



Convert the fraction to a decimal.

Converting from a fraction to a decimal is simple as long as you remember the place values.

tens
ones
tenths
hundredths

$$\frac{9}{10}$$

The example above is nine-tenths. Lets look at how we'd write that as a decimal.

0.9
tens ones tenths hundredths

$$\frac{63}{100}$$

We do the same thing for the problem above only make sure we're in the hundredths place.

0.63
tens ones tenths hundredths

Answers

- Ex. **0.8**
1. _____
 2. _____
 3. _____
 4. _____
 5. _____
 6. _____
 7. _____
 8. _____
 9. _____
 10. _____
 11. _____
 12. _____
 13. _____
 14. _____
 15. _____
 16. _____
 17. _____
 18. _____
 19. _____
 20. _____

Ex) $\frac{8}{10} = 0.8$

1) $\frac{7}{10} =$

2) $\frac{5}{100} =$

3) $\frac{2}{10} =$

4) $\frac{80}{100} =$

5) $\frac{3}{10} =$

6) $\frac{7}{100} =$

7) $\frac{9}{100} =$

8) $\frac{1}{100} =$

9) $\frac{8}{100} =$

10) $\frac{34}{100} =$

11) $\frac{9}{10} =$

12) $\frac{81}{100} =$

13) $\frac{4}{10} =$

14) $\frac{13}{100} =$

15) $\frac{5}{10} =$

16) $\frac{6}{100} =$

17) $\frac{4}{100} =$

18) $\frac{85}{100} =$

19) $\frac{49}{100} =$

20) $\frac{25}{100} =$



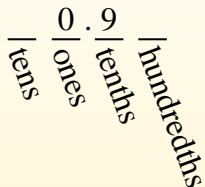
Convert the fraction to a decimal.

Converting from a fraction to a decimal is simple as long as you remember the place values.



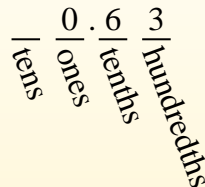
$$\frac{9}{10}$$

The example above is nine-tenths. Lets look at how we'd write that as a decimal.



$$\frac{63}{100}$$

We do the same thing for the problem above only make sure we're in the hundredths place.



Answers

Ex) $\frac{8}{10} = 0.8$

1) $\frac{7}{10} = 0.7$

2) $\frac{5}{100} = 0.05$

3) $\frac{2}{10} = 0.2$

4) $\frac{80}{100} = 0.80$

5) $\frac{3}{10} = 0.3$

6) $\frac{7}{100} = 0.07$

7) $\frac{9}{100} = 0.09$

8) $\frac{1}{100} = 0.01$

9) $\frac{8}{100} = 0.08$

10) $\frac{34}{100} = 0.34$

11) $\frac{9}{10} = 0.9$

12) $\frac{81}{100} = 0.81$

13) $\frac{4}{10} = 0.4$

14) $\frac{13}{100} = 0.13$

15) $\frac{5}{10} = 0.5$

16) $\frac{6}{100} = 0.06$

17) $\frac{4}{100} = 0.04$

18) $\frac{85}{100} = 0.85$

19) $\frac{49}{100} = 0.49$

20) $\frac{25}{100} = 0.25$

- Ex. 0.8
- 1. 0.7
- 2. 0.05
- 3. 0.2
- 4. 0.80
- 5. 0.3
- 6. 0.07
- 7. 0.09
- 8. 0.01
- 9. 0.08
- 10. 0.34
- 11. 0.9
- 12. 0.81
- 13. 0.4
- 14. 0.13
- 15. 0.5
- 16. 0.06
- 17. 0.04
- 18. 0.85
- 19. 0.49
- 20. 0.25


Convert the fraction to a decimal.

$$\frac{9}{10}$$

$$\frac{63}{100}$$

Converting from a fraction to a decimal is simple as long as you remember the place values.

The example above is nine-tenths. Lets look at how we'd write that as a decimal.

We do the same thing for the problem above only make sure we're in the hundredths place.

tens
ones
tenths
hundredths

tens 0 . 9
ones tenths
hundredths

tens 0 . 6 3
ones tenths hundredths

Answers

 Ex. 0.5

1. _____

2. _____

3. _____

4. _____

5. _____

6. _____

7. _____

8. _____

9. _____

10. _____

11. _____

12. _____

13. _____

14. _____

15. _____

16. _____

17. _____

18. _____

19. _____

20. _____

Ex) $\frac{5}{10} = 0.5$

1) $\frac{9}{10} =$

2) $\frac{8}{10} =$

3) $\frac{15}{100} =$

4) $\frac{7}{100} =$

5) $\frac{92}{100} =$

6) $\frac{2}{100} =$

7) $\frac{51}{100} =$

8) $\frac{3}{10} =$

9) $\frac{9}{100} =$

10) $\frac{1}{10} =$

11) $\frac{1}{100} =$

12) $\frac{7}{10} =$

13) $\frac{2}{10} =$

14) $\frac{5}{100} =$

15) $\frac{4}{100} =$

16) $\frac{29}{100} =$

17) $\frac{31}{100} =$

18) $\frac{35}{100} =$

19) $\frac{8}{100} =$

20) $\frac{53}{100} =$



Convert the fraction to a decimal.

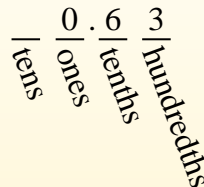
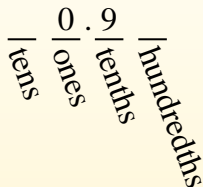

$$\frac{9}{10}$$

$$\frac{63}{100}$$

Converting from a fraction to a decimal is simple as long as you remember the place values.

The example above is nine-tenths. Lets look at how we'd write that as a decimal.

We do the same thing for the problem above only make sure we're in the hundredths place.



Answers

Ex) $\frac{5}{10} = 0.5$

1) $\frac{9}{10} = 0.9$

2) $\frac{8}{10} = 0.8$

3) $\frac{15}{100} = 0.15$

4) $\frac{7}{100} = 0.07$

5) $\frac{92}{100} = 0.92$

6) $\frac{2}{100} = 0.02$

7) $\frac{51}{100} = 0.51$

8) $\frac{3}{10} = 0.3$

9) $\frac{9}{100} = 0.09$

10) $\frac{1}{10} = 0.1$

11) $\frac{1}{100} = 0.01$

12) $\frac{7}{10} = 0.7$

13) $\frac{2}{10} = 0.2$

14) $\frac{5}{100} = 0.05$

15) $\frac{4}{100} = 0.04$

16) $\frac{29}{100} = 0.29$

17) $\frac{31}{100} = 0.31$

18) $\frac{35}{100} = 0.35$

19) $\frac{8}{100} = 0.08$

20) $\frac{53}{100} = 0.53$

- Ex. 0.5
- 1. 0.9
- 2. 0.8
- 3. 0.15
- 4. 0.07
- 5. 0.92
- 6. 0.02
- 7. 0.51
- 8. 0.3
- 9. 0.09
- 10. 0.1
- 11. 0.01
- 12. 0.7
- 13. 0.2
- 14. 0.05
- 15. 0.04
- 16. 0.29
- 17. 0.31
- 18. 0.35
- 19. 0.08
- 20. 0.53