



Convert the fraction to a decimal.

Answers

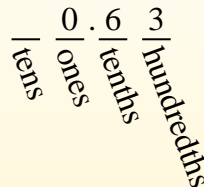
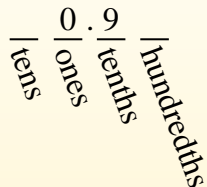

$$\frac{9}{10}$$

$$\frac{63}{100}$$

Converting from a fraction to a decimal is simple as long as you remember the place values.

The example above is nine-tenths. Lets look at how we'd write that as a decimal.

We do the same thing for the problem above only make sure we're in the hundredths place.



- Ex. 0.6
1. _____
 2. _____
 3. _____
 4. _____
 5. _____
 6. _____
 7. _____
 8. _____
 9. _____
 10. _____
 11. _____
 12. _____
 13. _____
 14. _____
 15. _____
 16. _____
 17. _____
 18. _____
 19. _____
 20. _____

Ex) $\frac{6}{10} = 0.6$

1) $\frac{70}{100} =$

2) $\frac{18}{100} =$

3) $\frac{4}{10} =$

4) $\frac{82}{100} =$

5) $\frac{7}{10} =$

6) $\frac{8}{100} =$

7) $\frac{2}{100} =$

8) $\frac{7}{100} =$

9) $\frac{2}{10} =$

10) $\frac{45}{100} =$

11) $\frac{50}{100} =$

12) $\frac{6}{100} =$

13) $\frac{1}{10} =$

14) $\frac{3}{10} =$

15) $\frac{80}{100} =$

16) $\frac{4}{100} =$

17) $\frac{60}{100} =$

18) $\frac{3}{100} =$

19) $\frac{9}{10} =$

20) $\frac{5}{100} =$



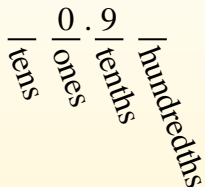
Convert the fraction to a decimal.

Converting from a fraction to a decimal is simple as long as you remember the place values.



$$\frac{9}{10}$$

The example above is nine-tenths. Lets look at how we'd write that as a decimal.



$$\frac{63}{100}$$

We do the same thing for the problem above only make sure we're in the hundredths place.



Answers

Ex) $\frac{6}{10} = 0.6$

1) $\frac{70}{100} = 0.70$

2) $\frac{18}{100} = 0.18$

3) $\frac{4}{10} = 0.4$

4) $\frac{82}{100} = 0.82$

5) $\frac{7}{10} = 0.7$

6) $\frac{8}{100} = 0.08$

7) $\frac{2}{100} = 0.02$

8) $\frac{7}{100} = 0.07$

9) $\frac{2}{10} = 0.2$

10) $\frac{45}{100} = 0.45$

11) $\frac{50}{100} = 0.50$

12) $\frac{6}{100} = 0.06$

13) $\frac{1}{10} = 0.1$

14) $\frac{3}{10} = 0.3$

15) $\frac{80}{100} = 0.80$

16) $\frac{4}{100} = 0.04$

17) $\frac{60}{100} = 0.60$

18) $\frac{3}{100} = 0.03$

19) $\frac{9}{10} = 0.9$

20) $\frac{5}{100} = 0.05$

- Ex. 0.6
- 1. 0.70
- 2. 0.18
- 3. 0.4
- 4. 0.82
- 5. 0.7
- 6. 0.08
- 7. 0.02
- 8. 0.07
- 9. 0.2
- 10. 0.45
- 11. 0.50
- 12. 0.06
- 13. 0.1
- 14. 0.3
- 15. 0.80
- 16. 0.04
- 17. 0.60
- 18. 0.03
- 19. 0.9
- 20. 0.05