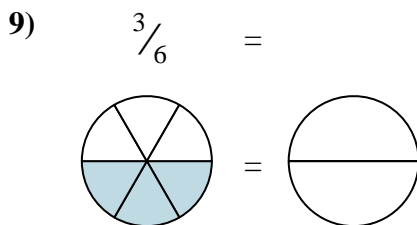
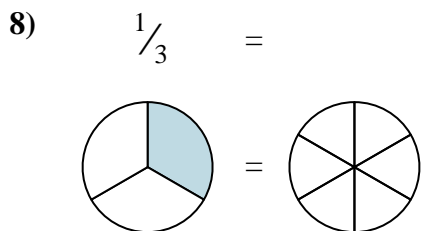
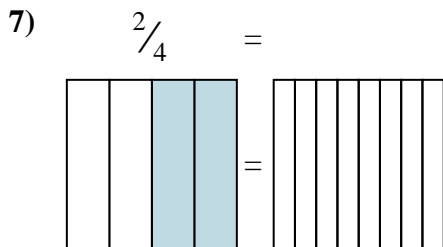
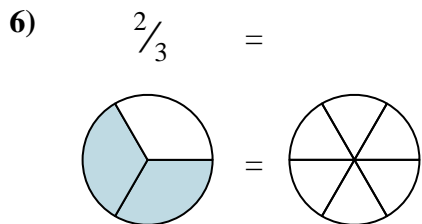
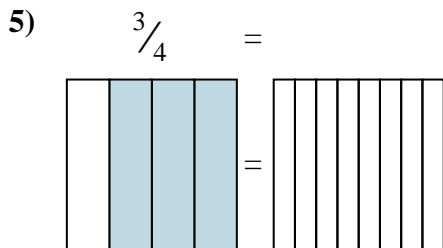
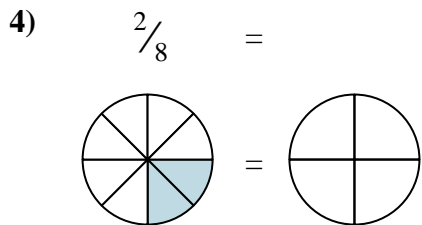
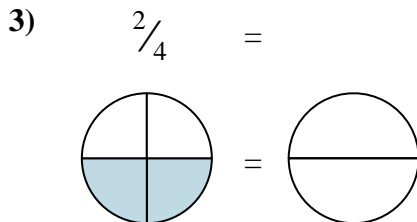
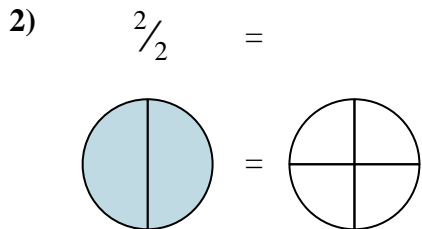
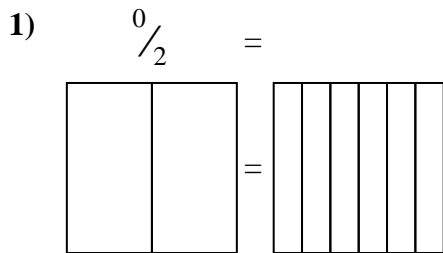
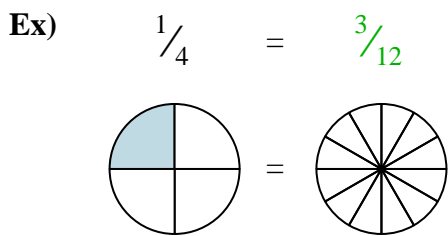




Shade in the visual fraction to find the equivalent fraction.



**Answers**

Ex.  $\frac{3}{12}$

1. \_\_\_\_\_

2. \_\_\_\_\_

3. \_\_\_\_\_

4. \_\_\_\_\_

5. \_\_\_\_\_

6. \_\_\_\_\_

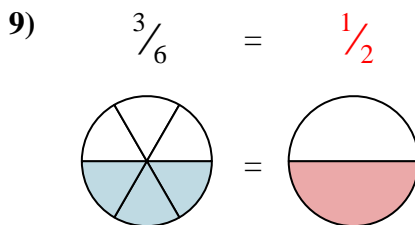
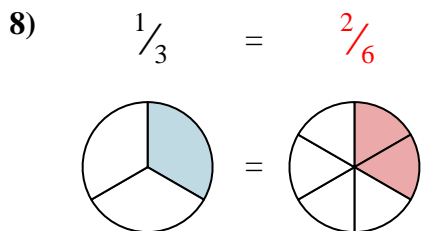
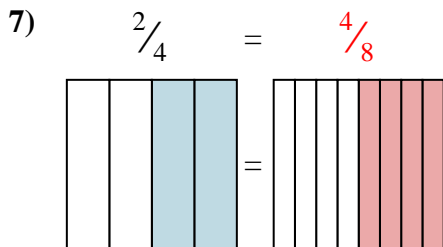
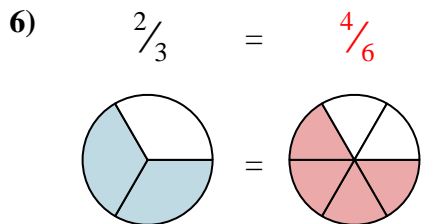
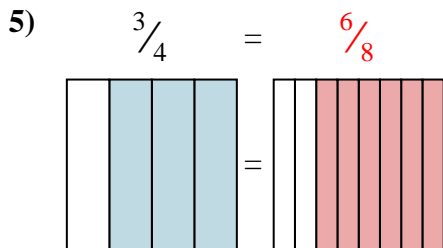
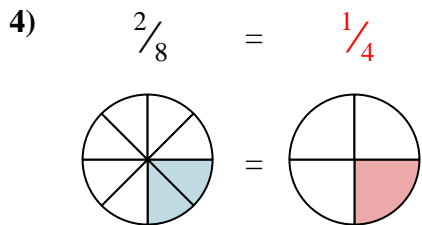
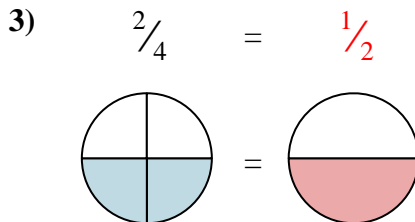
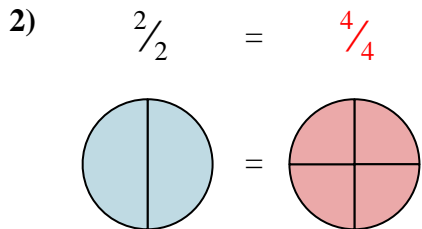
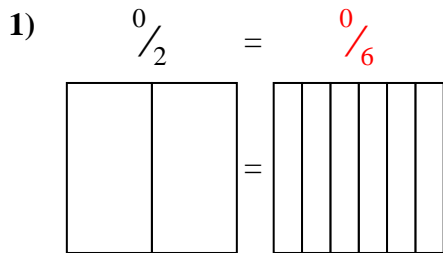
7. \_\_\_\_\_

8. \_\_\_\_\_

9. \_\_\_\_\_



Shade in the visual fraction to find the equivalent fraction.



Answers

- Ex.  $\frac{3}{12}$
1.  $\frac{0}{6}$
2.  $\frac{4}{4}$
3.  $\frac{1}{2}$
4.  $\frac{1}{4}$
5.  $\frac{6}{8}$
6.  $\frac{4}{6}$
7.  $\frac{4}{8}$
8.  $\frac{2}{6}$
9.  $\frac{1}{2}$