


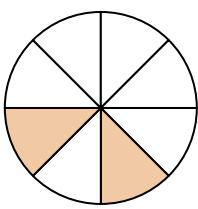


Write the shaded amount in word form.

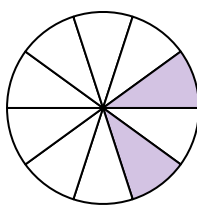
Ex)



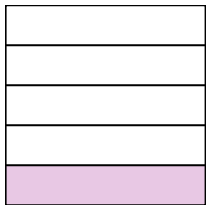
1)




2)



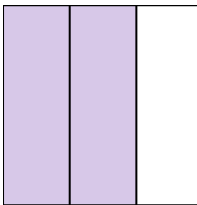
3)



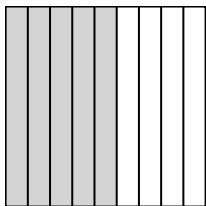
4)



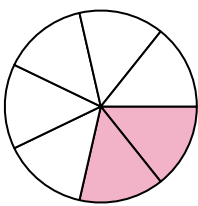
5)




6)




7)




8)




9)




10)




11)



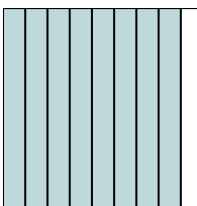
12)



13)



14)

**Answers**Ex. seven-eighths

1. _____

2. _____

3. _____

4. _____

5. _____

6. _____

7. _____

8. _____

9. _____

10. _____

11. _____

12. _____


13. _____

14. _____

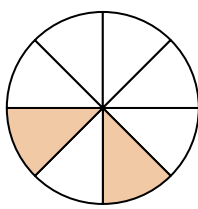


Write the shaded amount in word form.

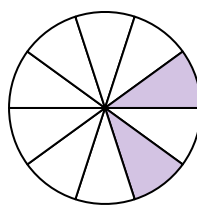
Ex)




1)




2)



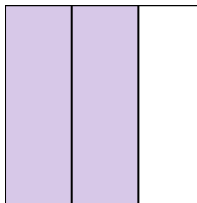
3)



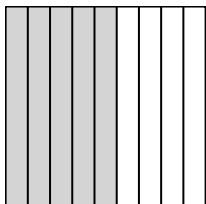
4)



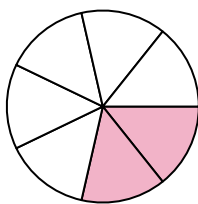
5)




6)



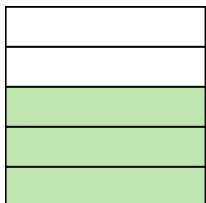
7)



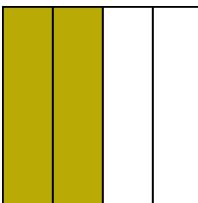
8)




9)




10)




11)



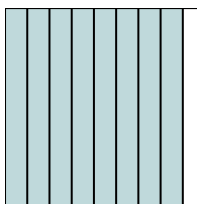
12)



13)



14)

**Answers**Ex. **seven-eighths**1. **two-eighths**2. **two-tenths**3. **one-fifth**4. **one-half**5. **two-thirds**6. **five-ninths**7. **two-sevenths**8. **one-third**9. **three-fifths**10. **two-fourths**11. **five-sixths**12. **eight-tenths**13. **two-sixths**14. **eight-ninths**