


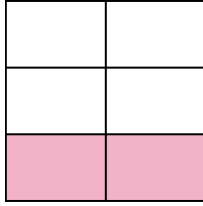


Write the shaded amount in word form.

Ex)



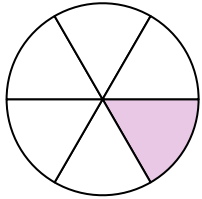
1)




2)



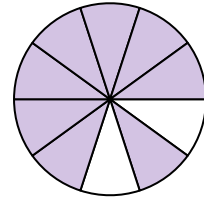
3)



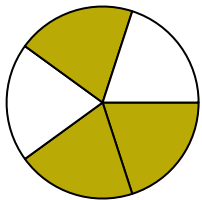
4)




5)



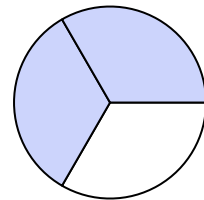
6)



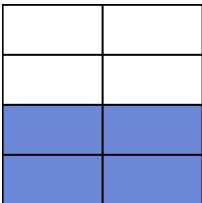
7)



8)




9)



10)




11)



12)



13)



14)



Answers

Ex. **one-half**

1. _____

2. _____

3. _____

4. _____

5. _____

6. _____

7. _____

8. _____

9. _____

10. _____

11. _____

12. _____

13. _____

14. _____

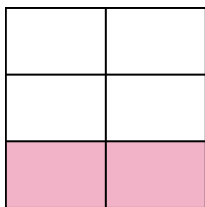


Write the shaded amount in word form.

Ex)



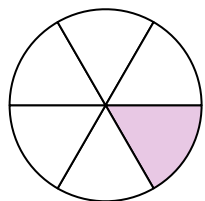
1)



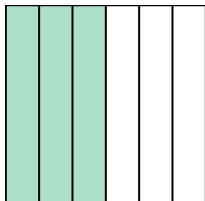
2)



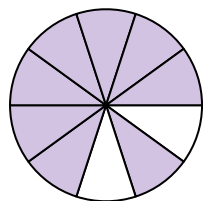
3)



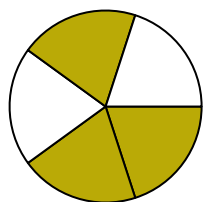
4)




5)



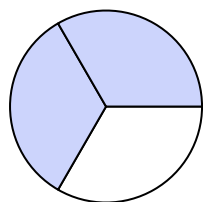
6)



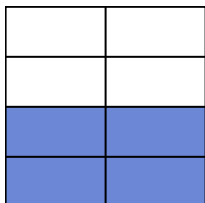
7)



8)




9)



10)




11)



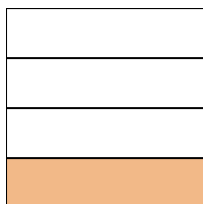
12)



13)



14)

**Answers**

Ex.

one-half

1.

two-fifths

2.

two-ninths

3.

one-sixth

4.

three-sixths

5.

eight-tenths

6.

three-fifths

7.

three-fourths

8.

two-thirds

9.

four-sevenths

10.

one-tenth

11.

two-thirds

12.

four-eighths

13.

one-half

14.

one-fourth