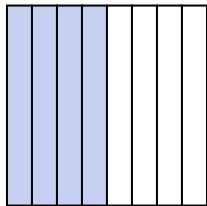


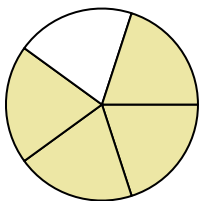


Write the shaded amount in word form.


Ex)




1)



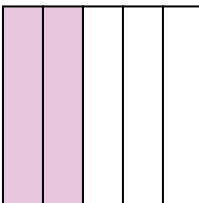
2)



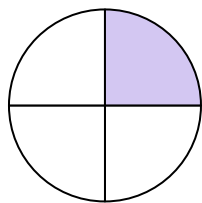
3)




4)



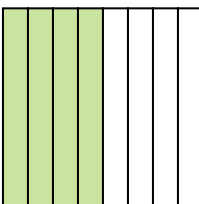
5)



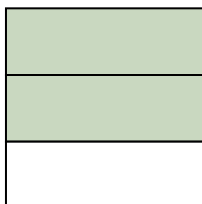
6)




7)



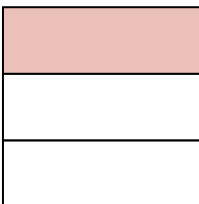
8)



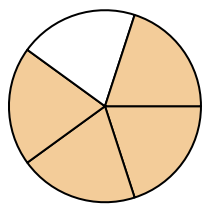
9)



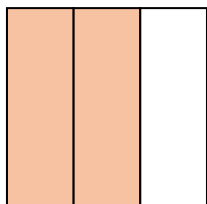
10)



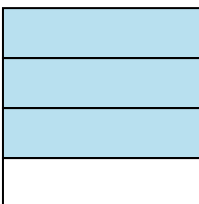
11)




12)



13)



14)

**Answers**Ex. four-eighths

1. \_\_\_\_\_

2. \_\_\_\_\_

3. \_\_\_\_\_

4. \_\_\_\_\_

5. \_\_\_\_\_

6. \_\_\_\_\_

7. \_\_\_\_\_

8. \_\_\_\_\_

9. \_\_\_\_\_

10. \_\_\_\_\_

11. \_\_\_\_\_

12. \_\_\_\_\_

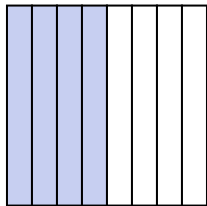
13. \_\_\_\_\_

14. \_\_\_\_\_

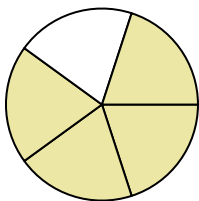


Write the shaded amount in word form.


Ex)




1)



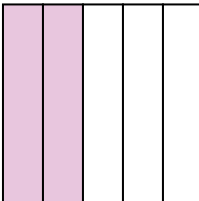
2)



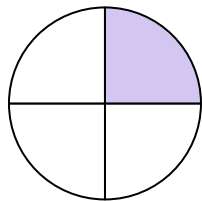
3)




4)



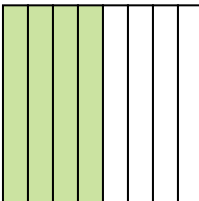
5)



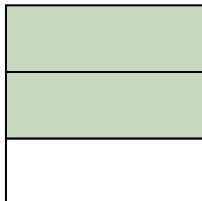
6)




7)



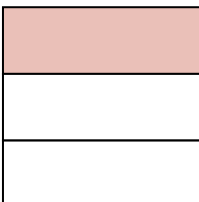
8)



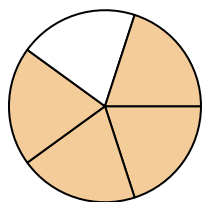
9)



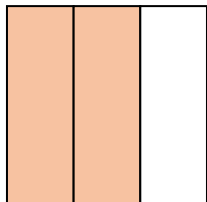
10)



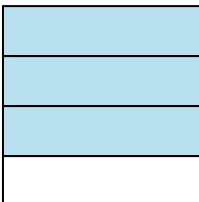
11)




12)



13)



14)

**Answers**

Ex.

**four-eighths**

1.

**four-fifths**

2.

**one-half**

3.

**one-half**

4.

**two-fifths**

5.

**one-fourth**

6.

**one-half**

7.

**four-eighths**

8.

**two-thirds**

9.

**three-fourths**

10.

**one-third**

11.

**four-fifths**

12.

**two-thirds**

13.

**three-fourths**

14.

**six-eighths**