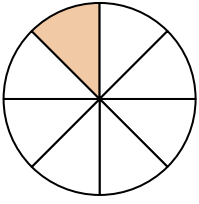


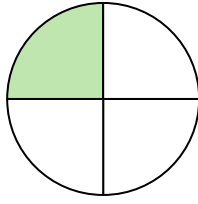


Write the shaded amount as a fraction.

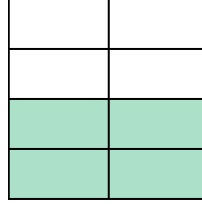
Ex)



1)



2)



Answers

Ex. $\frac{1}{8}$

1. _____

2. _____

3. _____

4. _____

5. _____

6. _____

7. _____

8. _____

9. _____

10. _____


11. _____

12. _____


13. _____

14. _____

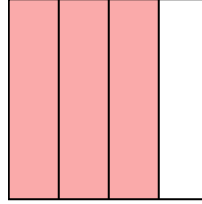
3)



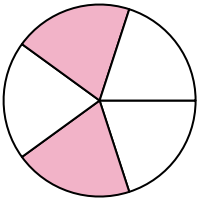
4)



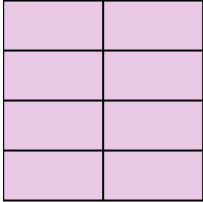
5)




6)



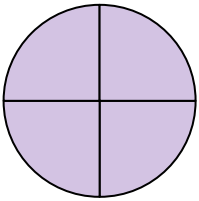
7)




8)



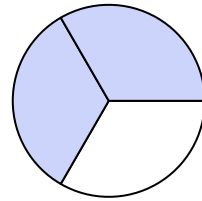
9)



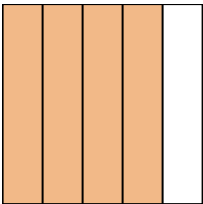
10)



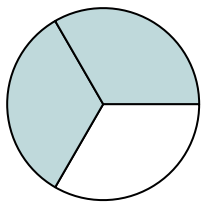
11)




12)



13)



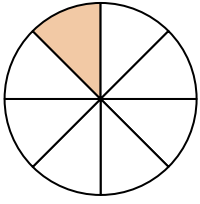
14)



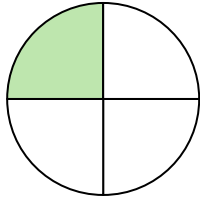


Write the shaded amount as a fraction.

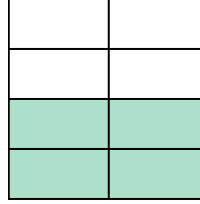
Ex)



1)



2)



Answers

Ex. 1/8

1. 1/4

2. 4/8

3. 2/2

4. 3/3

5. 3/4

6. 2/5

7. 8/8

8. 1/2

9. 4/4

10. 1/5


11. 2/3

12. 4/5

13. 2/3

14. 1/2

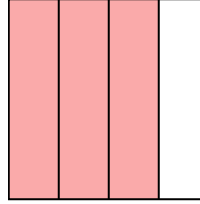
3)



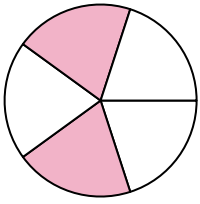
4)



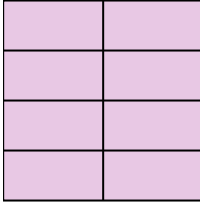
5)




6)



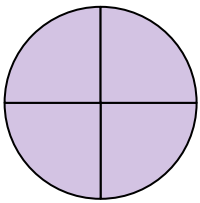
7)




8)



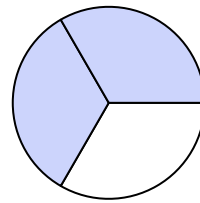
9)



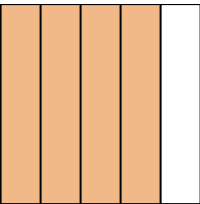
10)



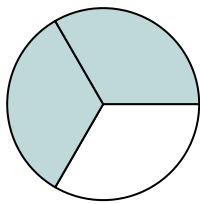
11)



12)



13)



14)

