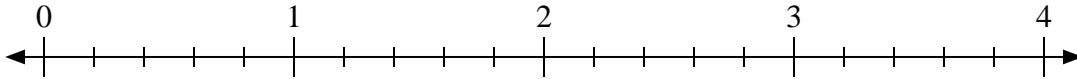


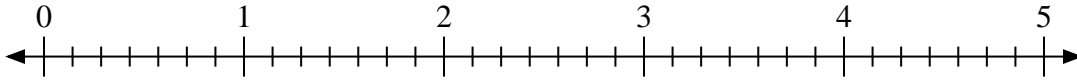


Use the numberline to solve.

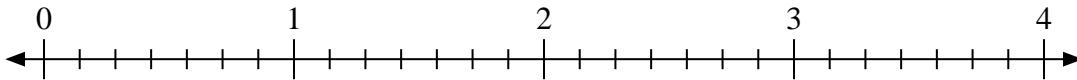
1) $3 \div \frac{1}{5}$



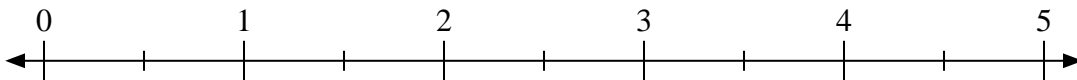
2) $3 \div \frac{6}{7}$



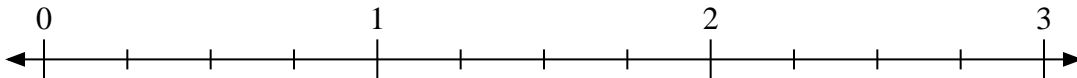
3) $4 \div \frac{1}{7}$



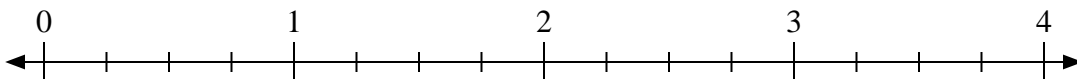
4) $5 \div \frac{1}{2}$



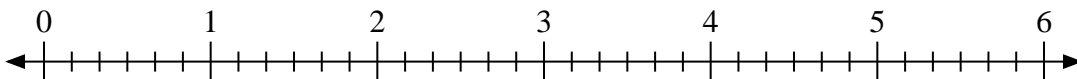
5) $3 \div \frac{1}{4}$



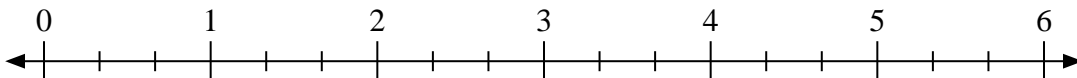
6) $3 \div \frac{3}{4}$



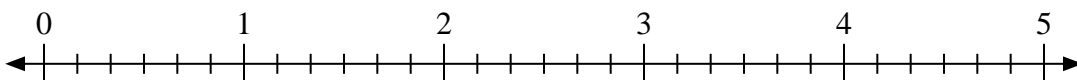
7) $4 \div \frac{3}{6}$



8) $4 \div \frac{2}{3}$



9) $5 \div \frac{1}{6}$



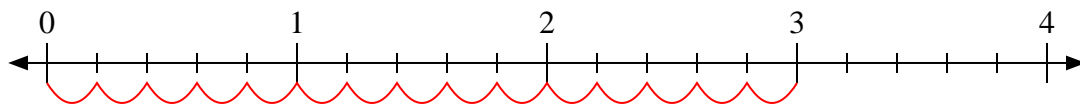
Answers

1. _____
2. _____
3. _____
4. _____
5. _____
6. _____
7. _____
8. _____
9. _____

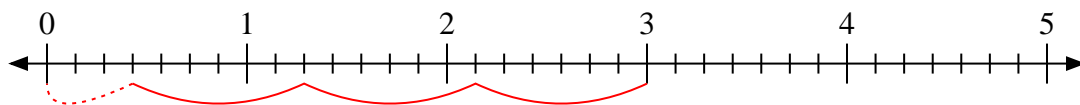


Use the numberline to solve.

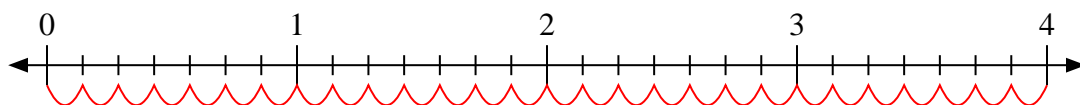
1) $3 \div \frac{1}{5}$



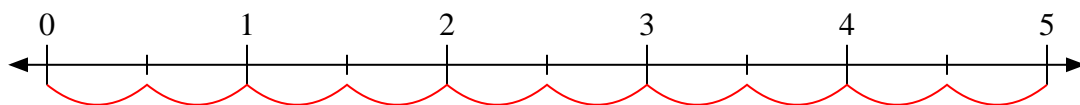
2) $3 \div \frac{6}{7}$



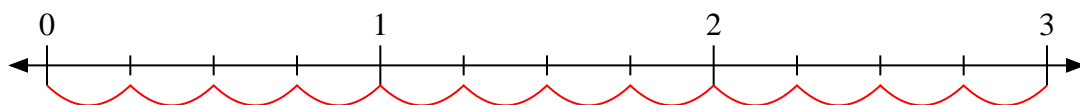
3) $4 \div \frac{1}{7}$



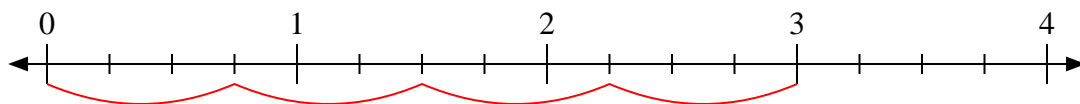
4) $5 \div \frac{1}{2}$



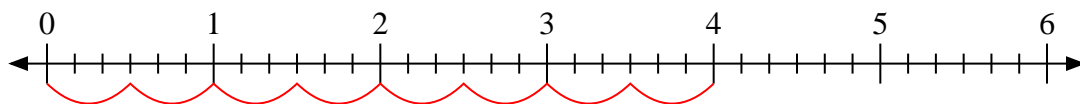
5) $3 \div \frac{1}{4}$



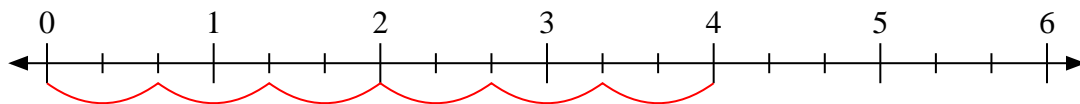
6) $3 \div \frac{3}{4}$



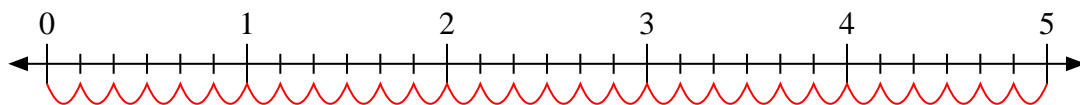
7) $4 \div \frac{3}{6}$



8) $4 \div \frac{2}{3}$



9) $5 \div \frac{1}{6}$



Answers

1. **15**

2. **$3 \frac{3}{6}$**

3. **28**

4. **10**

5. **12**

6. **4**

7. **8**

8. **6**

9. **30**