



Solve each problem by marking off the fractions. The first is completed for you.

**Answers**

Ex)  $2 \div \frac{1}{3} = ?$  This is the same as saying: How many  $\frac{1}{3}$  are there in 2 wholes?

Ex. 6

1 Whole			1 Whole		

1. \_\_\_\_\_

1)  $3 \div \frac{1}{2} =$

2. \_\_\_\_\_

1 Whole		1 Whole		1 Whole	

3. \_\_\_\_\_

2)  $3 \div \frac{1}{5} =$

4. \_\_\_\_\_

1 Whole	1 Whole	1 Whole

5. \_\_\_\_\_

3)  $2 \div \frac{1}{7} =$

6. \_\_\_\_\_

1 Whole			1 Whole		

7. \_\_\_\_\_

4)  $4 \div \frac{1}{2} =$

8. \_\_\_\_\_

1 Whole	1 Whole	1 Whole	1 Whole

9. \_\_\_\_\_

5)  $4 \div \frac{1}{7} =$

1 Whole	1 Whole	1 Whole	1 Whole

6)  $5 \div \frac{1}{4} =$

1 Whole	1 Whole	1 Whole	1 Whole	1 Whole

7)  $2 \div \frac{1}{6} =$

1 Whole		1 Whole	

8)  $6 \div \frac{1}{4} =$

1 Whole	1 Whole	1 Whole	1 Whole	1 Whole	1 Whole


9)  $3 \div \frac{1}{3} =$

1 Whole	1 Whole	1 Whole

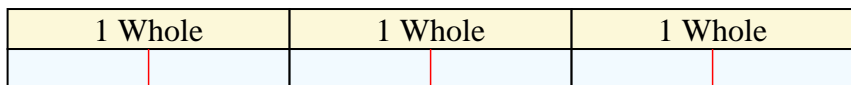


Solve each problem by marking off the fractions. The first is completed for you.

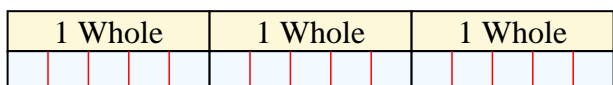
Ex)  $2 \div \frac{1}{3} = ?$  This is the same as saying: How many  $\frac{1}{3}$  are the in 2 wholes?



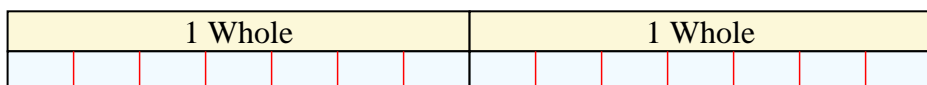
1)  $3 \div \frac{1}{2} =$  This is the same as saying: How many  $\frac{1}{2}$  are the in 3 wholes?



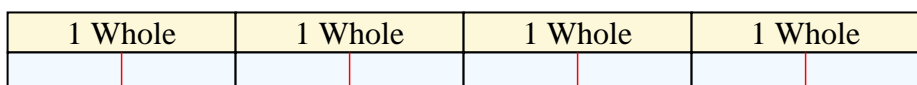
2)  $3 \div \frac{1}{5} =$  This is the same as saying: How many  $\frac{1}{5}$  are the in 3 wholes?



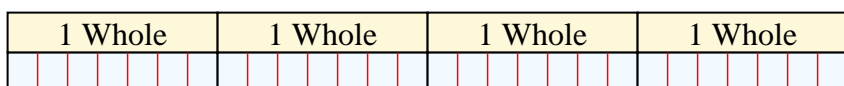
3)  $2 \div \frac{1}{7} =$  This is the same as saying: How many  $\frac{1}{7}$  are the in 2 wholes?



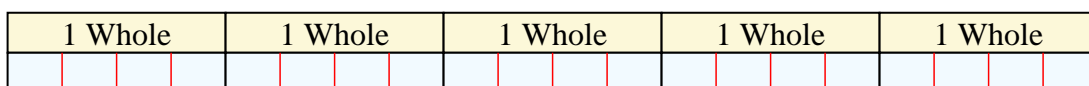
4)  $4 \div \frac{1}{2} =$  This is the same as saying: How many  $\frac{1}{2}$  are the in 4 wholes?



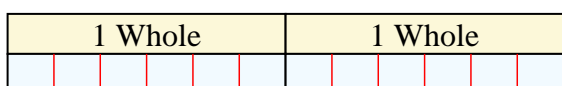
5)  $4 \div \frac{1}{7} =$  This is the same as saying: How many  $\frac{1}{7}$  are the in 4 wholes?



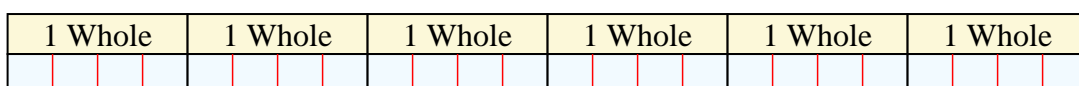
6)  $5 \div \frac{1}{4} =$  This is the same as saying: How many  $\frac{1}{4}$  are the in 5 wholes?



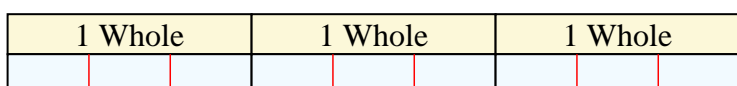
7)  $2 \div \frac{1}{6} =$  This is the same as saying: How many  $\frac{1}{6}$  are the in 2 wholes?



8)  $6 \div \frac{1}{4} =$  This is the same as saying: How many  $\frac{1}{4}$  are the in 6 wholes?



9)  $3 \div \frac{1}{3} =$  This is the same as saying: How many  $\frac{1}{3}$  are the in 3 wholes?



**Answers**

Ex. 6

1. 6

2. 15

3. 14

4. 8

5. 28

6. 20

7. 12

8. 24

9. 9



Solve each problem by marking off the fractions. The first is completed for you.

**Answers**

Ex)  $3 \div \frac{1}{2} = ?$  This is the same as saying: How many  $\frac{1}{2}$  are there in 3 wholes?

1 Whole		1 Whole		1 Whole	
<input checked="" type="checkbox"/>	<input checked="" type="checkbox"/>	<input checked="" type="checkbox"/>	<input checked="" type="checkbox"/>	<input checked="" type="checkbox"/>	<input checked="" type="checkbox"/>

Ex. 6

1. \_\_\_\_\_

1)  $6 \div \frac{1}{5} =$

2. \_\_\_\_\_

1 Whole		1 Whole		1 Whole		1 Whole		1 Whole		1 Whole	
<input type="checkbox"/>	<input type="checkbox"/>	<input type="checkbox"/>	<input type="checkbox"/>	<input type="checkbox"/>	<input type="checkbox"/>	<input type="checkbox"/>	<input type="checkbox"/>	<input type="checkbox"/>	<input type="checkbox"/>	<input type="checkbox"/>	<input type="checkbox"/>

3. \_\_\_\_\_

2)  $5 \div \frac{1}{2} =$

4. \_\_\_\_\_

1 Whole		1 Whole		1 Whole		1 Whole	
<input type="checkbox"/>	<input type="checkbox"/>	<input type="checkbox"/>	<input type="checkbox"/>	<input type="checkbox"/>	<input type="checkbox"/>	<input type="checkbox"/>	<input type="checkbox"/>

5. \_\_\_\_\_

3)  $4 \div \frac{1}{7} =$

6. \_\_\_\_\_

1 Whole		1 Whole		1 Whole		1 Whole	
<input type="checkbox"/>	<input type="checkbox"/>	<input type="checkbox"/>	<input type="checkbox"/>	<input type="checkbox"/>	<input type="checkbox"/>	<input type="checkbox"/>	<input type="checkbox"/>

7. \_\_\_\_\_

4)  $6 \div \frac{1}{3} =$

8. \_\_\_\_\_

1 Whole		1 Whole		1 Whole		1 Whole		1 Whole		1 Whole	
<input type="checkbox"/>	<input type="checkbox"/>	<input type="checkbox"/>	<input type="checkbox"/>	<input type="checkbox"/>	<input type="checkbox"/>	<input type="checkbox"/>	<input type="checkbox"/>	<input type="checkbox"/>	<input type="checkbox"/>	<input type="checkbox"/>	<input type="checkbox"/>

9. \_\_\_\_\_

5)  $2 \div \frac{1}{7} =$

1 Whole		1 Whole	
<input type="checkbox"/>	<input type="checkbox"/>	<input type="checkbox"/>	<input type="checkbox"/>

6)  $2 \div \frac{1}{4} =$

1 Whole				1 Whole			
<input type="checkbox"/>	<input type="checkbox"/>	<input type="checkbox"/>	<input type="checkbox"/>	<input type="checkbox"/>	<input type="checkbox"/>	<input type="checkbox"/>	<input type="checkbox"/>

7)  $2 \div \frac{1}{5} =$

1 Whole		1 Whole	
<input type="checkbox"/>	<input type="checkbox"/>	<input type="checkbox"/>	<input type="checkbox"/>

8)  $5 \div \frac{1}{5} =$

1 Whole		1 Whole		1 Whole		1 Whole		1 Whole	
<input type="checkbox"/>	<input type="checkbox"/>	<input type="checkbox"/>	<input type="checkbox"/>	<input type="checkbox"/>	<input type="checkbox"/>	<input type="checkbox"/>	<input type="checkbox"/>	<input type="checkbox"/>	<input type="checkbox"/>

9)  $5 \div \frac{1}{6} =$

1 Whole		1 Whole		1 Whole		1 Whole		1 Whole	
<input type="checkbox"/>	<input type="checkbox"/>	<input type="checkbox"/>	<input type="checkbox"/>	<input type="checkbox"/>	<input type="checkbox"/>	<input type="checkbox"/>	<input type="checkbox"/>	<input type="checkbox"/>	<input type="checkbox"/>



Solve each problem by marking off the fractions. The first is completed for you.

Ex)  $3 \div \frac{1}{2} = ?$  This is the same as saying: How many  $\frac{1}{2}$  are the in 3 wholes?

1 Whole		1 Whole		1 Whole	

1)  $6 \div \frac{1}{5} =$  This is the same as saying: How many  $\frac{1}{5}$  are the in 6 wholes?

1 Whole		1 Whole		1 Whole		1 Whole		1 Whole		1 Whole	

2)  $5 \div \frac{1}{2} =$  This is the same as saying: How many  $\frac{1}{2}$  are the in 5 wholes?

1 Whole		1 Whole		1 Whole		1 Whole		1 Whole	

3)  $4 \div \frac{1}{7} =$  This is the same as saying: How many  $\frac{1}{7}$  are the in 4 wholes?

1 Whole			1 Whole			1 Whole			1 Whole		

4)  $6 \div \frac{1}{3} =$  This is the same as saying: How many  $\frac{1}{3}$  are the in 6 wholes?

1 Whole		1 Whole		1 Whole		1 Whole		1 Whole		1 Whole	

5)  $2 \div \frac{1}{7} =$  This is the same as saying: How many  $\frac{1}{7}$  are the in 2 wholes?

1 Whole				1 Whole			

6)  $2 \div \frac{1}{4} =$  This is the same as saying: How many  $\frac{1}{4}$  are the in 2 wholes?

1 Whole				1 Whole			

7)  $2 \div \frac{1}{5} =$  This is the same as saying: How many  $\frac{1}{5}$  are the in 2 wholes?

1 Whole				1 Whole			

8)  $5 \div \frac{1}{5} =$  This is the same as saying: How many  $\frac{1}{5}$  are the in 5 wholes?

1 Whole		1 Whole		1 Whole		1 Whole		1 Whole	

9)  $5 \div \frac{1}{6} =$  This is the same as saying: How many  $\frac{1}{6}$  are the in 5 wholes?

1 Whole		1 Whole		1 Whole		1 Whole		1 Whole	

**Answers**

Ex. 6

1. 30

2. 10

3. 28

4. 18

5. 14

6. 8

7. 10

8. 25

9. 30



Solve each problem by marking off the fractions. The first is completed for you.

**Answers**

Ex)  $3 \div \frac{1}{5} = ?$  This is the same as saying: How many  $\frac{1}{5}$  are there in 3 wholes?

Ex. **15**

1 Whole					1 Whole					1 Whole				

1. \_\_\_\_\_

1)  $4 \div \frac{1}{4} =$

2. \_\_\_\_\_

1 Whole				1 Whole				1 Whole				1 Whole			

3. \_\_\_\_\_

2)  $2 \div \frac{1}{3} =$

4. \_\_\_\_\_

1 Whole						1 Whole					

5. \_\_\_\_\_

3)  $3 \div \frac{1}{3} =$

6. \_\_\_\_\_

1 Whole			1 Whole			1 Whole		

7. \_\_\_\_\_

4)  $3 \div \frac{1}{4} =$

8. \_\_\_\_\_

1 Whole				1 Whole				1 Whole			

9. \_\_\_\_\_

5)  $2 \div \frac{1}{6} =$

1 Whole			1 Whole		

6)  $6 \div \frac{1}{2} =$

1 Whole		1 Whole		1 Whole		1 Whole		1 Whole		1 Whole	

7)  $5 \div \frac{1}{6} =$

1 Whole		1 Whole		1 Whole		1 Whole		1 Whole	

8)  $6 \div \frac{1}{4} =$

1 Whole		1 Whole		1 Whole		1 Whole		1 Whole		1 Whole	

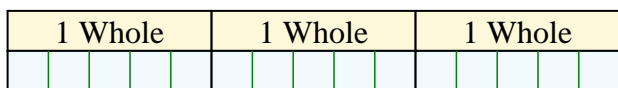
9)  $5 \div \frac{1}{3} =$

1 Whole		1 Whole		1 Whole		1 Whole		1 Whole	

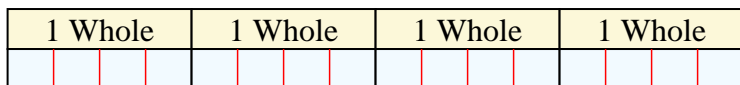


Solve each problem by marking off the fractions. The first is completed for you.


Ex)  $3 \div \frac{1}{5} = ?$  This is the same as saying: How many  $\frac{1}{5}$  are the in 3 wholes?



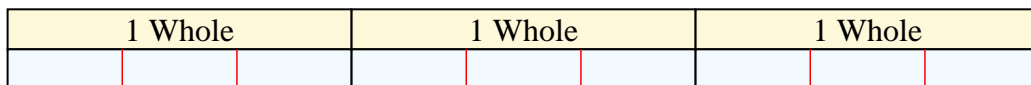
1)  $4 \div \frac{1}{4} =$  This is the same as saying: How many  $\frac{1}{4}$  are the in 4 wholes?



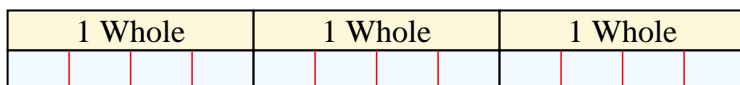
2)  $2 \div \frac{1}{3} =$  This is the same as saying: How many  $\frac{1}{3}$  are the in 2 wholes?




3)  $3 \div \frac{1}{3} =$  This is the same as saying: How many  $\frac{1}{3}$  are the in 3 wholes?



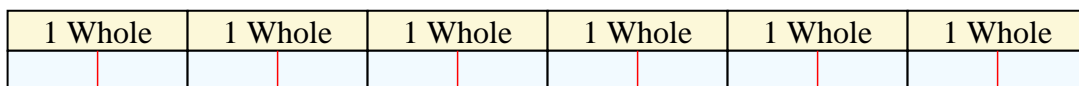
4)  $3 \div \frac{1}{4} =$  This is the same as saying: How many  $\frac{1}{4}$  are the in 3 wholes?



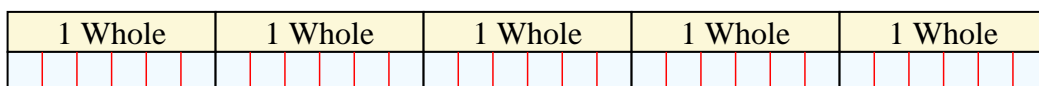
5)  $2 \div \frac{1}{6} =$  This is the same as saying: How many  $\frac{1}{6}$  are the in 2 wholes?



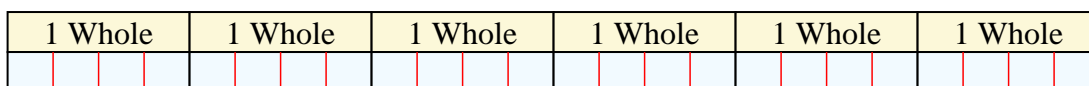
6)  $6 \div \frac{1}{2} =$  This is the same as saying: How many  $\frac{1}{2}$  are the in 6 wholes?



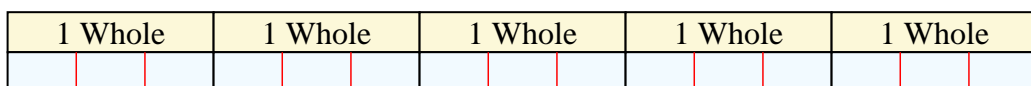
7)  $5 \div \frac{1}{6} =$  This is the same as saying: How many  $\frac{1}{6}$  are the in 5 wholes?



8)  $6 \div \frac{1}{4} =$  This is the same as saying: How many  $\frac{1}{4}$  are the in 6 wholes?



9)  $5 \div \frac{1}{3} =$  This is the same as saying: How many  $\frac{1}{3}$  are the in 5 wholes?



**Answers**

Ex. 15

1. 16

2. 6

3. 9

4. 12

5. 12

6. 12

7. 30

8. 24

9. 15



Solve each problem by marking off the fractions. The first is completed for you.

**Answers**

Ex)  $4 \div \frac{1}{5} = ?$  This is the same as saying: How many  $\frac{1}{5}$  are there in 4 wholes?

Ex. **20**

1 Whole	1 Whole	1 Whole	1 Whole
<input type="checkbox"/>	<input type="checkbox"/>	<input type="checkbox"/>	<input type="checkbox"/>

1. \_\_\_\_\_

1)  $3 \div \frac{1}{3} =$

2. \_\_\_\_\_

1 Whole	1 Whole	1 Whole
<input type="checkbox"/>	<input type="checkbox"/>	<input type="checkbox"/>

3. \_\_\_\_\_

2)  $5 \div \frac{1}{5} =$

4. \_\_\_\_\_

1 Whole	1 Whole	1 Whole	1 Whole	1 Whole
<input type="checkbox"/>	<input type="checkbox"/>	<input type="checkbox"/>	<input type="checkbox"/>	<input type="checkbox"/>

5. \_\_\_\_\_

3)  $3 \div \frac{1}{2} =$

6. \_\_\_\_\_

1 Whole	1 Whole	1 Whole
<input type="checkbox"/>	<input type="checkbox"/>	<input type="checkbox"/>

7. \_\_\_\_\_

4)  $6 \div \frac{1}{5} =$

8. \_\_\_\_\_

1 Whole	1 Whole	1 Whole	1 Whole	1 Whole	1 Whole
<input type="checkbox"/>	<input type="checkbox"/>	<input type="checkbox"/>	<input type="checkbox"/>	<input type="checkbox"/>	<input type="checkbox"/>

9. \_\_\_\_\_

5)  $2 \div \frac{1}{6} =$

1 Whole	1 Whole
<input type="checkbox"/>	<input type="checkbox"/>

6)  $4 \div \frac{1}{2} =$

1 Whole	1 Whole	1 Whole	1 Whole
<input type="checkbox"/>	<input type="checkbox"/>	<input type="checkbox"/>	<input type="checkbox"/>

7)  $2 \div \frac{1}{4} =$

1 Whole	1 Whole
<input type="checkbox"/>	<input type="checkbox"/>

8)  $6 \div \frac{1}{7} =$

1 Whole	1 Whole	1 Whole	1 Whole	1 Whole	1 Whole
<input type="checkbox"/>	<input type="checkbox"/>	<input type="checkbox"/>	<input type="checkbox"/>	<input type="checkbox"/>	<input type="checkbox"/>

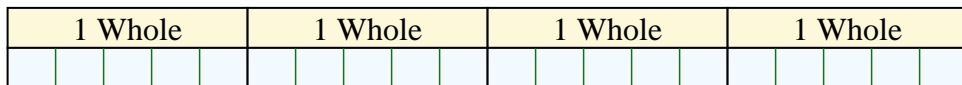
9)  $3 \div \frac{1}{7} =$

1 Whole	1 Whole	1 Whole
<input type="checkbox"/>	<input type="checkbox"/>	<input type="checkbox"/>

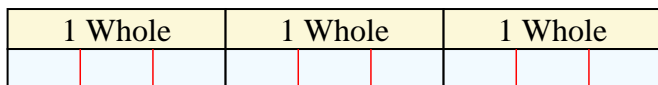


Solve each problem by marking off the fractions. The first is completed for you.

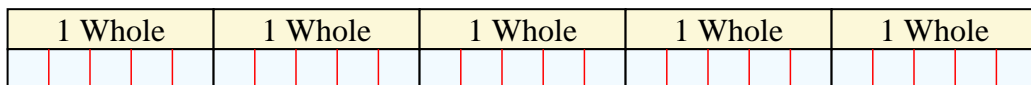
Ex)  $4 \div \frac{1}{5} = ?$  This is the same as saying: How many  $\frac{1}{5}$  are the in 4 wholes?



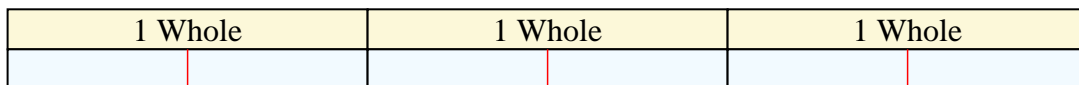
1)  $3 \div \frac{1}{3} =$  This is the same as saying: How many  $\frac{1}{3}$  are the in 3 wholes?



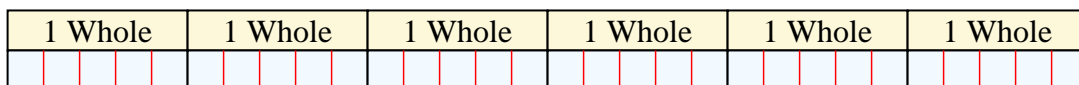
2)  $5 \div \frac{1}{5} =$  This is the same as saying: How many  $\frac{1}{5}$  are the in 5 wholes?




3)  $3 \div \frac{1}{2} =$  This is the same as saying: How many  $\frac{1}{2}$  are the in 3 wholes?



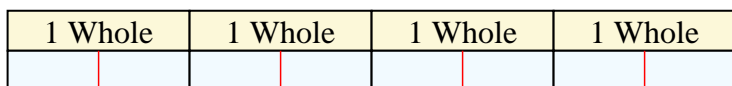
4)  $6 \div \frac{1}{5} =$  This is the same as saying: How many  $\frac{1}{5}$  are the in 6 wholes?



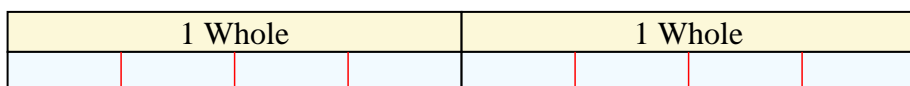
5)  $2 \div \frac{1}{6} =$  This is the same as saying: How many  $\frac{1}{6}$  are the in 2 wholes?



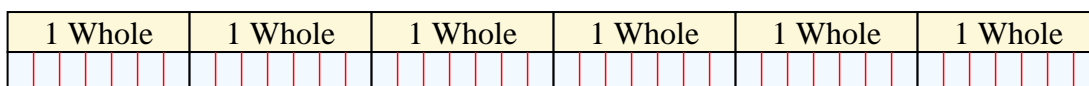
6)  $4 \div \frac{1}{2} =$  This is the same as saying: How many  $\frac{1}{2}$  are the in 4 wholes?



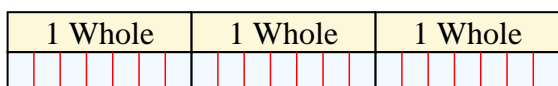
7)  $2 \div \frac{1}{4} =$  This is the same as saying: How many  $\frac{1}{4}$  are the in 2 wholes?



8)  $6 \div \frac{1}{7} =$  This is the same as saying: How many  $\frac{1}{7}$  are the in 6 wholes?



9)  $3 \div \frac{1}{7} =$  This is the same as saying: How many  $\frac{1}{7}$  are the in 3 wholes?



**Answers**

Ex. 20

1. 9

2. 25

3. 6

4. 30

5. 12

6. 8

7. 8

8. 42

9. 21





Solve each problem by marking off the fractions. The first is completed for you.

**Answers**

Ex)  $3 \div \frac{1}{4} = ?$  This is the same as saying: How many  $\frac{1}{4}$  are there in 3 wholes?

Ex. **12**

1 Whole				1 Whole				1 Whole			

1. \_\_\_\_\_

1)  $4 \div \frac{1}{4} =$

2. \_\_\_\_\_

1 Whole			1 Whole			1 Whole			1 Whole		

3. \_\_\_\_\_

2)  $6 \div \frac{1}{7} =$

4. \_\_\_\_\_

1 Whole		1 Whole		1 Whole		1 Whole		1 Whole		1 Whole	

5. \_\_\_\_\_

3)  $6 \div \frac{1}{3} =$

6. \_\_\_\_\_

1 Whole		1 Whole		1 Whole		1 Whole		1 Whole		1 Whole	

7. \_\_\_\_\_

4)  $6 \div \frac{1}{2} =$

8. \_\_\_\_\_

1 Whole		1 Whole		1 Whole		1 Whole		1 Whole		1 Whole	

9. \_\_\_\_\_

5)  $3 \div \frac{1}{6} =$

1 Whole		1 Whole		1 Whole	

6)  $5 \div \frac{1}{2} =$

1 Whole		1 Whole		1 Whole		1 Whole		1 Whole	

7)  $2 \div \frac{1}{3} =$

1 Whole		1 Whole	

8)  $3 \div \frac{1}{3} =$

1 Whole		1 Whole		1 Whole	

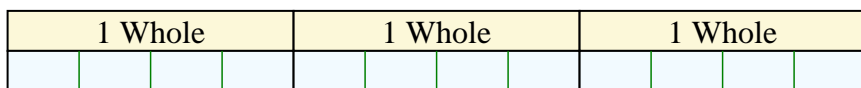
9)  $4 \div \frac{1}{5} =$

1 Whole		1 Whole		1 Whole		1 Whole	

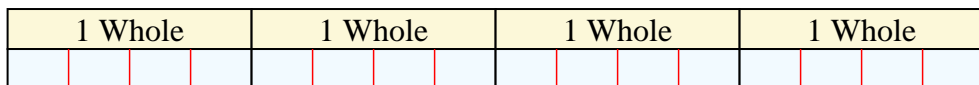


Solve each problem by marking off the fractions. The first is completed for you.


Ex)  $3 \div \frac{1}{4} = ?$  This is the same as saying: How many  $\frac{1}{4}$  are the in 3 wholes?



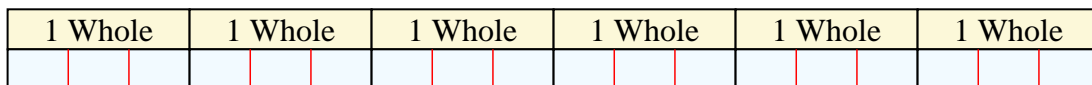
1)  $4 \div \frac{1}{4} =$  This is the same as saying: How many  $\frac{1}{4}$  are the in 4 wholes?



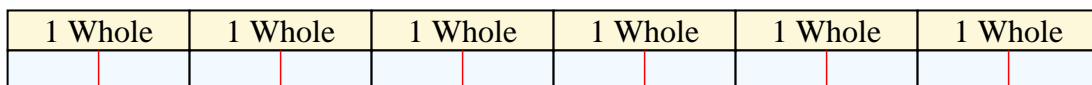
2)  $6 \div \frac{1}{7} =$  This is the same as saying: How many  $\frac{1}{7}$  are the in 6 wholes?



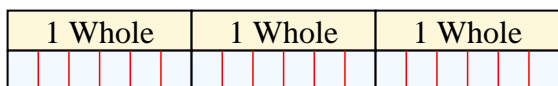
3)  $6 \div \frac{1}{3} =$  This is the same as saying: How many  $\frac{1}{3}$  are the in 6 wholes?



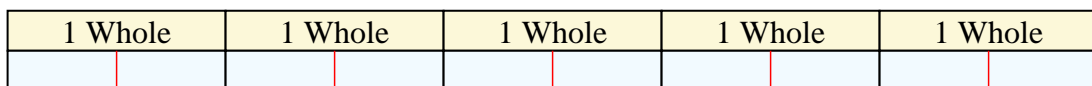
4)  $6 \div \frac{1}{2} =$  This is the same as saying: How many  $\frac{1}{2}$  are the in 6 wholes?



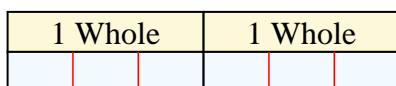
5)  $3 \div \frac{1}{6} =$  This is the same as saying: How many  $\frac{1}{6}$  are the in 3 wholes?



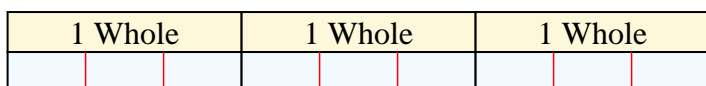
6)  $5 \div \frac{1}{2} =$  This is the same as saying: How many  $\frac{1}{2}$  are the in 5 wholes?



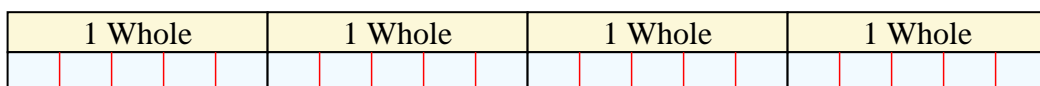
7)  $2 \div \frac{1}{3} =$  This is the same as saying: How many  $\frac{1}{3}$  are the in 2 wholes?



8)  $3 \div \frac{1}{3} =$  This is the same as saying: How many  $\frac{1}{3}$  are the in 3 wholes?



9)  $4 \div \frac{1}{5} =$  This is the same as saying: How many  $\frac{1}{5}$  are the in 4 wholes?



**Answers**

Ex. 12

1. 16

2. 42

3. 18

4. 12

5. 18

6. 10

7. 6

8. 9

9. 20



Solve each problem by marking off the fractions. The first is completed for you.

**Answers**

Ex)  $6 \div \frac{1}{6} = ?$  This is the same as saying: How many  $\frac{1}{6}$  are there in 6 wholes?

Ex. **36**

1 Whole	1 Whole	1 Whole	1 Whole	1 Whole	1 Whole
<input type="checkbox"/>	<input type="checkbox"/>	<input type="checkbox"/>	<input type="checkbox"/>	<input type="checkbox"/>	<input type="checkbox"/>

1. \_\_\_\_\_

1)  $3 \div \frac{1}{6} =$

2. \_\_\_\_\_

1 Whole	1 Whole	1 Whole
<input type="checkbox"/>	<input type="checkbox"/>	<input type="checkbox"/>

3. \_\_\_\_\_

2)  $6 \div \frac{1}{4} =$

4. \_\_\_\_\_

1 Whole	1 Whole	1 Whole	1 Whole	1 Whole	1 Whole
<input type="checkbox"/>	<input type="checkbox"/>	<input type="checkbox"/>	<input type="checkbox"/>	<input type="checkbox"/>	<input type="checkbox"/>

5. \_\_\_\_\_

3)  $4 \div \frac{1}{2} =$

6. \_\_\_\_\_

1 Whole	1 Whole	1 Whole	1 Whole
<input type="checkbox"/>	<input type="checkbox"/>	<input type="checkbox"/>	<input type="checkbox"/>

7. \_\_\_\_\_

4)  $2 \div \frac{1}{5} =$

8. \_\_\_\_\_

1 Whole	1 Whole
<input type="checkbox"/>	<input type="checkbox"/>

9. \_\_\_\_\_

5)  $5 \div \frac{1}{5} =$

1 Whole	1 Whole	1 Whole	1 Whole	1 Whole
<input type="checkbox"/>	<input type="checkbox"/>	<input type="checkbox"/>	<input type="checkbox"/>	<input type="checkbox"/>

6)  $3 \div \frac{1}{5} =$

1 Whole	1 Whole	1 Whole
<input type="checkbox"/>	<input type="checkbox"/>	<input type="checkbox"/>

7)  $2 \div \frac{1}{7} =$

1 Whole	1 Whole
<input type="checkbox"/>	<input type="checkbox"/>

8)  $6 \div \frac{1}{7} =$

1 Whole	1 Whole	1 Whole	1 Whole	1 Whole	1 Whole
<input type="checkbox"/>	<input type="checkbox"/>	<input type="checkbox"/>	<input type="checkbox"/>	<input type="checkbox"/>	<input type="checkbox"/>


9)  $6 \div \frac{1}{3} =$

1 Whole	1 Whole	1 Whole	1 Whole	1 Whole	1 Whole
<input type="checkbox"/>	<input type="checkbox"/>	<input type="checkbox"/>	<input type="checkbox"/>	<input type="checkbox"/>	<input type="checkbox"/>

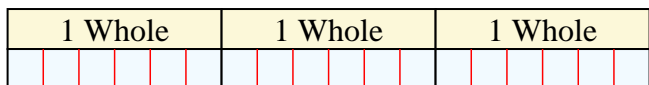


Solve each problem by marking off the fractions. The first is completed for you.

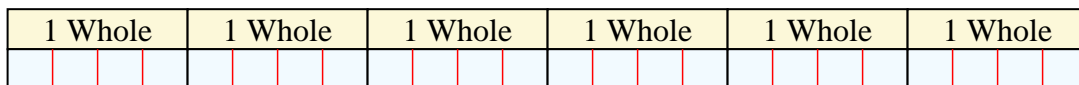
Ex)  $6 \div \frac{1}{6} = ?$  This is the same as saying: How many  $\frac{1}{6}$  are the in 6 wholes?




1)  $3 \div \frac{1}{6} =$  This is the same as saying: How many  $\frac{1}{6}$  are the in 3 wholes?




2)  $6 \div \frac{1}{4} =$  This is the same as saying: How many  $\frac{1}{4}$  are the in 6 wholes?



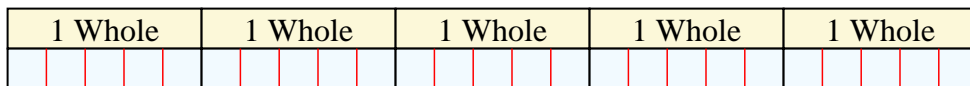
3)  $4 \div \frac{1}{2} =$  This is the same as saying: How many  $\frac{1}{2}$  are the in 4 wholes?



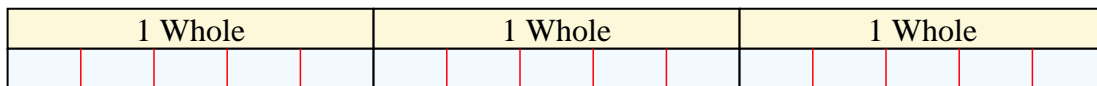
4)  $2 \div \frac{1}{5} =$  This is the same as saying: How many  $\frac{1}{5}$  are the in 2 wholes?



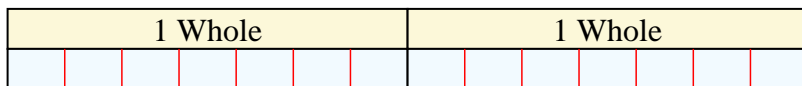
5)  $5 \div \frac{1}{5} =$  This is the same as saying: How many  $\frac{1}{5}$  are the in 5 wholes?



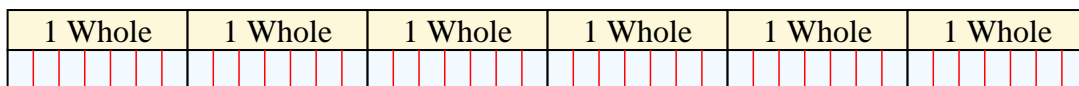
6)  $3 \div \frac{1}{5} =$  This is the same as saying: How many  $\frac{1}{5}$  are the in 3 wholes?



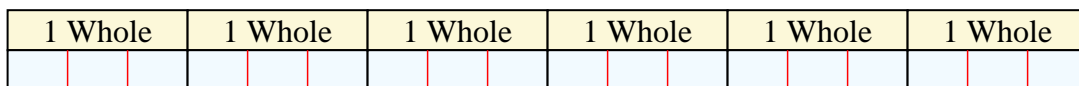
7)  $2 \div \frac{1}{7} =$  This is the same as saying: How many  $\frac{1}{7}$  are the in 2 wholes?



8)  $6 \div \frac{1}{7} =$  This is the same as saying: How many  $\frac{1}{7}$  are the in 6 wholes?



9)  $6 \div \frac{1}{3} =$  This is the same as saying: How many  $\frac{1}{3}$  are the in 6 wholes?



**Answers**

Ex. 36

1. 18

2. 24

3. 8

4. 10

5. 25

6. 15

7. 14

8. 42

9. 18



Solve each problem by marking off the fractions. The first is completed for you.

**Answers**

Ex)  $3 \div \frac{1}{4} = ?$  This is the same as saying: How many  $\frac{1}{4}$  are there in 3 wholes?

Ex. **12**

1 Whole				1 Whole				1 Whole			

1. \_\_\_\_\_

1)  $5 \div \frac{1}{6} =$

2. \_\_\_\_\_

1 Whole		1 Whole		1 Whole		1 Whole		1 Whole	

3. \_\_\_\_\_

2)  $5 \div \frac{1}{2} =$

4. \_\_\_\_\_

1 Whole		1 Whole		1 Whole		1 Whole		1 Whole	

5. \_\_\_\_\_

3)  $5 \div \frac{1}{5} =$

6. \_\_\_\_\_

1 Whole		1 Whole		1 Whole		1 Whole		1 Whole	

7. \_\_\_\_\_

4)  $3 \div \frac{1}{2} =$

8. \_\_\_\_\_

1 Whole			1 Whole			1 Whole		

9. \_\_\_\_\_

5)  $2 \div \frac{1}{2} =$

1 Whole		1 Whole	

6)  $6 \div \frac{1}{7} =$

1 Whole		1 Whole		1 Whole		1 Whole		1 Whole		1 Whole	

7)  $4 \div \frac{1}{4} =$

1 Whole		1 Whole		1 Whole		1 Whole	

8)  $6 \div \frac{1}{6} =$

1 Whole		1 Whole		1 Whole		1 Whole		1 Whole		1 Whole	

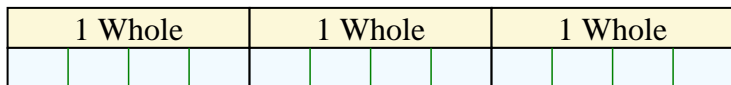
9)  $3 \div \frac{1}{3} =$

1 Whole			1 Whole			1 Whole		

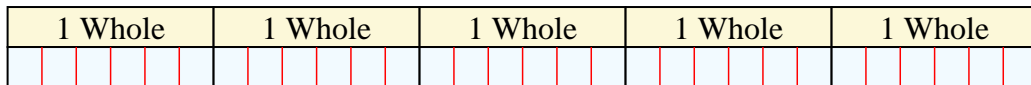


Solve each problem by marking off the fractions. The first is completed for you.

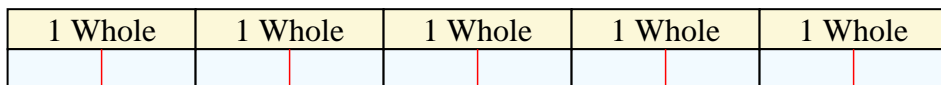
Ex)  $3 \div \frac{1}{4} = ?$  This is the same as saying: How many  $\frac{1}{4}$  are the in 3 wholes?



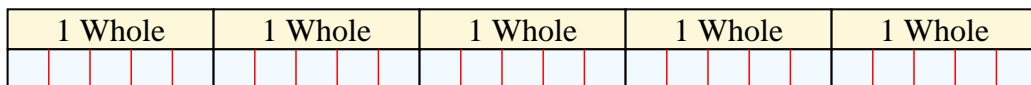
1)  $5 \div \frac{1}{6} =$  This is the same as saying: How many  $\frac{1}{6}$  are the in 5 wholes?



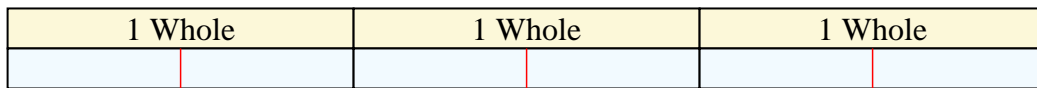
2)  $5 \div \frac{1}{2} =$  This is the same as saying: How many  $\frac{1}{2}$  are the in 5 wholes?



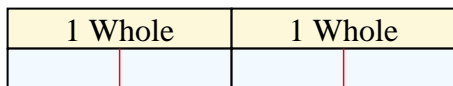
3)  $5 \div \frac{1}{5} =$  This is the same as saying: How many  $\frac{1}{5}$  are the in 5 wholes?



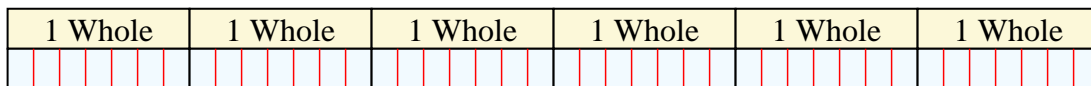
4)  $3 \div \frac{1}{2} =$  This is the same as saying: How many  $\frac{1}{2}$  are the in 3 wholes?



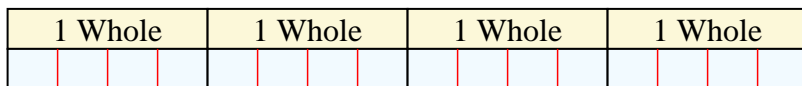
5)  $2 \div \frac{1}{2} =$  This is the same as saying: How many  $\frac{1}{2}$  are the in 2 wholes?




6)  $6 \div \frac{1}{7} =$  This is the same as saying: How many  $\frac{1}{7}$  are the in 6 wholes?



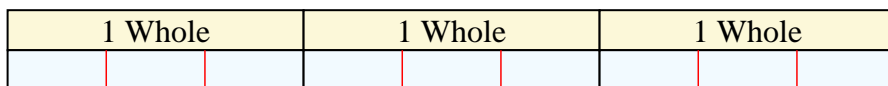
7)  $4 \div \frac{1}{4} =$  This is the same as saying: How many  $\frac{1}{4}$  are the in 4 wholes?



8)  $6 \div \frac{1}{6} =$  This is the same as saying: How many  $\frac{1}{6}$  are the in 6 wholes?



9)  $3 \div \frac{1}{3} =$  This is the same as saying: How many  $\frac{1}{3}$  are the in 3 wholes?



**Answers**

Ex. 12

1. 30

2. 10

3. 25

4. 6

5. 4

6. 42

7. 16

8. 36

9. 9



Solve each problem by marking off the fractions. The first is completed for you.

**Answers**

Ex)  $4 \div \frac{1}{4} = ?$  This is the same as saying: How many  $\frac{1}{4}$  are there in 4 wholes?

Ex. **16**

1 Whole				1 Whole				1 Whole				1 Whole			

1. \_\_\_\_\_

1)  $3 \div \frac{1}{4} =$

2. \_\_\_\_\_

1 Whole				1 Whole				1 Whole			

3. \_\_\_\_\_

2)  $4 \div \frac{1}{7} =$

4. \_\_\_\_\_

1 Whole		1 Whole		1 Whole		1 Whole	

5. \_\_\_\_\_

3)  $6 \div \frac{1}{7} =$

6. \_\_\_\_\_

1 Whole		1 Whole		1 Whole		1 Whole		1 Whole		1 Whole	

7. \_\_\_\_\_

4)  $5 \div \frac{1}{7} =$

8. \_\_\_\_\_

1 Whole		1 Whole		1 Whole		1 Whole		1 Whole	

9. \_\_\_\_\_

5)  $5 \div \frac{1}{2} =$

1 Whole		1 Whole		1 Whole		1 Whole		1 Whole	

6)  $3 \div \frac{1}{3} =$

1 Whole		1 Whole		1 Whole	

7)  $3 \div \frac{1}{7} =$

1 Whole			1 Whole			1 Whole		

8)  $5 \div \frac{1}{5} =$

1 Whole		1 Whole		1 Whole		1 Whole		1 Whole	


9)  $4 \div \frac{1}{6} =$

1 Whole			1 Whole			1 Whole			1 Whole		

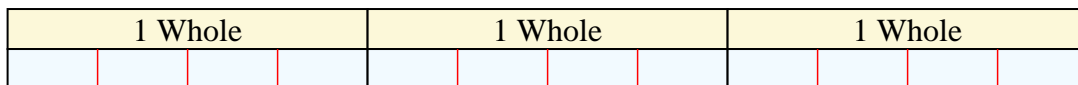


Solve each problem by marking off the fractions. The first is completed for you.

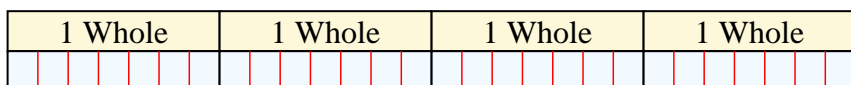
Ex)  $4 \div \frac{1}{4} = ?$  This is the same as saying: How many  $\frac{1}{4}$  are the in 4 wholes?




1)  $3 \div \frac{1}{4} =$  This is the same as saying: How many  $\frac{1}{4}$  are the in 3 wholes?



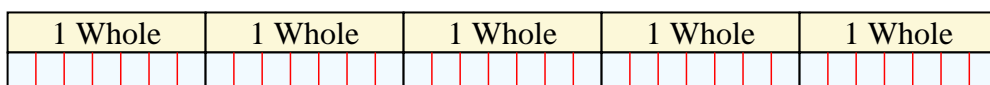
2)  $4 \div \frac{1}{7} =$  This is the same as saying: How many  $\frac{1}{7}$  are the in 4 wholes?



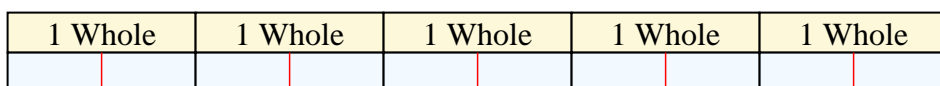
3)  $6 \div \frac{1}{7} =$  This is the same as saying: How many  $\frac{1}{7}$  are the in 6 wholes?



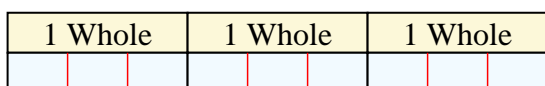
4)  $5 \div \frac{1}{7} =$  This is the same as saying: How many  $\frac{1}{7}$  are the in 5 wholes?



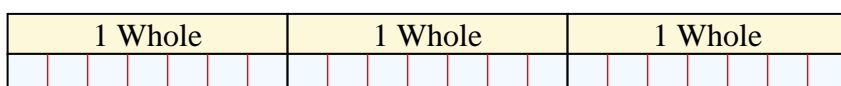
5)  $5 \div \frac{1}{2} =$  This is the same as saying: How many  $\frac{1}{2}$  are the in 5 wholes?



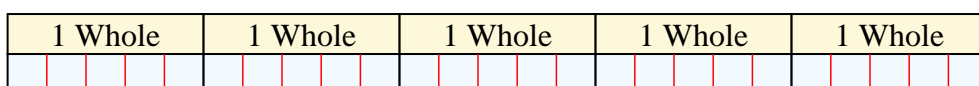
6)  $3 \div \frac{1}{3} =$  This is the same as saying: How many  $\frac{1}{3}$  are the in 3 wholes?




7)  $3 \div \frac{1}{7} =$  This is the same as saying: How many  $\frac{1}{7}$  are the in 3 wholes?



8)  $5 \div \frac{1}{5} =$  This is the same as saying: How many  $\frac{1}{5}$  are the in 5 wholes?



9)  $4 \div \frac{1}{6} =$  This is the same as saying: How many  $\frac{1}{6}$  are the in 4 wholes?



**Answers**

Ex. 16

1. 12

2. 28

3. 42

4. 35

5. 10

6. 9

7. 21

8. 25

9. 24





Solve each problem by marking off the fractions. The first is completed for you.

**Answers**

Ex)  $3 \div \frac{1}{5} = ?$  This is the same as saying: How many  $\frac{1}{5}$  are there in 3 wholes?

Ex. **15**

1 Whole					1 Whole					1 Whole				

1. \_\_\_\_\_

1)  $5 \div \frac{1}{5} =$

2. \_\_\_\_\_

1 Whole		1 Whole		1 Whole		1 Whole		1 Whole	

3. \_\_\_\_\_

2)  $2 \div \frac{1}{3} =$

4. \_\_\_\_\_

1 Whole			1 Whole		

5. \_\_\_\_\_

3)  $4 \div \frac{1}{7} =$

6. \_\_\_\_\_

1 Whole		1 Whole		1 Whole		1 Whole	

7. \_\_\_\_\_

4)  $5 \div \frac{1}{6} =$

8. \_\_\_\_\_

1 Whole		1 Whole		1 Whole		1 Whole		1 Whole	

9. \_\_\_\_\_

5)  $2 \div \frac{1}{7} =$

1 Whole			1 Whole		

6)  $4 \div \frac{1}{4} =$

1 Whole		1 Whole		1 Whole		1 Whole	

7)  $3 \div \frac{1}{6} =$

1 Whole		1 Whole		1 Whole	

8)  $3 \div \frac{1}{4} =$

1 Whole		1 Whole		1 Whole	

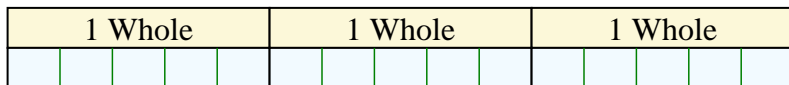
9)  $5 \div \frac{1}{3} =$

1 Whole		1 Whole		1 Whole		1 Whole		1 Whole	

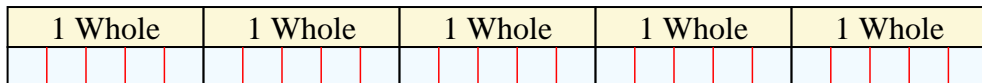


Solve each problem by marking off the fractions. The first is completed for you.


Ex)  $3 \div \frac{1}{5} = ?$  This is the same as saying: How many  $\frac{1}{5}$  are the in 3 wholes?




1)  $5 \div \frac{1}{5} =$  This is the same as saying: How many  $\frac{1}{5}$  are the in 5 wholes?



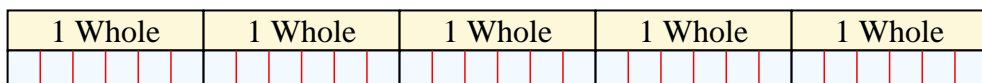
2)  $2 \div \frac{1}{3} =$  This is the same as saying: How many  $\frac{1}{3}$  are the in 2 wholes?




3)  $4 \div \frac{1}{7} =$  This is the same as saying: How many  $\frac{1}{7}$  are the in 4 wholes?



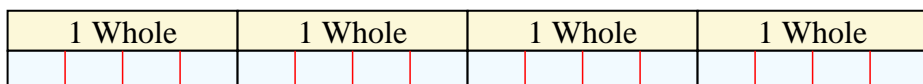
4)  $5 \div \frac{1}{6} =$  This is the same as saying: How many  $\frac{1}{6}$  are the in 5 wholes?



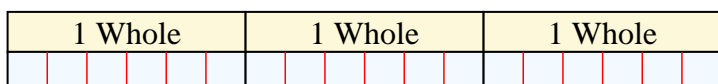
5)  $2 \div \frac{1}{7} =$  This is the same as saying: How many  $\frac{1}{7}$  are the in 2 wholes?



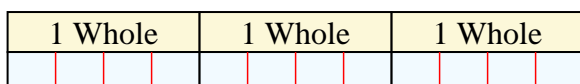
6)  $4 \div \frac{1}{4} =$  This is the same as saying: How many  $\frac{1}{4}$  are the in 4 wholes?



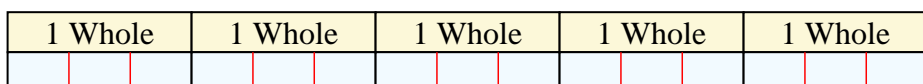
7)  $3 \div \frac{1}{6} =$  This is the same as saying: How many  $\frac{1}{6}$  are the in 3 wholes?



8)  $3 \div \frac{1}{4} =$  This is the same as saying: How many  $\frac{1}{4}$  are the in 3 wholes?



9)  $5 \div \frac{1}{3} =$  This is the same as saying: How many  $\frac{1}{3}$  are the in 5 wholes?



**Answers**

Ex. 15

1. 25

2. 6

3. 28

4. 30

5. 14

6. 16

7. 18

8. 12

9. 15



Solve each problem by marking off the fractions. The first is completed for you.

**Answers**

Ex)  $2 \div \frac{1}{6} = ?$  This is the same as saying: How many  $\frac{1}{6}$  are there in 2 wholes?

Ex. **12**

1 Whole						1 Whole					

1. \_\_\_\_\_

1)  $5 \div \frac{1}{3} =$

2. \_\_\_\_\_

1 Whole	1 Whole	1 Whole	1 Whole	1 Whole

3. \_\_\_\_\_

2)  $5 \div \frac{1}{5} =$

4. \_\_\_\_\_

1 Whole	1 Whole	1 Whole	1 Whole	1 Whole

5. \_\_\_\_\_

3)  $3 \div \frac{1}{5} =$

6. \_\_\_\_\_

1 Whole	1 Whole	1 Whole

7. \_\_\_\_\_

4)  $4 \div \frac{1}{7} =$

8. \_\_\_\_\_

1 Whole	1 Whole	1 Whole	1 Whole

9. \_\_\_\_\_

5)  $2 \div \frac{1}{7} =$

1 Whole	1 Whole

6)  $5 \div \frac{1}{4} =$

1 Whole	1 Whole	1 Whole	1 Whole	1 Whole

7)  $4 \div \frac{1}{3} =$

1 Whole	1 Whole	1 Whole	1 Whole

8)  $4 \div \frac{1}{4} =$

1 Whole	1 Whole	1 Whole	1 Whole


9)  $3 \div \frac{1}{3} =$

1 Whole	1 Whole	1 Whole

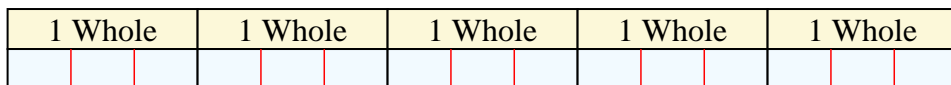


Solve each problem by marking off the fractions. The first is completed for you.

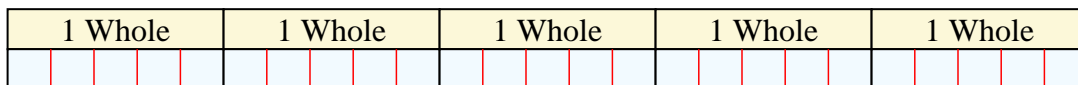
Ex)  $2 \div \frac{1}{6} = ?$  This is the same as saying: How many  $\frac{1}{6}$  are the in 2 wholes?



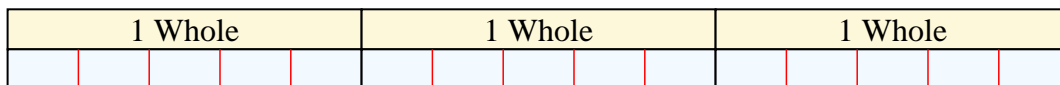
1)  $5 \div \frac{1}{3} =$  This is the same as saying: How many  $\frac{1}{3}$  are the in 5 wholes?



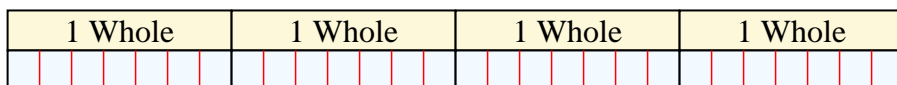
2)  $5 \div \frac{1}{5} =$  This is the same as saying: How many  $\frac{1}{5}$  are the in 5 wholes?



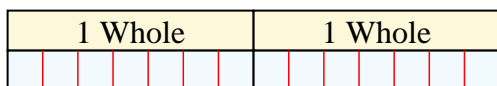
3)  $3 \div \frac{1}{5} =$  This is the same as saying: How many  $\frac{1}{5}$  are the in 3 wholes?



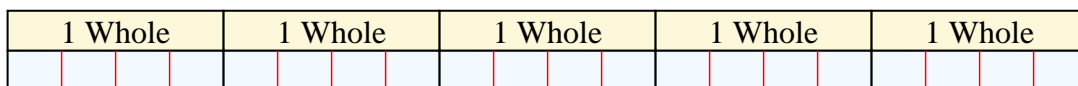
4)  $4 \div \frac{1}{7} =$  This is the same as saying: How many  $\frac{1}{7}$  are the in 4 wholes?



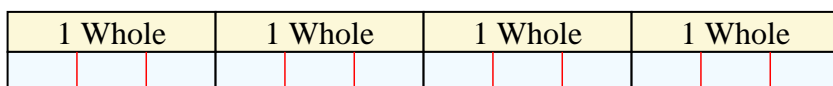
5)  $2 \div \frac{1}{7} =$  This is the same as saying: How many  $\frac{1}{7}$  are the in 2 wholes?



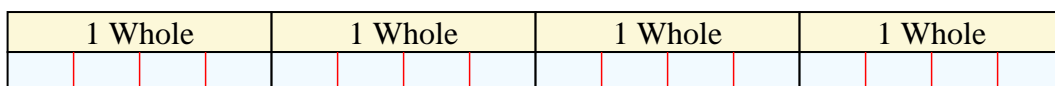
6)  $5 \div \frac{1}{4} =$  This is the same as saying: How many  $\frac{1}{4}$  are the in 5 wholes?



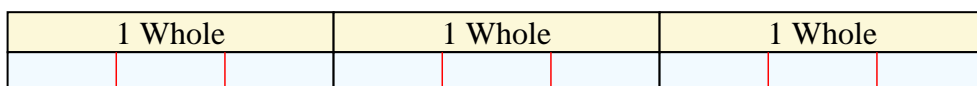
7)  $4 \div \frac{1}{3} =$  This is the same as saying: How many  $\frac{1}{3}$  are the in 4 wholes?



8)  $4 \div \frac{1}{4} =$  This is the same as saying: How many  $\frac{1}{4}$  are the in 4 wholes?



9)  $3 \div \frac{1}{3} =$  This is the same as saying: How many  $\frac{1}{3}$  are the in 3 wholes?



**Answers**

Ex. 12

1. 15

2. 25

3. 15

4. 28

5. 14

6. 20

7. 12

8. 16

9. 9