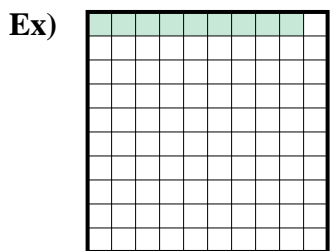
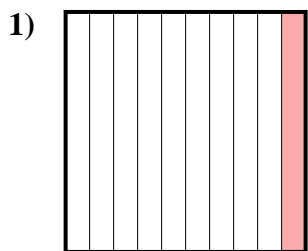




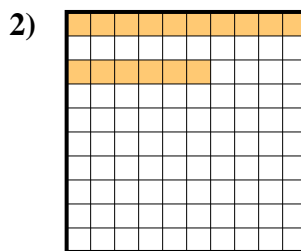
Determine the value written as a fraction , decimal & a percent.



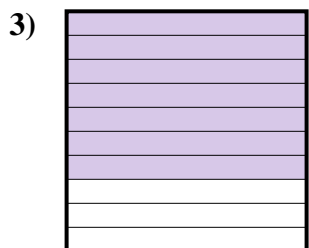
fraction $\frac{9}{100}$
 decimal 0.09
 percent 9



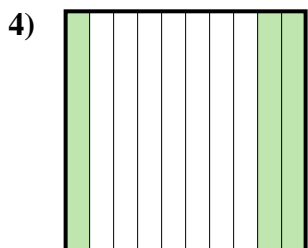
fraction _____
 decimal _____
 percent _____



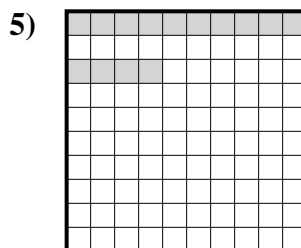
fraction _____
 decimal _____
 percent _____



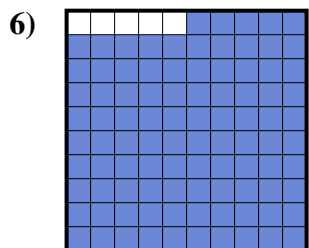
fraction _____
 decimal _____
 percent _____



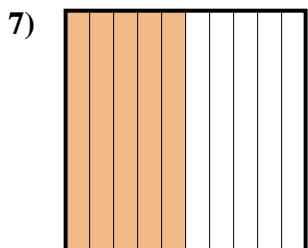
fraction _____
 decimal _____
 percent _____



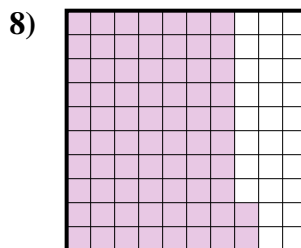
fraction _____
 decimal _____
 percent _____



fraction _____
 decimal _____
 percent _____




fraction _____
 decimal _____
 percent _____



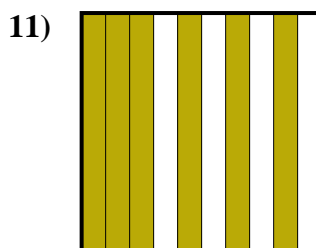
fraction _____
 decimal _____
 percent _____



fraction _____
 decimal _____
 percent _____



fraction _____
 decimal _____
 percent _____



fraction _____
 decimal _____
 percent _____

Answers

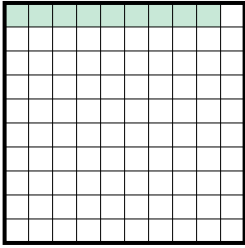
Ex. $\frac{9}{100}$ 0.09 9%

- 1. _____
- 2. _____
- 3. _____
- 4. _____
- 5. _____
- 6. _____
- 7. _____
- 8. _____
- 9. _____
- 10. _____
- 11. _____



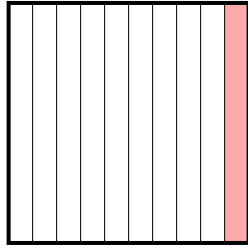
Determine the value written as a fraction , decimal & a percent.

Ex)



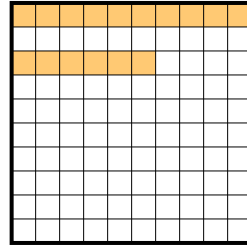
fraction $\frac{9}{100}$
 decimal 0.09
 percent 9

1)




fraction $\frac{1}{10}$
 decimal 0.1
 percent 10

2)



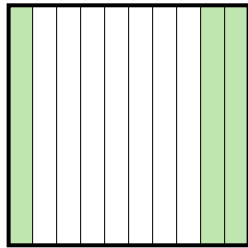
fraction $\frac{16}{100}$
 decimal 0.16
 percent 16

3)



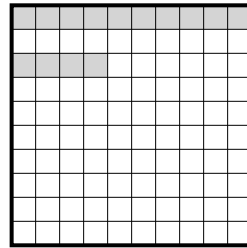
fraction $\frac{7}{10}$
 decimal 0.7
 percent 70

4)



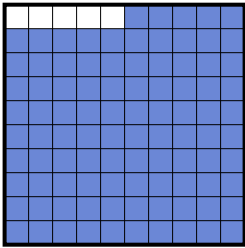
fraction $\frac{3}{10}$
 decimal 0.3
 percent 30

5)



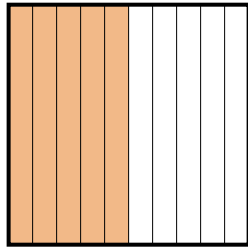
fraction $\frac{14}{100}$
 decimal 0.14
 percent 14

6)



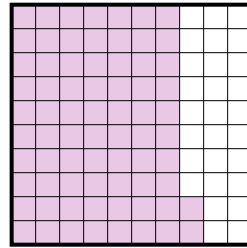
fraction $\frac{95}{100}$
 decimal 0.95
 percent 95

7)



fraction $\frac{5}{10}$
 decimal 0.5
 percent 50

8)




fraction $\frac{72}{100}$
 decimal 0.72
 percent 72

9)




fraction $\frac{4}{10}$
 decimal 0.4
 percent 40

10)



fraction $\frac{2}{10}$
 decimal 0.2
 percent 20

11)



fraction $\frac{6}{10}$
 decimal 0.6
 percent 60

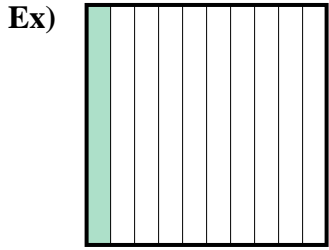
Answers

Ex.	$\frac{9}{100}$	0.09	9%
1.	$\frac{1}{10}$	0.1	10%
2.	$\frac{16}{100}$	0.16	16%
3.	$\frac{7}{10}$	0.7	70%
4.	$\frac{3}{10}$	0.3	30%
5.	$\frac{14}{100}$	0.14	14%
6.	$\frac{95}{100}$	0.95	95%
7.	$\frac{5}{10}$	0.5	50%
8.	$\frac{72}{100}$	0.72	72%
9.	$\frac{4}{10}$	0.4	40%
10.	$\frac{2}{10}$	0.2	20%
11.	$\frac{6}{10}$	0.6	60%

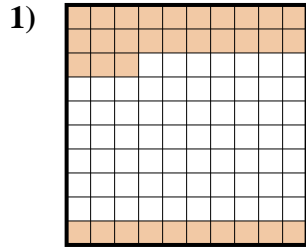


Determine the value written as a fraction , decimal & a percent.

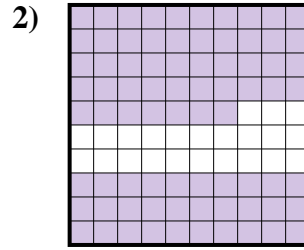
Answers



fraction $\frac{1}{10}$
 decimal 0.1
 percent 10



fraction _____
 decimal _____
 percent _____



fraction _____
 decimal _____
 percent _____

Ex. $\frac{1}{10}$ 0.1 10%

1. _____

2. _____

3. _____

4. _____

5. _____

6. _____

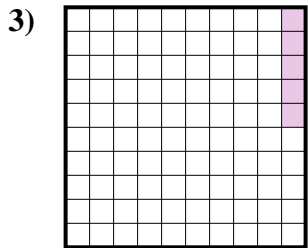
7. _____

8. _____

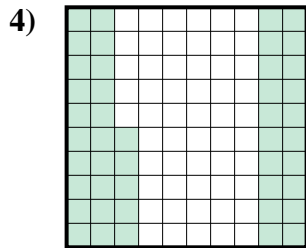
9. _____

10. _____

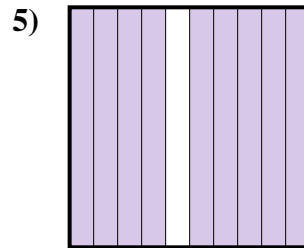
11. _____




fraction _____
 decimal _____
 percent _____



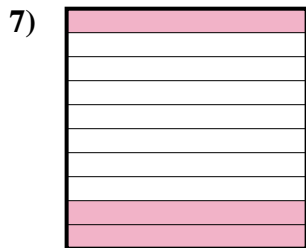
fraction _____
 decimal _____
 percent _____




fraction _____
 decimal _____
 percent _____



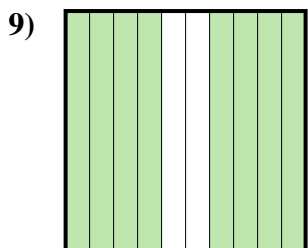
fraction _____
 decimal _____
 percent _____



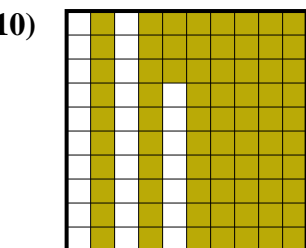
fraction _____
 decimal _____
 percent _____



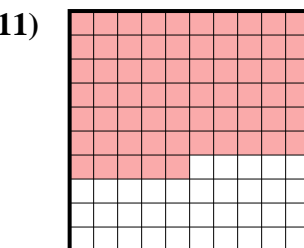
fraction _____
 decimal _____
 percent _____



fraction _____
 decimal _____
 percent _____



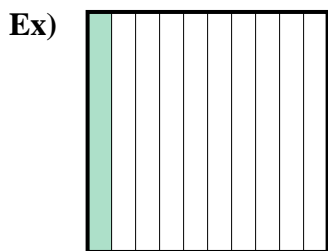
fraction _____
 decimal _____
 percent _____



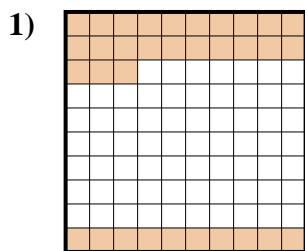
fraction _____
 decimal _____
 percent _____



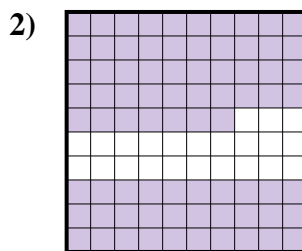
Determine the value written as a fraction , decimal & a percent.



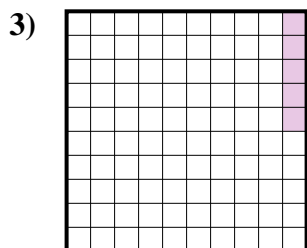
fraction $\frac{1}{10}$
 decimal 0.1
 percent 10



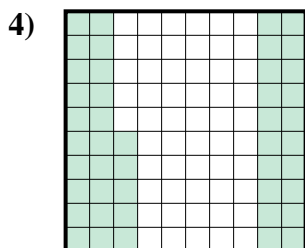
fraction $\frac{33}{100}$
 decimal 0.33
 percent 33



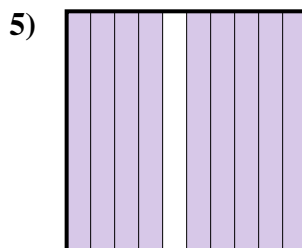
fraction $\frac{77}{100}$
 decimal 0.77
 percent 77




fraction $\frac{5}{100}$
 decimal 0.05
 percent 5



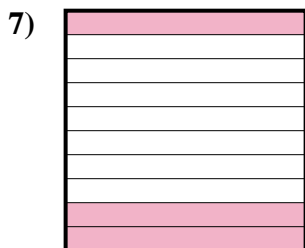
fraction $\frac{45}{100}$
 decimal 0.45
 percent 45




fraction $\frac{9}{10}$
 decimal 0.9
 percent 90



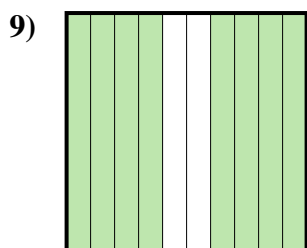
fraction $\frac{7}{10}$
 decimal 0.7
 percent 70



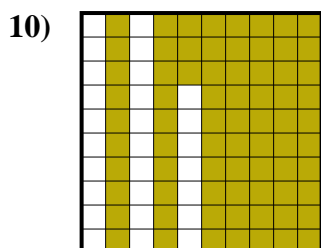
fraction $\frac{3}{10}$
 decimal 0.3
 percent 30



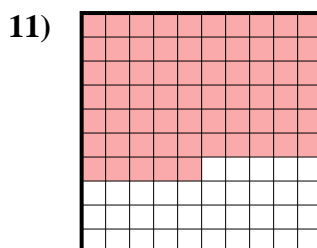
fraction $\frac{2}{10}$
 decimal 0.2
 percent 20



fraction $\frac{8}{10}$
 decimal 0.8
 percent 80



fraction $\frac{73}{100}$
 decimal 0.73
 percent 73



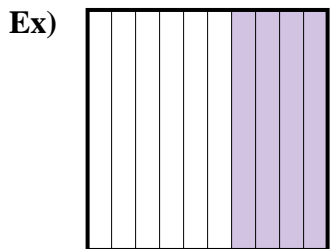
fraction $\frac{65}{100}$
 decimal 0.65
 percent 65

Answers

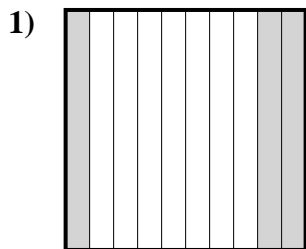
- Ex. $\frac{1}{10}$ **0.1** **10%**
 1. $\frac{33}{100}$ **0.33** **33%**
 2. $\frac{77}{100}$ **0.77** **77%**
 3. $\frac{5}{100}$ **0.05** **5%**
 4. $\frac{45}{100}$ **0.45** **45%**
 5. $\frac{9}{10}$ **0.9** **90%**
 6. $\frac{7}{10}$ **0.7** **70%**
 7. $\frac{3}{10}$ **0.3** **30%**
 8. $\frac{2}{10}$ **0.2** **20%**
 9. $\frac{8}{10}$ **0.8** **80%**
 10. $\frac{73}{100}$ **0.73** **73%**
 11. $\frac{65}{100}$ **0.65** **65%**



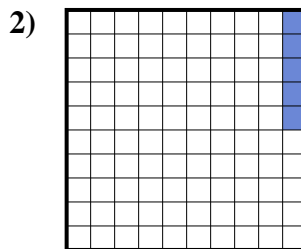
Determine the value written as a fraction , decimal & a percent.



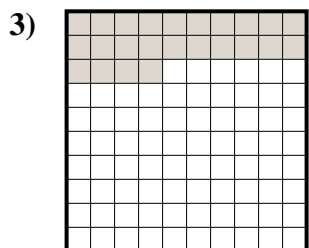
fraction $\frac{4}{10}$
 decimal 0.4
 percent 40



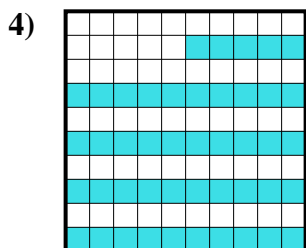
fraction _____
 decimal _____
 percent _____



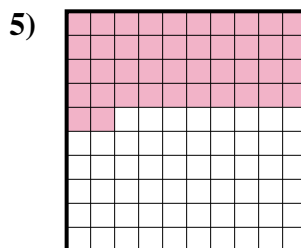
fraction _____
 decimal _____
 percent _____



fraction _____
 decimal _____
 percent _____




fraction _____
 decimal _____
 percent _____



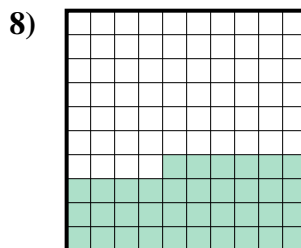
fraction _____
 decimal _____
 percent _____



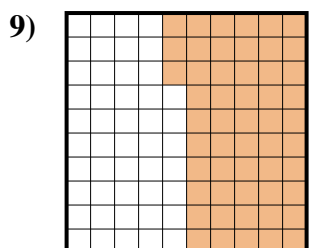
fraction _____
 decimal _____
 percent _____



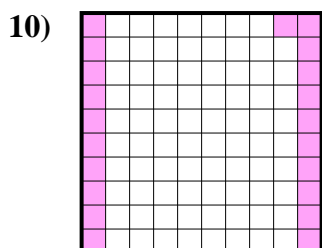
fraction _____
 decimal _____
 percent _____



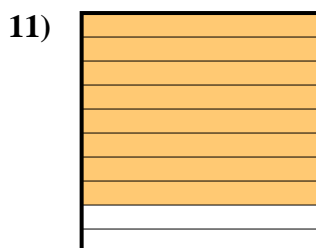
fraction _____
 decimal _____
 percent _____



fraction _____
 decimal _____
 percent _____



fraction _____
 decimal _____
 percent _____



fraction _____
 decimal _____
 percent _____

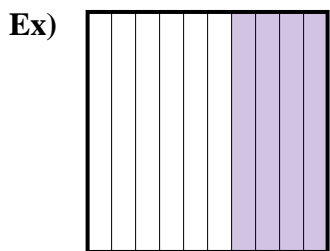
Answers

Ex. $\frac{4}{10}$ **0.4** **40%**

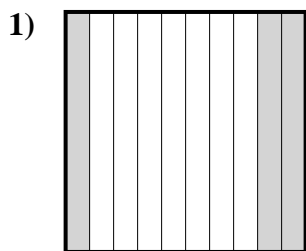
- 1. _____
- 2. _____
- 3. _____
- 4. _____
- 5. _____
- 6. _____
- 7. _____
- 8. _____
- 9. _____
- 10. _____
- 11. _____



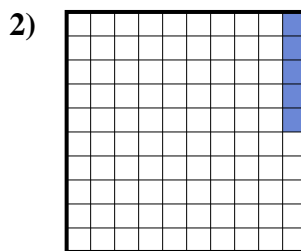
Determine the value written as a fraction , decimal & a percent.



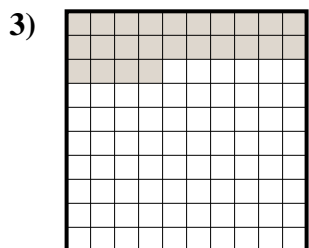
fraction $\frac{4}{10}$
 decimal 0.4
 percent 40



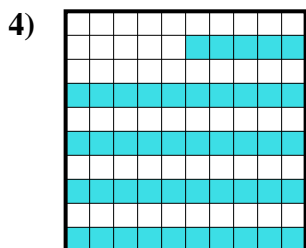
fraction $\frac{3}{10}$
 decimal 0.3
 percent 30



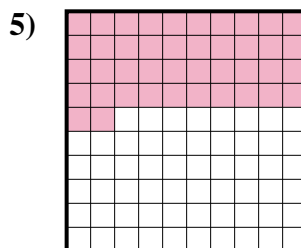
fraction $\frac{5}{100}$
 decimal 0.05
 percent 5



fraction $\frac{24}{100}$
 decimal 0.24
 percent 24




fraction $\frac{45}{100}$
 decimal 0.45
 percent 45



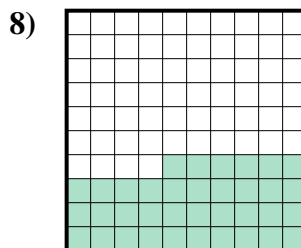
fraction $\frac{42}{100}$
 decimal 0.42
 percent 42



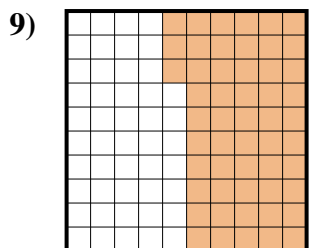
fraction $\frac{2}{10}$
 decimal 0.2
 percent 20



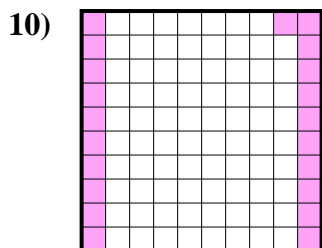
fraction $\frac{1}{10}$
 decimal 0.1
 percent 10



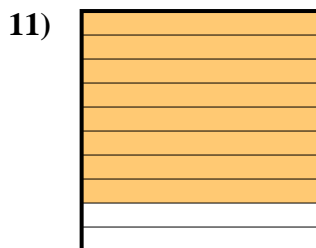
fraction $\frac{36}{100}$
 decimal 0.36
 percent 36



fraction $\frac{53}{100}$
 decimal 0.53
 percent 53



fraction $\frac{21}{100}$
 decimal 0.21
 percent 21



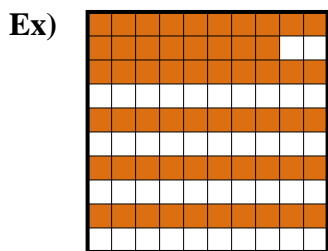
fraction $\frac{8}{10}$
 decimal 0.8
 percent 80

Answers

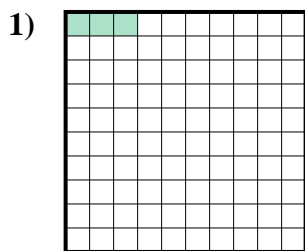
Ex.	$\frac{4}{10}$	0.4	40%
1.	$\frac{3}{10}$	0.3	30%
2.	$\frac{5}{100}$	0.05	5%
3.	$\frac{24}{100}$	0.24	24%
4.	$\frac{45}{100}$	0.45	45%
5.	$\frac{42}{100}$	0.42	42%
6.	$\frac{2}{10}$	0.2	20%
7.	$\frac{1}{10}$	0.1	10%
8.	$\frac{36}{100}$	0.36	36%
9.	$\frac{53}{100}$	0.53	53%
10.	$\frac{21}{100}$	0.21	21%
11.	$\frac{8}{10}$	0.8	80%



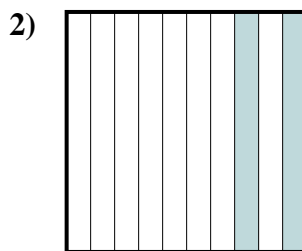
Determine the value written as a fraction , decimal & a percent.



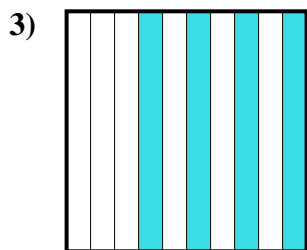
fraction $\frac{58}{100}$
 decimal 0.58
 percent 58



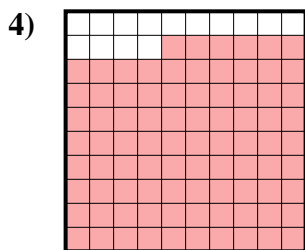
fraction $\frac{3}{100}$
 decimal 0.03
 percent 3



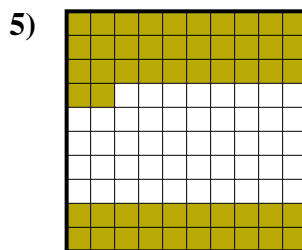
fraction $\frac{2}{10}$
 decimal 0.2
 percent 20




fraction $\frac{4}{10}$
 decimal 0.4
 percent 40



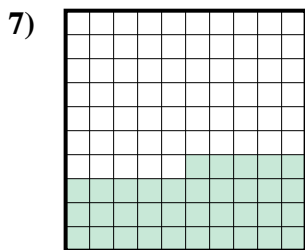
fraction $\frac{86}{100}$
 decimal 0.86
 percent 86



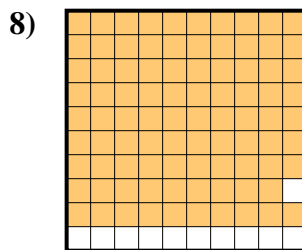
fraction $\frac{52}{100}$
 decimal 0.52
 percent 52



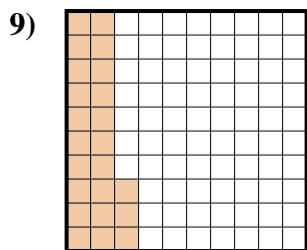
fraction $\frac{5}{10}$
 decimal 0.5
 percent 50



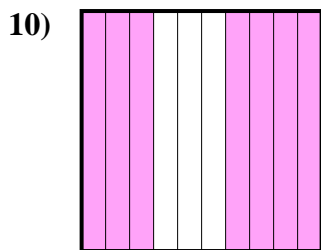
fraction $\frac{35}{100}$
 decimal 0.35
 percent 35



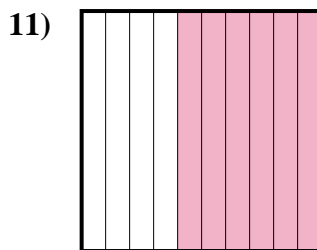
fraction $\frac{89}{100}$
 decimal 0.89
 percent 89



fraction $\frac{23}{100}$
 decimal 0.23
 percent 23



fraction $\frac{7}{10}$
 decimal 0.7
 percent 70



fraction $\frac{6}{10}$
 decimal 0.6
 percent 60

Answers

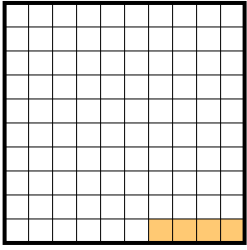
Ex.	$\frac{58}{100}$	0.58	58%
1.	$\frac{3}{100}$	0.03	3%
2.	$\frac{2}{10}$	0.2	20%
3.	$\frac{4}{10}$	0.4	40%
4.	$\frac{86}{100}$	0.86	86%
5.	$\frac{52}{100}$	0.52	52%
6.	$\frac{5}{10}$	0.5	50%
7.	$\frac{35}{100}$	0.35	35%
8.	$\frac{89}{100}$	0.89	89%
9.	$\frac{23}{100}$	0.23	23%
10.	$\frac{7}{10}$	0.7	70%
11.	$\frac{6}{10}$	0.6	60%



Determine the value written as a fraction , decimal & a percent.


Answers

Ex)




fraction $\frac{4}{100}$
decimal 0.04
percent 4

1)



fraction _____
decimal _____
percent _____

2)



fraction _____
decimal _____
percent _____

Ex. $\frac{4}{100}$ 0.04 4%

1. _____

2. _____

3. _____

4. _____

5. _____

6. _____

7. _____

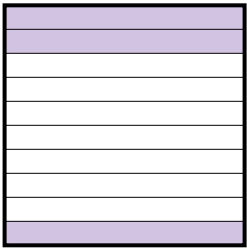
8. _____

9. _____

10. _____

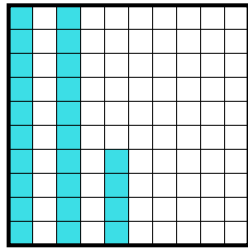
11. _____

3)



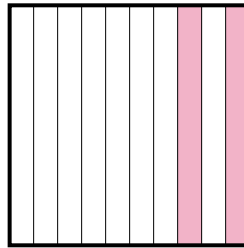
fraction _____
decimal _____
percent _____

4)



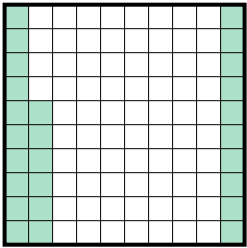
fraction _____
decimal _____
percent _____

5)



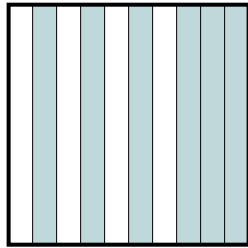
fraction _____
decimal _____
percent _____

6)



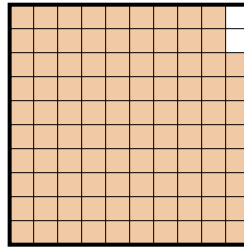
fraction _____
decimal _____
percent _____

7)



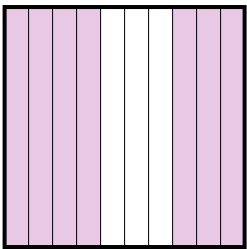
fraction _____
decimal _____
percent _____

8)



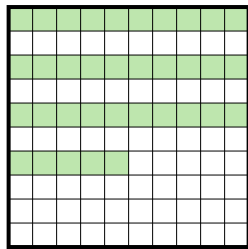
fraction _____
decimal _____
percent _____

9)



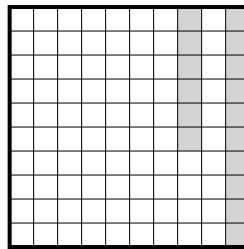
fraction _____
decimal _____
percent _____

10)



fraction _____
decimal _____
percent _____

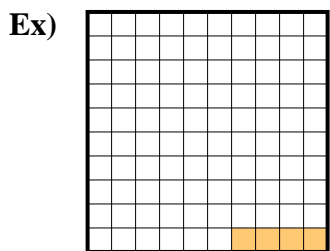
11)



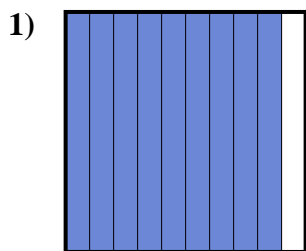
fraction _____
decimal _____
percent _____



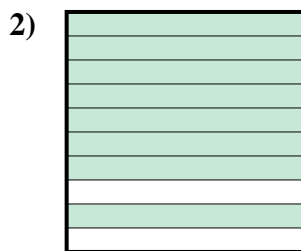
Determine the value written as a fraction , decimal & a percent.




fraction $\frac{4}{100}$
 decimal 0.04
 percent 4



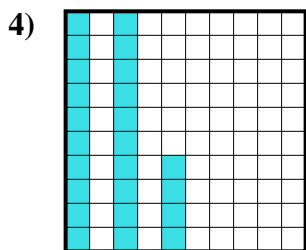
fraction $\frac{9}{10}$
 decimal 0.9
 percent 90



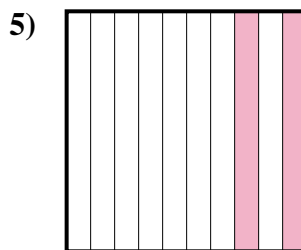
fraction $\frac{8}{10}$
 decimal 0.8
 percent 80



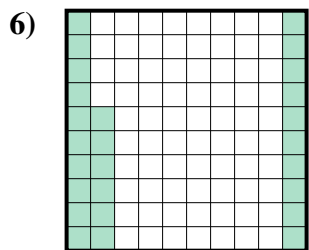
fraction $\frac{3}{10}$
 decimal 0.3
 percent 30



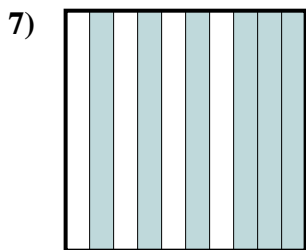
fraction $\frac{24}{100}$
 decimal 0.24
 percent 24



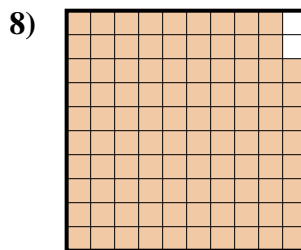
fraction $\frac{2}{10}$
 decimal 0.2
 percent 20



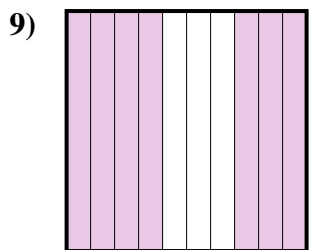
fraction $\frac{26}{100}$
 decimal 0.26
 percent 26



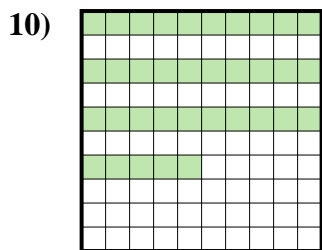
fraction $\frac{6}{10}$
 decimal 0.6
 percent 60



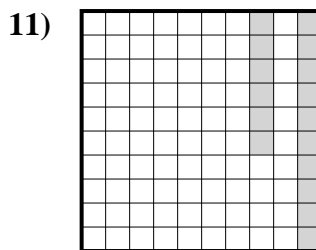
fraction $\frac{98}{100}$
 decimal 0.98
 percent 98



fraction $\frac{7}{10}$
 decimal 0.7
 percent 70



fraction $\frac{35}{100}$
 decimal 0.35
 percent 35




fraction $\frac{16}{100}$
 decimal 0.16
 percent 16

Answers


Ex.	$\frac{4}{100}$	0.04	4%
1.	$\frac{9}{10}$	0.9	90%
2.	$\frac{8}{10}$	0.8	80%
3.	$\frac{3}{10}$	0.3	30%
4.	$\frac{24}{100}$	0.24	24%
5.	$\frac{2}{10}$	0.2	20%
6.	$\frac{26}{100}$	0.26	26%
7.	$\frac{6}{10}$	0.6	60%
8.	$\frac{98}{100}$	0.98	98%
9.	$\frac{7}{10}$	0.7	70%
10.	$\frac{35}{100}$	0.35	35%
11.	$\frac{16}{100}$	0.16	16%



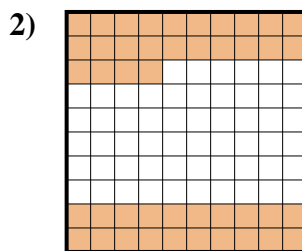
Determine the value written as a fraction , decimal & a percent.



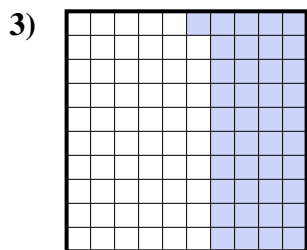
fraction $\frac{9}{10}$
 decimal 0.9
 percent 90




fraction $\frac{2}{10}$
 decimal 0.2
 percent 20



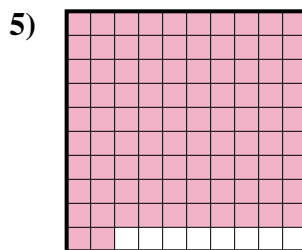
fraction $\frac{44}{100}$
 decimal 0.44
 percent 44



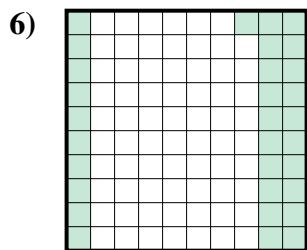
fraction $\frac{41}{100}$
 decimal 0.41
 percent 41



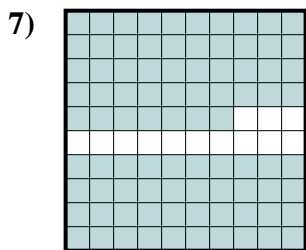
fraction $\frac{6}{10}$
 decimal 0.6
 percent 60



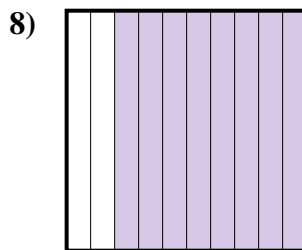
fraction $\frac{92}{100}$
 decimal 0.92
 percent 92



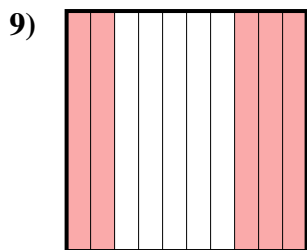
fraction $\frac{31}{100}$
 decimal 0.31
 percent 31



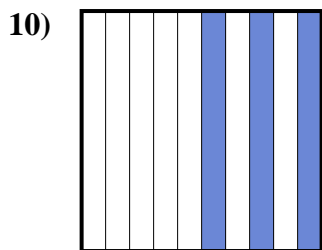
fraction $\frac{87}{100}$
 decimal 0.87
 percent 87



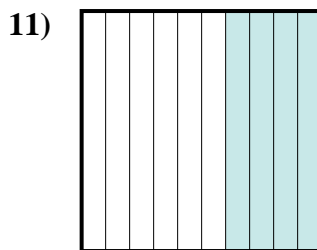
fraction $\frac{8}{10}$
 decimal 0.8
 percent 80



fraction $\frac{5}{10}$
 decimal 0.5
 percent 50



fraction $\frac{3}{10}$
 decimal 0.3
 percent 30



fraction $\frac{4}{10}$
 decimal 0.4
 percent 40

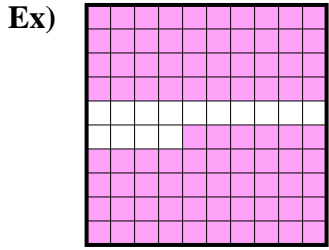
Answers

Ex.	$\frac{9}{10}$	0.9	90%
1.	$\frac{2}{10}$	0.2	20%
2.	$\frac{44}{100}$	0.44	44%
3.	$\frac{41}{100}$	0.41	41%
4.	$\frac{6}{10}$	0.6	60%
5.	$\frac{92}{100}$	0.92	92%
6.	$\frac{31}{100}$	0.31	31%
7.	$\frac{87}{100}$	0.87	87%
8.	$\frac{8}{10}$	0.8	80%
9.	$\frac{5}{10}$	0.5	50%
10.	$\frac{3}{10}$	0.3	30%
11.	$\frac{4}{10}$	0.4	40%

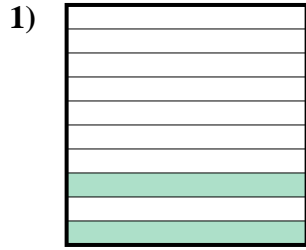


Determine the value written as a fraction , decimal & a percent.

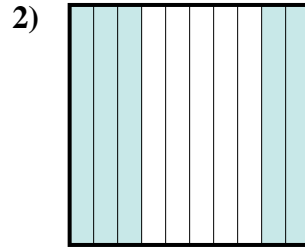
Answers



fraction $\frac{86}{100}$
 decimal 0.86
 percent 86



fraction _____
 decimal _____
 percent _____



fraction _____
 decimal _____
 percent _____

Ex. $\frac{86}{100}$ **0.86** **86%**

1. _____

2. _____

3. _____

4. _____

5. _____

6. _____

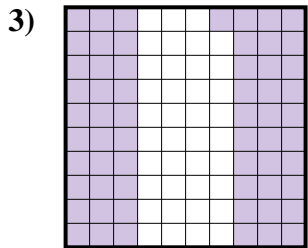
7. _____

8. _____

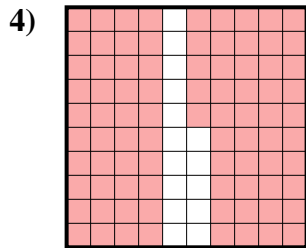
9. _____

10. _____

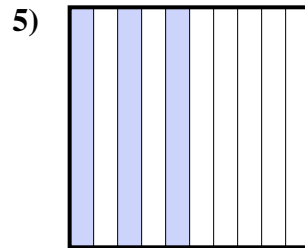
11. _____



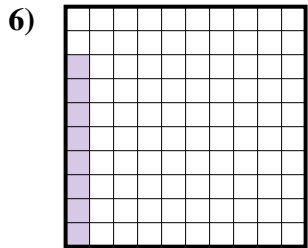
fraction _____
 decimal _____
 percent _____



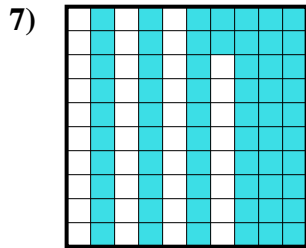
fraction _____
 decimal _____
 percent _____



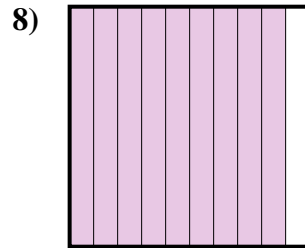
fraction _____
 decimal _____
 percent _____



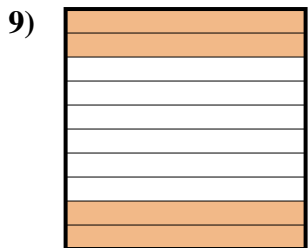
fraction _____
 decimal _____
 percent _____



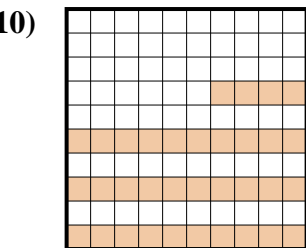
fraction _____
 decimal _____
 percent _____




fraction _____
 decimal _____
 percent _____



fraction _____
 decimal _____
 percent _____



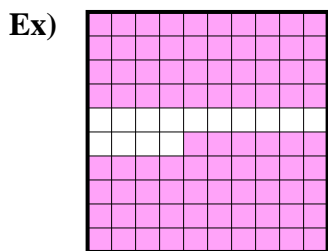
fraction _____
 decimal _____
 percent _____




fraction _____
 decimal _____
 percent _____



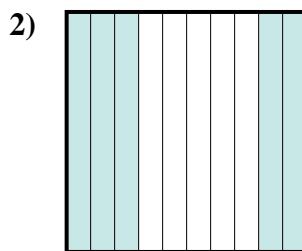
Determine the value written as a fraction , decimal & a percent.



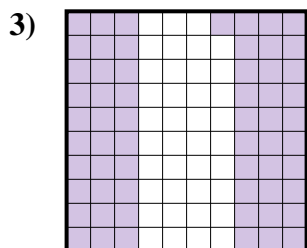
fraction $\frac{86}{100}$
 decimal 0.86
 percent 86



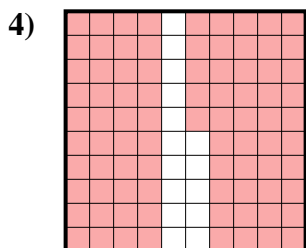
fraction $\frac{2}{10}$
 decimal 0.2
 percent 20



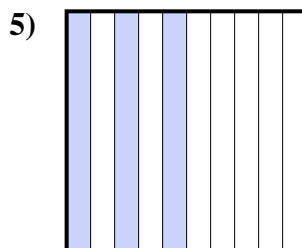
fraction $\frac{5}{10}$
 decimal 0.5
 percent 50



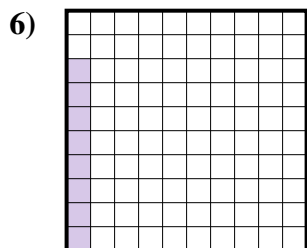
fraction $\frac{61}{100}$
 decimal 0.61
 percent 61



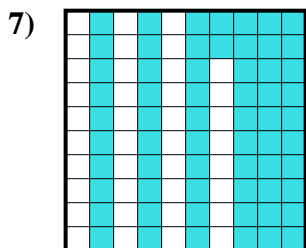
fraction $\frac{85}{100}$
 decimal 0.85
 percent 85



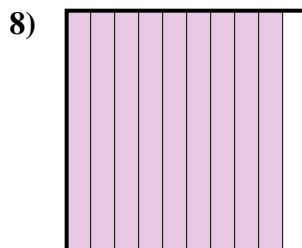
fraction $\frac{3}{10}$
 decimal 0.3
 percent 30



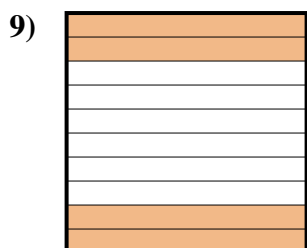
fraction $\frac{8}{100}$
 decimal 0.08
 percent 8



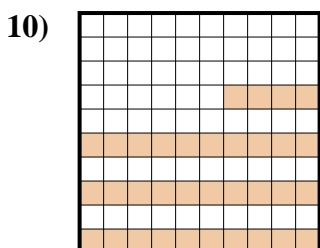
fraction $\frac{62}{100}$
 decimal 0.62
 percent 62



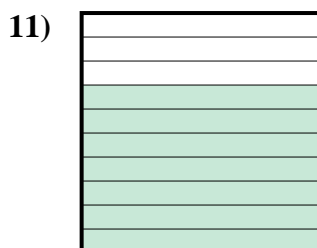
fraction $\frac{9}{10}$
 decimal 0.9
 percent 90



fraction $\frac{4}{10}$
 decimal 0.4
 percent 40



fraction $\frac{34}{100}$
 decimal 0.34
 percent 34



fraction $\frac{7}{10}$
 decimal 0.7
 percent 70

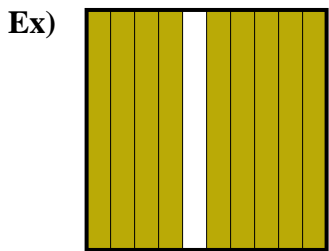
Answers

Ex.	$\frac{86}{100}$	0.86	86%
1.	$\frac{2}{10}$	0.2	20%
2.	$\frac{5}{10}$	0.5	50%
3.	$\frac{61}{100}$	0.61	61%
4.	$\frac{85}{100}$	0.85	85%
5.	$\frac{3}{10}$	0.3	30%
6.	$\frac{8}{100}$	0.08	8%
7.	$\frac{62}{100}$	0.62	62%
8.	$\frac{9}{10}$	0.9	90%
9.	$\frac{4}{10}$	0.4	40%
10.	$\frac{34}{100}$	0.34	34%
11.	$\frac{7}{10}$	0.7	70%

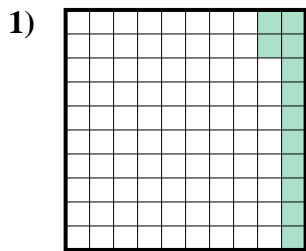


Determine the value written as a fraction , decimal & a percent.

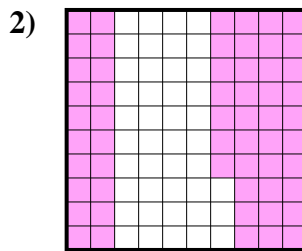
Answers



fraction $\frac{9}{10}$
 decimal 0.9
 percent 90



fraction _____
 decimal _____
 percent _____



fraction _____
 decimal _____
 percent _____

Ex. $\frac{9}{10}$ 0.9 90%

1. _____

2. _____

3. _____

4. _____

5. _____

6. _____

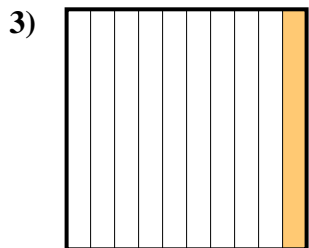
7. _____

8. _____

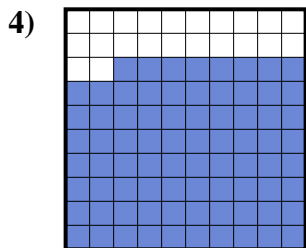
9. _____

10. _____

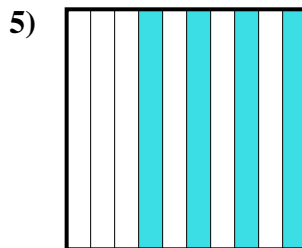
11. _____



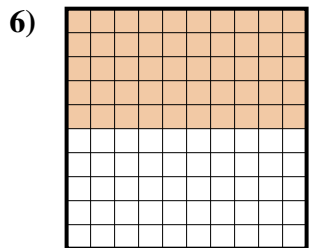
fraction _____
 decimal _____
 percent _____



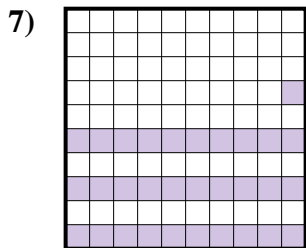
fraction _____
 decimal _____
 percent _____



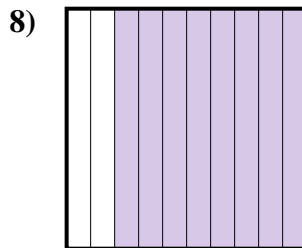
fraction _____
 decimal _____
 percent _____



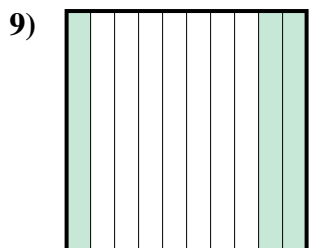
fraction _____
 decimal _____
 percent _____



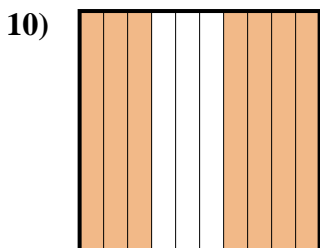
fraction _____
 decimal _____
 percent _____



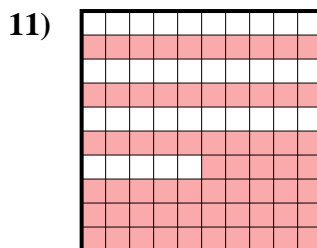
fraction _____
 decimal _____
 percent _____



fraction _____
 decimal _____
 percent _____



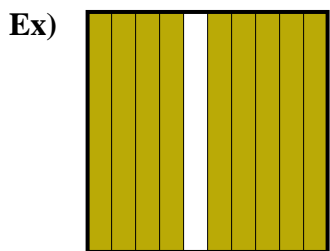
fraction _____
 decimal _____
 percent _____



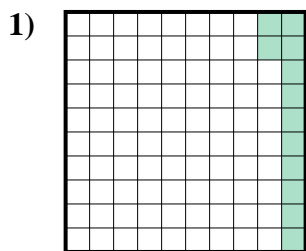
fraction _____
 decimal _____
 percent _____



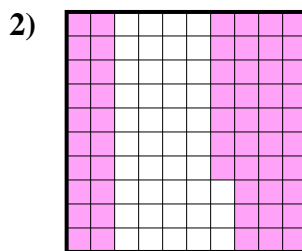
Determine the value written as a fraction , decimal & a percent.



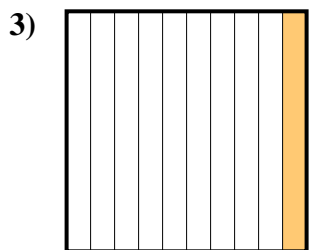
fraction $\frac{9}{10}$
 decimal 0.9
 percent 90



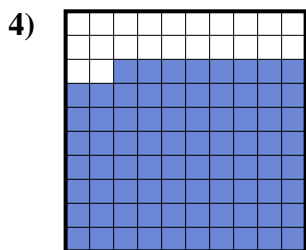
fraction $\frac{12}{100}$
 decimal 0.12
 percent 12



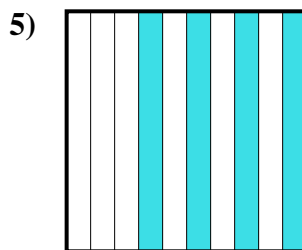
fraction $\frac{57}{100}$
 decimal 0.57
 percent 57



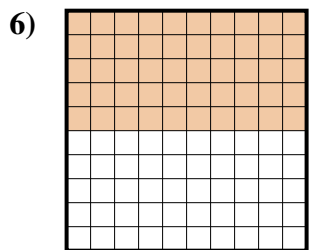
fraction $\frac{1}{10}$
 decimal 0.1
 percent 10



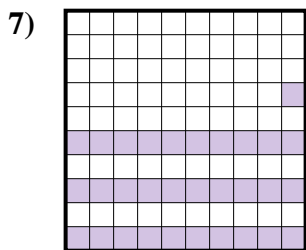
fraction $\frac{78}{100}$
 decimal 0.78
 percent 78



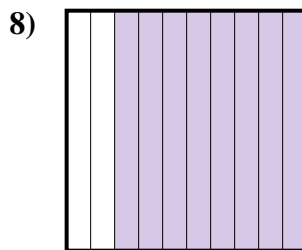
fraction $\frac{4}{10}$
 decimal 0.4
 percent 40



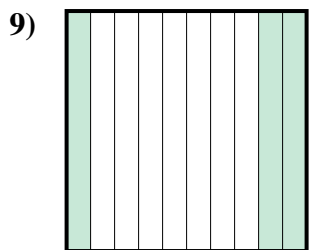
fraction $\frac{50}{100}$
 decimal 0.50
 percent 50



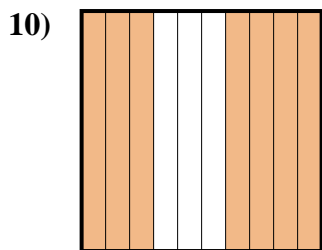
fraction $\frac{31}{100}$
 decimal 0.31
 percent 31



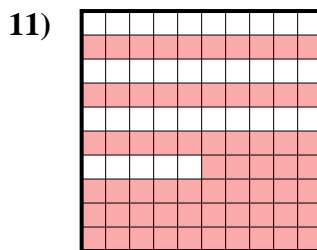
fraction $\frac{8}{10}$
 decimal 0.8
 percent 80



fraction $\frac{3}{10}$
 decimal 0.3
 percent 30



fraction $\frac{7}{10}$
 decimal 0.7
 percent 70



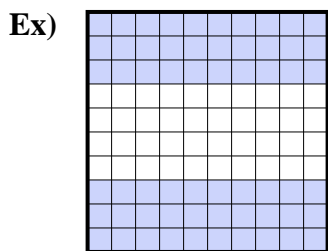
fraction $\frac{65}{100}$
 decimal 0.65
 percent 65

Answers

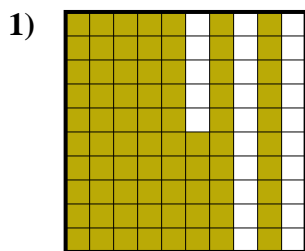
- Ex. $\frac{9}{10}$ **0.9** **90%**
 1. $\frac{12}{100}$ **0.12** **12%**
 2. $\frac{57}{100}$ **0.57** **57%**
 3. $\frac{1}{10}$ **0.1** **10%**
 4. $\frac{78}{100}$ **0.78** **78%**
 5. $\frac{4}{10}$ **0.4** **40%**
 6. $\frac{50}{100}$ **0.50** **50%**
 7. $\frac{31}{100}$ **0.31** **31%**
 8. $\frac{8}{10}$ **0.8** **80%**
 9. $\frac{3}{10}$ **0.3** **30%**
 10. $\frac{7}{10}$ **0.7** **70%**
 11. $\frac{65}{100}$ **0.65** **65%**



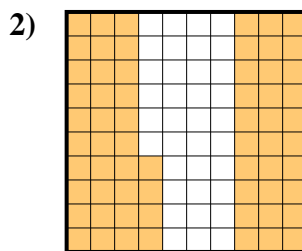
Determine the value written as a fraction , decimal & a percent.



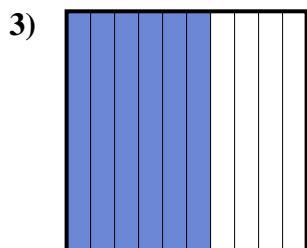
fraction $\frac{60}{100}$
 decimal 0.60
 percent 60



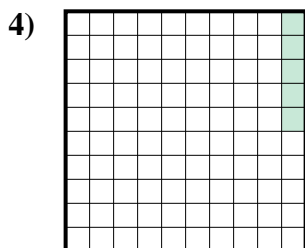
fraction $\frac{75}{100}$
 decimal 0.75
 percent 75



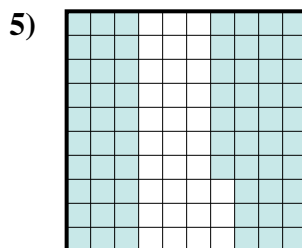
fraction $\frac{64}{100}$
 decimal 0.64
 percent 64



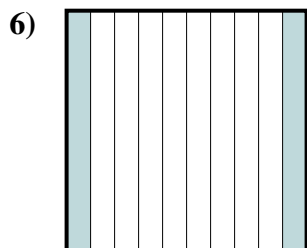
fraction $\frac{6}{10}$
 decimal 0.6
 percent 60



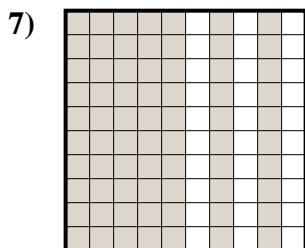
fraction $\frac{5}{100}$
 decimal 0.05
 percent 5



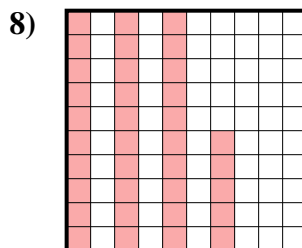
fraction $\frac{67}{100}$
 decimal 0.67
 percent 67



fraction $\frac{2}{10}$
 decimal 0.2
 percent 20



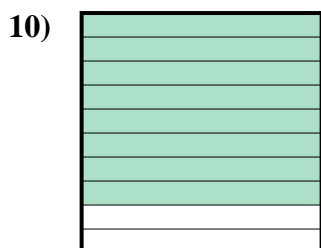
fraction $\frac{70}{100}$
 decimal 0.70
 percent 70



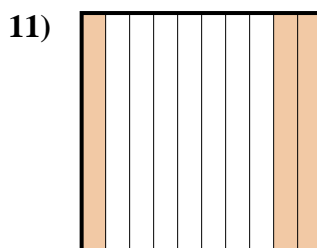
fraction $\frac{35}{100}$
 decimal 0.35
 percent 35



fraction $\frac{9}{10}$
 decimal 0.9
 percent 90



fraction $\frac{8}{10}$
 decimal 0.8
 percent 80



fraction $\frac{3}{10}$
 decimal 0.3
 percent 30

Answers

- Ex. $\frac{60}{100}$ **0.60** **60%**
 1. $\frac{75}{100}$ **0.75** **75%**
 2. $\frac{64}{100}$ **0.64** **64%**
 3. $\frac{6}{10}$ **0.6** **60%**
 4. $\frac{5}{100}$ **0.05** **5%**
 5. $\frac{67}{100}$ **0.67** **67%**
 6. $\frac{2}{10}$ **0.2** **20%**
 7. $\frac{70}{100}$ **0.70** **70%**
 8. $\frac{35}{100}$ **0.35** **35%**
 9. $\frac{9}{10}$ **0.9** **90%**
 10. $\frac{8}{10}$ **0.8** **80%**
 11. $\frac{3}{10}$ **0.3** **30%**