







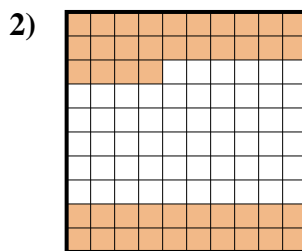
Determine the value written as a fraction , decimal & a percent.



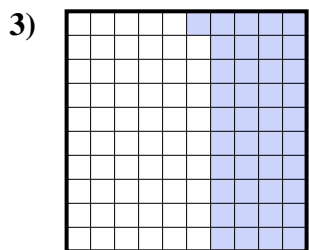
fraction  $\frac{9}{10}$   
 decimal  $0.9$   
 percent  $90$




fraction  $\frac{2}{10}$   
 decimal  $0.2$   
 percent  $20$



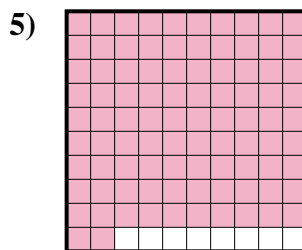
fraction  $\frac{44}{100}$   
 decimal  $0.44$   
 percent  $44$



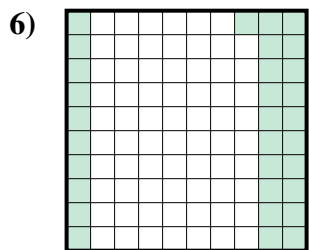
fraction  $\frac{41}{100}$   
 decimal  $0.41$   
 percent  $41$



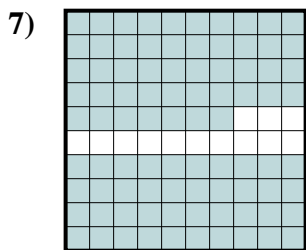
fraction  $\frac{6}{10}$   
 decimal  $0.6$   
 percent  $60$



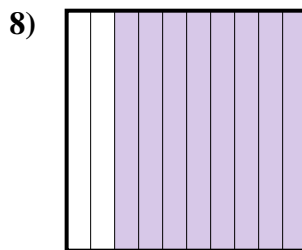
fraction  $\frac{92}{100}$   
 decimal  $0.92$   
 percent  $92$



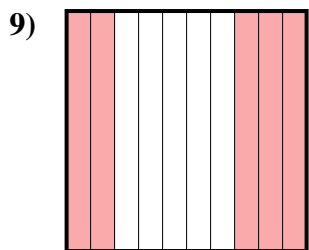
fraction  $\frac{31}{100}$   
 decimal  $0.31$   
 percent  $31$



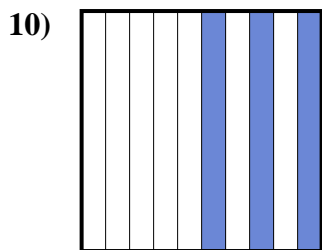
fraction  $\frac{87}{100}$   
 decimal  $0.87$   
 percent  $87$



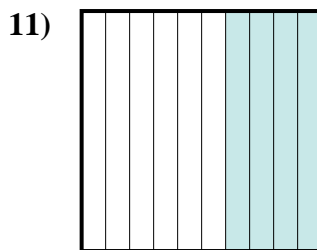
fraction  $\frac{8}{10}$   
 decimal  $0.8$   
 percent  $80$



fraction  $\frac{5}{10}$   
 decimal  $0.5$   
 percent  $50$



fraction  $\frac{3}{10}$   
 decimal  $0.3$   
 percent  $30$



fraction  $\frac{4}{10}$   
 decimal  $0.4$   
 percent  $40$

**Answers**

Ex.	$\frac{9}{10}$	<b>0.9</b>	<b>90%</b>
1.	$\frac{2}{10}$	<b>0.2</b>	<b>20%</b>
2.	$\frac{44}{100}$	<b>0.44</b>	<b>44%</b>
3.	$\frac{41}{100}$	<b>0.41</b>	<b>41%</b>
4.	$\frac{6}{10}$	<b>0.6</b>	<b>60%</b>
5.	$\frac{92}{100}$	<b>0.92</b>	<b>92%</b>
6.	$\frac{31}{100}$	<b>0.31</b>	<b>31%</b>
7.	$\frac{87}{100}$	<b>0.87</b>	<b>87%</b>
8.	$\frac{8}{10}$	<b>0.8</b>	<b>80%</b>
9.	$\frac{5}{10}$	<b>0.5</b>	<b>50%</b>
10.	$\frac{3}{10}$	<b>0.3</b>	<b>30%</b>
11.	$\frac{4}{10}$	<b>0.4</b>	<b>40%</b>