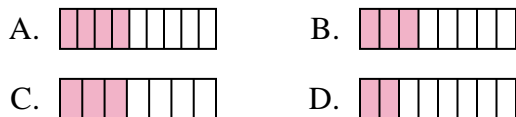
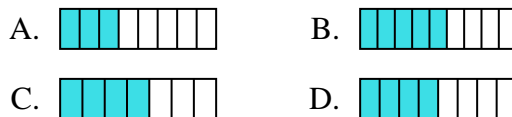


**Determine which choice best answers each question.****Answers**

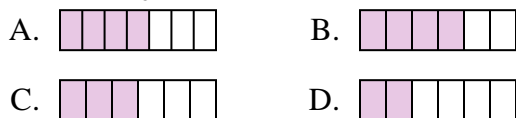
- 1) Which of the shapes below is shaded to represent $\frac{3}{8}$?



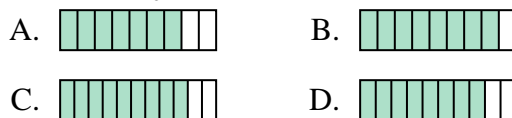
- 2) Which of the shapes below is shaded to represent $\frac{4}{8}$?



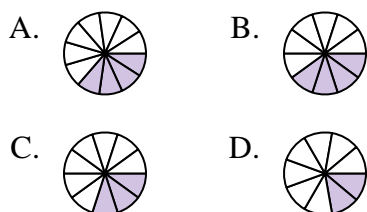
- 3) Which of the shapes below is shaded to represent $\frac{3}{6}$?



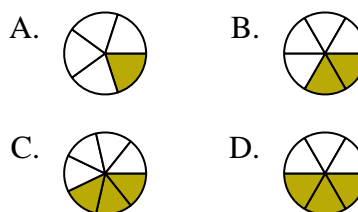
- 4) Which of the shapes below is shaded to represent $\frac{8}{10}$?



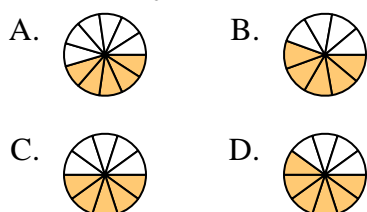
- 5) Which of the shapes below is shaded to represent $\frac{3}{10}$?



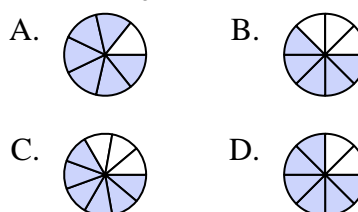
- 6) Which of the shapes below is shaded to represent $\frac{2}{6}$?



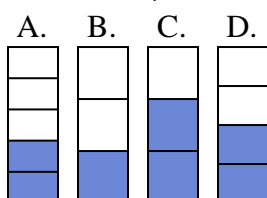
- 7) Which of the shapes below is shaded to represent $\frac{5}{10}$?



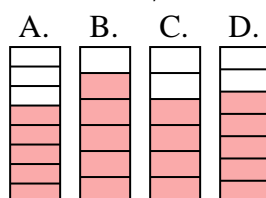
- 8) Which of the shapes below is shaded to represent $\frac{6}{8}$?



- 9) Which of the shapes below is shaded to represent $\frac{2}{4}$?



- 10) Which of the shapes below is shaded to represent $\frac{5}{7}$?



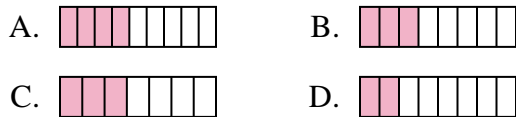
1. _____
2. _____
3. _____
4. _____
5. _____
6. _____
7. _____
8. _____
9. _____
10. _____



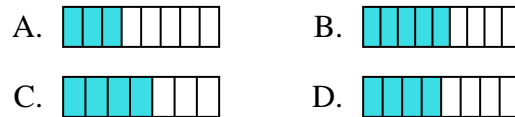
Determine which choice best answers each question.

Answers

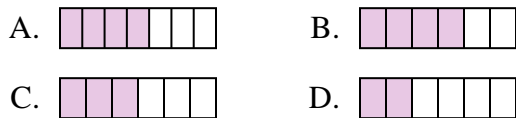
- 1) Which of the shapes below is shaded to represent $\frac{3}{8}$?



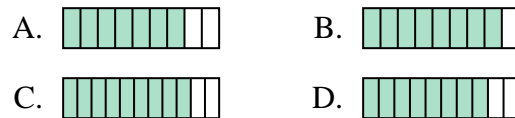
- 2) Which of the shapes below is shaded to represent $\frac{4}{8}$?



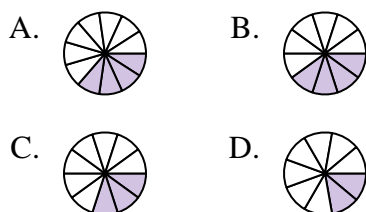
- 3) Which of the shapes below is shaded to represent $\frac{3}{6}$?



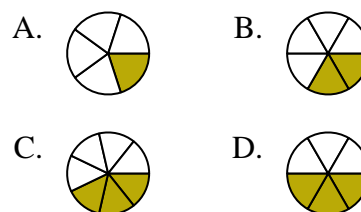
- 4) Which of the shapes below is shaded to represent $\frac{8}{10}$?



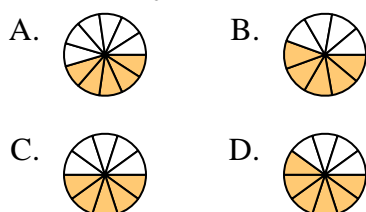
- 5) Which of the shapes below is shaded to represent $\frac{3}{10}$?



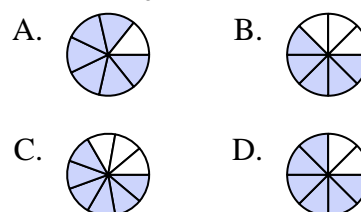
- 6) Which of the shapes below is shaded to represent $\frac{2}{6}$?



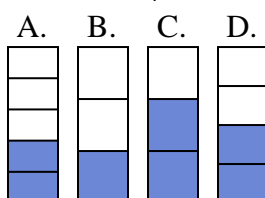
- 7) Which of the shapes below is shaded to represent $\frac{5}{10}$?



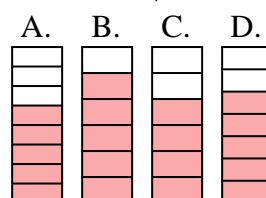
- 8) Which of the shapes below is shaded to represent $\frac{6}{8}$?



- 9) Which of the shapes below is shaded to represent $\frac{2}{4}$?



- 10) Which of the shapes below is shaded to represent $\frac{5}{7}$?



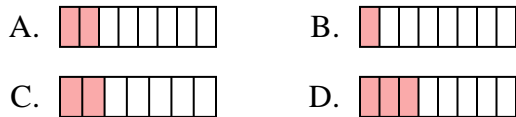
1. **B**
2. **D**
3. **C**
4. **D**
5. **C**
6. **B**
7. **C**
8. **D**
9. **D**
10. **D**



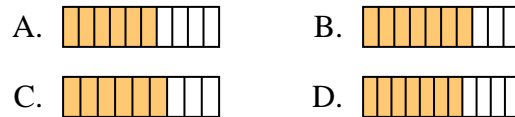
Determine which choice best answers each question.

Answers

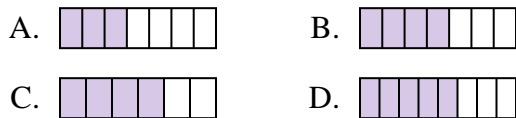
- 1) Which of the shapes below is shaded to represent $\frac{2}{8}$?



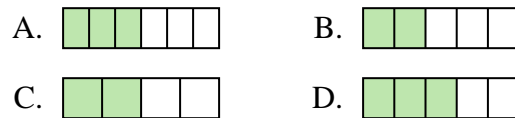
- 2) Which of the shapes below is shaded to represent $\frac{6}{10}$?



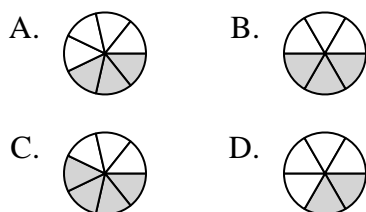
- 3) Which of the shapes below is shaded to represent $\frac{4}{7}$?



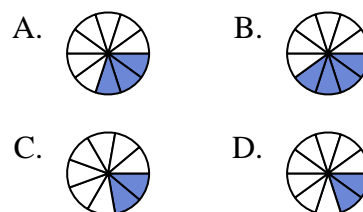
- 4) Which of the shapes below is shaded to represent $\frac{3}{5}$?



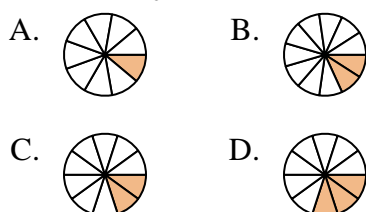
- 5) Which of the shapes below is shaded to represent $\frac{3}{7}$?



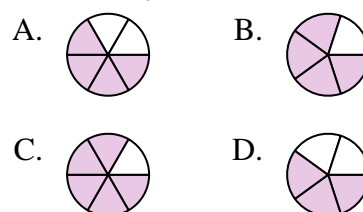
- 6) Which of the shapes below is shaded to represent $\frac{3}{10}$?



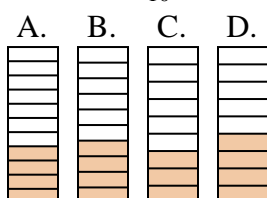
- 7) Which of the shapes below is shaded to represent $\frac{2}{10}$?



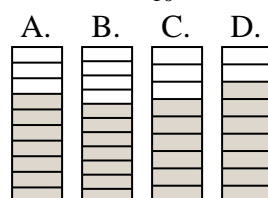
- 8) Which of the shapes below is shaded to represent $\frac{4}{6}$?



- 9) Which of the shapes below is shaded to represent $\frac{4}{10}$?



- 10) Which of the shapes below is shaded to represent $\frac{7}{10}$?



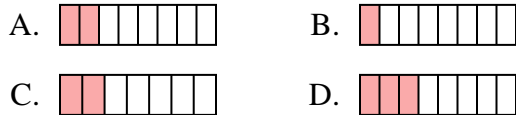
1. _____
2. _____
3. _____
4. _____
5. _____
6. _____
7. _____
8. _____
9. _____
10. _____



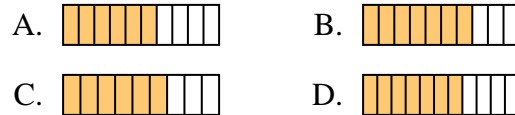
Determine which choice best answers each question.

Answers

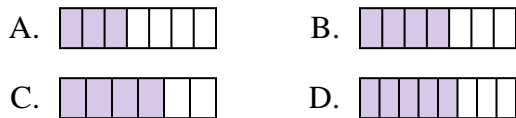
- 1) Which of the shapes below is shaded to represent $\frac{2}{8}$?



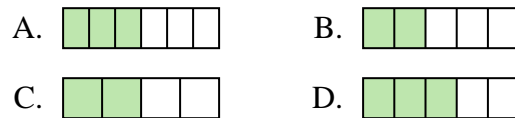
- 2) Which of the shapes below is shaded to represent $\frac{6}{10}$?



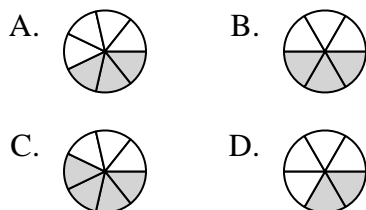
- 3) Which of the shapes below is shaded to represent $\frac{4}{7}$?



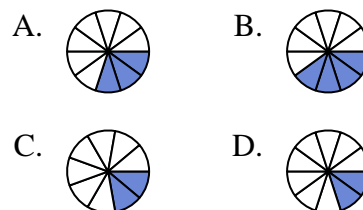
- 4) Which of the shapes below is shaded to represent $\frac{3}{5}$?



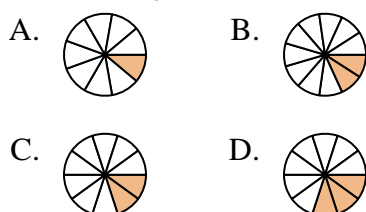
- 5) Which of the shapes below is shaded to represent $\frac{3}{7}$?



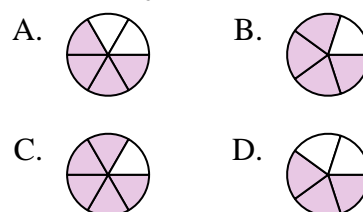
- 6) Which of the shapes below is shaded to represent $\frac{3}{10}$?



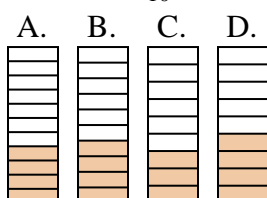
- 7) Which of the shapes below is shaded to represent $\frac{2}{10}$?



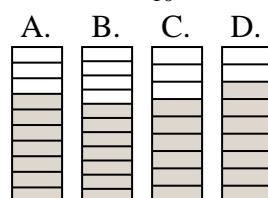
- 8) Which of the shapes below is shaded to represent $\frac{4}{6}$?



- 9) Which of the shapes below is shaded to represent $\frac{4}{10}$?



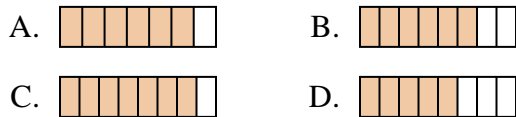
- 10) Which of the shapes below is shaded to represent $\frac{7}{10}$?



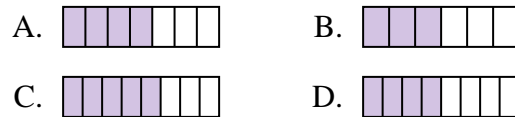
1. **A**
2. **A**
3. **B**
4. **D**
5. **A**
6. **A**
7. **C**
8. **A**
9. **B**
10. **A**

**Determine which choice best answers each question.****Answers**

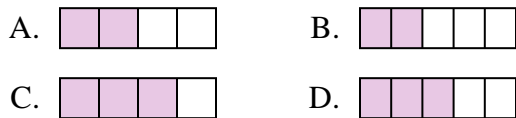
- 1) Which of the shapes below is shaded to represent $\frac{6}{8}$?



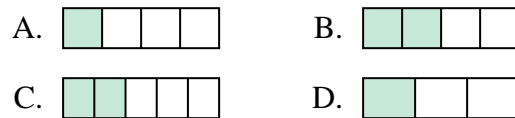
- 2) Which of the shapes below is shaded to represent $\frac{4}{7}$?



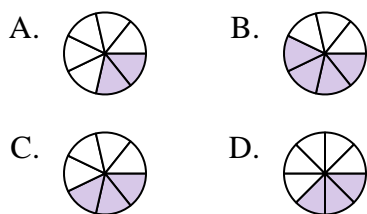
- 3) Which of the shapes below is shaded to represent $\frac{3}{5}$?



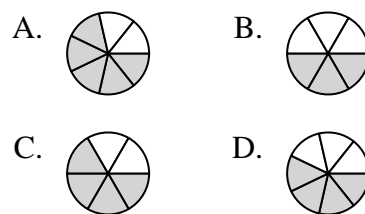
- 4) Which of the shapes below is shaded to represent $\frac{2}{4}$?



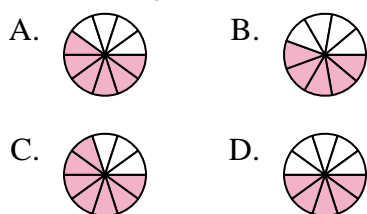
- 5) Which of the shapes below is shaded to represent $\frac{3}{7}$?



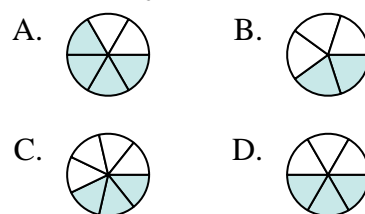
- 6) Which of the shapes below is shaded to represent $\frac{4}{6}$?



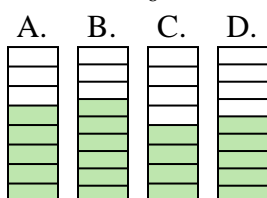
- 7) Which of the shapes below is shaded to represent $\frac{6}{10}$?



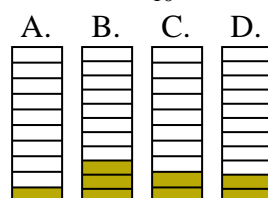
- 8) Which of the shapes below is shaded to represent $\frac{3}{6}$?



- 9) Which of the shapes below is shaded to represent $\frac{5}{8}$?



- 10) Which of the shapes below is shaded to represent $\frac{2}{10}$?



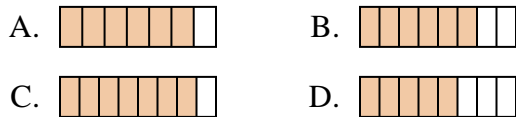
1. _____
2. _____
3. _____
4. _____
5. _____
6. _____
7. _____
8. _____
9. _____
10. _____



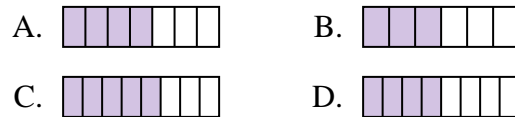
Determine which choice best answers each question.

Answers

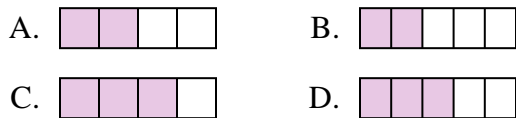
- 1) Which of the shapes below is shaded to represent $\frac{6}{8}$?



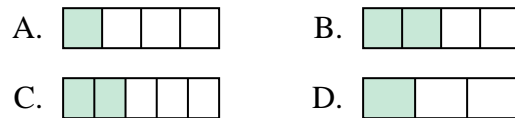
- 2) Which of the shapes below is shaded to represent $\frac{4}{7}$?



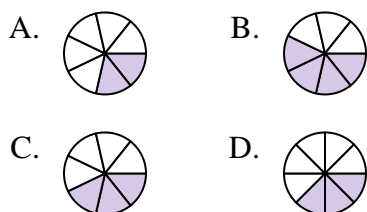
- 3) Which of the shapes below is shaded to represent $\frac{3}{5}$?



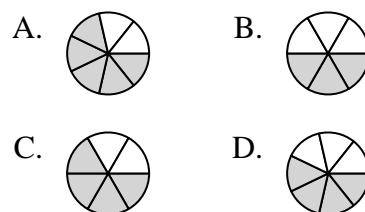
- 4) Which of the shapes below is shaded to represent $\frac{2}{4}$?



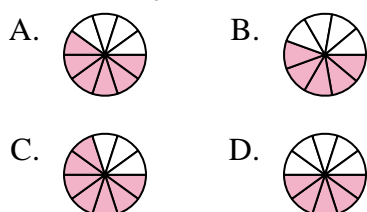
- 5) Which of the shapes below is shaded to represent $\frac{3}{7}$?



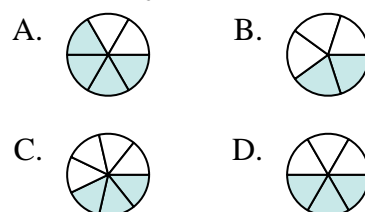
- 6) Which of the shapes below is shaded to represent $\frac{4}{6}$?



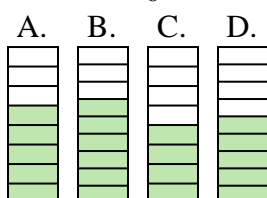
- 7) Which of the shapes below is shaded to represent $\frac{6}{10}$?



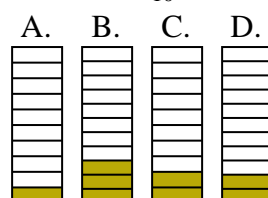
- 8) Which of the shapes below is shaded to represent $\frac{3}{6}$?



- 9) Which of the shapes below is shaded to represent $\frac{5}{8}$?



- 10) Which of the shapes below is shaded to represent $\frac{2}{10}$?



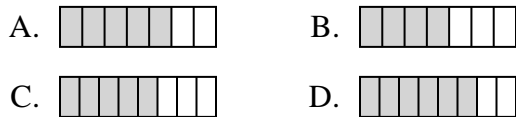
1. **B**
2. **A**
3. **D**
4. **B**
5. **C**
6. **C**
7. **A**
8. **D**
9. **A**
10. **C**



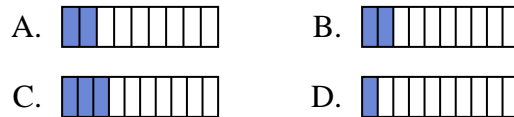
Determine which choice best answers each question.

Answers

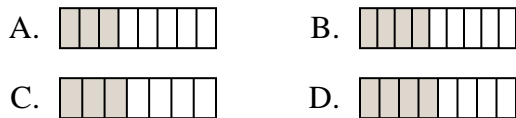
- 1) Which of the shapes below is shaded to represent $\frac{5}{8}$?



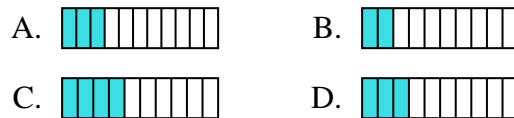
- 2) Which of the shapes below is shaded to represent $\frac{2}{10}$?



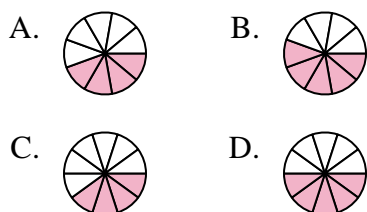
- 3) Which of the shapes below is shaded to represent $\frac{4}{8}$?



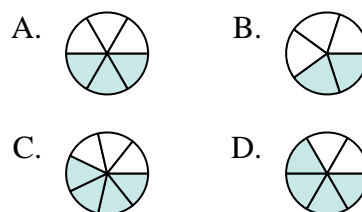
- 4) Which of the shapes below is shaded to represent $\frac{3}{10}$?



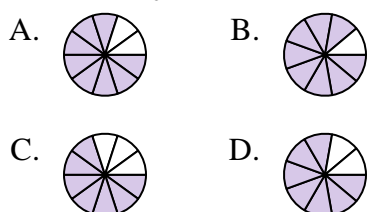
- 5) Which of the shapes below is shaded to represent $\frac{5}{10}$?



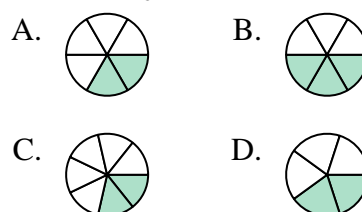
- 6) Which of the shapes below is shaded to represent $\frac{3}{6}$?



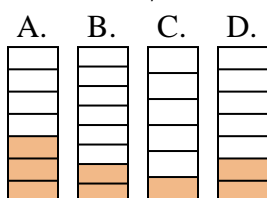
- 7) Which of the shapes below is shaded to represent $\frac{8}{10}$?



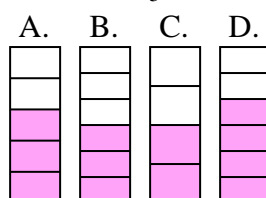
- 8) Which of the shapes below is shaded to represent $\frac{2}{6}$?



- 9) Which of the shapes below is shaded to represent $\frac{2}{7}$?



- 10) Which of the shapes below is shaded to represent $\frac{3}{5}$?



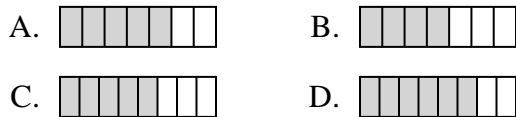
1. _____
2. _____
3. _____
4. _____
5. _____
6. _____
7. _____
8. _____
9. _____
10. _____



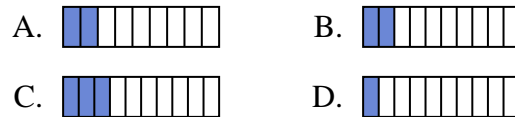
Determine which choice best answers each question.

Answers

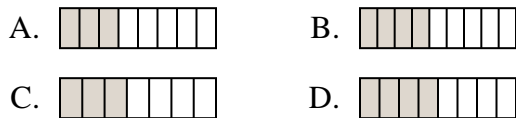
- 1) Which of the shapes below is shaded to represent $\frac{5}{8}$?



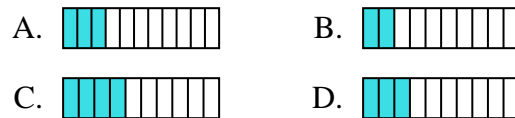
- 2) Which of the shapes below is shaded to represent $\frac{2}{10}$?



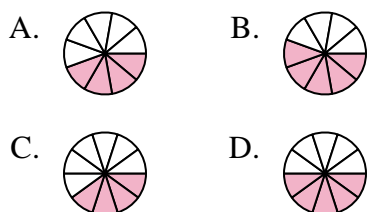
- 3) Which of the shapes below is shaded to represent $\frac{4}{8}$?



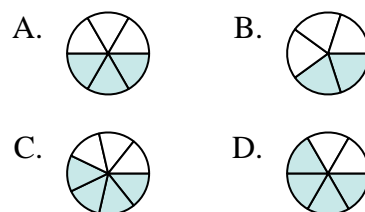
- 4) Which of the shapes below is shaded to represent $\frac{3}{10}$?



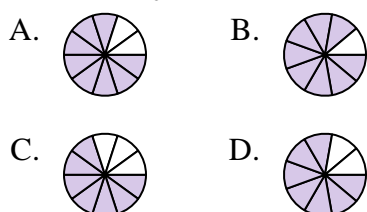
- 5) Which of the shapes below is shaded to represent $\frac{5}{10}$?



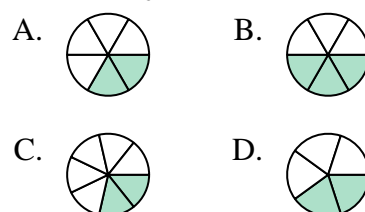
- 6) Which of the shapes below is shaded to represent $\frac{3}{6}$?



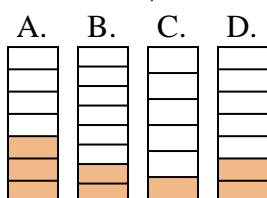
- 7) Which of the shapes below is shaded to represent $\frac{8}{10}$?



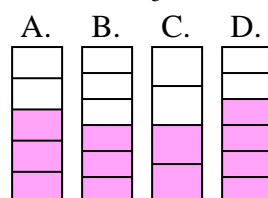
- 8) Which of the shapes below is shaded to represent $\frac{2}{6}$?



- 9) Which of the shapes below is shaded to represent $\frac{2}{7}$?



- 10) Which of the shapes below is shaded to represent $\frac{3}{5}$?



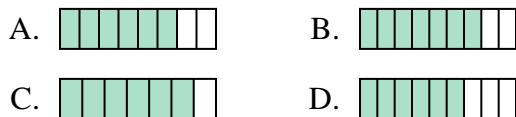
1. **C**
2. **B**
3. **D**
4. **D**
5. **D**
6. **A**
7. **A**
8. **A**
9. **D**
10. **A**



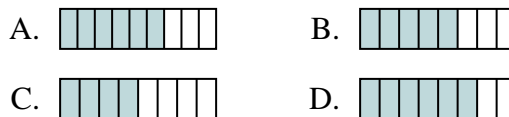
Determine which choice best answers each question.

Answers

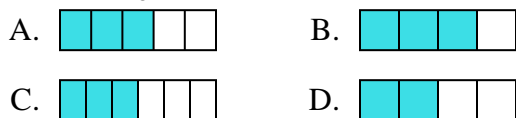
- 1) Which of the shapes below is shaded to represent $\frac{6}{8}$?



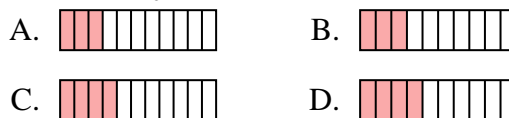
- 2) Which of the shapes below is shaded to represent $\frac{5}{8}$?



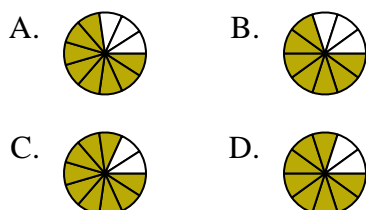
- 3) Which of the shapes below is shaded to represent $\frac{3}{5}$?



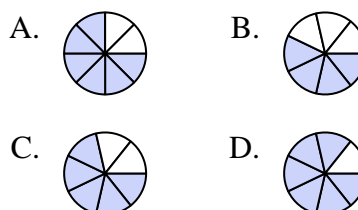
- 4) Which of the shapes below is shaded to represent $\frac{3}{10}$?



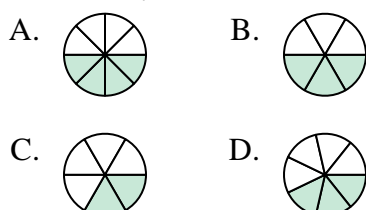
- 5) Which of the shapes below is shaded to represent $\frac{8}{10}$?



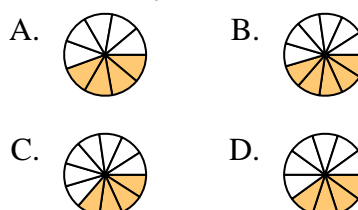
- 6) Which of the shapes below is shaded to represent $\frac{5}{7}$?



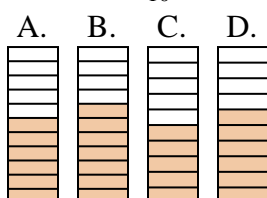
- 7) Which of the shapes below is shaded to represent $\frac{3}{7}$?



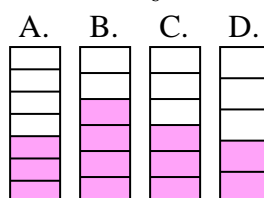
- 8) Which of the shapes below is shaded to represent $\frac{4}{10}$?



- 9) Which of the shapes below is shaded to represent $\frac{6}{10}$?



- 10) Which of the shapes below is shaded to represent $\frac{3}{6}$?



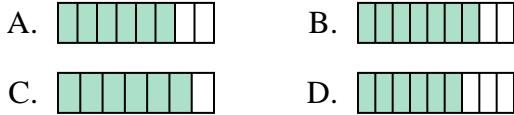
1. _____
2. _____
3. _____
4. _____
5. _____
6. _____
7. _____
8. _____
9. _____
10. _____



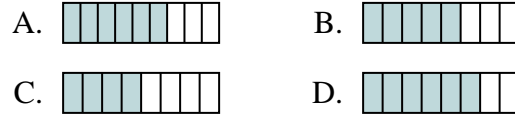
Determine which choice best answers each question.

Answers

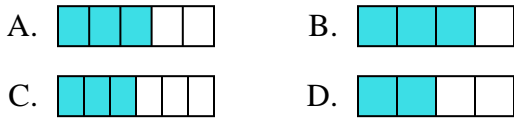
- 1) Which of the shapes below is shaded to represent $\frac{6}{8}$?



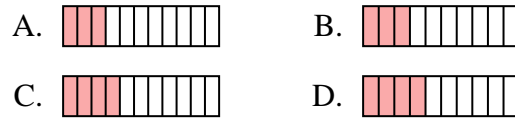
- 2) Which of the shapes below is shaded to represent $\frac{5}{8}$?



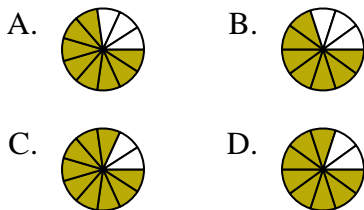
- 3) Which of the shapes below is shaded to represent $\frac{3}{5}$?



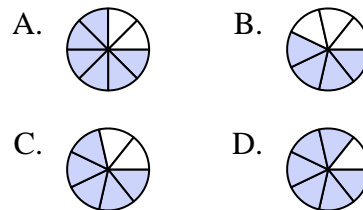
- 4) Which of the shapes below is shaded to represent $\frac{3}{10}$?



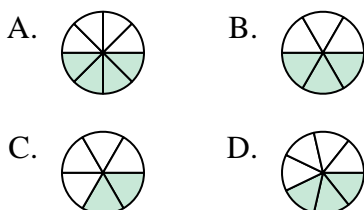
- 5) Which of the shapes below is shaded to represent $\frac{8}{10}$?



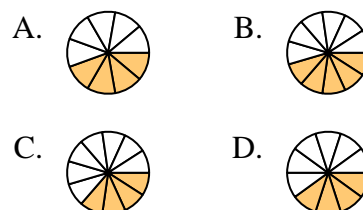
- 6) Which of the shapes below is shaded to represent $\frac{5}{7}$?



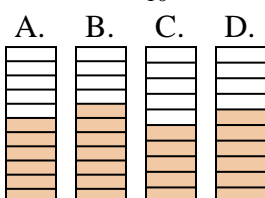
- 7) Which of the shapes below is shaded to represent $\frac{3}{7}$?



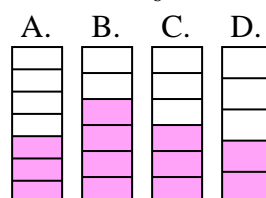
- 8) Which of the shapes below is shaded to represent $\frac{4}{10}$?



- 9) Which of the shapes below is shaded to represent $\frac{6}{10}$?



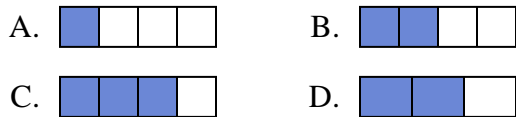
- 10) Which of the shapes below is shaded to represent $\frac{3}{6}$?



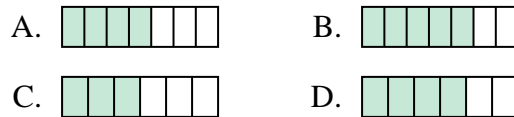
1. **A**
2. **B**
3. **A**
4. **B**
5. **D**
6. **C**
7. **D**
8. **D**
9. **D**
10. **C**

**Determine which choice best answers each question.****Answers**

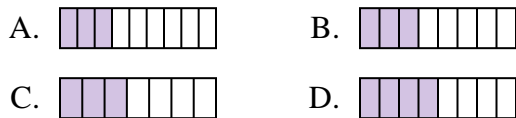
- 1) Which of the shapes below is shaded to represent $\frac{2}{4}$?



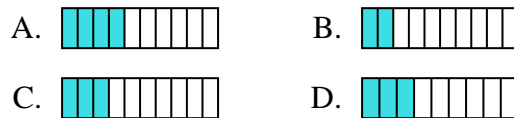
- 2) Which of the shapes below is shaded to represent $\frac{4}{6}$?



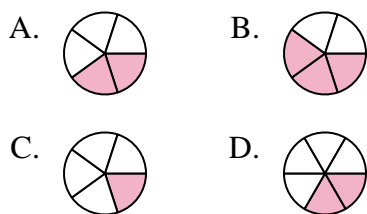
- 3) Which of the shapes below is shaded to represent $\frac{3}{8}$?



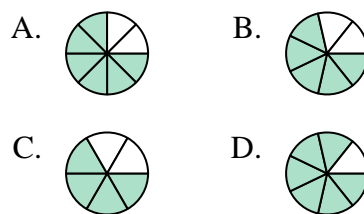
- 4) Which of the shapes below is shaded to represent $\frac{3}{10}$?



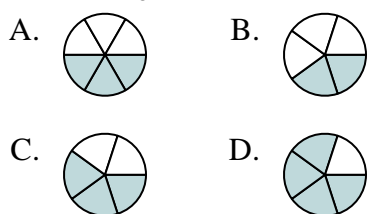
- 5) Which of the shapes below is shaded to represent $\frac{2}{5}$?



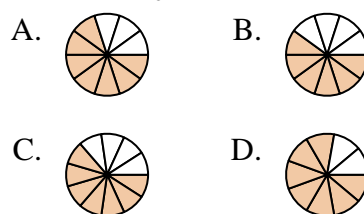
- 6) Which of the shapes below is shaded to represent $\frac{5}{7}$?



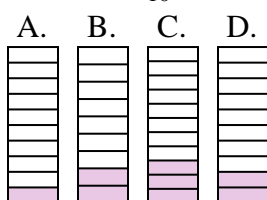
- 7) Which of the shapes below is shaded to represent $\frac{3}{5}$?



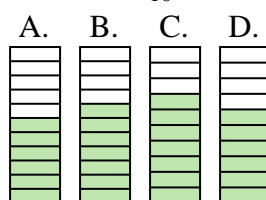
- 8) Which of the shapes below is shaded to represent $\frac{7}{10}$?



- 9) Which of the shapes below is shaded to represent $\frac{2}{10}$?



- 10) Which of the shapes below is shaded to represent $\frac{6}{10}$?



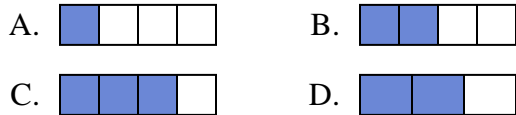
1. _____
2. _____
3. _____
4. _____
5. _____
6. _____
7. _____
8. _____
9. _____
10. _____



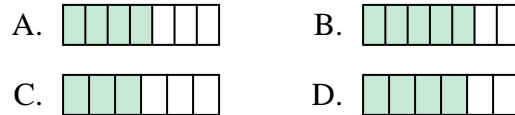
Determine which choice best answers each question.

Answers

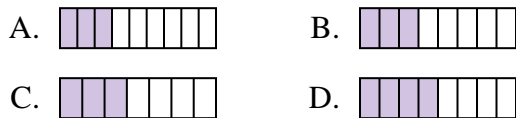
- 1) Which of the shapes below is shaded to represent $\frac{2}{4}$?



- 2) Which of the shapes below is shaded to represent $\frac{4}{6}$?



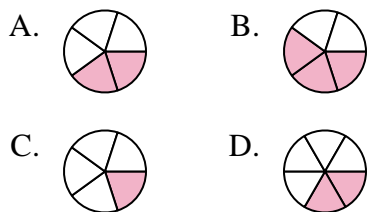
- 3) Which of the shapes below is shaded to represent $\frac{3}{8}$?



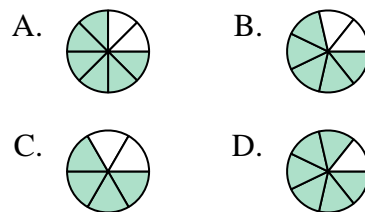
- 4) Which of the shapes below is shaded to represent $\frac{3}{10}$?



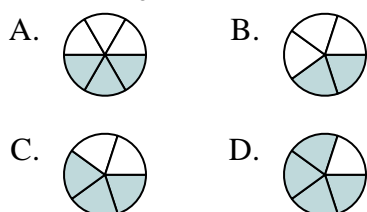
- 5) Which of the shapes below is shaded to represent $\frac{2}{5}$?



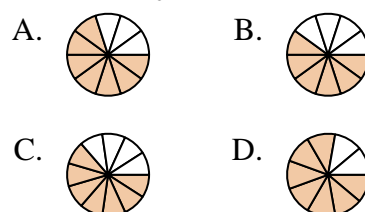
- 6) Which of the shapes below is shaded to represent $\frac{5}{7}$?



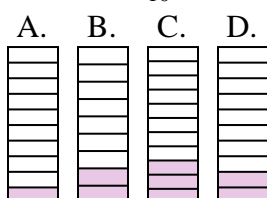
- 7) Which of the shapes below is shaded to represent $\frac{3}{5}$?



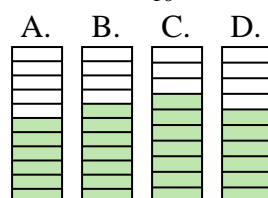
- 8) Which of the shapes below is shaded to represent $\frac{7}{10}$?



- 9) Which of the shapes below is shaded to represent $\frac{2}{10}$?



- 10) Which of the shapes below is shaded to represent $\frac{6}{10}$?



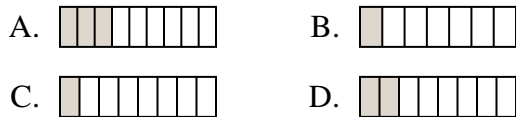
1. **B**
2. **D**
3. **B**
4. **C**
5. **A**
6. **B**
7. **C**
8. **A**
9. **D**
10. **D**



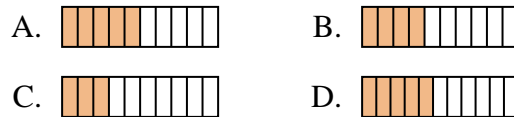
Determine which choice best answers each question.

Answers

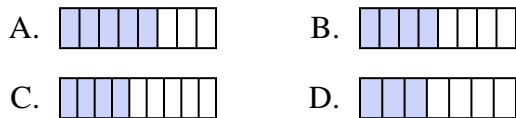
- 1) Which of the shapes below is shaded to represent $\frac{2}{8}$?



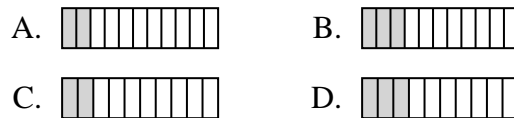
- 2) Which of the shapes below is shaded to represent $\frac{4}{10}$?



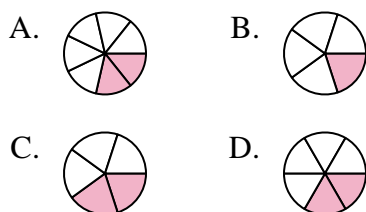
- 3) Which of the shapes below is shaded to represent $\frac{4}{8}$?



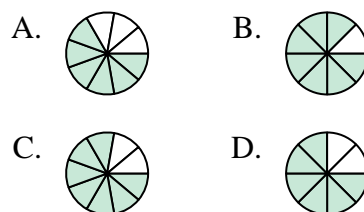
- 4) Which of the shapes below is shaded to represent $\frac{2}{10}$?



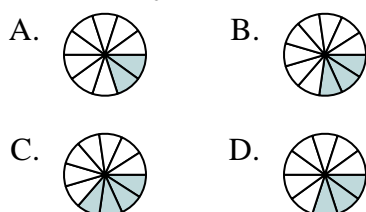
- 5) Which of the shapes below is shaded to represent $\frac{2}{6}$?



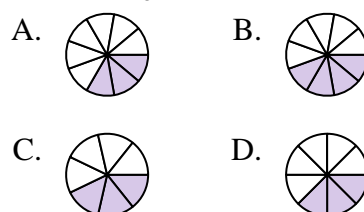
- 6) Which of the shapes below is shaded to represent $\frac{6}{8}$?



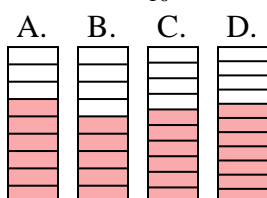
- 7) Which of the shapes below is shaded to represent $\frac{3}{10}$?



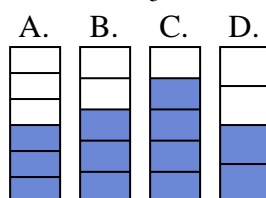
- 8) Which of the shapes below is shaded to represent $\frac{3}{8}$?



- 9) Which of the shapes below is shaded to represent $\frac{6}{10}$?



- 10) Which of the shapes below is shaded to represent $\frac{3}{5}$?



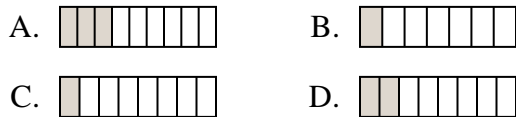
1. _____
2. _____
3. _____
4. _____
5. _____
6. _____
7. _____
8. _____
9. _____
10. _____



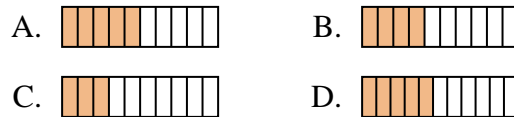
Determine which choice best answers each question.

Answers

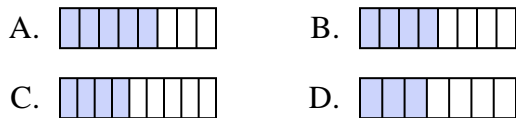
- 1) Which of the shapes below is shaded to represent $\frac{2}{8}$?



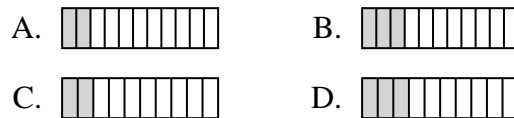
- 2) Which of the shapes below is shaded to represent $\frac{4}{10}$?



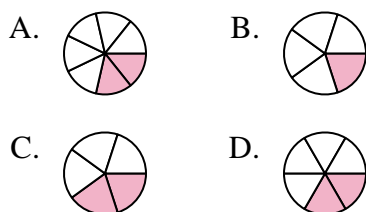
- 3) Which of the shapes below is shaded to represent $\frac{4}{8}$?



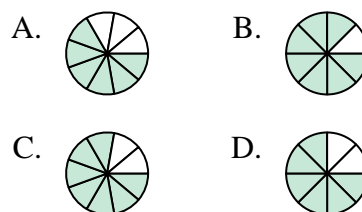
- 4) Which of the shapes below is shaded to represent $\frac{2}{10}$?



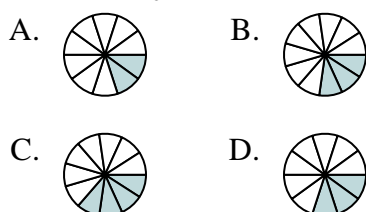
- 5) Which of the shapes below is shaded to represent $\frac{2}{6}$?



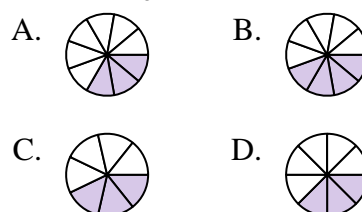
- 6) Which of the shapes below is shaded to represent $\frac{6}{8}$?



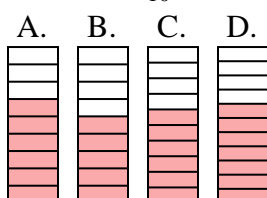
- 7) Which of the shapes below is shaded to represent $\frac{3}{10}$?



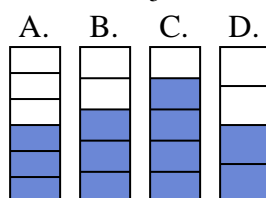
- 8) Which of the shapes below is shaded to represent $\frac{3}{8}$?



- 9) Which of the shapes below is shaded to represent $\frac{6}{10}$?



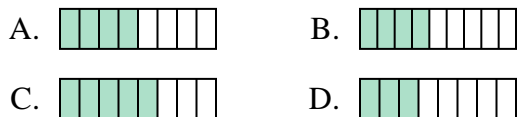
- 10) Which of the shapes below is shaded to represent $\frac{3}{5}$?



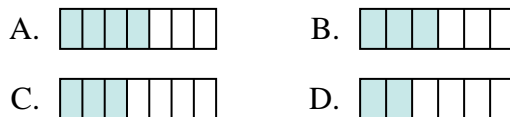
1. **D**
2. **B**
3. **B**
4. **C**
5. **D**
6. **D**
7. **D**
8. **D**
9. **C**
10. **B**

**Determine which choice best answers each question.****Answers**

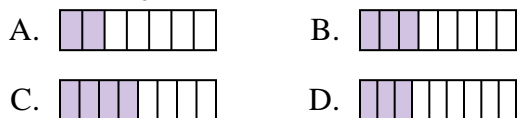
- 1) Which of the shapes below is shaded to represent $\frac{4}{8}$?



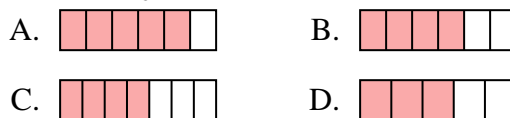
- 2) Which of the shapes below is shaded to represent $\frac{3}{6}$?



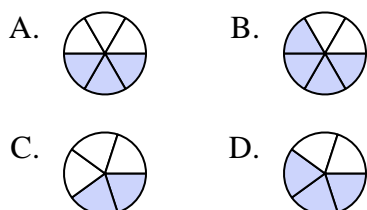
- 3) Which of the shapes below is shaded to represent $\frac{3}{8}$?



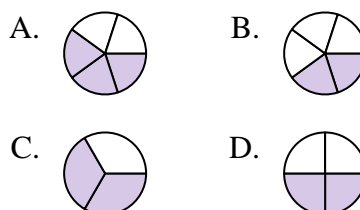
- 4) Which of the shapes below is shaded to represent $\frac{4}{6}$?



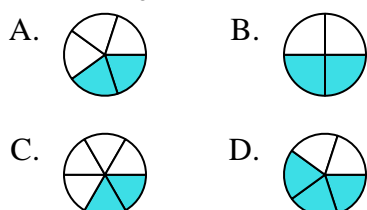
- 5) Which of the shapes below is shaded to represent $\frac{3}{5}$?



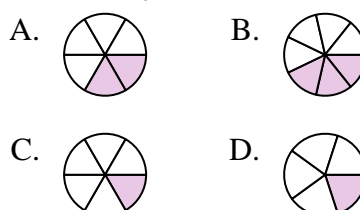
- 6) Which of the shapes below is shaded to represent $\frac{2}{4}$?



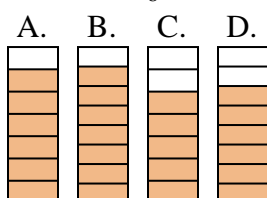
- 7) Which of the shapes below is shaded to represent $\frac{2}{5}$?



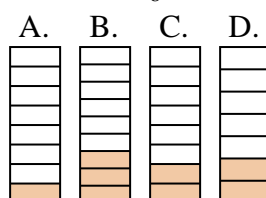
- 8) Which of the shapes below is shaded to represent $\frac{2}{6}$?



- 9) Which of the shapes below is shaded to represent $\frac{6}{8}$?



- 10) Which of the shapes below is shaded to represent $\frac{2}{8}$?



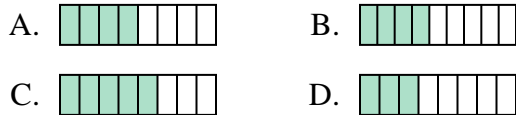
1. _____
2. _____
3. _____
4. _____
5. _____
6. _____
7. _____
8. _____
9. _____
10. _____



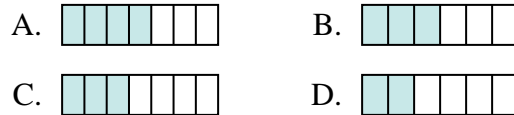
Determine which choice best answers each question.

Answers

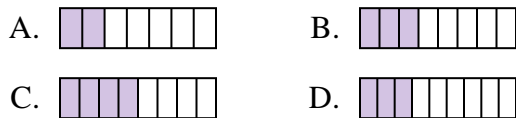
- 1) Which of the shapes below is shaded to represent $\frac{4}{8}$?



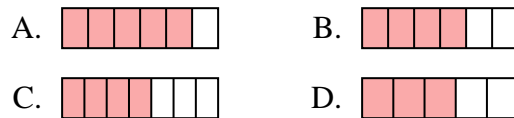
- 2) Which of the shapes below is shaded to represent $\frac{3}{6}$?



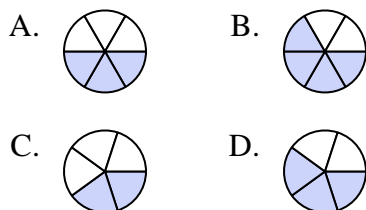
- 3) Which of the shapes below is shaded to represent $\frac{3}{8}$?



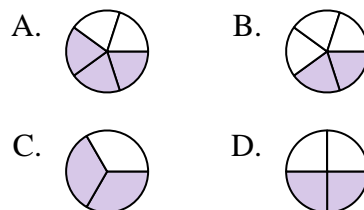
- 4) Which of the shapes below is shaded to represent $\frac{4}{6}$?



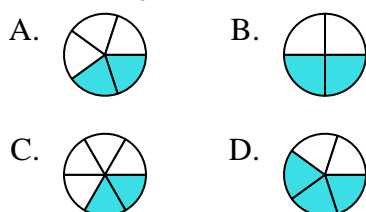
- 5) Which of the shapes below is shaded to represent $\frac{3}{5}$?



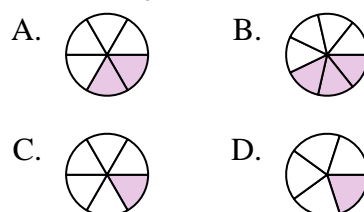
- 6) Which of the shapes below is shaded to represent $\frac{2}{4}$?



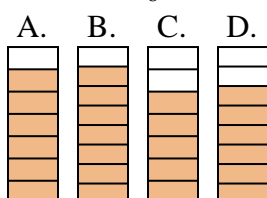
- 7) Which of the shapes below is shaded to represent $\frac{2}{5}$?



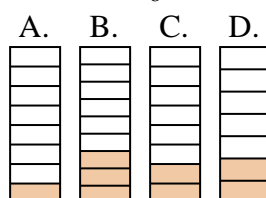
- 8) Which of the shapes below is shaded to represent $\frac{2}{6}$?



- 9) Which of the shapes below is shaded to represent $\frac{6}{8}$?



- 10) Which of the shapes below is shaded to represent $\frac{2}{8}$?



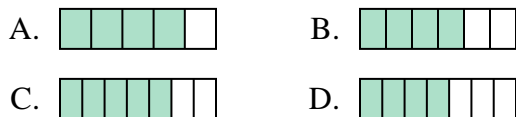
1. **A**
2. **B**
3. **B**
4. **B**
5. **D**
6. **D**
7. **A**
8. **A**
9. **D**
10. **C**



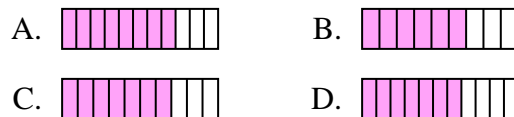
Determine which choice best answers each question.

Answers

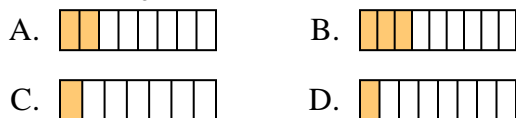
- 1) Which of the shapes below is shaded to represent $\frac{4}{6}$?



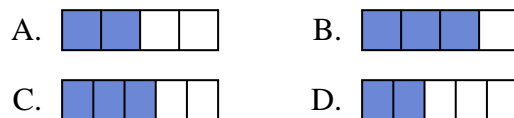
- 2) Which of the shapes below is shaded to represent $\frac{7}{10}$?



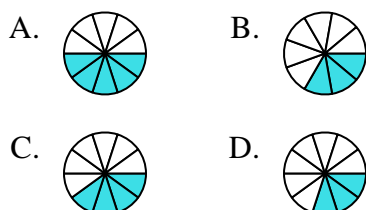
- 3) Which of the shapes below is shaded to represent $\frac{2}{8}$?



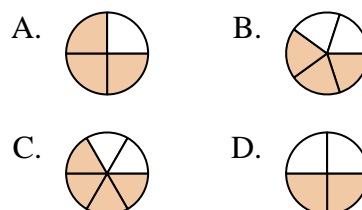
- 4) Which of the shapes below is shaded to represent $\frac{2}{4}$?



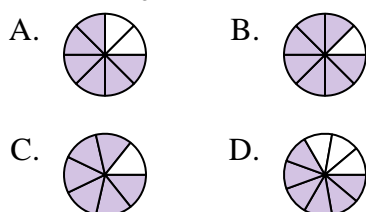
- 5) Which of the shapes below is shaded to represent $\frac{4}{10}$?



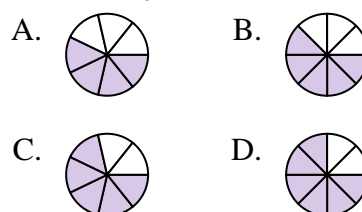
- 6) Which of the shapes below is shaded to represent $\frac{3}{5}$?



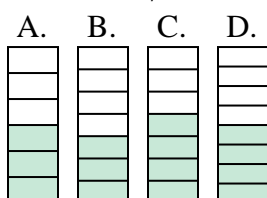
- 7) Which of the shapes below is shaded to represent $\frac{6}{8}$?



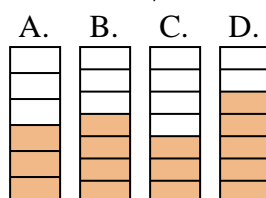
- 8) Which of the shapes below is shaded to represent $\frac{5}{8}$?



- 9) Which of the shapes below is shaded to represent $\frac{3}{7}$?



- 10) Which of the shapes below is shaded to represent $\frac{4}{7}$?



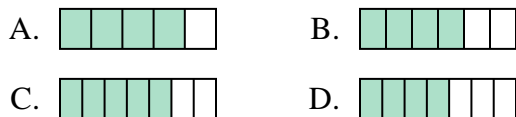
1. _____
2. _____
3. _____
4. _____
5. _____
6. _____
7. _____
8. _____
9. _____
10. _____



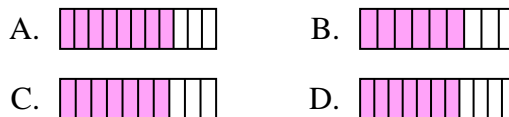
Determine which choice best answers each question.

Answers

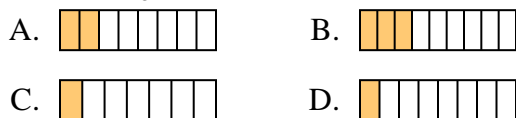
- 1) Which of the shapes below is shaded to represent $\frac{4}{6}$?



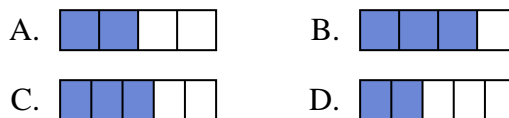
- 2) Which of the shapes below is shaded to represent $\frac{7}{10}$?



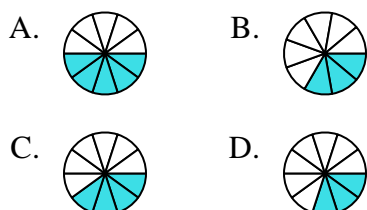
- 3) Which of the shapes below is shaded to represent $\frac{2}{8}$?



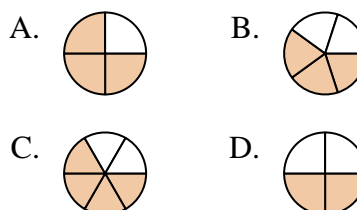
- 4) Which of the shapes below is shaded to represent $\frac{2}{4}$?



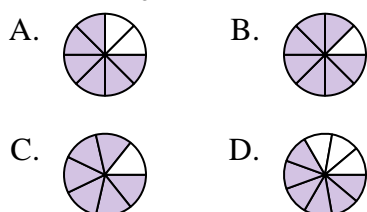
- 5) Which of the shapes below is shaded to represent $\frac{4}{10}$?



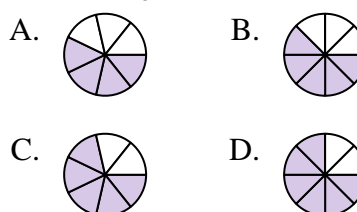
- 6) Which of the shapes below is shaded to represent $\frac{3}{5}$?



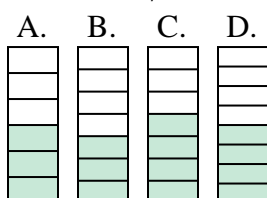
- 7) Which of the shapes below is shaded to represent $\frac{6}{8}$?



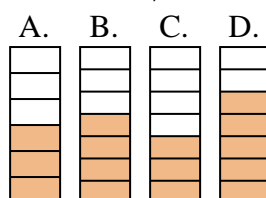
- 8) Which of the shapes below is shaded to represent $\frac{5}{8}$?



- 9) Which of the shapes below is shaded to represent $\frac{3}{7}$?



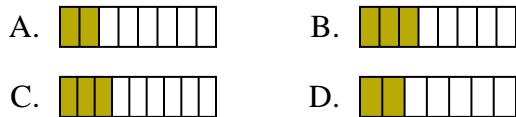
- 10) Which of the shapes below is shaded to represent $\frac{4}{7}$?



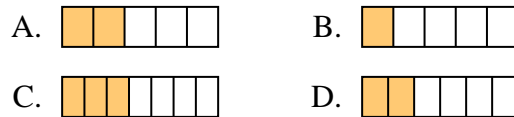
1. **B**
2. **C**
3. **A**
4. **A**
5. **C**
6. **B**
7. **A**
8. **B**
9. **B**
10. **B**

**Determine which choice best answers each question.****Answers**

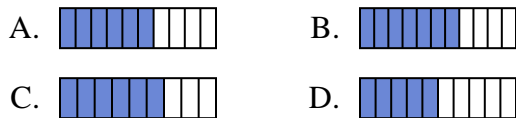
- 1) Which of the shapes below is shaded to represent $\frac{3}{8}$?



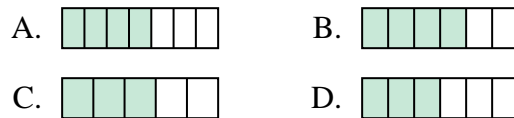
- 2) Which of the shapes below is shaded to represent $\frac{2}{6}$?



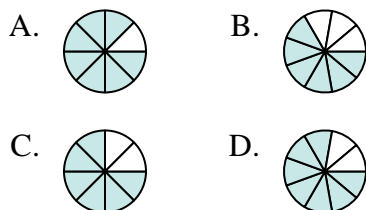
- 3) Which of the shapes below is shaded to represent $\frac{6}{10}$?



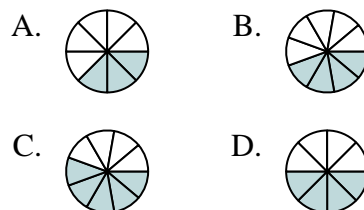
- 4) Which of the shapes below is shaded to represent $\frac{4}{6}$?



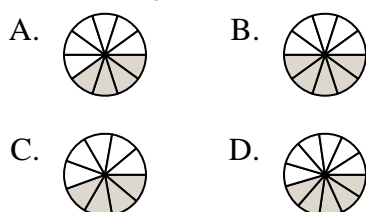
- 5) Which of the shapes below is shaded to represent $\frac{6}{8}$?



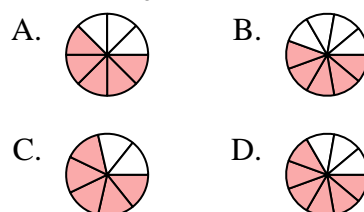
- 6) Which of the shapes below is shaded to represent $\frac{4}{8}$?



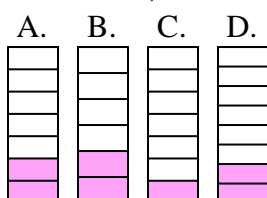
- 7) Which of the shapes below is shaded to represent $\frac{4}{10}$?



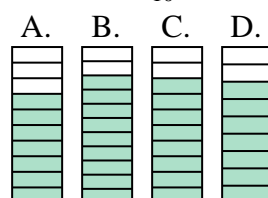
- 8) Which of the shapes below is shaded to represent $\frac{5}{8}$?



- 9) Which of the shapes below is shaded to represent $\frac{2}{7}$?



- 10) Which of the shapes below is shaded to represent $\frac{8}{10}$?



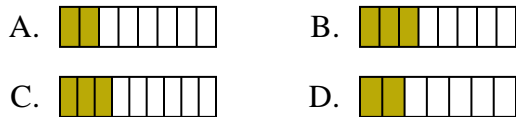
1. _____
2. _____
3. _____
4. _____
5. _____
6. _____
7. _____
8. _____
9. _____
10. _____



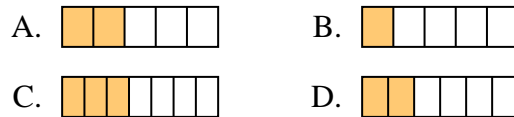
Determine which choice best answers each question.

Answers

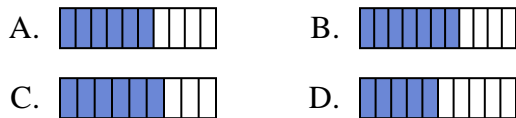
- 1) Which of the shapes below is shaded to represent $\frac{3}{8}$?



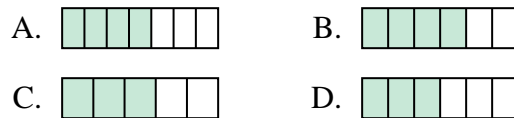
- 2) Which of the shapes below is shaded to represent $\frac{2}{6}$?



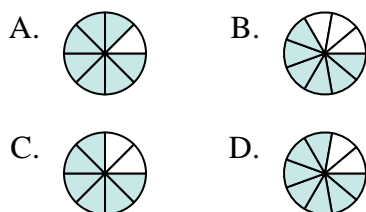
- 3) Which of the shapes below is shaded to represent $\frac{6}{10}$?



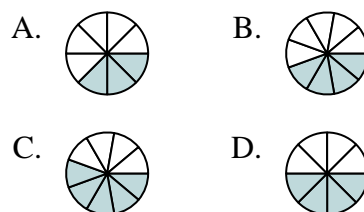
- 4) Which of the shapes below is shaded to represent $\frac{4}{6}$?



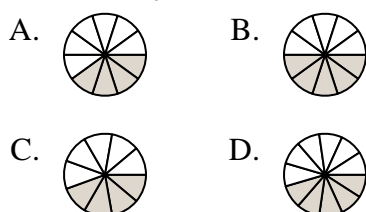
- 5) Which of the shapes below is shaded to represent $\frac{6}{8}$?



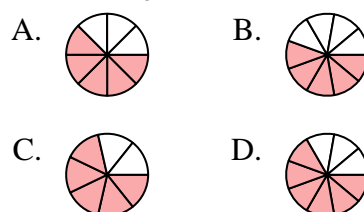
- 6) Which of the shapes below is shaded to represent $\frac{4}{8}$?



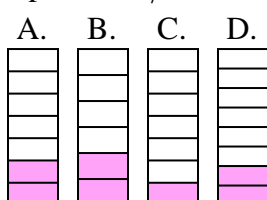
- 7) Which of the shapes below is shaded to represent $\frac{4}{10}$?



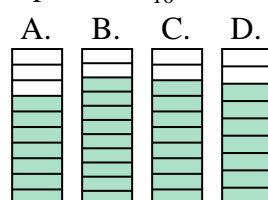
- 8) Which of the shapes below is shaded to represent $\frac{5}{8}$?



- 9) Which of the shapes below is shaded to represent $\frac{2}{7}$?



- 10) Which of the shapes below is shaded to represent $\frac{8}{10}$?



1. **B**
2. **D**
3. **A**
4. **B**
5. **C**
6. **D**
7. **A**
8. **A**
9. **A**
10. **C**