



Use the visual model to solve each problem.

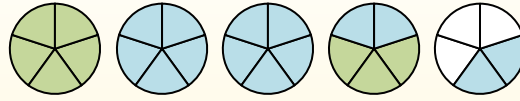
$$1 \frac{3}{5} + 2 \frac{4}{5} = ?$$



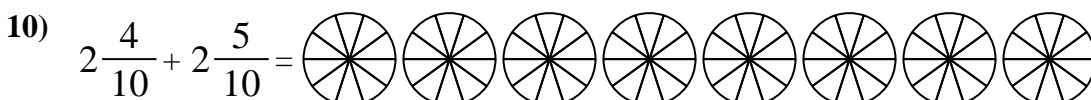
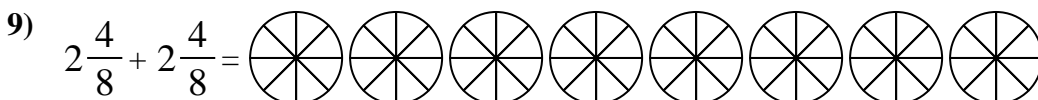
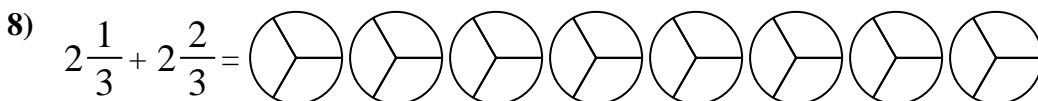
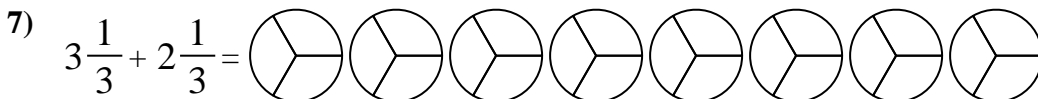
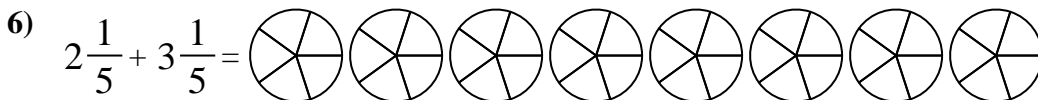
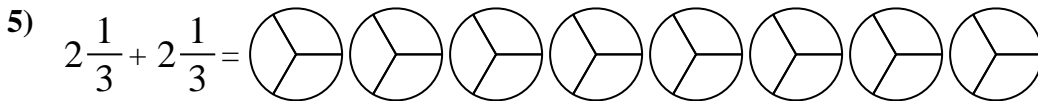
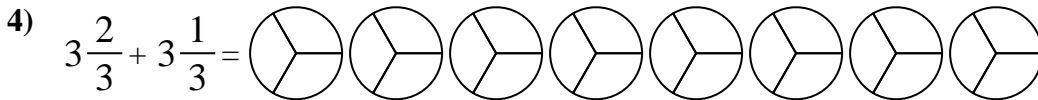
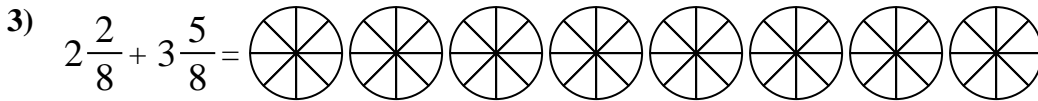
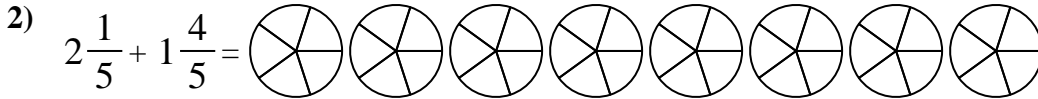
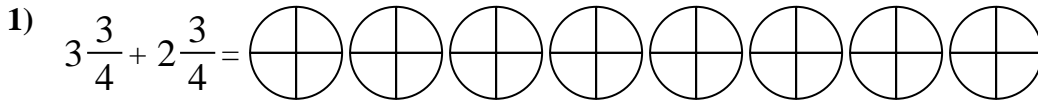
To solve a fraction addition problem one strategy is to shade in the whole amounts first (1 & 2).



Next fill in the fraction amounts ($\frac{3}{5}$ & $\frac{4}{5}$).



When all of the pieces are filled in we can see that $1 \frac{3}{5} + 2 \frac{4}{5} = 4 \frac{2}{5}$



Answers

1. _____
2. _____
3. _____
4. _____
5. _____
6. _____
7. _____
8. _____
9. _____
10. _____



Use the visual model to solve each problem.

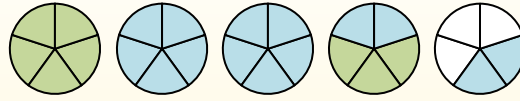
$$1\frac{3}{5} + 2\frac{4}{5} = ?$$



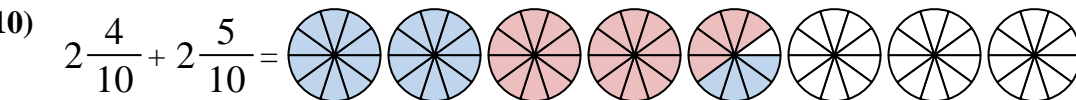
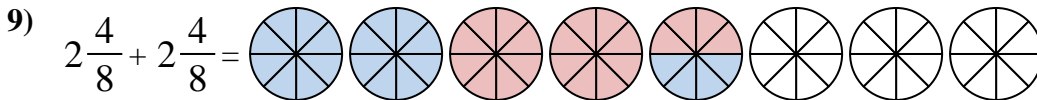
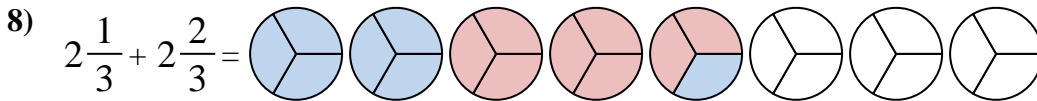
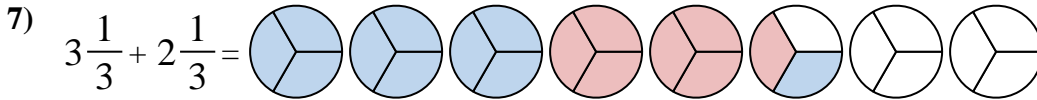
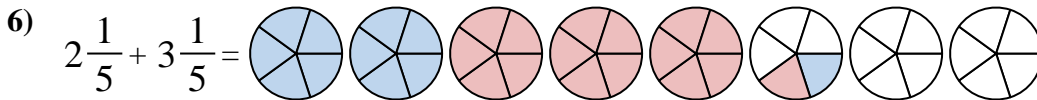
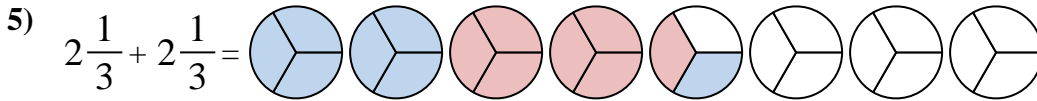
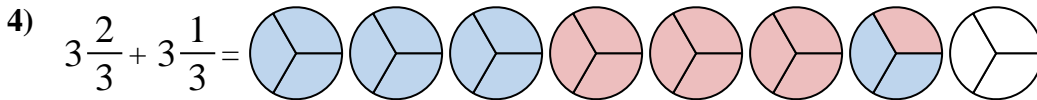
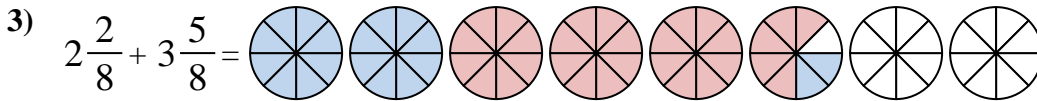
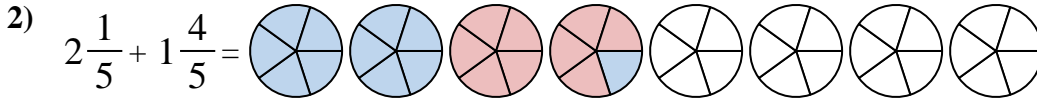
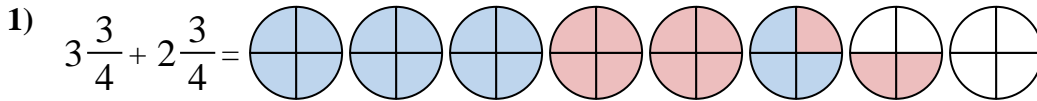
To solve a fraction addition problem one strategy is to shade in the whole amounts first (1 & 2).



Next fill in the fraction amounts ($\frac{3}{5}$ & $\frac{4}{5}$).



When all of the pieces are filled in we can see that $1\frac{3}{5} + 2\frac{4}{5} = 4\frac{2}{5}$



Answers

1. $6\frac{2}{4}$

2. $4\frac{0}{5}$

3. $5\frac{7}{8}$

4. $7\frac{0}{3}$

5. $4\frac{2}{3}$

6. $5\frac{2}{5}$

7. $5\frac{2}{3}$

8. $5\frac{0}{3}$

9. $5\frac{0}{8}$

10. $4\frac{9}{10}$