



Determine which letter best represents the sum.

1) $\frac{7}{10} + \frac{3}{10}$

3) $\frac{2}{4} + \frac{1}{4}$

5) $\frac{8}{12} + \frac{6}{12}$

7) $\frac{5}{12} + \frac{3}{12}$

9) $\frac{1}{3} + \frac{1}{3}$

11) $\frac{3}{6} + \frac{2}{6}$

13) $\frac{2}{5} + \frac{4}{5}$

2) $\frac{2}{3} + \frac{1}{3}$

4) $\frac{3}{6} + \frac{4}{6}$

6) $\frac{7}{8} + \frac{4}{8}$

8) $\frac{1}{12} + \frac{2}{12}$

10) $\frac{1}{2} + \frac{1}{2}$

12) $\frac{1}{8} + \frac{2}{8}$

14) $\frac{5}{6} + \frac{4}{6}$

Answers

1. _____

2. _____

3. _____

4. _____

5. _____

6. _____

7. _____

8. _____

9. _____

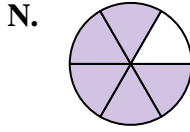
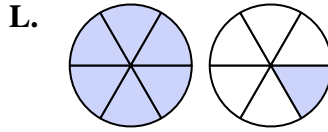
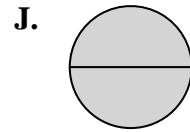
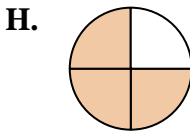
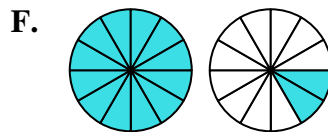
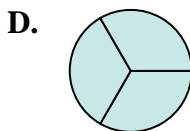
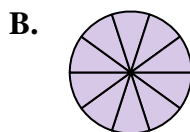
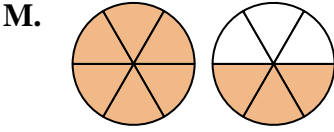
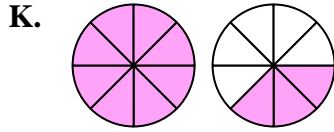
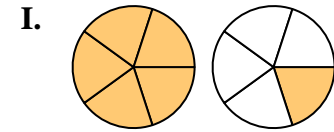
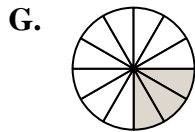
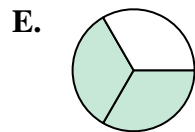
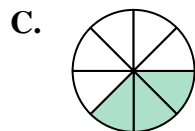
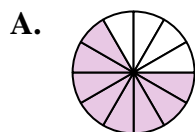
10. _____

11. _____

12. _____

13. _____

14. _____





Determine which letter best represents the sum.

1) $\frac{7}{10} + \frac{3}{10}$

2) $\frac{2}{3} + \frac{1}{3}$

3) $\frac{2}{4} + \frac{1}{4}$

4) $\frac{3}{6} + \frac{4}{6}$

5) $\frac{8}{12} + \frac{6}{12}$

6) $\frac{7}{8} + \frac{4}{8}$

7) $\frac{5}{12} + \frac{3}{12}$

8) $\frac{1}{12} + \frac{2}{12}$

9) $\frac{1}{3} + \frac{1}{3}$

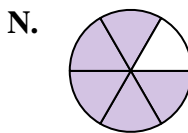
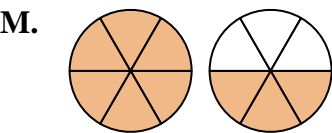
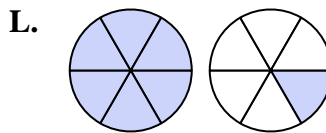
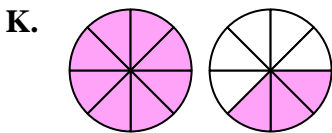
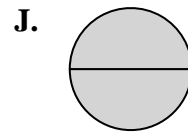
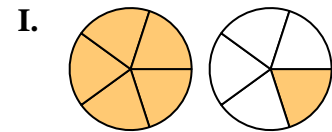
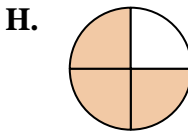
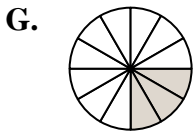
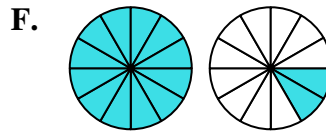
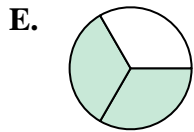
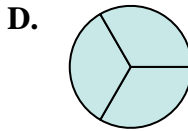
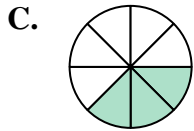
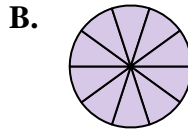
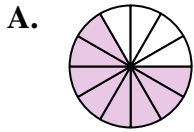
10) $\frac{1}{2} + \frac{1}{2}$

11) $\frac{3}{6} + \frac{2}{6}$

12) $\frac{1}{8} + \frac{2}{8}$

13) $\frac{2}{5} + \frac{4}{5}$

14) $\frac{5}{6} + \frac{4}{6}$



Answers

1. **B** $\frac{10}{10}$

2. **D** $\frac{3}{3}$

3. **H** $\frac{3}{4}$

4. **L** $1\frac{1}{6}$

5. **F** $1\frac{2}{12}$

6. **K** $1\frac{3}{8}$

7. **A** $\frac{8}{12}$

8. **G** $\frac{3}{12}$

9. **E** $\frac{2}{3}$

10. **J** $\frac{2}{2}$

11. **N** $\frac{5}{6}$

12. **C** $\frac{3}{8}$

13. **I** $1\frac{1}{5}$

14. **M** $1\frac{3}{6}$