



Determine which letter best represents the sum.

1)  $\frac{2}{4} + \frac{3}{4}$

2)  $\frac{1}{12} + \frac{3}{12}$

3)  $\frac{6}{10} + \frac{3}{10}$

4)  $\frac{4}{10} + \frac{4}{10}$

5)  $\frac{3}{12} + \frac{5}{12}$

6)  $\frac{1}{2} + \frac{1}{2}$

7)  $\frac{1}{6} + \frac{5}{6}$

8)  $\frac{1}{3} + \frac{2}{3}$

9)  $\frac{2}{5} + \frac{2}{5}$

10)  $\frac{3}{4} + \frac{3}{4}$

11)  $\frac{2}{4} + \frac{2}{4}$

12)  $\frac{2}{4} + \frac{1}{4}$

13)  $\frac{4}{5} + \frac{2}{5}$

14)  $\frac{1}{6} + \frac{2}{6}$

Answers

1. \_\_\_\_\_

2. \_\_\_\_\_

3. \_\_\_\_\_

4. \_\_\_\_\_

5. \_\_\_\_\_

6. \_\_\_\_\_

7. \_\_\_\_\_

8. \_\_\_\_\_

9. \_\_\_\_\_

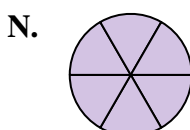
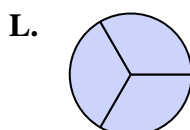
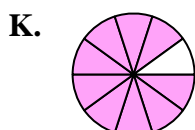
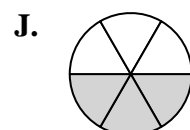
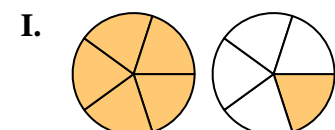
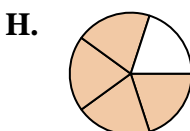
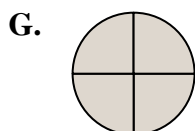
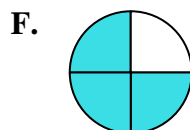
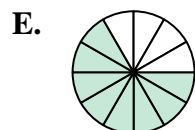
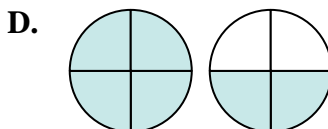
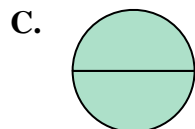
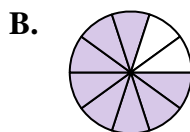
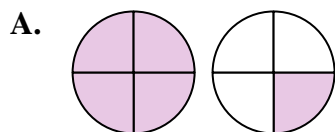
10. \_\_\_\_\_

11. \_\_\_\_\_

12. \_\_\_\_\_

13. \_\_\_\_\_

14. \_\_\_\_\_





Determine which letter best represents the sum.

1)  $\frac{2}{4} + \frac{3}{4}$

2)  $1\frac{1}{12} + \frac{3}{12}$

3)  $\frac{6}{10} + \frac{3}{10}$

4)  $\frac{4}{10} + \frac{4}{10}$

5)  $\frac{3}{12} + \frac{5}{12}$

6)  $\frac{1}{2} + \frac{1}{2}$

7)  $\frac{1}{6} + \frac{5}{6}$

8)  $\frac{1}{3} + \frac{2}{3}$

9)  $\frac{2}{5} + \frac{2}{5}$

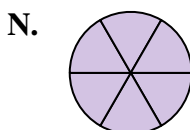
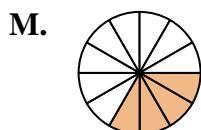
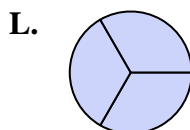
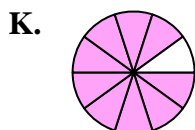
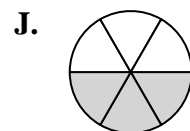
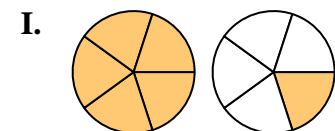
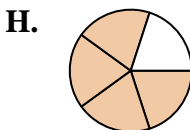
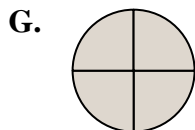
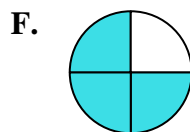
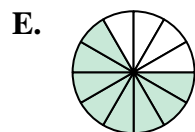
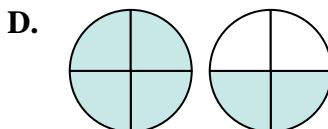
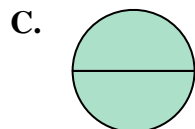
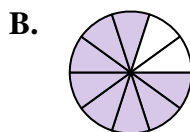
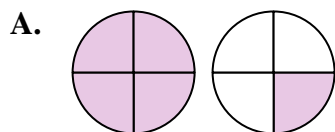
10)  $\frac{3}{4} + \frac{3}{4}$

11)  $\frac{2}{4} + \frac{2}{4}$

12)  $\frac{2}{4} + \frac{1}{4}$

13)  $\frac{4}{5} + \frac{2}{5}$

14)  $\frac{1}{6} + \frac{2}{6}$



**Answers**

1. **A**  $1\frac{1}{4}$

2. **M**  $\frac{4}{12}$

3. **K**  $\frac{9}{10}$

4. **B**  $\frac{8}{10}$

5. **E**  $\frac{8}{12}$

6. **C**  $\frac{2}{2}$

7. **N**  $\frac{6}{6}$

8. **L**  $\frac{3}{3}$

9. **H**  $\frac{4}{5}$

10. **D**  $1\frac{2}{4}$

11. **G**  $\frac{4}{4}$

12. **F**  $\frac{3}{4}$

13. **I**  $1\frac{1}{5}$

14. **J**  $\frac{3}{6}$