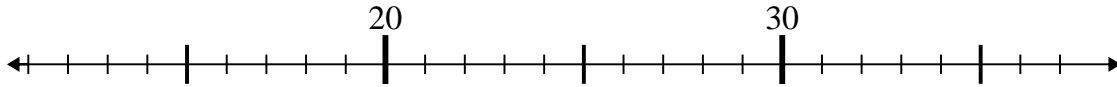




Use the numberlines to solve each problem.

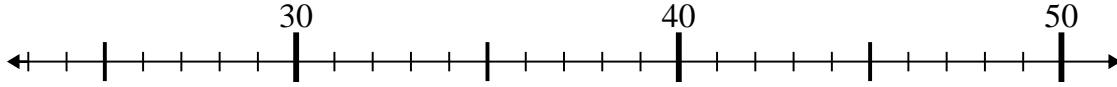
Answers

1) $22 - 6 =$



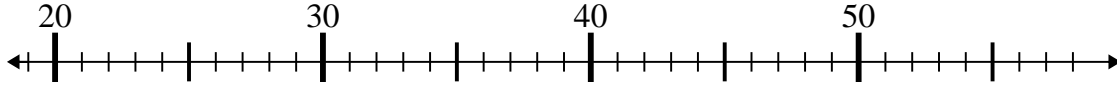
1. _____

2) $30 - 7 =$



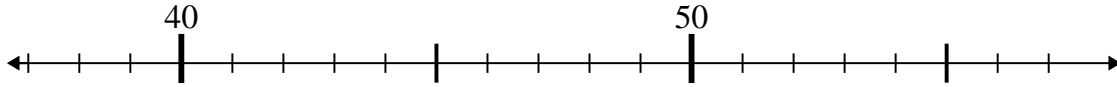
2. _____

3) $28 + 3 =$



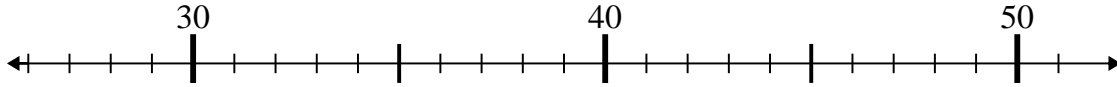
3. _____

4) $44 - 7 =$



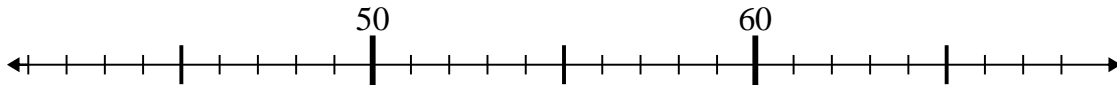
4. _____

5) $41 - 2 =$



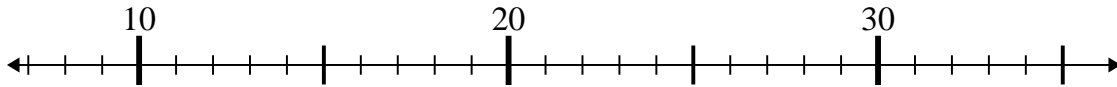
5. _____

6) $42 + 10 =$



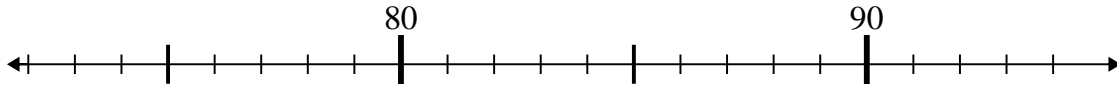
6. _____

7) $13 + 8 =$



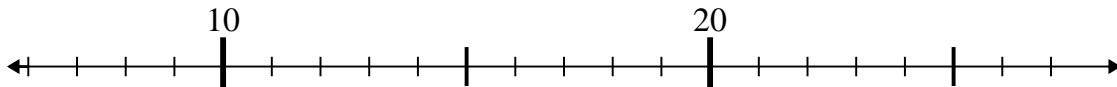
7. _____

8) $72 + 5 =$



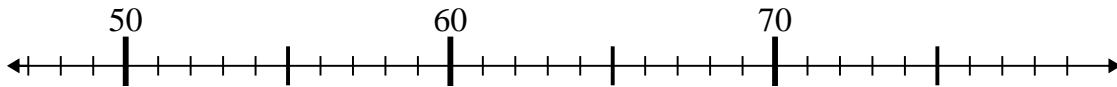
8. _____

9) $12 + 1 =$



9. _____

10) $66 + 2 =$

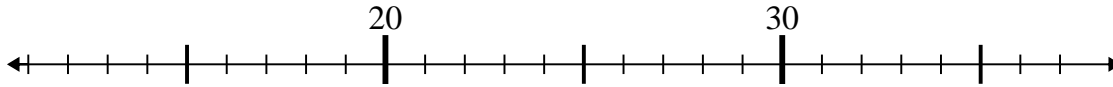


10. _____

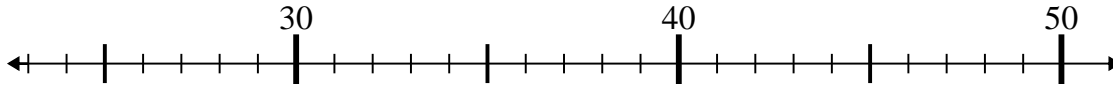


Use the numberlines to solve each problem.

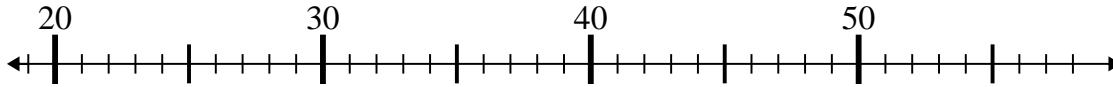
1) $22 - 6 =$



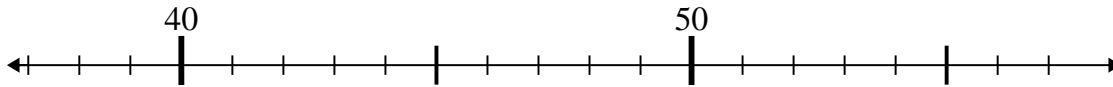
2) $30 - 7 =$



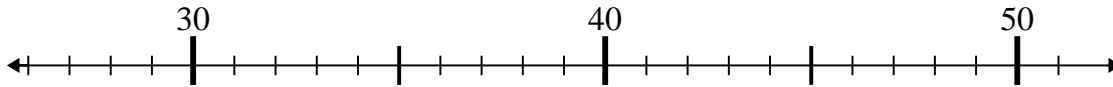
3) $28 + 3 =$



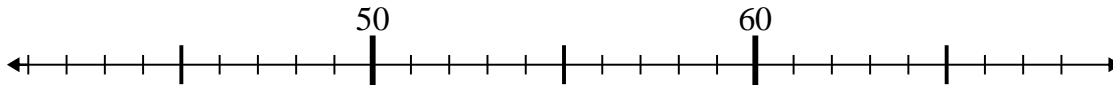
4) $44 - 7 =$



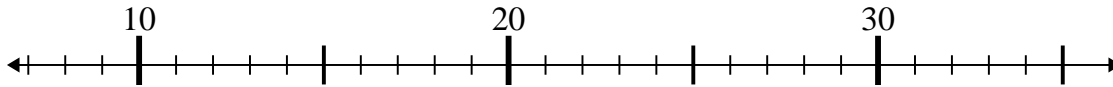
5) $41 - 2 =$



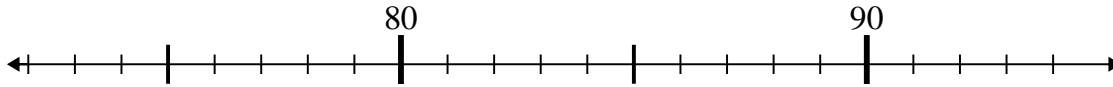
6) $42 + 10 =$



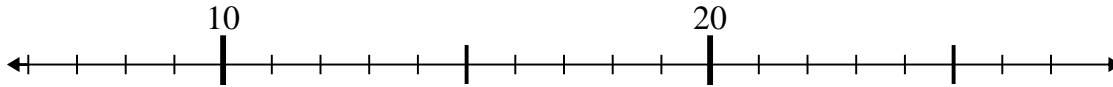
7) $13 + 8 =$



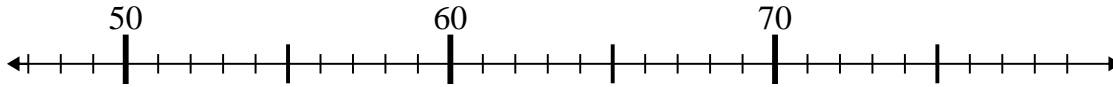
8) $72 + 5 =$



9) $12 + 1 =$



10) $66 + 2 =$



Answers

1. 16

2. 23

3. 31

4. 37

5. 39

6. 52

7. 21

8. 77

9. 13

10. 68