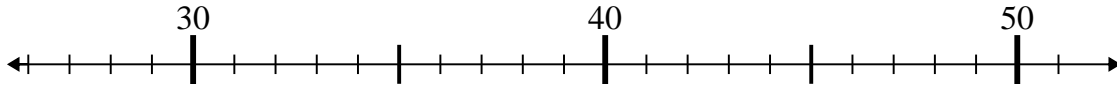




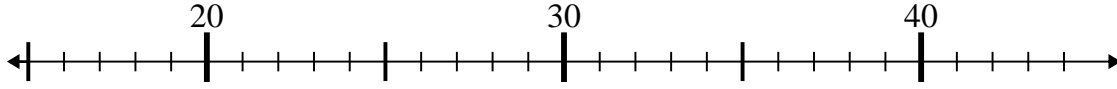
Use the numberlines to solve each problem.

Answers

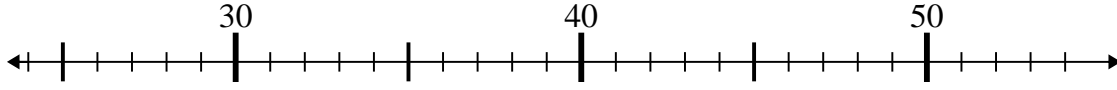
1) $32 - 5 =$



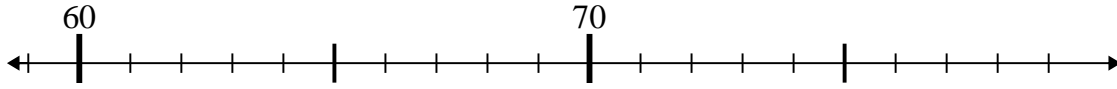
2) $16 + 7 =$



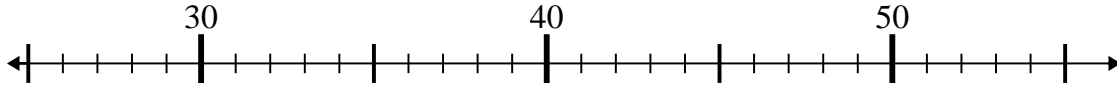
3) $25 + 12 =$



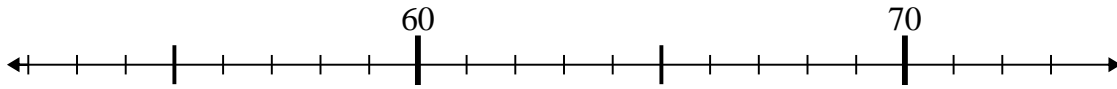
4) $75 - 14 =$



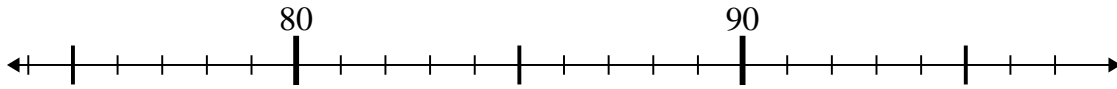
5) $28 + 26 =$



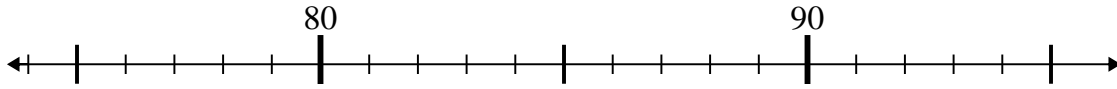
6) $65 - 10 =$



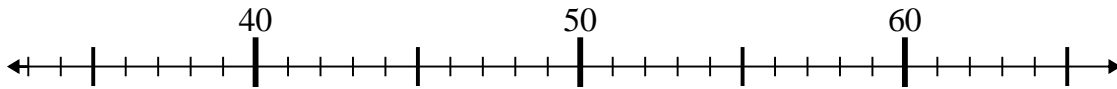
7) $81 - 2 =$



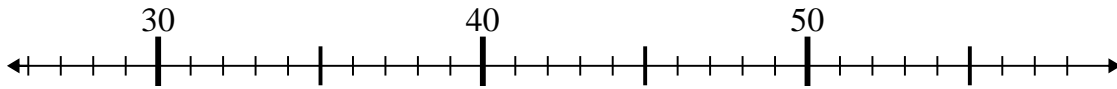
8) $95 - 8 =$



9) $48 - 11 =$



10) $32 + 18 =$

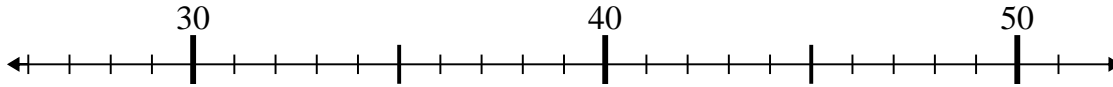


1. _____
2. _____
3. _____
4. _____
5. _____
6. _____
7. _____
8. _____
9. _____
10. _____

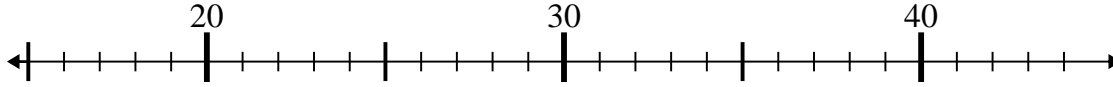


Use the numberlines to solve each problem.

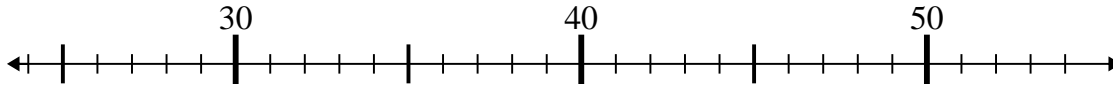
1) $32 - 5 =$



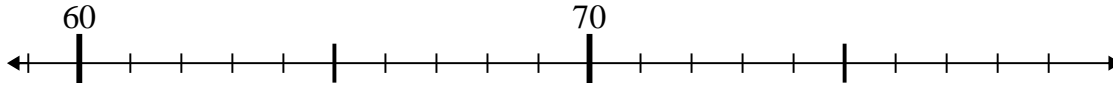
2) $16 + 7 =$



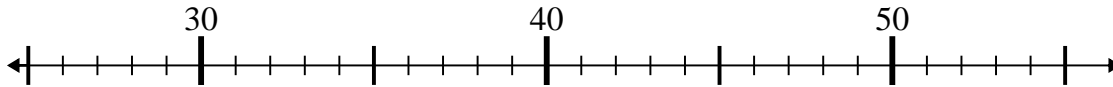
3) $25 + 12 =$



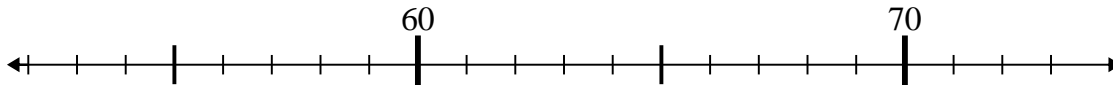
4) $75 - 14 =$



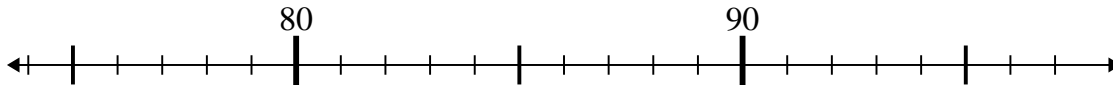
5) $28 + 26 =$



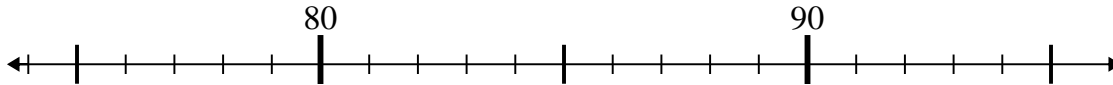
6) $65 - 10 =$



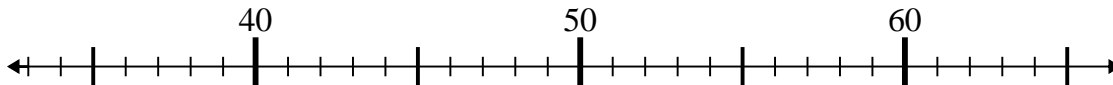
7) $81 - 2 =$



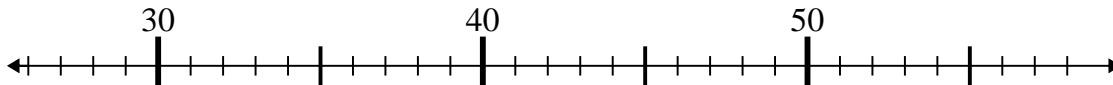
8) $95 - 8 =$



9) $48 - 11 =$



10) $32 + 18 =$



Answers

1. 27

2. 23

3. 37

4. 61

5. 54

6. 55

7. 79

8. 87

9. 37

10. 50