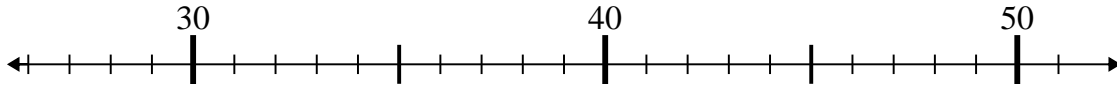




Use the numberlines to solve each problem.

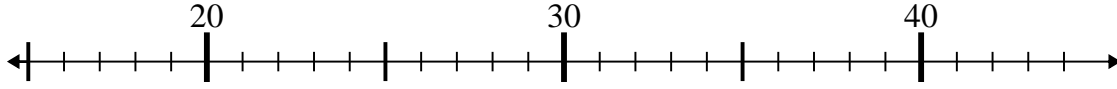
Answers

1)  $32 - 5 =$



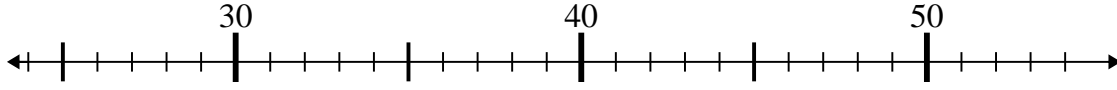
1. \_\_\_\_\_

2)  $16 + 7 =$



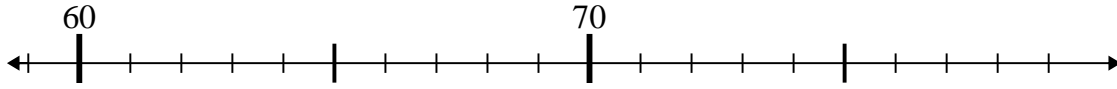
2. \_\_\_\_\_

3)  $25 + 12 =$



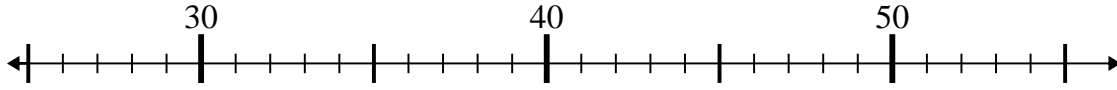
3. \_\_\_\_\_

4)  $75 - 14 =$



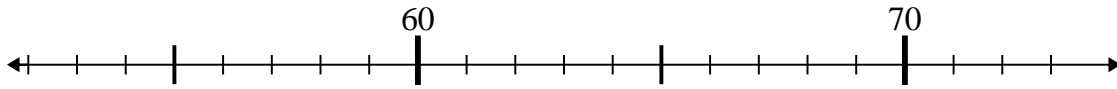
4. \_\_\_\_\_

5)  $28 + 26 =$



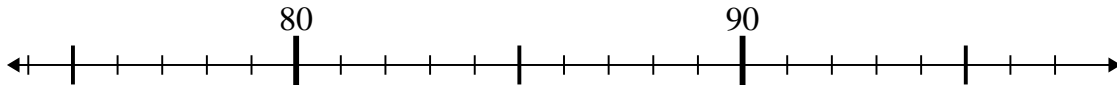
5. \_\_\_\_\_

6)  $65 - 10 =$



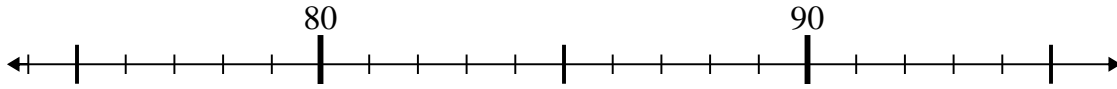
6. \_\_\_\_\_

7)  $81 - 2 =$



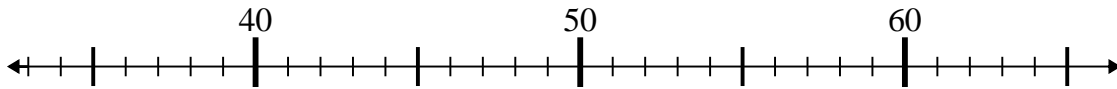
7. \_\_\_\_\_

8)  $95 - 8 =$



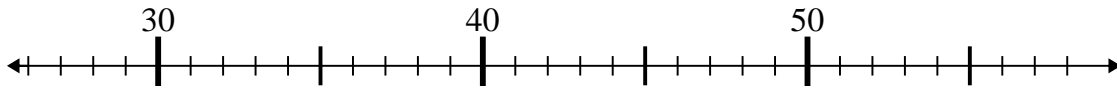
8. \_\_\_\_\_

9)  $48 - 11 =$



9. \_\_\_\_\_

10)  $32 + 18 =$

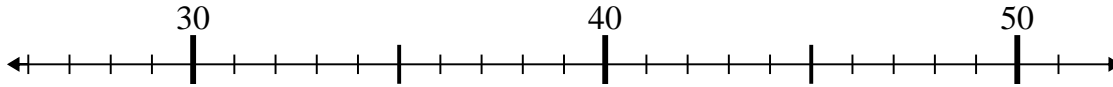


10. \_\_\_\_\_

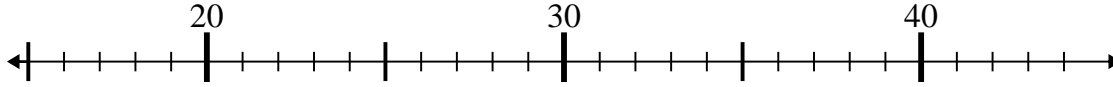


Use the numberlines to solve each problem.

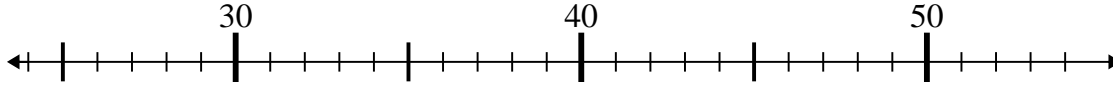
1)  $32 - 5 =$



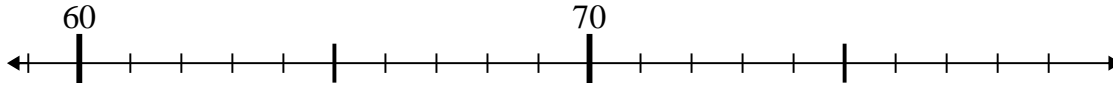
2)  $16 + 7 =$



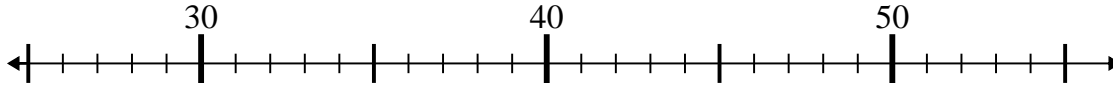
3)  $25 + 12 =$



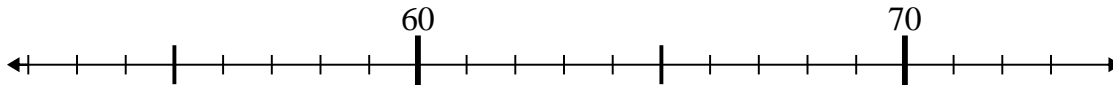
4)  $75 - 14 =$



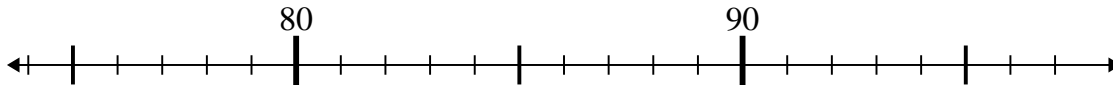
5)  $28 + 26 =$



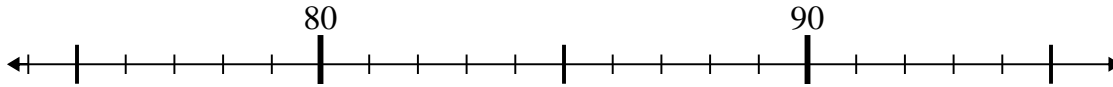
6)  $65 - 10 =$



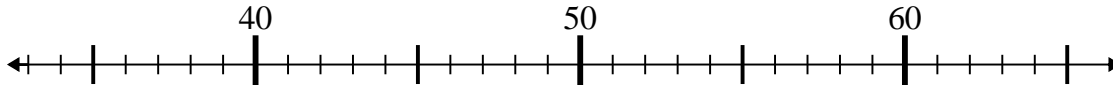
7)  $81 - 2 =$



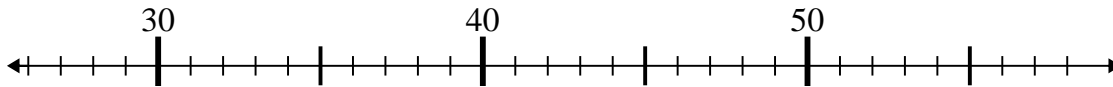
8)  $95 - 8 =$



9)  $48 - 11 =$



10)  $32 + 18 =$



Answers

1. 27

2. 23

3. 37

4. 61

5. 54

6. 55

7. 79

8. 87

9. 37

10. 50