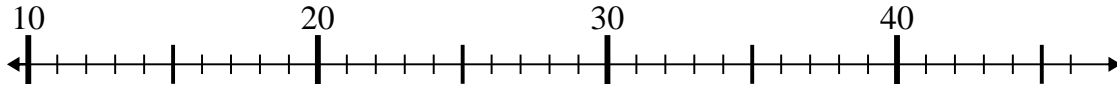




Use the numberlines to solve each problem.

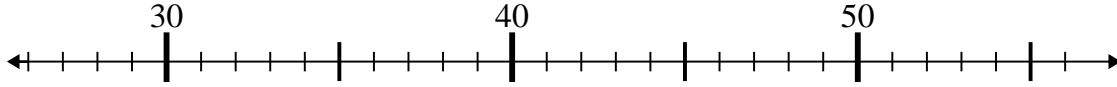
Answers

1) $24 - 11 =$



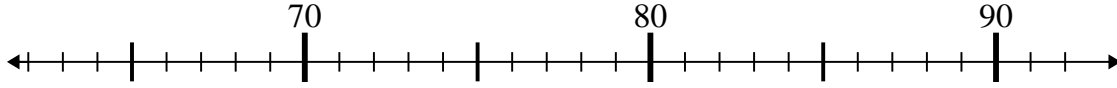
1. _____

2) $29 + 6 =$



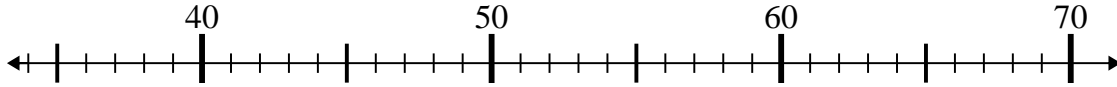
2. _____

3) $72 + 7 =$



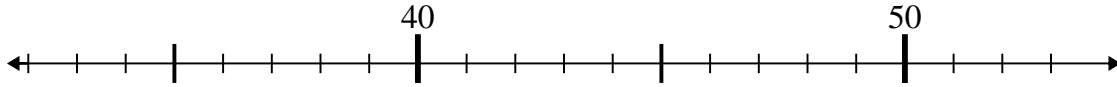
3. _____

4) $41 + 16 =$



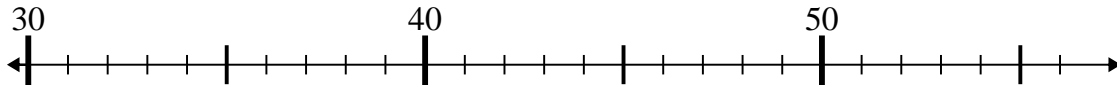
4. _____

5) $51 - 3 =$



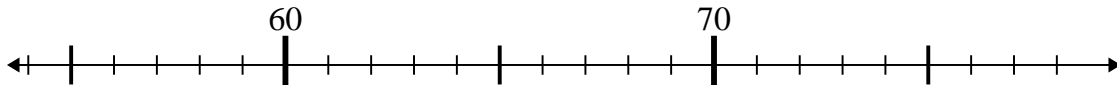
5. _____

6) $35 - 0 =$



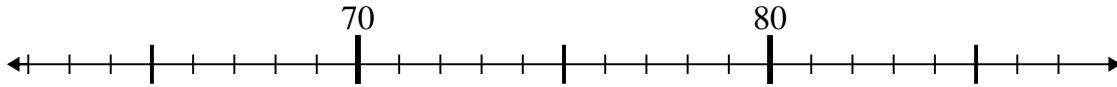
6. _____

7) $65 + 10 =$



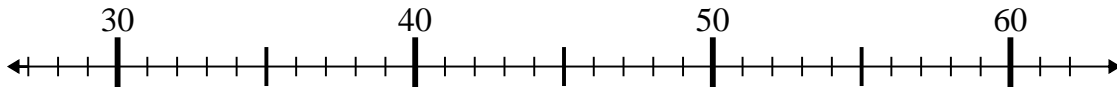
7. _____

8) $65 + 14 =$



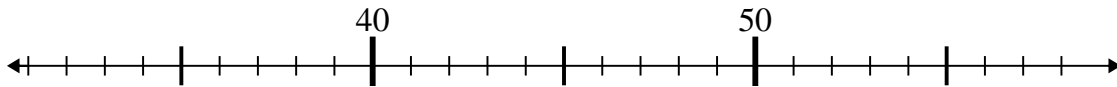
8. _____

9) $57 - 16 =$



9. _____

10) $58 - 19 =$

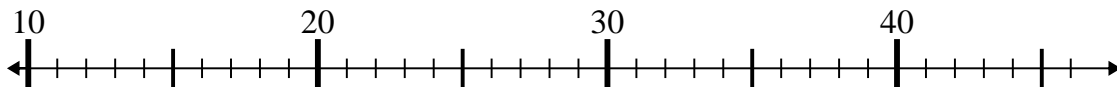


10. _____

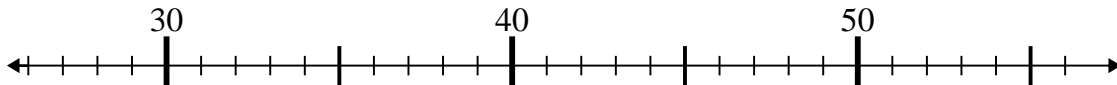


Use the numberlines to solve each problem.

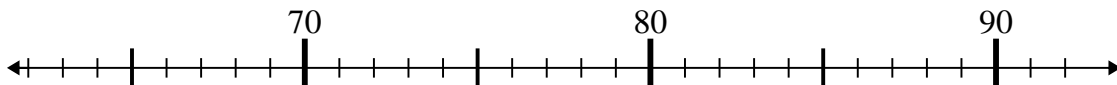
1) $24 - 11 =$



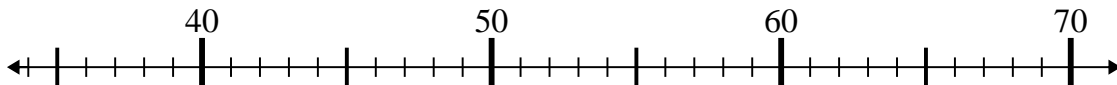
2) $29 + 6 =$



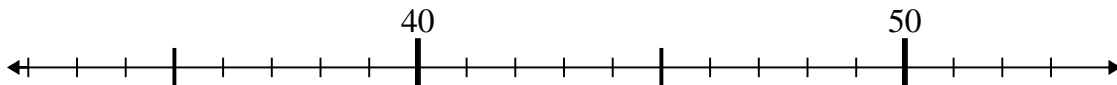
3) $72 + 7 =$



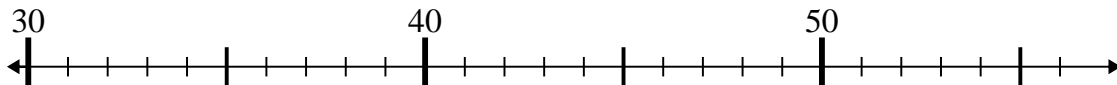
4) $41 + 16 =$



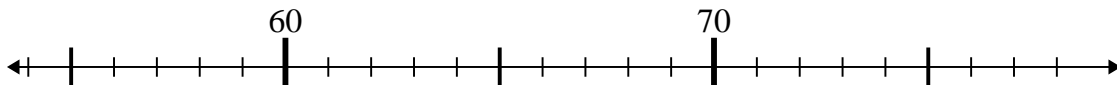
5) $51 - 3 =$



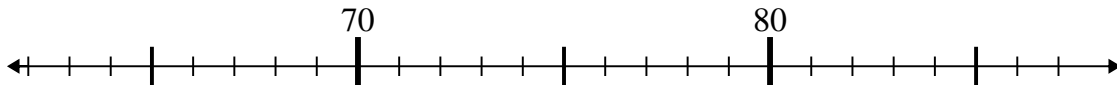
6) $35 - 0 =$



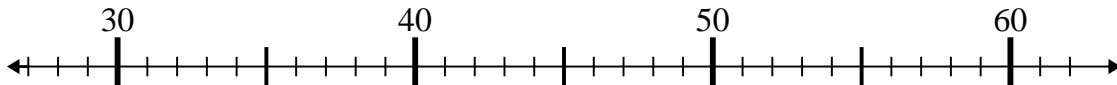
7) $65 + 10 =$



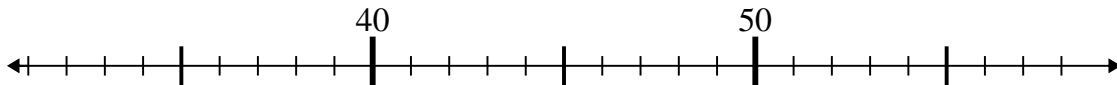
8) $65 + 14 =$



9) $57 - 16 =$



10) $58 - 19 =$



Answers

1. 13

2. 35

3. 79

4. 57

5. 48

6. 35

7. 75

8. 79

9. 41

10. 39