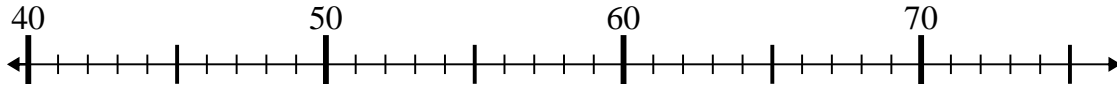




Use the numberlines to solve each problem.

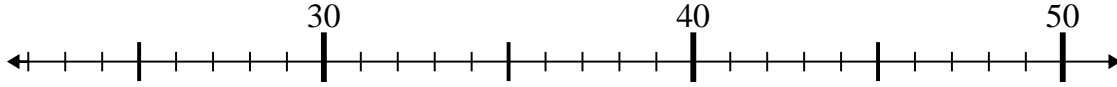
Answers

1) $46 - 5 =$



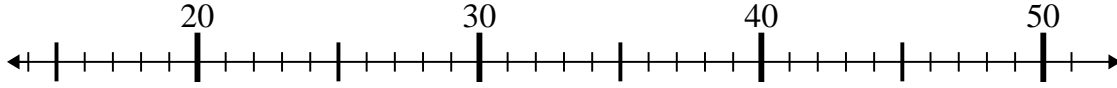
1. _____

2) $22 + 19 =$



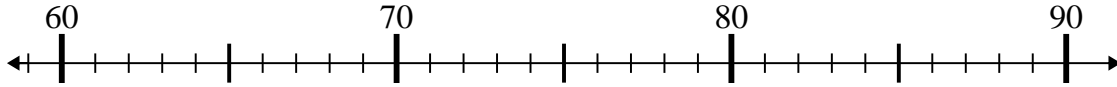
2. _____

3) $21 + 25 =$



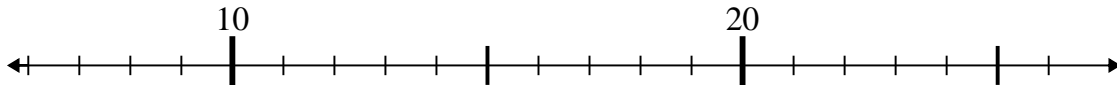
3. _____

4) $73 + 15 =$



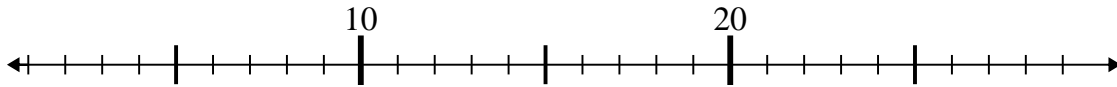
4. _____

5) $11 + 2 =$



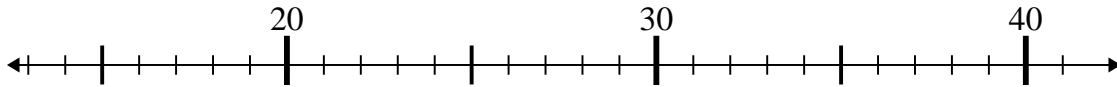
5. _____

6) $5 + 1 =$



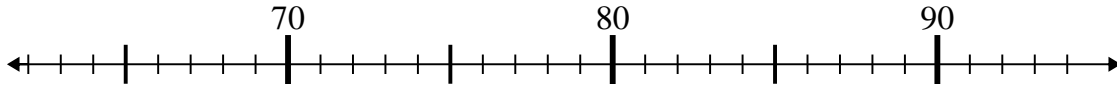
6. _____

7) $23 + 4 =$



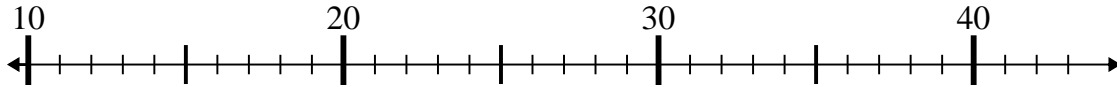
7. _____

8) $82 - 14 =$



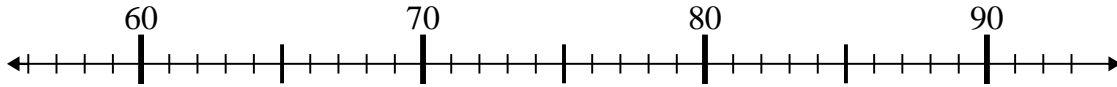
8. _____

9) $22 - 10 =$



9. _____

10) $65 + 1 =$

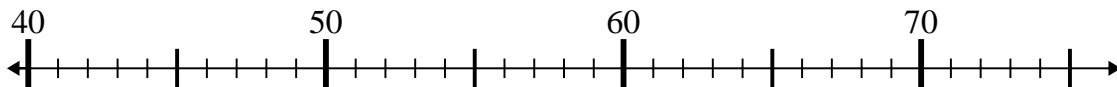


10. _____

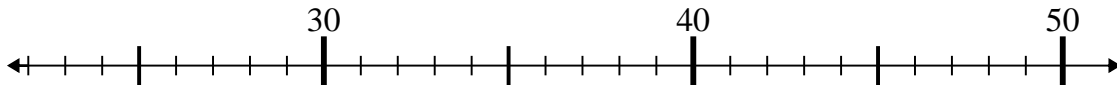


Use the numberlines to solve each problem.

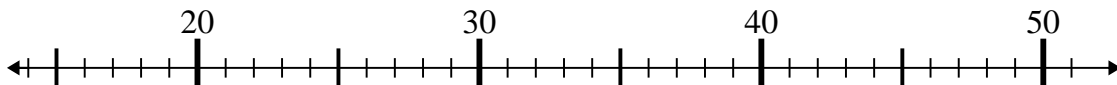
1) $46 - 5 =$



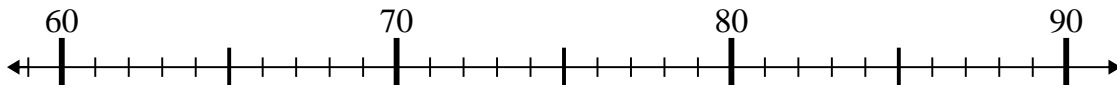
2) $22 + 19 =$



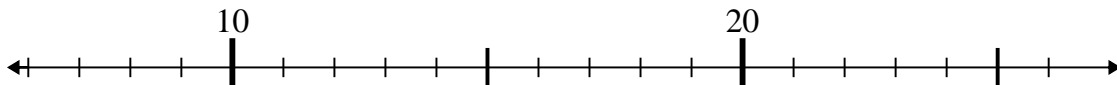
3) $21 + 25 =$



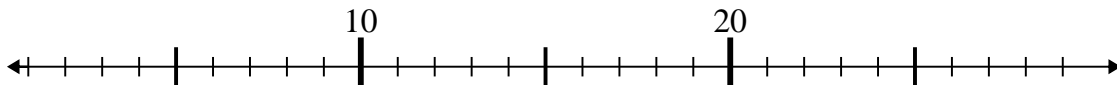
4) $73 + 15 =$



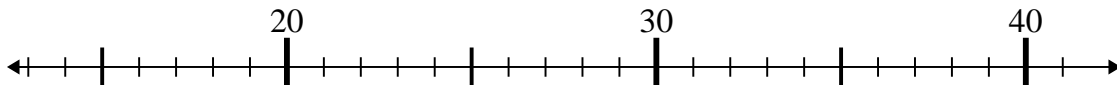
5) $11 + 2 =$



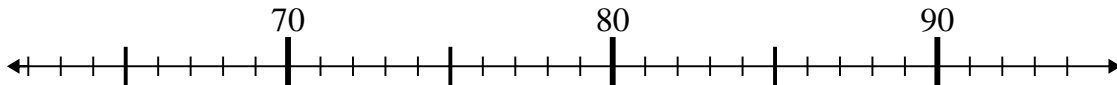
6) $5 + 1 =$



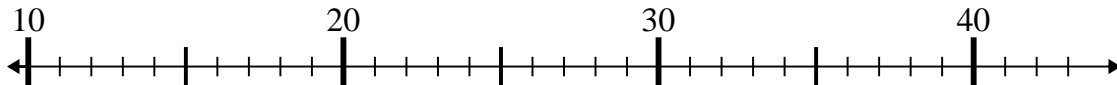
7) $23 + 4 =$



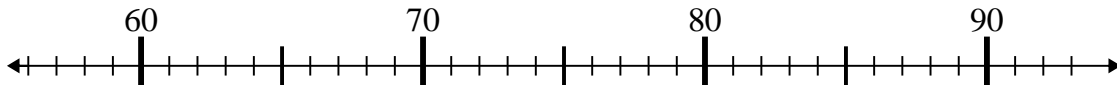
8) $82 - 14 =$



9) $22 - 10 =$



10) $65 + 1 =$



Answers

1. 41

2. 41

3. 46

4. 88

5. 13

6. 6

7. 27

8. 68

9. 12

10. 66