




Use the shapes provided to answer the questions.

Answers

Ex) There are 15 shapes below. How many groups of 6 can you make with them? How many will you have left over?



1) There are 22 shapes below. How many groups of 3 can you make with them? How many will you have left over?



Ex. 2 3

1. _____

2. _____

3. _____

4. _____

5. _____

6. _____

7. _____

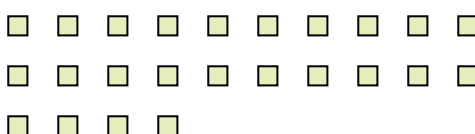
8. _____

9. _____


2) There are 19 shapes below. How many groups of 2 can you make with them? How many will you have left over?



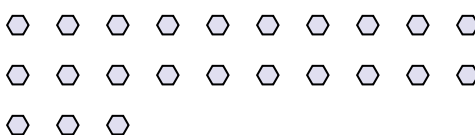
3) There are 24 shapes below. How many groups of 7 can you make with them? How many will you have left over?



4) There are 29 shapes below. How many groups of 9 can you make with them? How many will you have left over?



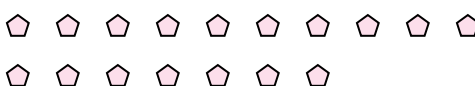
5) There are 23 shapes below. How many groups of 3 can you make with them? How many will you have left over?



6) There are 15 shapes below. How many groups of 7 can you make with them? How many will you have left over?



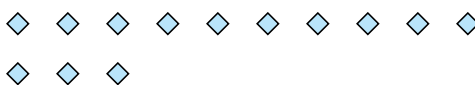
7) There are 17 shapes below. How many groups of 3 can you make with them? How many will you have left over?



8) There are 12 shapes below. How many groups of 3 can you make with them? How many will you have left over?



9) There are 13 shapes below. How many groups of 7 can you make with them? How many will you have left over?






Use the shapes provided to answer the questions.

Ex) There are 15 shapes below. How many groups of 6 can you make with them? How many will you have left over?



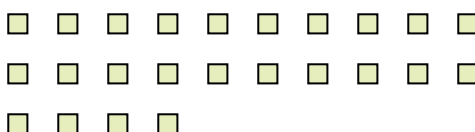
1) There are 22 shapes below. How many groups of 3 can you make with them? How many will you have left over?




2) There are 19 shapes below. How many groups of 2 can you make with them? How many will you have left over?



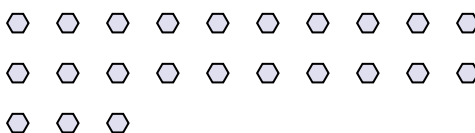
3) There are 24 shapes below. How many groups of 7 can you make with them? How many will you have left over?



4) There are 29 shapes below. How many groups of 9 can you make with them? How many will you have left over?



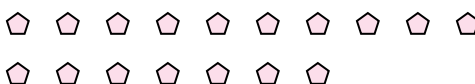
5) There are 23 shapes below. How many groups of 3 can you make with them? How many will you have left over?



6) There are 15 shapes below. How many groups of 7 can you make with them? How many will you have left over?



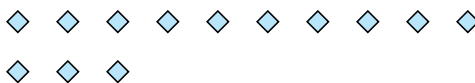
7) There are 17 shapes below. How many groups of 3 can you make with them? How many will you have left over?



8) There are 12 shapes below. How many groups of 3 can you make with them? How many will you have left over?



9) There are 13 shapes below. How many groups of 7 can you make with them? How many will you have left over?



Answers

Ex.	<u>2</u>	<u>3</u>
1.	<u>7</u>	<u>1</u>
2.	<u>9</u>	<u>1</u>
3.	<u>3</u>	<u>3</u>
4.	<u>3</u>	<u>2</u>
5.	<u>7</u>	<u>2</u>
6.	<u>2</u>	<u>1</u>
7.	<u>5</u>	<u>2</u>
8.	<u>4</u>	<u>0</u>
9.	<u>1</u>	<u>6</u>