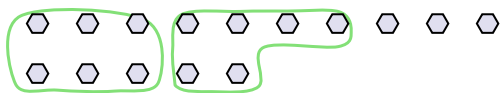




Use the shapes provided to answer the questions.

**Answers**

Ex) There are 15 shapes below. How many groups of 6 can you make with them? How many will you have left over?



1) There are 26 shapes below. How many groups of 3 can you make with them? How many will you have left over?



Ex. 2 3

1. \_\_\_\_\_

2. \_\_\_\_\_

3. \_\_\_\_\_

4. \_\_\_\_\_

5. \_\_\_\_\_

6. \_\_\_\_\_

7. \_\_\_\_\_


8. \_\_\_\_\_

9. \_\_\_\_\_

2) There are 10 shapes below. How many groups of 3 can you make with them? How many will you have left over?



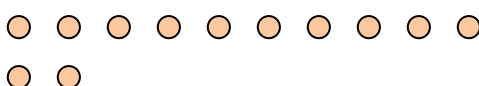
3) There are 30 shapes below. How many groups of 7 can you make with them? How many will you have left over?



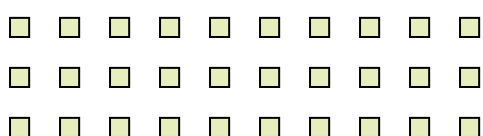
4) There are 10 shapes below. How many groups of 7 can you make with them? How many will you have left over?



5) There are 12 shapes below. How many groups of 8 can you make with them? How many will you have left over?




6) There are 30 shapes below. How many groups of 4 can you make with them? How many will you have left over?



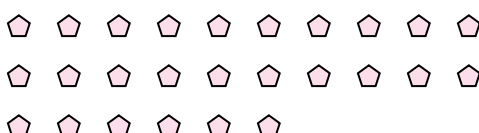
7) There are 11 shapes below. How many groups of 8 can you make with them? How many will you have left over?



8) There are 24 shapes below. How many groups of 7 can you make with them? How many will you have left over?



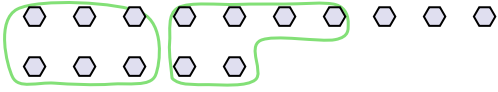
9) There are 26 shapes below. How many groups of 5 can you make with them? How many will you have left over?





Use the shapes provided to answer the questions.

Ex) There are 15 shapes below. How many groups of 6 can you make with them? How many will you have left over?



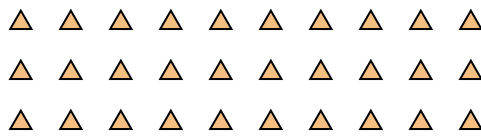
1) There are 26 shapes below. How many groups of 3 can you make with them? How many will you have left over?



2) There are 10 shapes below. How many groups of 3 can you make with them? How many will you have left over?



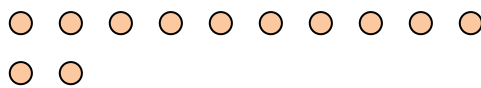
3) There are 30 shapes below. How many groups of 7 can you make with them? How many will you have left over?



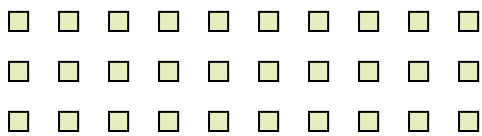
4) There are 10 shapes below. How many groups of 7 can you make with them? How many will you have left over?



5) There are 12 shapes below. How many groups of 8 can you make with them? How many will you have left over?




6) There are 30 shapes below. How many groups of 4 can you make with them? How many will you have left over?



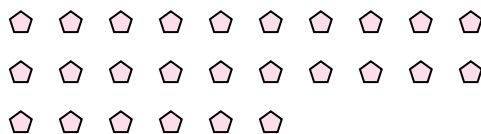
7) There are 11 shapes below. How many groups of 8 can you make with them? How many will you have left over?



8) There are 24 shapes below. How many groups of 7 can you make with them? How many will you have left over?



9) There are 26 shapes below. How many groups of 5 can you make with them? How many will you have left over?



Answers

Ex. 2 3

1. 8 2

2. 3 1

3. 4 2

4. 1 3

5. 1 4

6. 7 2

7. 1 3

8. 3 3

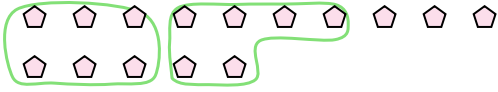
9. 5 1



Use the shapes provided to answer the questions.

**Answers**

Ex) There are 15 shapes below. How many groups of 6 can you make with them? How many will you have left over?



1) There are 10 shapes below. How many groups of 7 can you make with them? How many will you have left over?

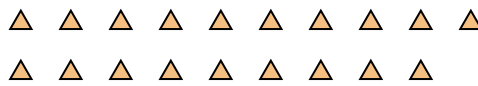


Ex. 2 3

2) There are 10 shapes below. How many groups of 3 can you make with them? How many will you have left over?



3) There are 19 shapes below. How many groups of 6 can you make with them? How many will you have left over?



1. \_\_\_\_\_

2. \_\_\_\_\_

3. \_\_\_\_\_

4. \_\_\_\_\_

5. \_\_\_\_\_

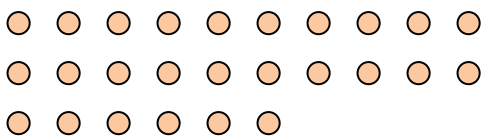
6. \_\_\_\_\_

7. \_\_\_\_\_

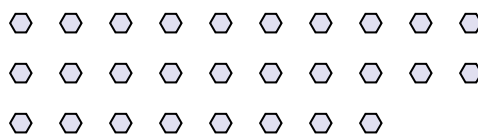
8. \_\_\_\_\_

9. \_\_\_\_\_

4) There are 26 shapes below. How many groups of 8 can you make with them? How many will you have left over?




5) There are 28 shapes below. How many groups of 8 can you make with them? How many will you have left over?



6) There are 18 shapes below. How many groups of 4 can you make with them? How many will you have left over?



7) There are 28 shapes below. How many groups of 7 can you make with them? How many will you have left over?



8) There are 22 shapes below. How many groups of 3 can you make with them? How many will you have left over?



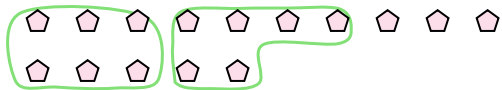
9) There are 20 shapes below. How many groups of 2 can you make with them? How many will you have left over?





Use the shapes provided to answer the questions.

Ex) There are 15 shapes below. How many groups of 6 can you make with them? How many will you have left over?



1) There are 10 shapes below. How many groups of 7 can you make with them? How many will you have left over?



**Answers**

Ex. 2 3

1. 1 3

2. 3 1

3. 3 1

4. 3 2

5. 3 4

6. 4 2

7. 4 0

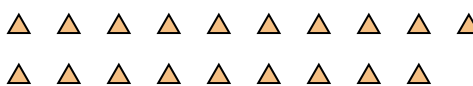
8. 7 1

9. 10 0

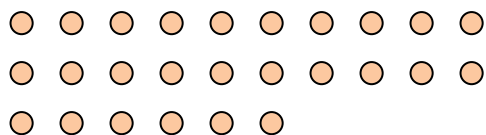
2) There are 10 shapes below. How many groups of 3 can you make with them? How many will you have left over?



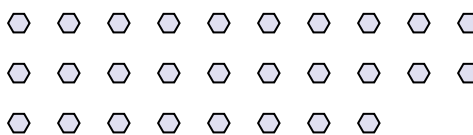
3) There are 19 shapes below. How many groups of 6 can you make with them? How many will you have left over?



4) There are 26 shapes below. How many groups of 8 can you make with them? How many will you have left over?




5) There are 28 shapes below. How many groups of 8 can you make with them? How many will you have left over?



6) There are 18 shapes below. How many groups of 4 can you make with them? How many will you have left over?



7) There are 28 shapes below. How many groups of 7 can you make with them? How many will you have left over?



8) There are 22 shapes below. How many groups of 3 can you make with them? How many will you have left over?



9) There are 20 shapes below. How many groups of 2 can you make with them? How many will you have left over?

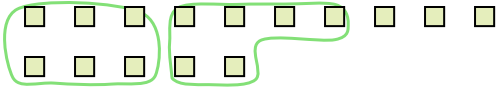





Use the shapes provided to answer the questions.

**Answers**

Ex) There are 15 shapes below. How many groups of 6 can you make with them? How many will you have left over?




1) There are 18 shapes below. How many groups of 3 can you make with them? How many will you have left over?



Ex. 2 3

2) There are 27 shapes below. How many groups of 4 can you make with them? How many will you have left over?



3) There are 11 shapes below. How many groups of 2 can you make with them? How many will you have left over?



1. \_\_\_\_\_

2. \_\_\_\_\_

3. \_\_\_\_\_

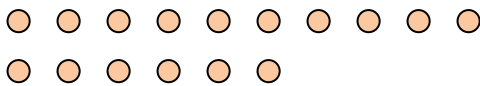
4. \_\_\_\_\_

5. \_\_\_\_\_

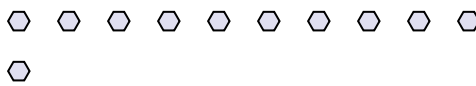
6. \_\_\_\_\_

7. \_\_\_\_\_

4) There are 16 shapes below. How many groups of 4 can you make with them? How many will you have left over?



5) There are 11 shapes below. How many groups of 9 can you make with them? How many will you have left over?



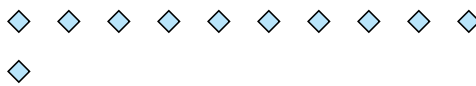
8. \_\_\_\_\_

9. \_\_\_\_\_


6) There are 16 shapes below. How many groups of 6 can you make with them? How many will you have left over?



7) There are 11 shapes below. How many groups of 3 can you make with them? How many will you have left over?



8) There are 30 shapes below. How many groups of 6 can you make with them? How many will you have left over?



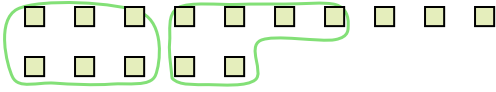
9) There are 20 shapes below. How many groups of 4 can you make with them? How many will you have left over?






Use the shapes provided to answer the questions.


Ex) There are 15 shapes below. How many groups of 6 can you make with them? How many will you have left over?



1) There are 18 shapes below. How many groups of 3 can you make with them? How many will you have left over?



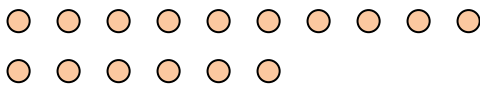
2) There are 27 shapes below. How many groups of 4 can you make with them? How many will you have left over?



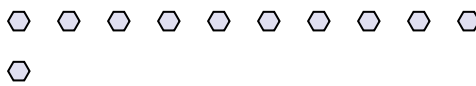
3) There are 11 shapes below. How many groups of 2 can you make with them? How many will you have left over?



4) There are 16 shapes below. How many groups of 4 can you make with them? How many will you have left over?



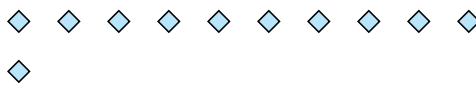
5) There are 11 shapes below. How many groups of 9 can you make with them? How many will you have left over?




6) There are 16 shapes below. How many groups of 6 can you make with them? How many will you have left over?



7) There are 11 shapes below. How many groups of 3 can you make with them? How many will you have left over?



8) There are 30 shapes below. How many groups of 6 can you make with them? How many will you have left over?



9) There are 20 shapes below. How many groups of 4 can you make with them? How many will you have left over?



Answers

Ex. 2 3

1. 6 0

2. 6 3

3. 5 1

4. 4 0

5. 1 2

6. 2 4

7. 3 2

8. 5 0

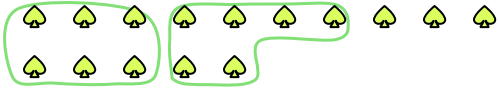
9. 5 0




Use the shapes provided to answer the questions.

Answers

Ex) There are 15 shapes below. How many groups of 6 can you make with them? How many will you have left over?

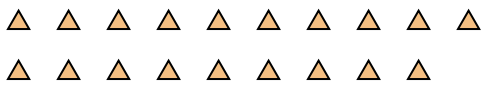


1) There are 26 shapes below. How many groups of 3 can you make with them? How many will you have left over?

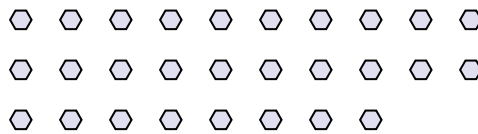


Ex. 2 3

2) There are 19 shapes below. How many groups of 6 can you make with them? How many will you have left over?



3) There are 28 shapes below. How many groups of 8 can you make with them? How many will you have left over?



1. \_\_\_\_\_

2. \_\_\_\_\_

3. \_\_\_\_\_

4. \_\_\_\_\_

5. \_\_\_\_\_

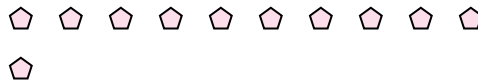
6. \_\_\_\_\_

7. \_\_\_\_\_

4) There are 22 shapes below. How many groups of 4 can you make with them? How many will you have left over?



5) There are 11 shapes below. How many groups of 8 can you make with them? How many will you have left over?



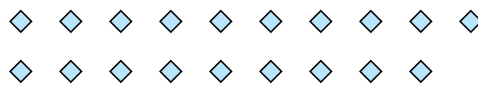
8. \_\_\_\_\_

9. \_\_\_\_\_


6) There are 19 shapes below. How many groups of 2 can you make with them? How many will you have left over?



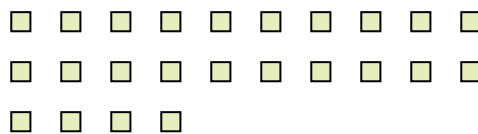
7) There are 19 shapes below. How many groups of 2 can you make with them? How many will you have left over?



8) There are 23 shapes below. How many groups of 9 can you make with them? How many will you have left over?



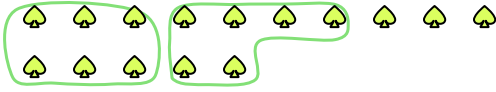
9) There are 24 shapes below. How many groups of 9 can you make with them? How many will you have left over?






Use the shapes provided to answer the questions.

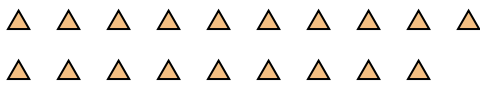
Ex) There are 15 shapes below. How many groups of 6 can you make with them? How many will you have left over?



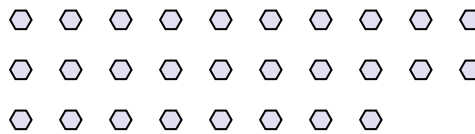
1) There are 26 shapes below. How many groups of 3 can you make with them? How many will you have left over?



2) There are 19 shapes below. How many groups of 6 can you make with them? How many will you have left over?



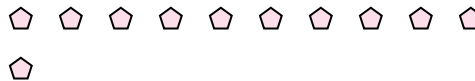
3) There are 28 shapes below. How many groups of 8 can you make with them? How many will you have left over?



4) There are 22 shapes below. How many groups of 4 can you make with them? How many will you have left over?



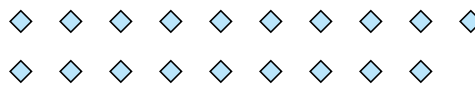
5) There are 11 shapes below. How many groups of 8 can you make with them? How many will you have left over?




6) There are 19 shapes below. How many groups of 2 can you make with them? How many will you have left over?



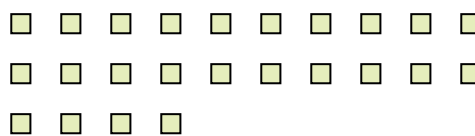
7) There are 19 shapes below. How many groups of 2 can you make with them? How many will you have left over?



8) There are 23 shapes below. How many groups of 9 can you make with them? How many will you have left over?



9) There are 24 shapes below. How many groups of 9 can you make with them? How many will you have left over?



Answers

Ex.	<u>2</u>	<u>3</u>
1.	<u>8</u>	<u>2</u>
2.	<u>3</u>	<u>1</u>
3.	<u>3</u>	<u>4</u>
4.	<u>5</u>	<u>2</u>
5.	<u>1</u>	<u>3</u>
6.	<u>9</u>	<u>1</u>
7.	<u>9</u>	<u>1</u>
8.	<u>2</u>	<u>5</u>
9.	<u>2</u>	<u>6</u>

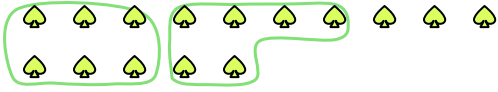





Use the shapes provided to answer the questions.

**Answers**

Ex) There are 15 shapes below. How many groups of 6 can you make with them? How many will you have left over?



1) There are 30 shapes below. How many groups of 5 can you make with them? How many will you have left over?



Ex. 2 3

2) There are 15 shapes below. How many groups of 7 can you make with them? How many will you have left over?



3) There are 11 shapes below. How many groups of 6 can you make with them? How many will you have left over?



1. \_\_\_\_\_

2. \_\_\_\_\_

3. \_\_\_\_\_

4. \_\_\_\_\_

5. \_\_\_\_\_

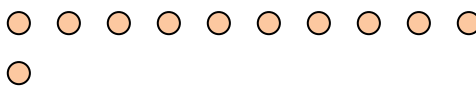
6. \_\_\_\_\_

7. \_\_\_\_\_

4) There are 16 shapes below. How many groups of 3 can you make with them? How many will you have left over?



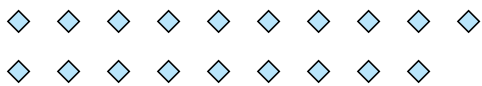
5) There are 11 shapes below. How many groups of 2 can you make with them? How many will you have left over?



8. \_\_\_\_\_

9. \_\_\_\_\_


6) There are 19 shapes below. How many groups of 5 can you make with them? How many will you have left over?



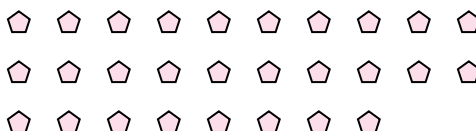
7) There are 13 shapes below. How many groups of 9 can you make with them? How many will you have left over?



8) There are 27 shapes below. How many groups of 9 can you make with them? How many will you have left over?



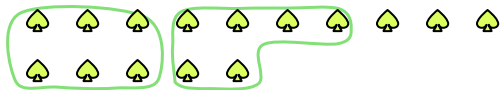
9) There are 28 shapes below. How many groups of 2 can you make with them? How many will you have left over?






Use the shapes provided to answer the questions.

Ex) There are 15 shapes below. How many groups of 6 can you make with them? How many will you have left over?



1) There are 30 shapes below. How many groups of 5 can you make with them? How many will you have left over?



2) There are 15 shapes below. How many groups of 7 can you make with them? How many will you have left over?



3) There are 11 shapes below. How many groups of 6 can you make with them? How many will you have left over?



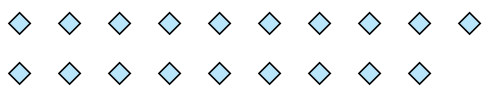
4) There are 16 shapes below. How many groups of 3 can you make with them? How many will you have left over?



5) There are 11 shapes below. How many groups of 2 can you make with them? How many will you have left over?




6) There are 19 shapes below. How many groups of 5 can you make with them? How many will you have left over?



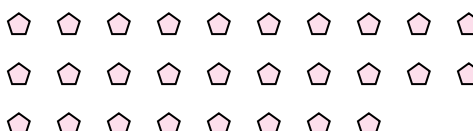
7) There are 13 shapes below. How many groups of 9 can you make with them? How many will you have left over?



8) There are 27 shapes below. How many groups of 9 can you make with them? How many will you have left over?



9) There are 28 shapes below. How many groups of 2 can you make with them? How many will you have left over?



**Answers**

Ex. 2 3

1. 6 0

2. 2 1

3. 1 5

4. 5 1

5. 5 1

6. 3 4

7. 1 4

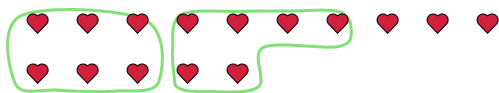
8. 3 0

9. 14 0



Use the shapes provided to answer the questions.

Ex) There are 15 shapes below. How many groups of 6 can you make with them? How many will you have left over?



1) There are 17 shapes below. How many groups of 2 can you make with them? How many will you have left over?



**Answers**

Ex. 2 3

1. \_\_\_\_\_

2. \_\_\_\_\_

3. \_\_\_\_\_

4. \_\_\_\_\_

5. \_\_\_\_\_

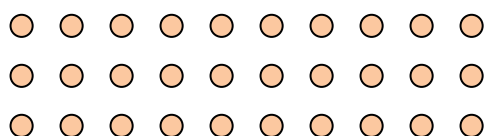
6. \_\_\_\_\_

7. \_\_\_\_\_

8. \_\_\_\_\_

9. \_\_\_\_\_

2) There are 30 shapes below. How many groups of 9 can you make with them? How many will you have left over?



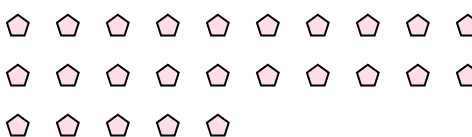
3) There are 13 shapes below. How many groups of 3 can you make with them? How many will you have left over?



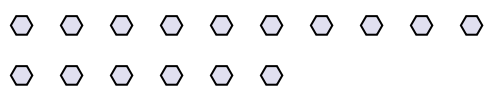
4) There are 10 shapes below. How many groups of 7 can you make with them? How many will you have left over?



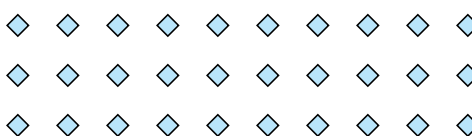
5) There are 25 shapes below. How many groups of 2 can you make with them? How many will you have left over?



6) There are 16 shapes below. How many groups of 8 can you make with them? How many will you have left over?



7) There are 30 shapes below. How many groups of 9 can you make with them? How many will you have left over?



8) There are 15 shapes below. How many groups of 4 can you make with them? How many will you have left over?



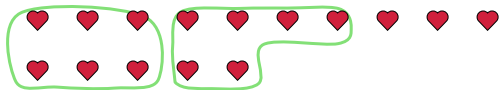
9) There are 26 shapes below. How many groups of 7 can you make with them? How many will you have left over?





Use the shapes provided to answer the questions.

Ex) There are 15 shapes below. How many groups of 6 can you make with them? How many will you have left over?



1) There are 17 shapes below. How many groups of 2 can you make with them? How many will you have left over?



**Answers**

Ex. 2 3

1. 8 1

2. 3 3

3. 4 1

4. 1 3

5. 12 1

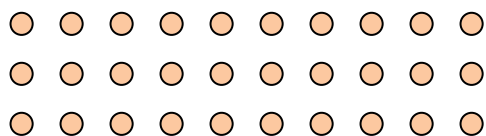
6. 2 0

7. 3 3

8. 3 3

9. 3 5

2) There are 30 shapes below. How many groups of 9 can you make with them? How many will you have left over?



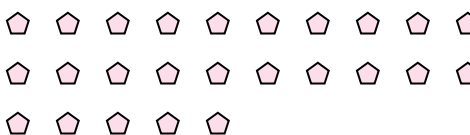
3) There are 13 shapes below. How many groups of 3 can you make with them? How many will you have left over?



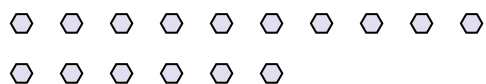
4) There are 10 shapes below. How many groups of 7 can you make with them? How many will you have left over?



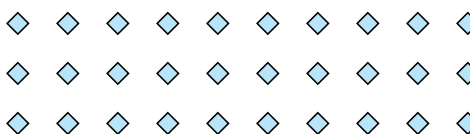
5) There are 25 shapes below. How many groups of 2 can you make with them? How many will you have left over?



6) There are 16 shapes below. How many groups of 8 can you make with them? How many will you have left over?



7) There are 30 shapes below. How many groups of 9 can you make with them? How many will you have left over?



8) There are 15 shapes below. How many groups of 4 can you make with them? How many will you have left over?



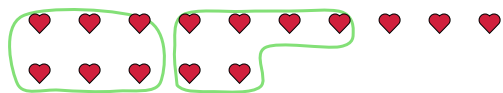
9) There are 26 shapes below. How many groups of 7 can you make with them? How many will you have left over?



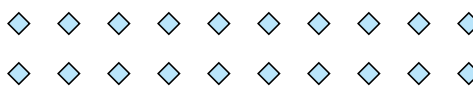


Use the shapes provided to answer the questions.

Ex) There are 15 shapes below. How many groups of 6 can you make with them? How many will you have left over?



1) There are 20 shapes below. How many groups of 8 can you make with them? How many will you have left over?



Answers

Ex. 2 3

1. \_\_\_\_\_

2. \_\_\_\_\_

3. \_\_\_\_\_

4. \_\_\_\_\_

5. \_\_\_\_\_

6. \_\_\_\_\_

7. \_\_\_\_\_

8. \_\_\_\_\_

9. \_\_\_\_\_

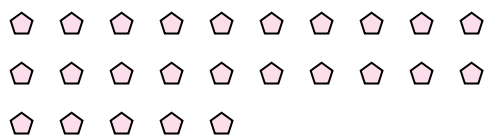
2) There are 10 shapes below. How many groups of 6 can you make with them? How many will you have left over?



3) There are 13 shapes below. How many groups of 5 can you make with them? How many will you have left over?



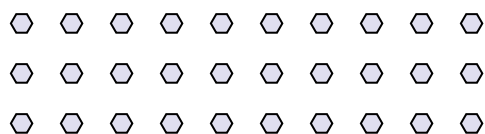
4) There are 25 shapes below. How many groups of 5 can you make with them? How many will you have left over?



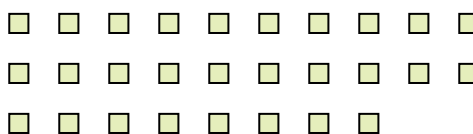
5) There are 13 shapes below. How many groups of 3 can you make with them? How many will you have left over?




6) There are 30 shapes below. How many groups of 4 can you make with them? How many will you have left over?



7) There are 28 shapes below. How many groups of 2 can you make with them? How many will you have left over?



8) There are 26 shapes below. How many groups of 6 can you make with them? How many will you have left over?



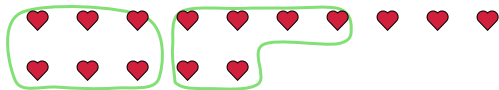
9) There are 20 shapes below. How many groups of 7 can you make with them? How many will you have left over?



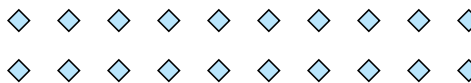


Use the shapes provided to answer the questions.

Ex) There are 15 shapes below. How many groups of 6 can you make with them? How many will you have left over?



1) There are 20 shapes below. How many groups of 8 can you make with them? How many will you have left over?



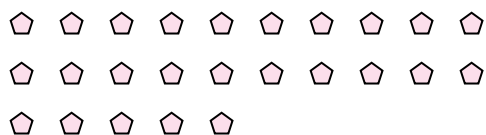
2) There are 10 shapes below. How many groups of 6 can you make with them? How many will you have left over?



3) There are 13 shapes below. How many groups of 5 can you make with them? How many will you have left over?



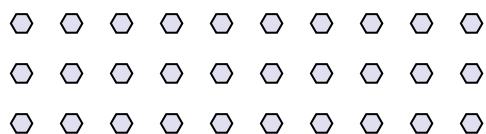
4) There are 25 shapes below. How many groups of 5 can you make with them? How many will you have left over?



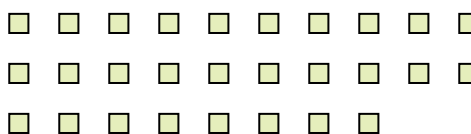
5) There are 13 shapes below. How many groups of 3 can you make with them? How many will you have left over?




6) There are 30 shapes below. How many groups of 4 can you make with them? How many will you have left over?



7) There are 28 shapes below. How many groups of 2 can you make with them? How many will you have left over?



8) There are 26 shapes below. How many groups of 6 can you make with them? How many will you have left over?



9) There are 20 shapes below. How many groups of 7 can you make with them? How many will you have left over?



**Answers**

Ex. 2 3

1. 2 4

2. 1 4

3. 2 3

4. 5 0

5. 4 1

6. 7 2

7. 14 0

8. 4 2

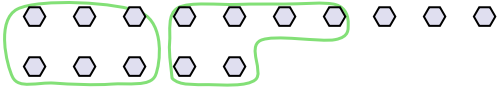
9. 2 6



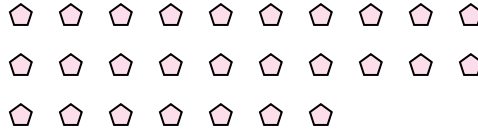
Use the shapes provided to answer the questions.

**Answers**

Ex) There are 15 shapes below. How many groups of 6 can you make with them? How many will you have left over?

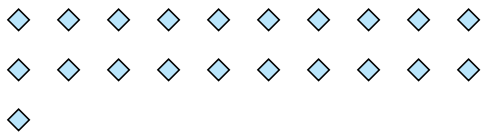


1) There are 27 shapes below. How many groups of 5 can you make with them? How many will you have left over?




Ex. 2 3

2) There are 21 shapes below. How many groups of 4 can you make with them? How many will you have left over?



3) There are 21 shapes below. How many groups of 2 can you make with them? How many will you have left over?



1. \_\_\_\_\_

2. \_\_\_\_\_

3. \_\_\_\_\_


4. \_\_\_\_\_

5. \_\_\_\_\_

6. \_\_\_\_\_

7. \_\_\_\_\_

4) There are 27 shapes below. How many groups of 4 can you make with them? How many will you have left over?



5) There are 12 shapes below. How many groups of 9 can you make with them? How many will you have left over?



8. \_\_\_\_\_

9. \_\_\_\_\_

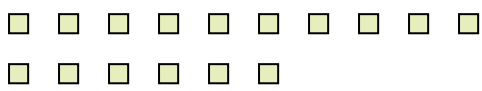
6) There are 17 shapes below. How many groups of 9 can you make with them? How many will you have left over?



7) There are 15 shapes below. How many groups of 6 can you make with them? How many will you have left over?



8) There are 16 shapes below. How many groups of 2 can you make with them? How many will you have left over?



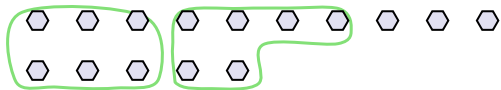
9) There are 26 shapes below. How many groups of 9 can you make with them? How many will you have left over?



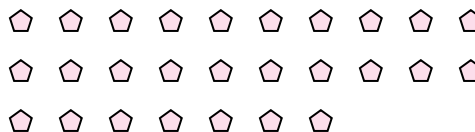


Use the shapes provided to answer the questions.

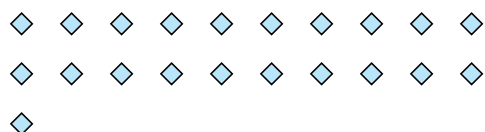
Ex) There are 15 shapes below. How many groups of 6 can you make with them? How many will you have left over?



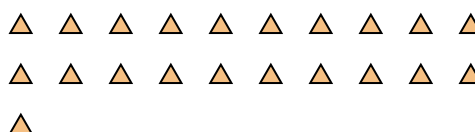
1) There are 27 shapes below. How many groups of 5 can you make with them? How many will you have left over?




2) There are 21 shapes below. How many groups of 4 can you make with them? How many will you have left over?



3) There are 21 shapes below. How many groups of 2 can you make with them? How many will you have left over?



4) There are 27 shapes below. How many groups of 4 can you make with them? How many will you have left over?



5) There are 12 shapes below. How many groups of 9 can you make with them? How many will you have left over?



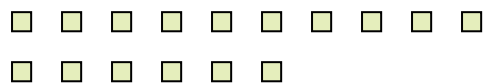
6) There are 17 shapes below. How many groups of 9 can you make with them? How many will you have left over?



7) There are 15 shapes below. How many groups of 6 can you make with them? How many will you have left over?



8) There are 16 shapes below. How many groups of 2 can you make with them? How many will you have left over?



9) There are 26 shapes below. How many groups of 9 can you make with them? How many will you have left over?



**Answers**

Ex. 2 3

1. 5 2

2. 5 1

3. 10 1

4. 6 3

5. 1 3

6. 1 8

7. 2 3

8. 8 0

9. 2 8

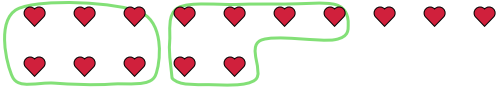




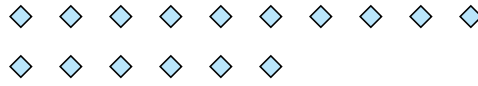
Use the shapes provided to answer the questions.

**Answers**

Ex) There are 15 shapes below. How many groups of 6 can you make with them? How many will you have left over?

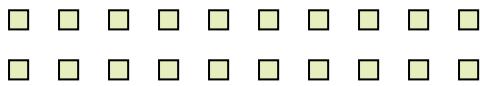


1) There are 16 shapes below. How many groups of 7 can you make with them? How many will you have left over?



Ex. 2 3

2) There are 20 shapes below. How many groups of 6 can you make with them? How many will you have left over?



3) There are 21 shapes below. How many groups of 4 can you make with them? How many will you have left over?



1. \_\_\_\_\_

2. \_\_\_\_\_

3. \_\_\_\_\_

4. \_\_\_\_\_

5. \_\_\_\_\_

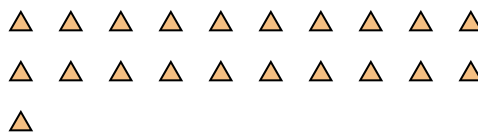
6. \_\_\_\_\_

7. \_\_\_\_\_

4) There are 11 shapes below. How many groups of 9 can you make with them? How many will you have left over?



5) There are 21 shapes below. How many groups of 6 can you make with them? How many will you have left over?



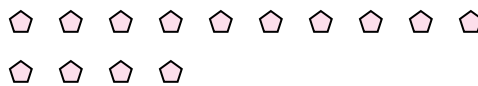
8. \_\_\_\_\_

9. \_\_\_\_\_

6) There are 12 shapes below. How many groups of 3 can you make with them? How many will you have left over?



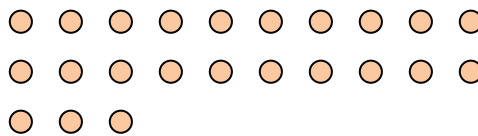
7) There are 14 shapes below. How many groups of 5 can you make with them? How many will you have left over?



8) There are 12 shapes below. How many groups of 7 can you make with them? How many will you have left over?



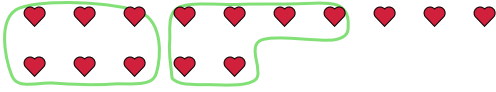
9) There are 23 shapes below. How many groups of 5 can you make with them? How many will you have left over?



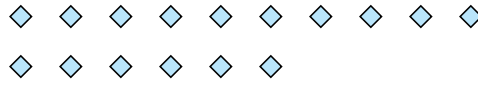


Use the shapes provided to answer the questions.

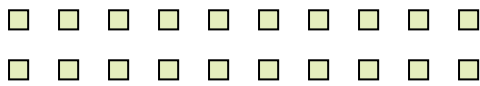
Ex) There are 15 shapes below. How many groups of 6 can you make with them? How many will you have left over?



1) There are 16 shapes below. How many groups of 7 can you make with them? How many will you have left over?



2) There are 20 shapes below. How many groups of 6 can you make with them? How many will you have left over?



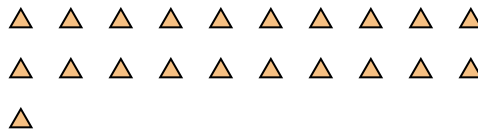
3) There are 21 shapes below. How many groups of 4 can you make with them? How many will you have left over?



4) There are 11 shapes below. How many groups of 9 can you make with them? How many will you have left over?



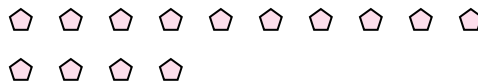
5) There are 21 shapes below. How many groups of 6 can you make with them? How many will you have left over?



6) There are 12 shapes below. How many groups of 3 can you make with them? How many will you have left over?



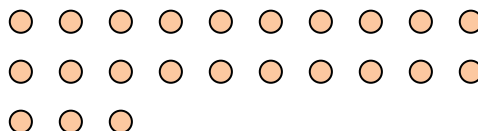
7) There are 14 shapes below. How many groups of 5 can you make with them? How many will you have left over?



8) There are 12 shapes below. How many groups of 7 can you make with them? How many will you have left over?



9) There are 23 shapes below. How many groups of 5 can you make with them? How many will you have left over?



Answers

Ex. 2 3

1. 2 2

2. 3 2

3. 5 1

4. 1 2

5. 3 3

6. 4 0

7. 2 4

8. 1 5

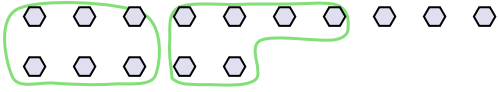
9. 4 3



Use the shapes provided to answer the questions.

**Answers**

Ex) There are 15 shapes below. How many groups of 6 can you make with them? How many will you have left over?

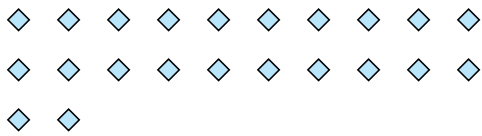


1) There are 14 shapes below. How many groups of 6 can you make with them? How many will you have left over?




Ex. 2 3

2) There are 22 shapes below. How many groups of 7 can you make with them? How many will you have left over?



3) There are 16 shapes below. How many groups of 4 can you make with them? How many will you have left over?



1. \_\_\_\_\_

2. \_\_\_\_\_

3. \_\_\_\_\_

4. \_\_\_\_\_

5. \_\_\_\_\_

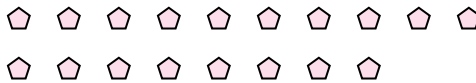
6. \_\_\_\_\_

7. \_\_\_\_\_

4) There are 18 shapes below. How many groups of 8 can you make with them? How many will you have left over?




5) There are 18 shapes below. How many groups of 4 can you make with them? How many will you have left over?



8. \_\_\_\_\_

9. \_\_\_\_\_


6) There are 13 shapes below. How many groups of 6 can you make with them? How many will you have left over?



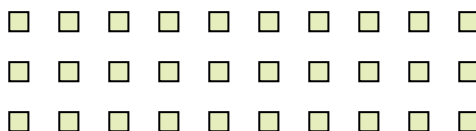
7) There are 17 shapes below. How many groups of 5 can you make with them? How many will you have left over?



8) There are 29 shapes below. How many groups of 9 can you make with them? How many will you have left over?



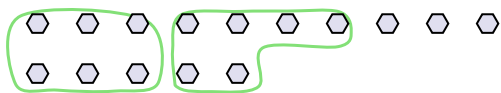
9) There are 30 shapes below. How many groups of 8 can you make with them? How many will you have left over?





Use the shapes provided to answer the questions.

Ex) There are 15 shapes below. How many groups of 6 can you make with them? How many will you have left over?



1) There are 14 shapes below. How many groups of 6 can you make with them? How many will you have left over?



**Answers**

Ex. 2 3

1. 2 2

2. 3 1

3. 4 0

4. 2 2

5. 4 2

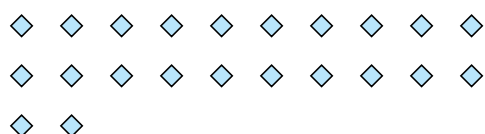
6. 2 1

7. 3 2

8. 3 2

9. 3 6

2) There are 22 shapes below. How many groups of 7 can you make with them? How many will you have left over?



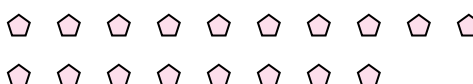
3) There are 16 shapes below. How many groups of 4 can you make with them? How many will you have left over?



4) There are 18 shapes below. How many groups of 8 can you make with them? How many will you have left over?



5) There are 18 shapes below. How many groups of 4 can you make with them? How many will you have left over?




6) There are 13 shapes below. How many groups of 6 can you make with them? How many will you have left over?



7) There are 17 shapes below. How many groups of 5 can you make with them? How many will you have left over?



8) There are 29 shapes below. How many groups of 9 can you make with them? How many will you have left over?



9) There are 30 shapes below. How many groups of 8 can you make with them? How many will you have left over?

