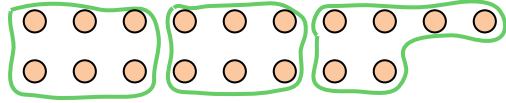




Use the shapes provided to answer the questions.

Answers

Ex) How many groups of 6 can you make with the 18 shapes below?



1) How many groups of 7 can you make with the 14 shapes below?



Ex. 3

1. _____

2. _____

3. _____

4. _____

5. _____

6. _____

7. _____

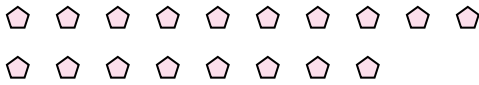
8. _____

9. _____

10. _____

11. _____


2) How many groups of 9 can you make with the 18 shapes below?




3) How many groups of 6 can you make with the 12 shapes below?



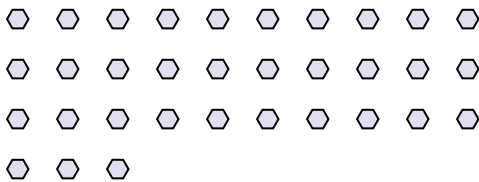
4) How many groups of 9 can you make with the 18 shapes below?



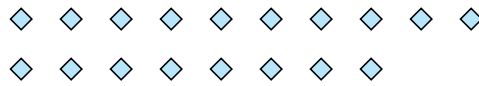
5) How many groups of 6 can you make with the 36 shapes below?



6) How many groups of 3 can you make with the 33 shapes below?



7) How many groups of 9 can you make with the 18 shapes below?



8) How many groups of 6 can you make with the 12 shapes below?



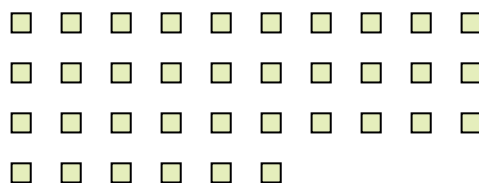
9) How many groups of 3 can you make with the 18 shapes below?



10) How many groups of 3 can you make with the 15 shapes below?



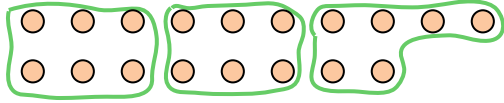
11) How many groups of 3 can you make with the 36 shapes below?





Use the shapes provided to answer the questions.

Ex) How many groups of 6 can you make with the 18 shapes below?



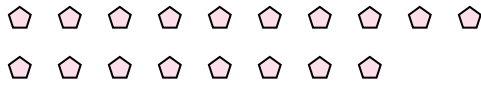
1) How many groups of 7 can you make with the 14 shapes below?



Answers

Ex. 3

2) How many groups of 9 can you make with the 18 shapes below?



3) How many groups of 6 can you make with the 12 shapes below?




1. 2

2. 2


3. 2

4. 2

4) How many groups of 9 can you make with the 18 shapes below?



5) How many groups of 6 can you make with the 36 shapes below?



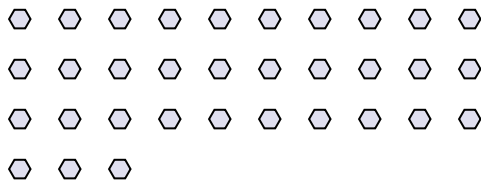
5. 6

6. 11

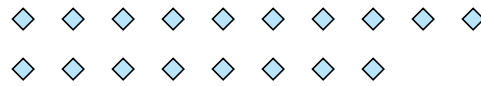
7. 2

8. 2

6) How many groups of 3 can you make with the 33 shapes below?



7) How many groups of 9 can you make with the 18 shapes below?



9. 6

10. 5

11. 12

8) How many groups of 6 can you make with the 12 shapes below?



9) How many groups of 3 can you make with the 18 shapes below?



10) How many groups of 3 can you make with the 15 shapes below?



11) How many groups of 3 can you make with the 36 shapes below?

