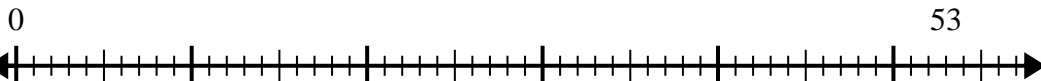


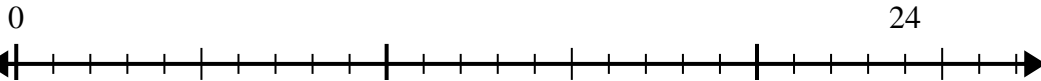


Use the number line to solve the division problem.

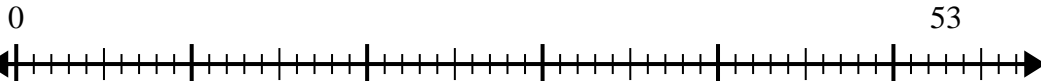
1) $53 \div 8 =$



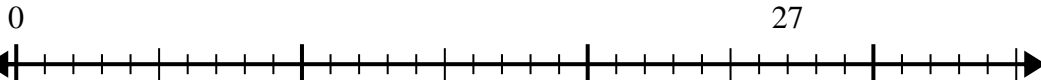
2) $24 \div 5 =$



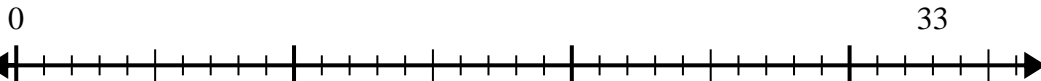
3) $53 \div 6 =$



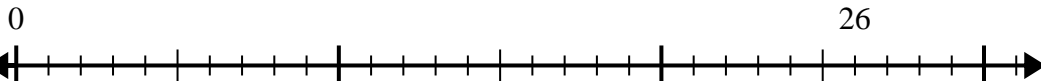
4) $27 \div 6 =$



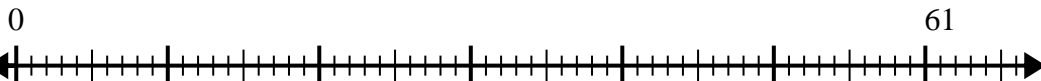
5) $33 \div 4 =$



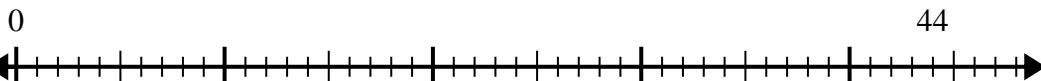
6) $26 \div 8 =$



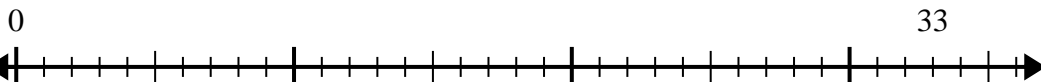
7) $61 \div 7 =$



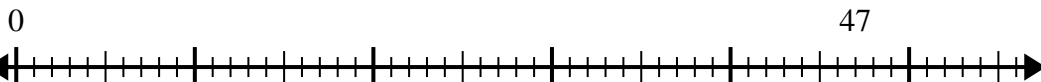
8) $44 \div 5 =$



9) $33 \div 7 =$



10) $47 \div 6 =$



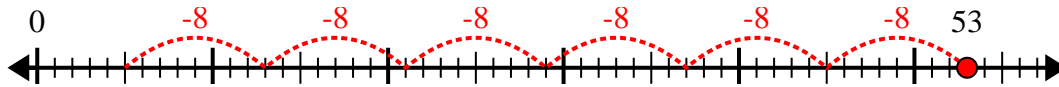
Answers

1. _____
2. _____
3. _____
4. _____
5. _____
6. _____
7. _____
8. _____
9. _____
10. _____

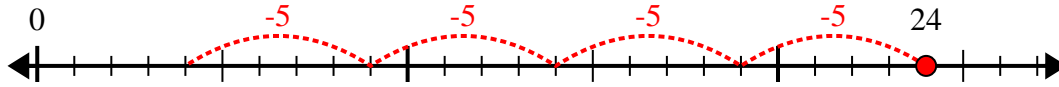


Use the number line to solve the division problem.

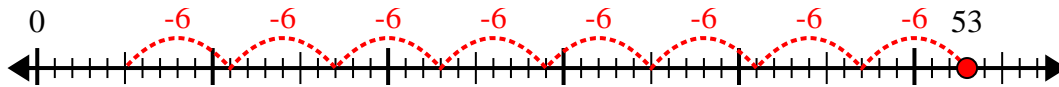
1) $53 \div 8 =$



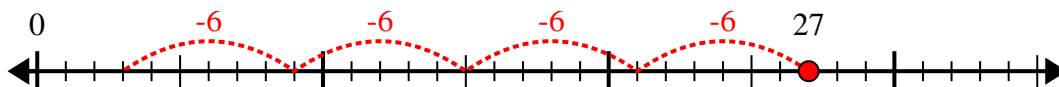
2) $24 \div 5 =$



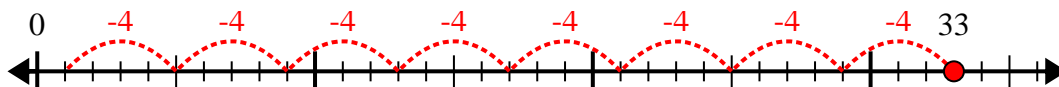
3) $53 \div 6 =$



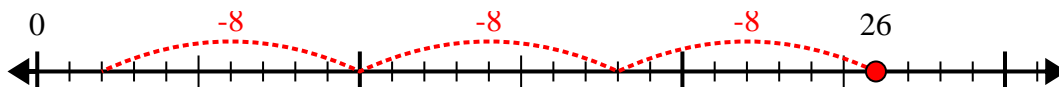
4) $27 \div 6 =$



5) $33 \div 4 =$



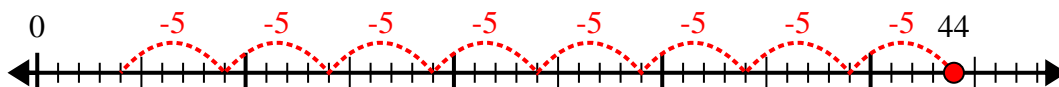
6) $26 \div 8 =$



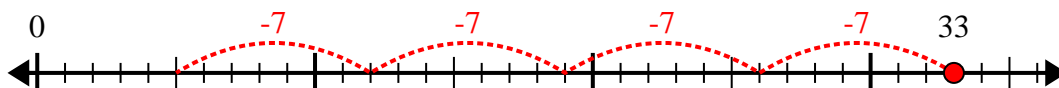
7) $61 \div 7 =$



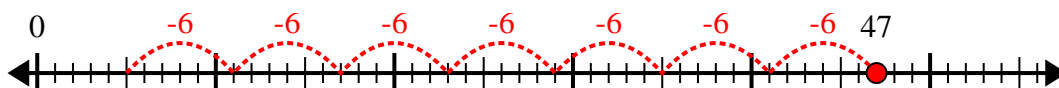
8) $44 \div 5 =$



9) $33 \div 7 =$



10) $47 \div 6 =$



Answers

1. 6r5

2. 4r4

3. 8r5

4. 4r3

5. 8r1

6. 3r2

7. 8r5

8. 8r4

9. 4r5

10. 7r5