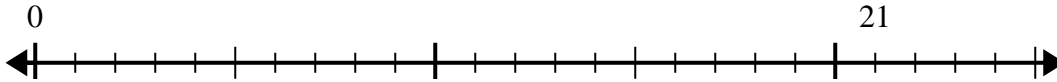


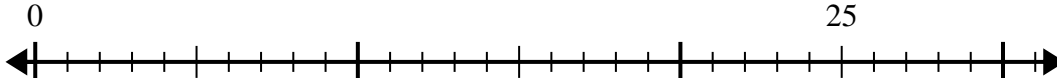


Use the number line to solve the division problem.

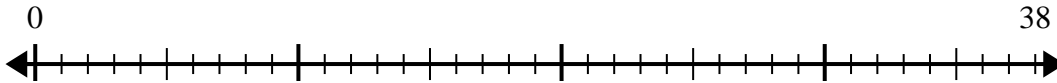
1)  $21 \div 5 =$   
0



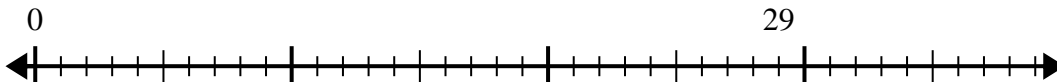
2)  $25 \div 6 =$   
0



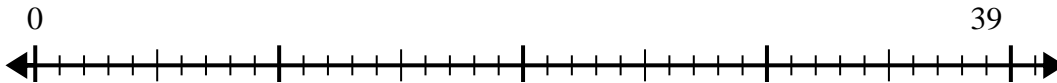
3)  $38 \div 8 =$   
0



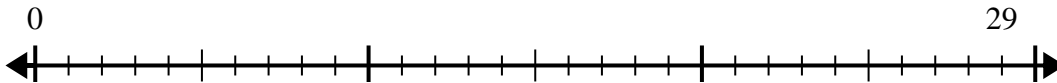
4)  $29 \div 7 =$   
0



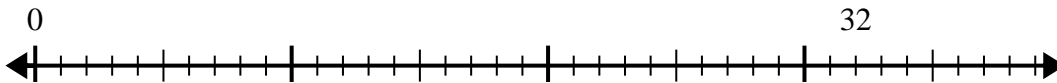
5)  $39 \div 5 =$   
0



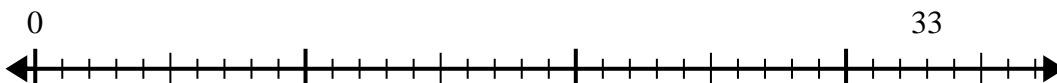
6)  $29 \div 4 =$   
0



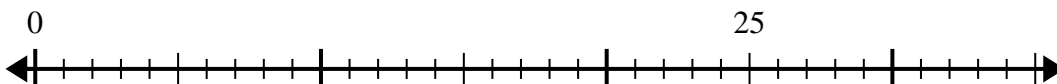
7)  $32 \div 6 =$   
0



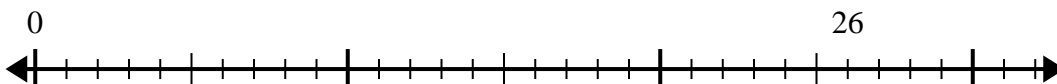
8)  $33 \div 4 =$   
0



9)  $25 \div 4 =$   
0



10)  $26 \div 7 =$   
0



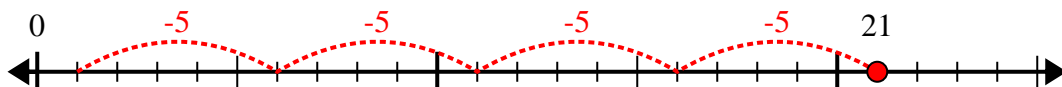
Answers

1. \_\_\_\_\_
2. \_\_\_\_\_
3. \_\_\_\_\_
4. \_\_\_\_\_
5. \_\_\_\_\_
6. \_\_\_\_\_
7. \_\_\_\_\_
8. \_\_\_\_\_
9. \_\_\_\_\_
10. \_\_\_\_\_

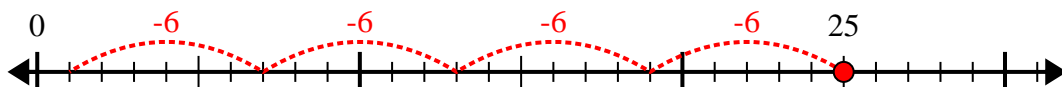


Use the number line to solve the division problem.

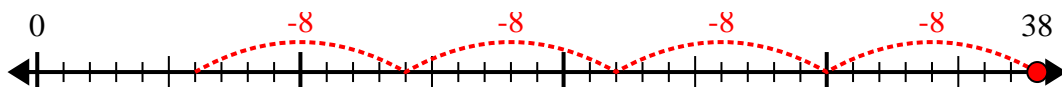
1)  $21 \div 5 =$



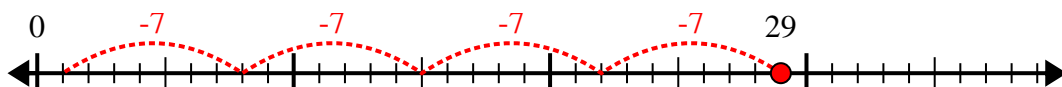
2)  $25 \div 6 =$



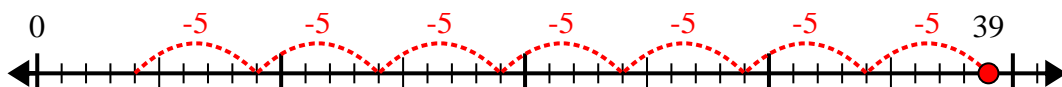
3)  $38 \div 8 =$



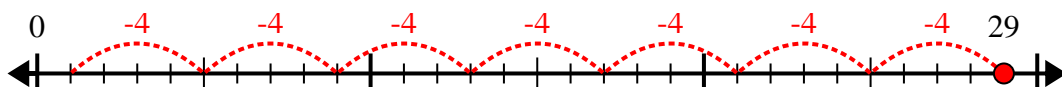
4)  $29 \div 7 =$



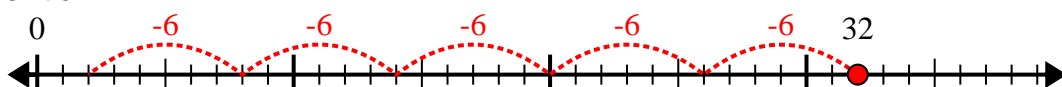
5)  $39 \div 5 =$



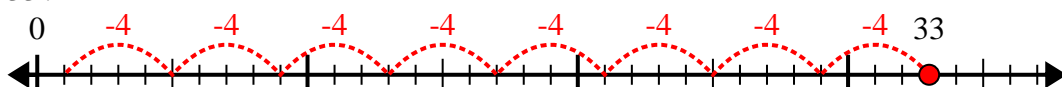
6)  $29 \div 4 =$



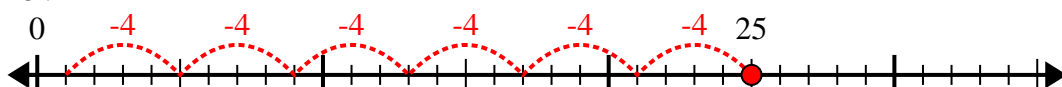
7)  $32 \div 6 =$



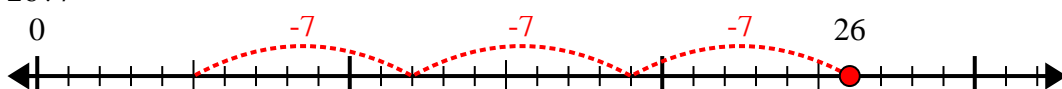
8)  $33 \div 4 =$



9)  $25 \div 4 =$



10)  $26 \div 7 =$



Answers

1. 4r1

2. 4r1

3. 4r6

4. 4r1

5. 7r4

6. 7r1

7. 5r2

8. 8r1

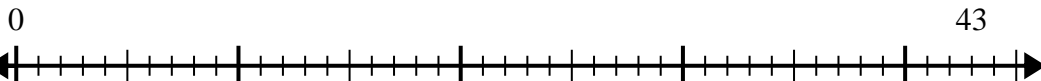
9. 6r1

10. 3r5

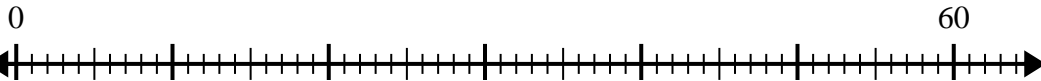


Use the number line to solve the division problem.

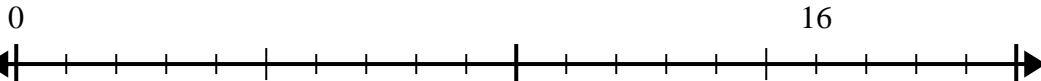
1)  $43 \div 5 =$



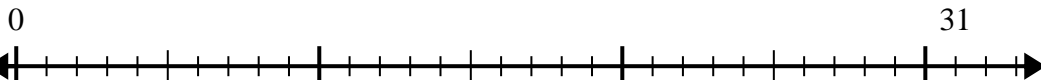
2)  $60 \div 7 =$



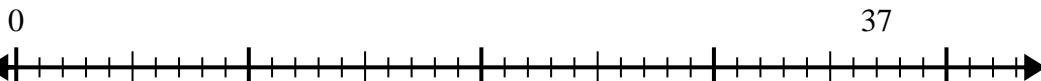
3)  $16 \div 5 =$



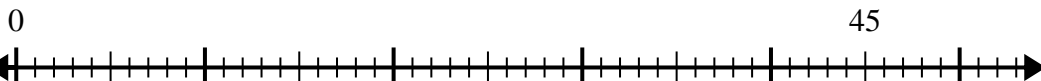
4)  $31 \div 4 =$



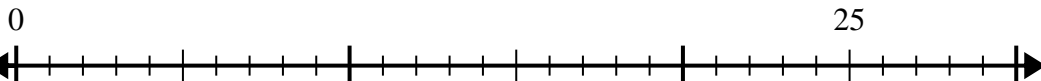
5)  $37 \div 7 =$



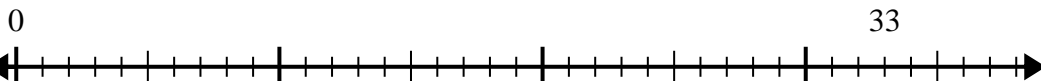
6)  $45 \div 8 =$



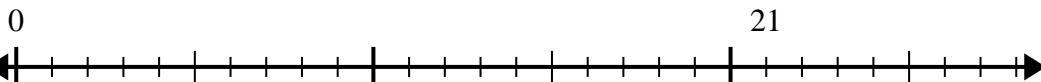
7)  $25 \div 4 =$



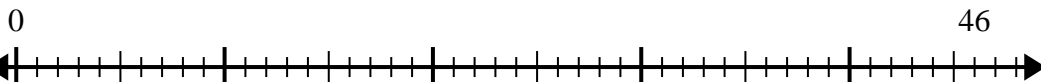
8)  $33 \div 5 =$



9)  $21 \div 4 =$



10)  $46 \div 6 =$



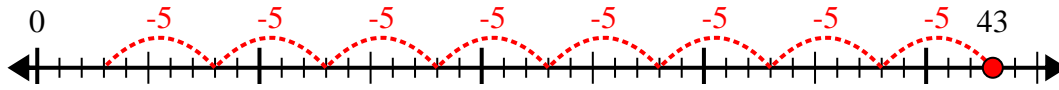
Answers

1. \_\_\_\_\_
2. \_\_\_\_\_
3. \_\_\_\_\_
4. \_\_\_\_\_
5. \_\_\_\_\_
6. \_\_\_\_\_
7. \_\_\_\_\_
8. \_\_\_\_\_
9. \_\_\_\_\_
10. \_\_\_\_\_

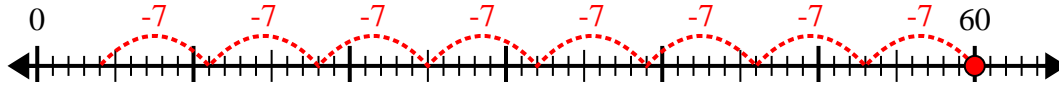


Use the number line to solve the division problem.

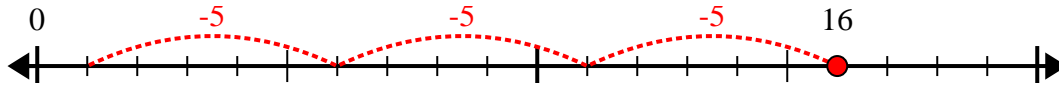
1)  $43 \div 5 =$



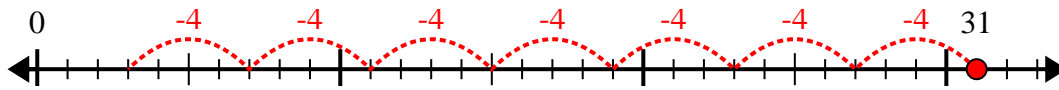
2)  $60 \div 7 =$



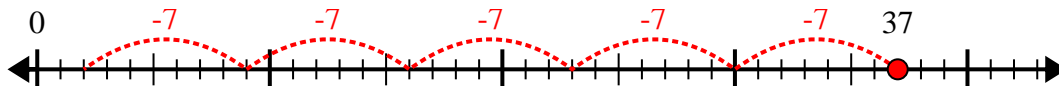
3)  $16 \div 5 =$



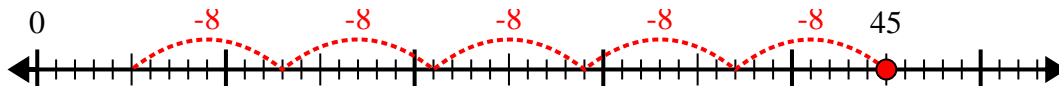
4)  $31 \div 4 =$



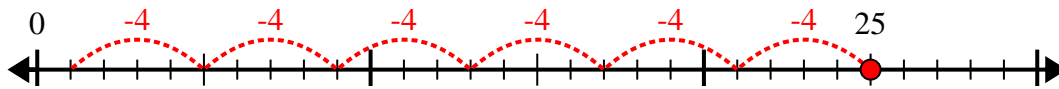
5)  $37 \div 7 =$



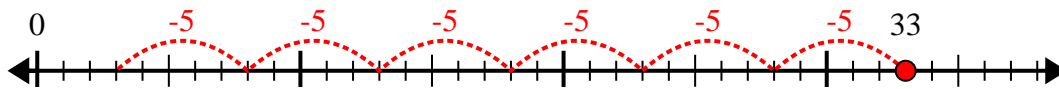
6)  $45 \div 8 =$



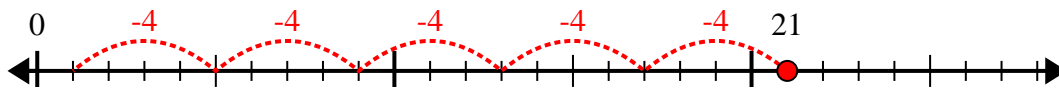
7)  $25 \div 4 =$



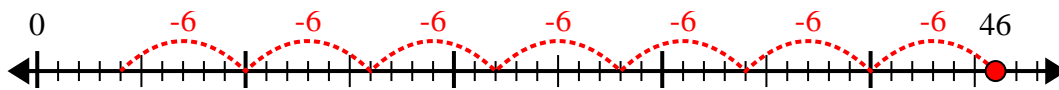
8)  $33 \div 5 =$



9)  $21 \div 4 =$



10)  $46 \div 6 =$



Answers

1. 8r3

2. 8r4

3. 3r1

4. 7r3

5. 5r2

6. 5r5

7. 6r1

8. 6r3

9. 5r1

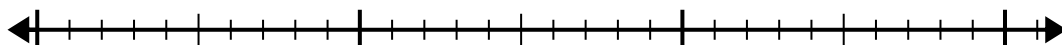
10. 7r4



Use the number line to solve the division problem.

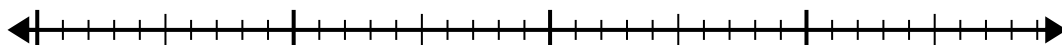
1)  $23 \div 5 =$

0 23



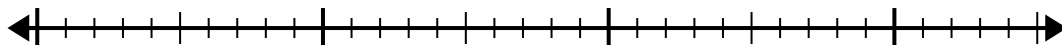
2)  $30 \div 4 =$

0 30



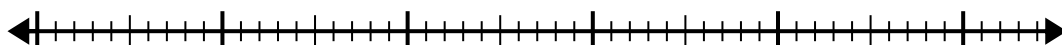
3)  $33 \div 6 =$

0 33



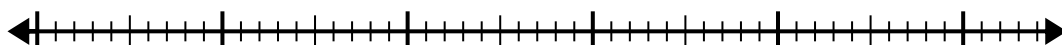
4)  $44 \div 6 =$

0 44



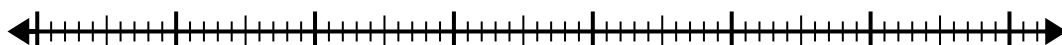
5)  $50 \div 6 =$

0 50



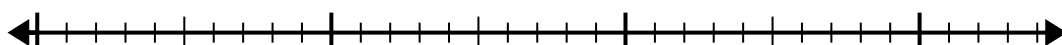
6)  $62 \div 8 =$

0 62



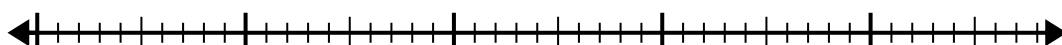
7)  $26 \div 6 =$

0 26



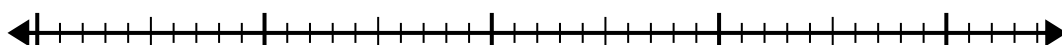
8)  $43 \div 8 =$

0 43



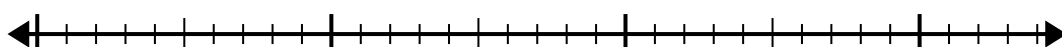
9)  $44 \div 7 =$

0 44



10)  $34 \div 4 =$

0 34



Answers

1. \_\_\_\_\_

2. \_\_\_\_\_

3. \_\_\_\_\_

4. \_\_\_\_\_

5. \_\_\_\_\_

6. \_\_\_\_\_

7. \_\_\_\_\_

8. \_\_\_\_\_

9. \_\_\_\_\_

10. \_\_\_\_\_

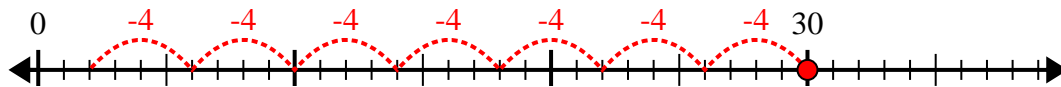


Use the number line to solve the division problem.

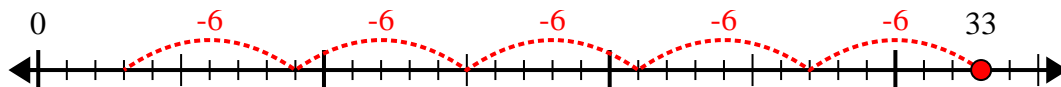
1)  $23 \div 5 =$



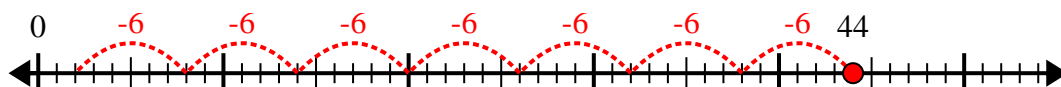
2)  $30 \div 4 =$



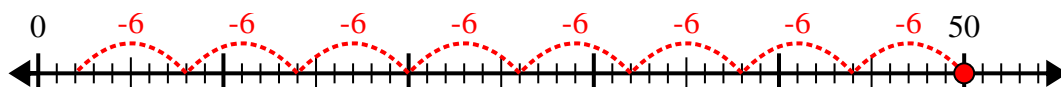
3)  $33 \div 6 =$



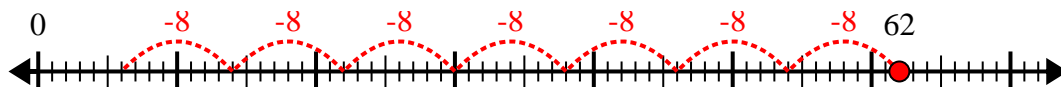
4)  $44 \div 6 =$



5)  $50 \div 6 =$



6)  $62 \div 8 =$



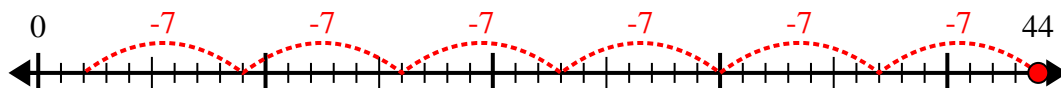
7)  $26 \div 6 =$



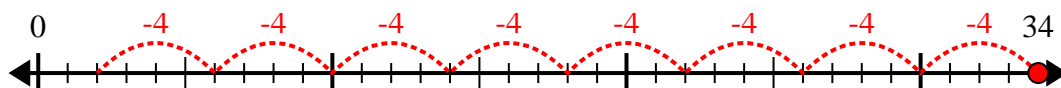
8)  $43 \div 8 =$



9)  $44 \div 7 =$



10)  $34 \div 4 =$



Answers

1. 4r3

2. 7r2

3. 5r3

4. 7r2

5. 8r2

6. 7r6

7. 4r2

8. 5r3

9. 6r2

10. 8r2

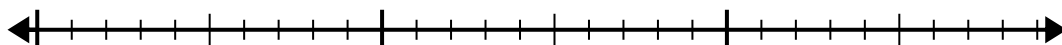


Use the number line to solve the division problem.

1)  $25 \div 6 =$

0

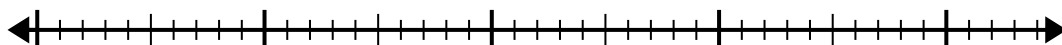
25



2)  $38 \div 7 =$

0

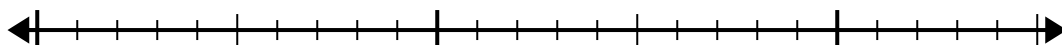
38



3)  $20 \div 6 =$

0

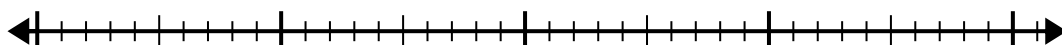
20



4)  $35 \div 6 =$

0

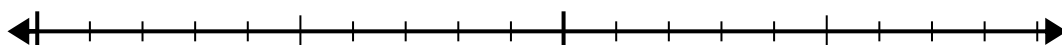
35



5)  $18 \div 5 =$

0

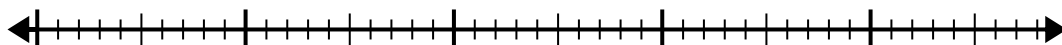
18



6)  $46 \div 6 =$

0

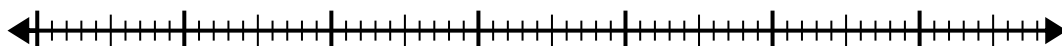
46



7)  $60 \div 8 =$

0

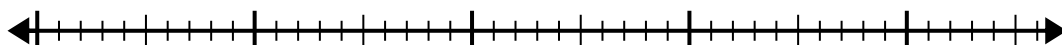
60



8)  $45 \div 7 =$

0

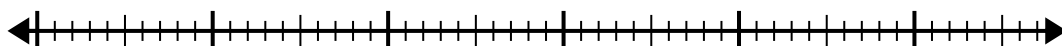
45



9)  $53 \div 8 =$

0

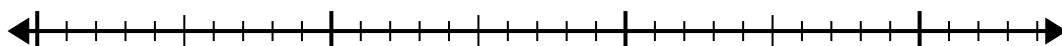
53



10)  $29 \div 4 =$

0

29



Answers

1. \_\_\_\_\_

2. \_\_\_\_\_

3. \_\_\_\_\_

4. \_\_\_\_\_

5. \_\_\_\_\_

6. \_\_\_\_\_

7. \_\_\_\_\_

8. \_\_\_\_\_

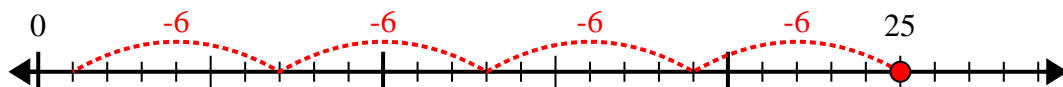
9. \_\_\_\_\_

10. \_\_\_\_\_

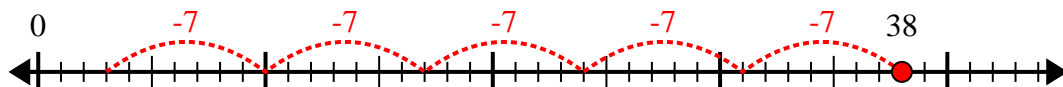


Use the number line to solve the division problem.

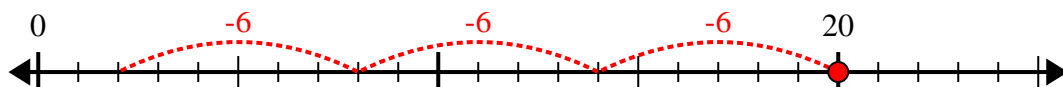
1)  $25 \div 6 =$



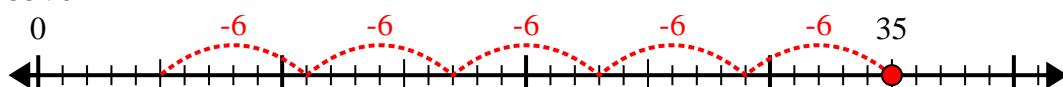
2)  $38 \div 7 =$



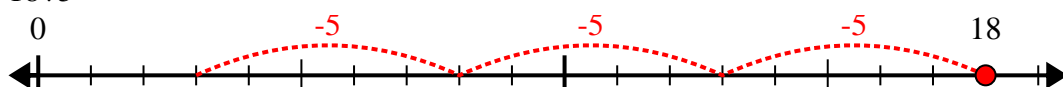
3)  $20 \div 6 =$



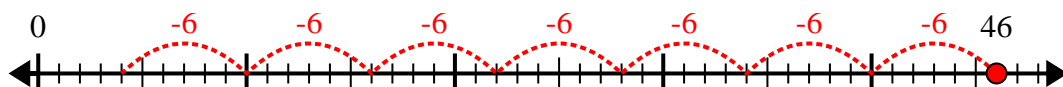
4)  $35 \div 6 =$



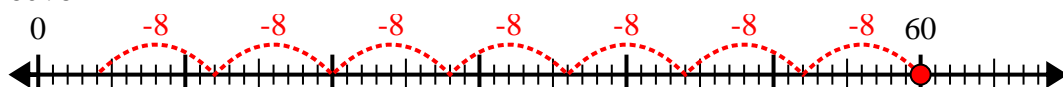
5)  $18 \div 5 =$



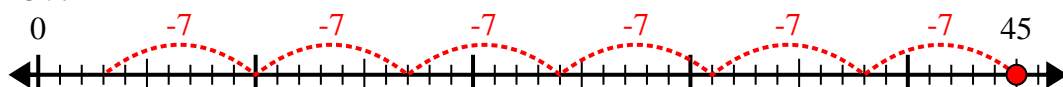
6)  $46 \div 6 =$



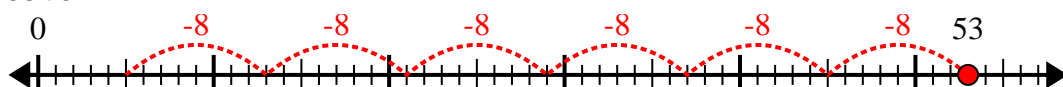
7)  $60 \div 8 =$



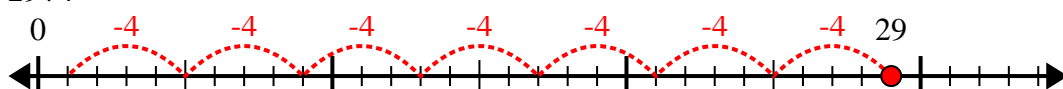
8)  $45 \div 7 =$



9)  $53 \div 8 =$



10)  $29 \div 4 =$



Answers

1. 4r1

2. 5r3

3. 3r2

4. 5r5

5. 3r3

6. 7r4

7. 7r4

8. 6r3

9. 6r5

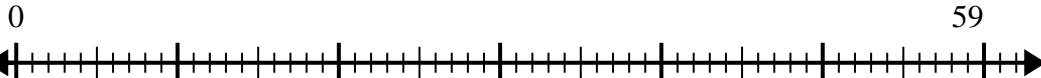
10. 7r1



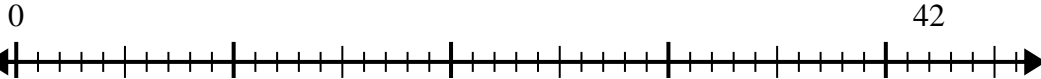


Use the number line to solve the division problem.

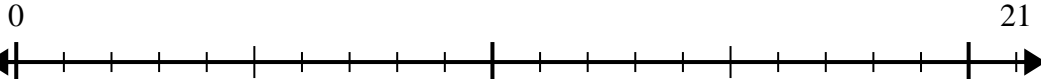
1)  $59 \div 7 =$



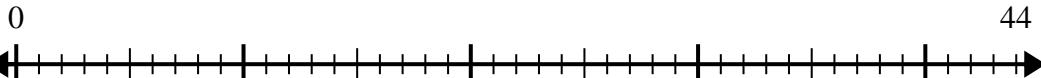
2)  $42 \div 5 =$



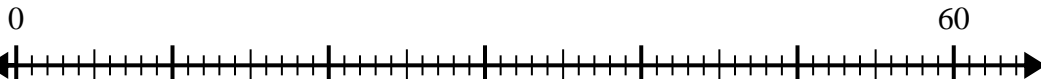
3)  $21 \div 4 =$



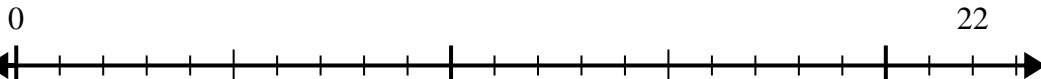
4)  $44 \div 7 =$



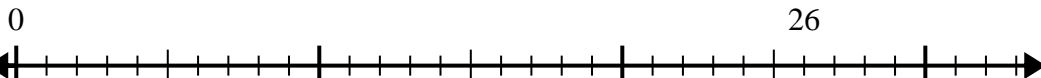
5)  $60 \div 8 =$



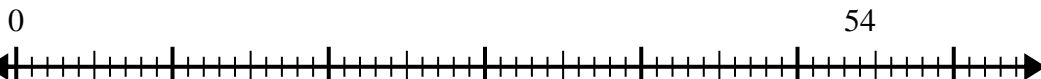
6)  $22 \div 5 =$



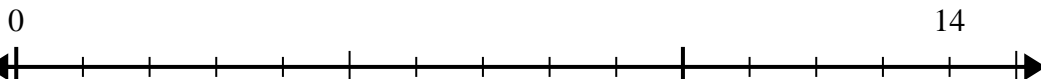
7)  $26 \div 4 =$



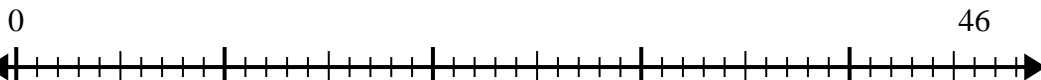
8)  $54 \div 8 =$



9)  $14 \div 4 =$



10)  $46 \div 6 =$



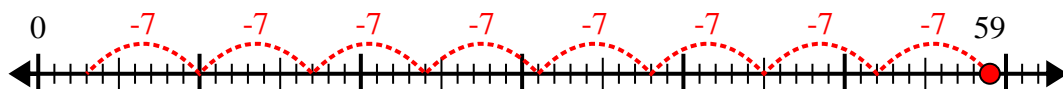
Answers

1. \_\_\_\_\_
2. \_\_\_\_\_
3. \_\_\_\_\_
4. \_\_\_\_\_
5. \_\_\_\_\_
6. \_\_\_\_\_
7. \_\_\_\_\_
8. \_\_\_\_\_
9. \_\_\_\_\_
10. \_\_\_\_\_

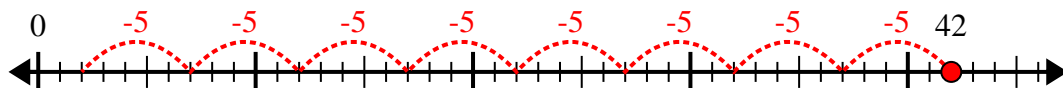


Use the number line to solve the division problem.

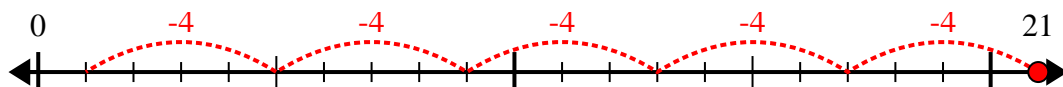
1)  $59 \div 7 =$



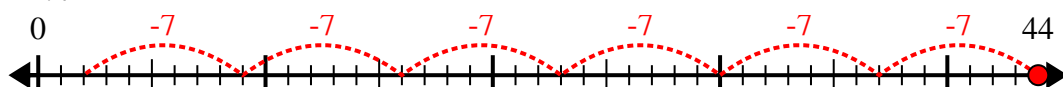
2)  $42 \div 5 =$



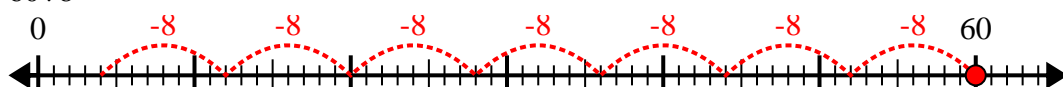
3)  $21 \div 4 =$



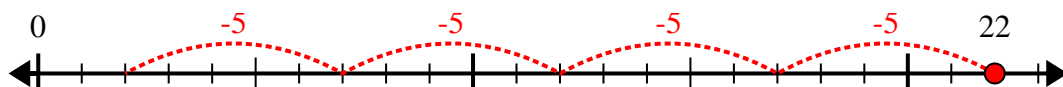
4)  $44 \div 7 =$



5)  $60 \div 8 =$



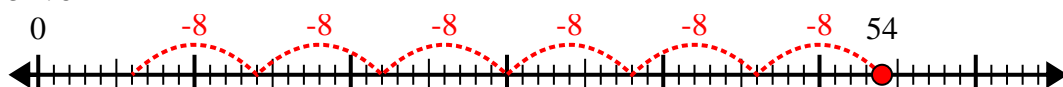
6)  $22 \div 5 =$



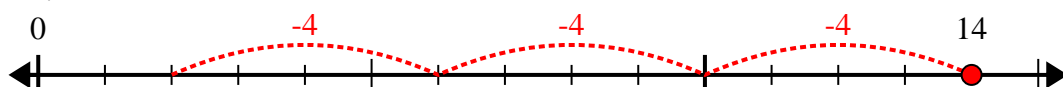
7)  $26 \div 4 =$



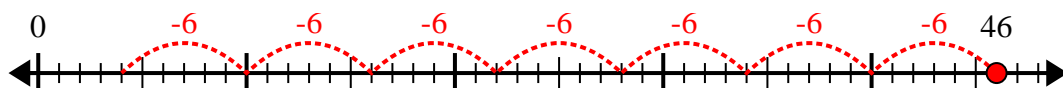
8)  $54 \div 8 =$



9)  $14 \div 4 =$



10)  $46 \div 6 =$



Answers

1. 8r3

2. 8r2

3. 5r1

4. 6r2

5. 7r4

6. 4r2

7. 6r2

8. 6r6

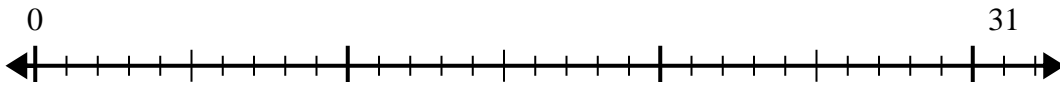
9. 3r2

10. 7r4

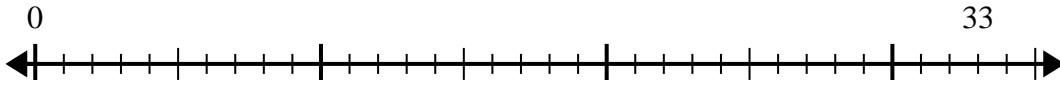


Use the number line to solve the division problem.

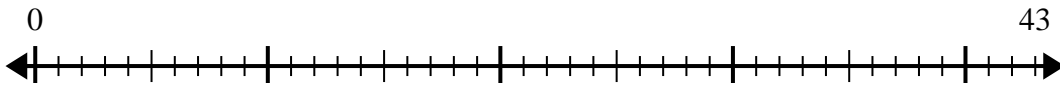
1)  $31 \div 6 =$



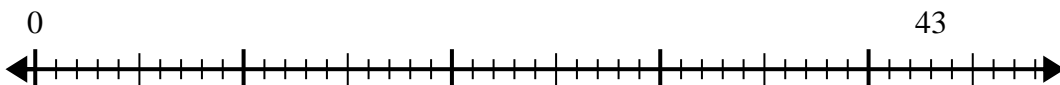
2)  $33 \div 4 =$



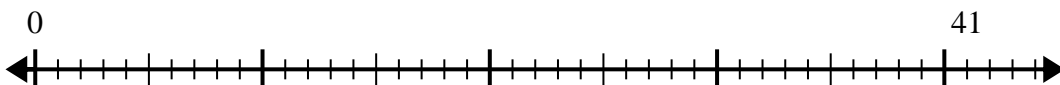
3)  $43 \div 7 =$



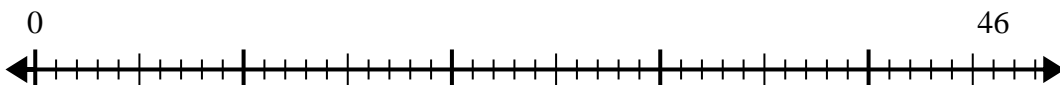
4)  $43 \div 5 =$



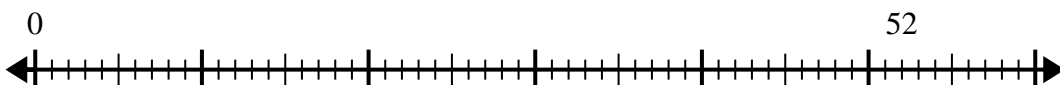
5)  $41 \div 8 =$



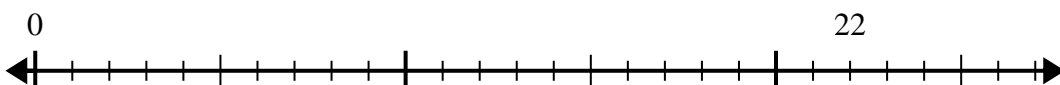
6)  $46 \div 6 =$



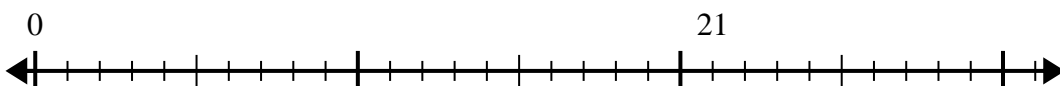
7)  $52 \div 6 =$



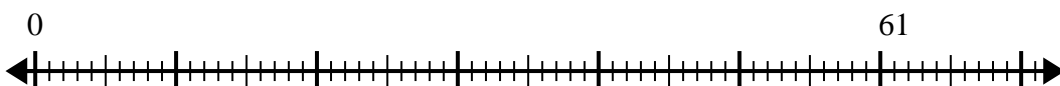
8)  $22 \div 4 =$



9)  $21 \div 5 =$



10)  $61 \div 8 =$



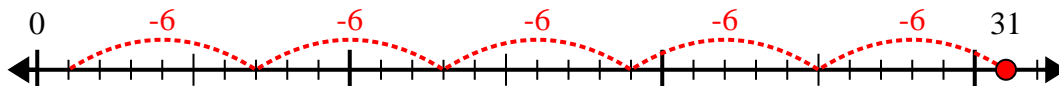
Answers

1. \_\_\_\_\_
2. \_\_\_\_\_
3. \_\_\_\_\_
4. \_\_\_\_\_
5. \_\_\_\_\_
6. \_\_\_\_\_
7. \_\_\_\_\_
8. \_\_\_\_\_
9. \_\_\_\_\_
10. \_\_\_\_\_

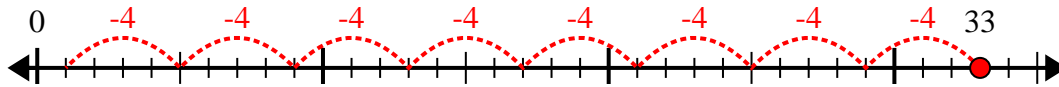


Use the number line to solve the division problem.

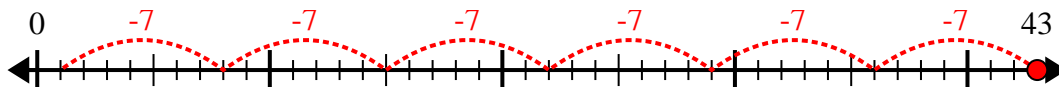
1)  $31 \div 6 =$



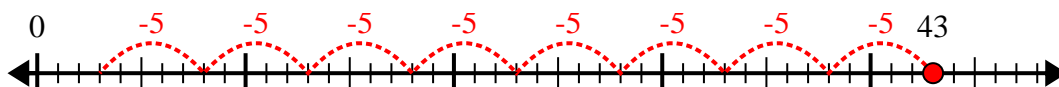
2)  $33 \div 4 =$



3)  $43 \div 7 =$



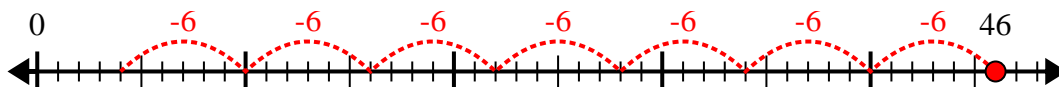
4)  $43 \div 5 =$



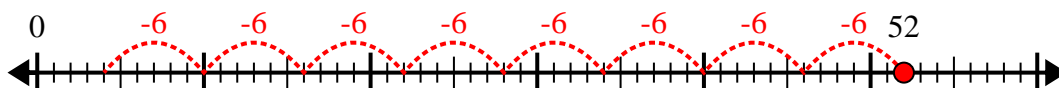
5)  $41 \div 8 =$



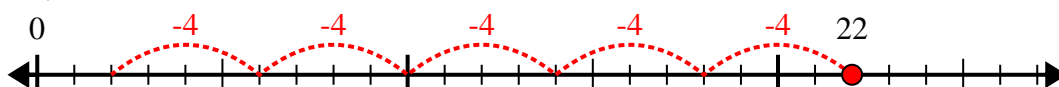
6)  $46 \div 6 =$



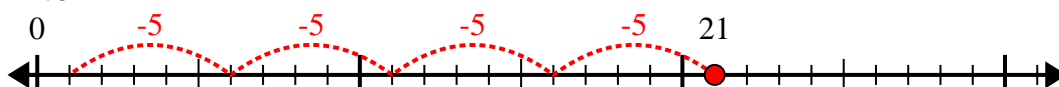
7)  $52 \div 6 =$



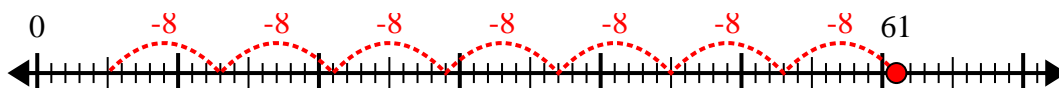
8)  $22 \div 4 =$



9)  $21 \div 5 =$



10)  $61 \div 8 =$



Answers

1. 5r1

2. 8r1

3. 6r1

4. 8r3

5. 5r1

6. 7r4

7. 8r4

8. 5r2

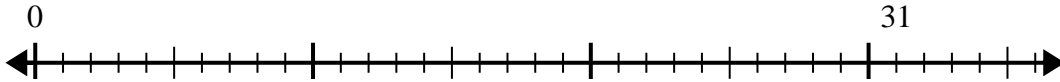
9. 4r1

10. 7r5

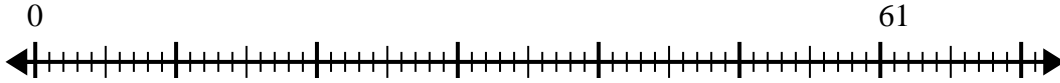


Use the number line to solve the division problem.

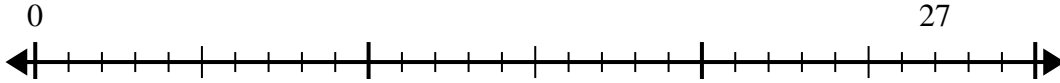
1)  $31 \div 8 =$   
0



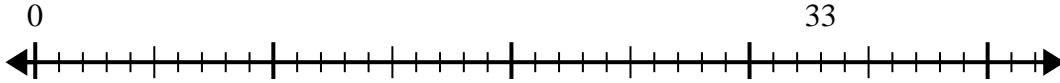
2)  $61 \div 8 =$   
0



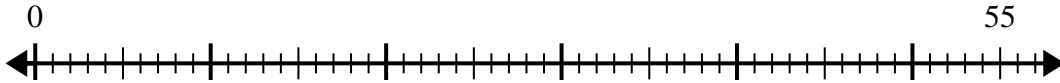
3)  $27 \div 4 =$   
0



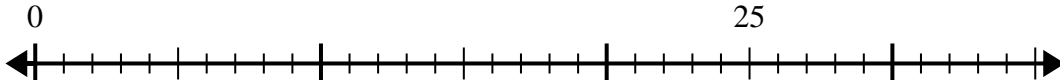
4)  $33 \div 4 =$   
0



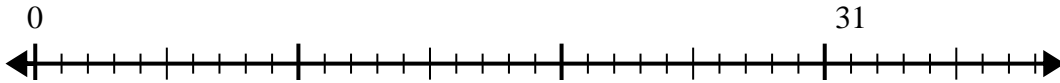
5)  $55 \div 8 =$   
0



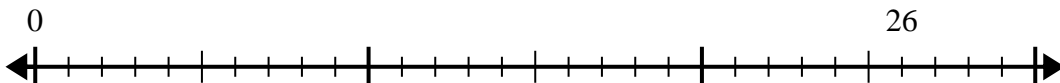
6)  $25 \div 6 =$   
0



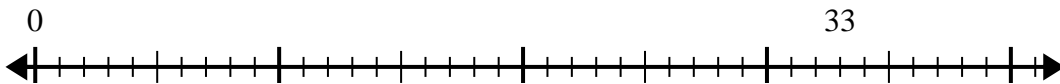
7)  $31 \div 4 =$   
0



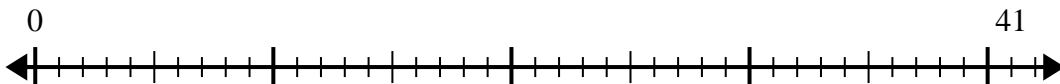
8)  $26 \div 7 =$   
0



9)  $33 \div 7 =$   
0



10)  $41 \div 5 =$   
0



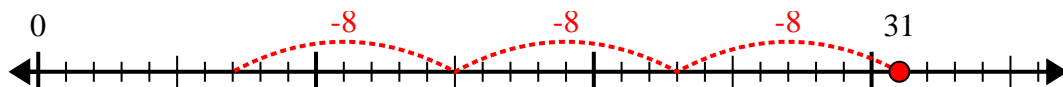
Answers

- 1. \_\_\_\_\_
- 2. \_\_\_\_\_
- 3. \_\_\_\_\_
- 4. \_\_\_\_\_
- 5. \_\_\_\_\_
- 6. \_\_\_\_\_
- 7. \_\_\_\_\_
- 8. \_\_\_\_\_
- 9. \_\_\_\_\_
- 10. \_\_\_\_\_

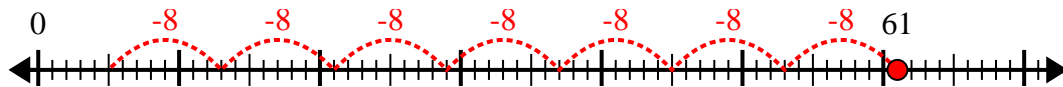


Use the number line to solve the division problem.

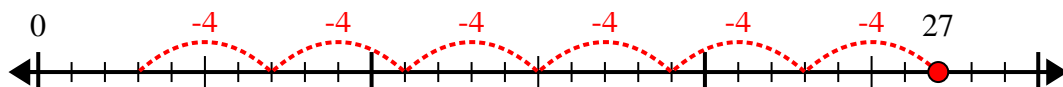
1)  $31 \div 8 =$



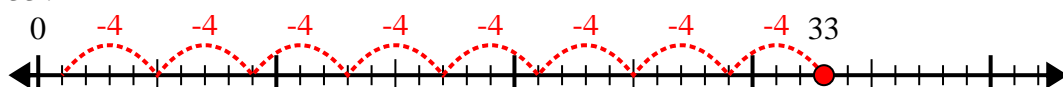
2)  $61 \div 8 =$



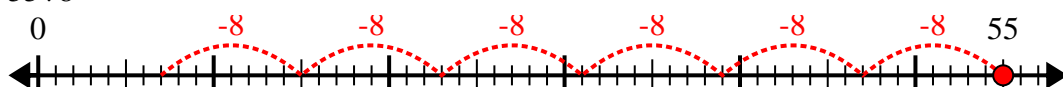
3)  $27 \div 4 =$



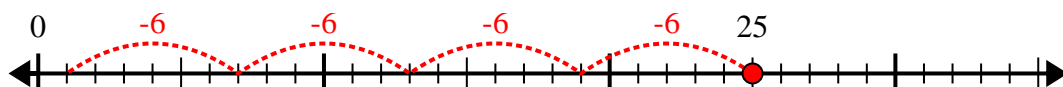
4)  $33 \div 4 =$



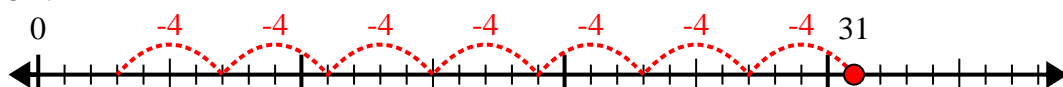
5)  $55 \div 8 =$



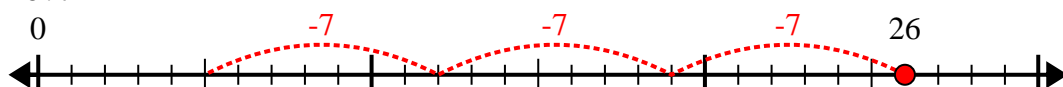
6)  $25 \div 6 =$



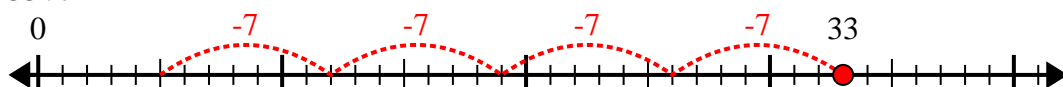
7)  $31 \div 4 =$



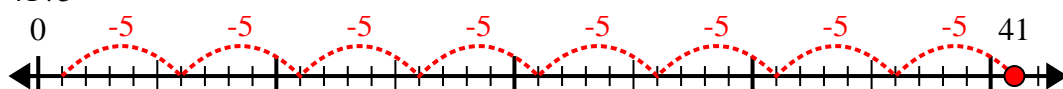
8)  $26 \div 7 =$



9)  $33 \div 7 =$



10)  $41 \div 5 =$



Answers

1. 3r7

2. 7r5

3. 6r3

4. 8r1

5. 6r7

6. 4r1

7. 7r3

8. 3r5

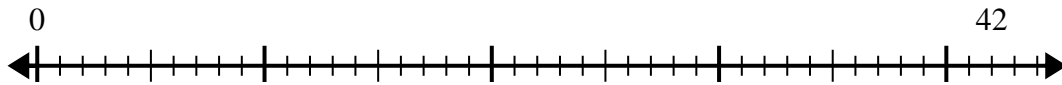
9. 4r5

10. 8r1

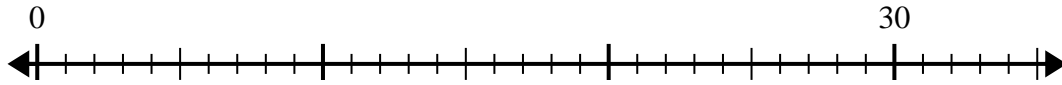


Use the number line to solve the division problem.

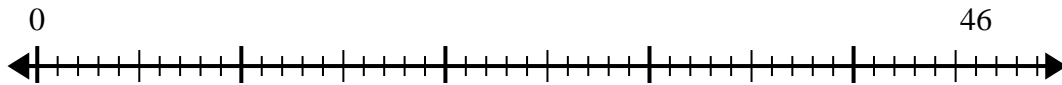
1)  $42 \div 5 =$



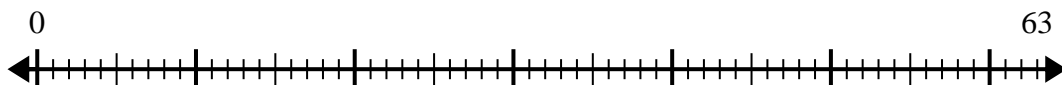
2)  $30 \div 4 =$



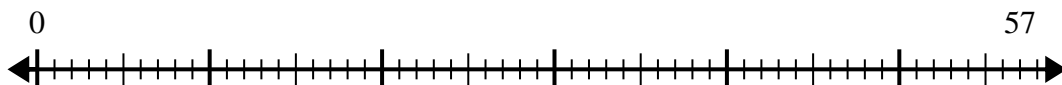
3)  $46 \div 6 =$



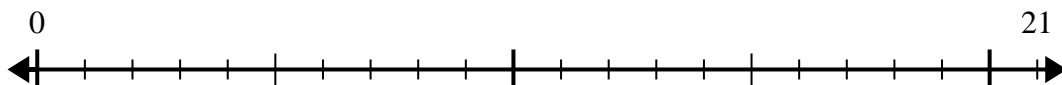
4)  $63 \div 8 =$



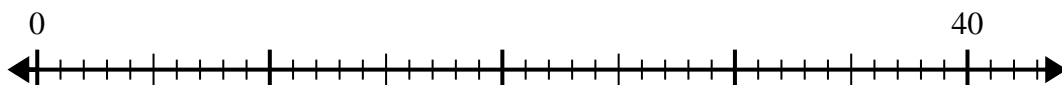
5)  $57 \div 7 =$



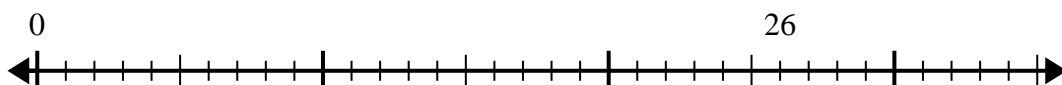
6)  $21 \div 5 =$



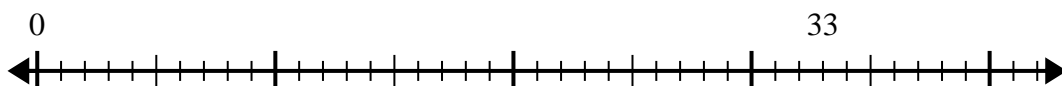
7)  $40 \div 7 =$



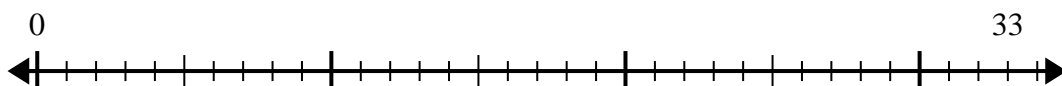
8)  $26 \div 8 =$



9)  $33 \div 5 =$



10)  $33 \div 4 =$



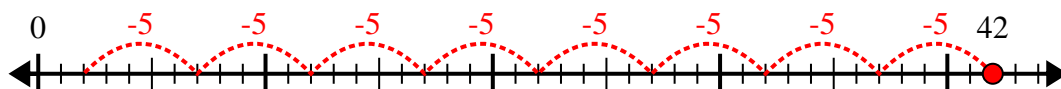
Answers

- 1. \_\_\_\_\_
- 2. \_\_\_\_\_
- 3. \_\_\_\_\_
- 4. \_\_\_\_\_
- 5. \_\_\_\_\_
- 6. \_\_\_\_\_
- 7. \_\_\_\_\_
- 8. \_\_\_\_\_
- 9. \_\_\_\_\_
- 10. \_\_\_\_\_

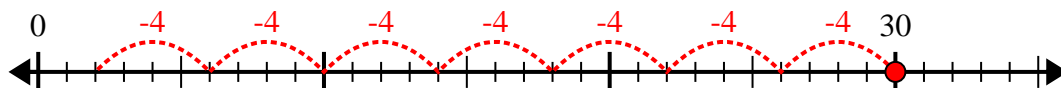


Use the number line to solve the division problem.

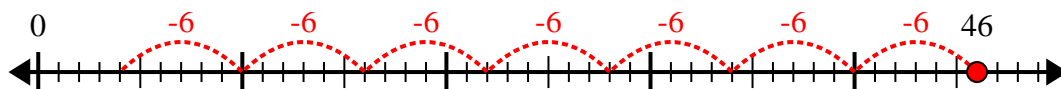
1)  $42 \div 5 =$



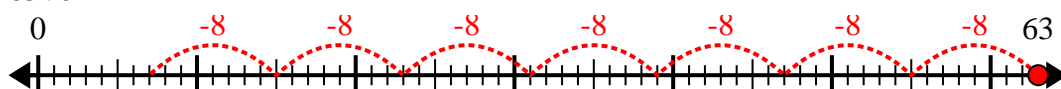
2)  $30 \div 4 =$



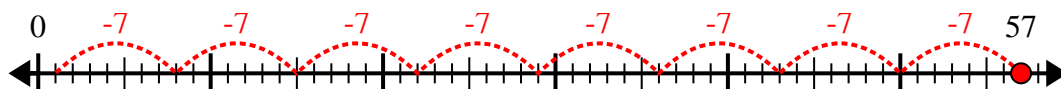
3)  $46 \div 6 =$



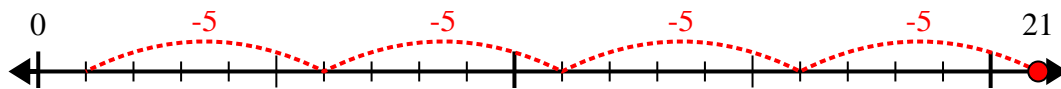
4)  $63 \div 8 =$



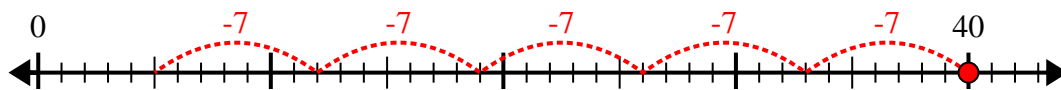
5)  $57 \div 7 =$



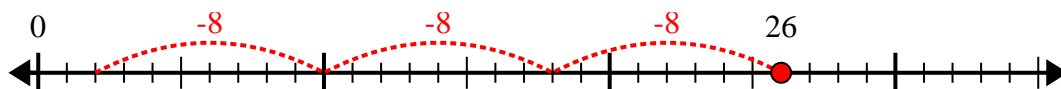
6)  $21 \div 5 =$



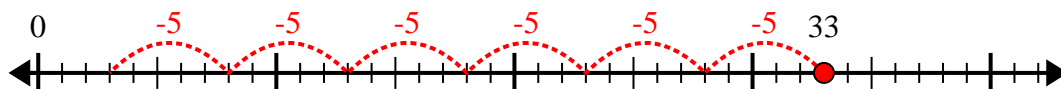
7)  $40 \div 7 =$



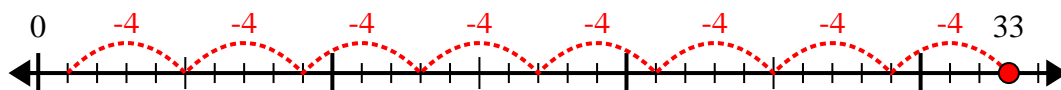
8)  $26 \div 8 =$



9)  $33 \div 5 =$



10)  $33 \div 4 =$



Answers

1. 8r2

2. 7r2

3. 7r4

4. 7r7

5. 8r1

6. 4r1

7. 5r5

8. 3r2

9. 6r3

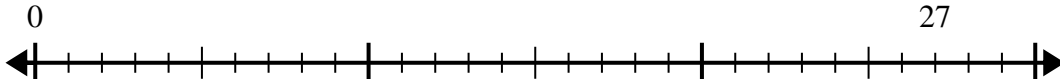
10. 8r1



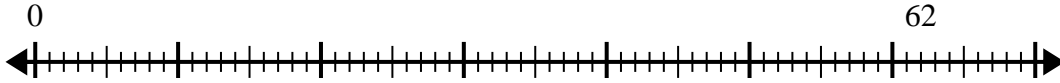


Use the number line to solve the division problem.

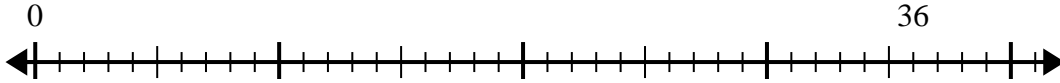
1)  $27 \div 4 =$   
0



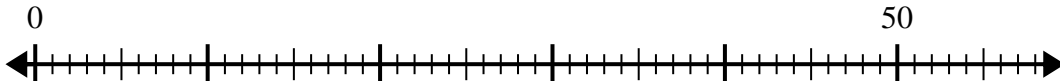
2)  $62 \div 8 =$   
0



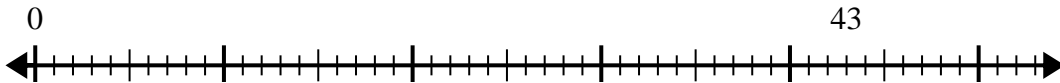
3)  $36 \div 5 =$   
0



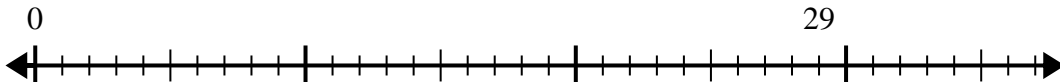
4)  $50 \div 8 =$   
0



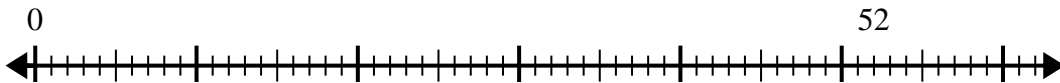
5)  $43 \div 6 =$   
0



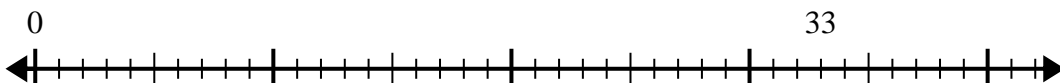
6)  $29 \div 6 =$   
0



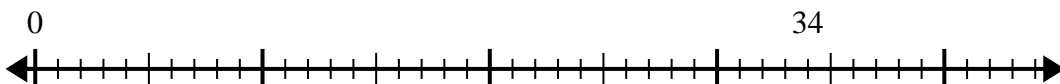
7)  $52 \div 6 =$   
0



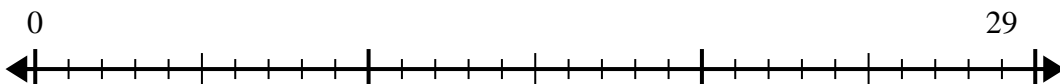
8)  $33 \div 5 =$   
0



9)  $34 \div 7 =$   
0



10)  $29 \div 4 =$   
0



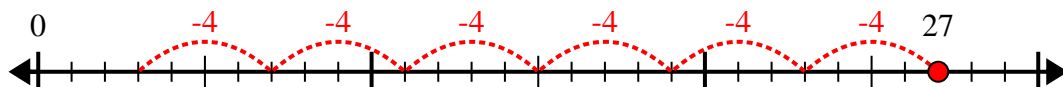
Answers

1. \_\_\_\_\_
2. \_\_\_\_\_
3. \_\_\_\_\_
4. \_\_\_\_\_
5. \_\_\_\_\_
6. \_\_\_\_\_
7. \_\_\_\_\_
8. \_\_\_\_\_
9. \_\_\_\_\_
10. \_\_\_\_\_

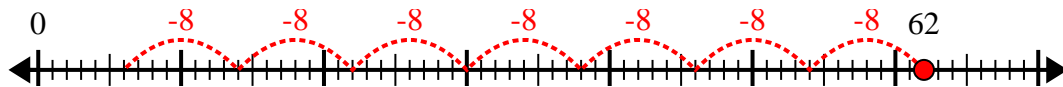


Use the number line to solve the division problem.

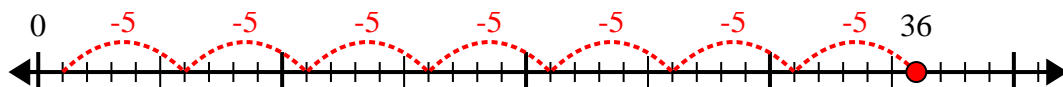
1)  $27 \div 4 =$



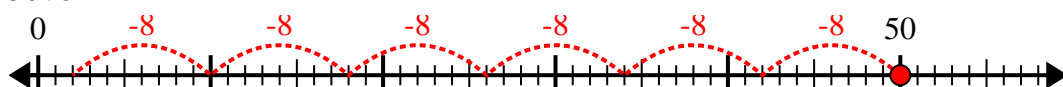
2)  $62 \div 8 =$



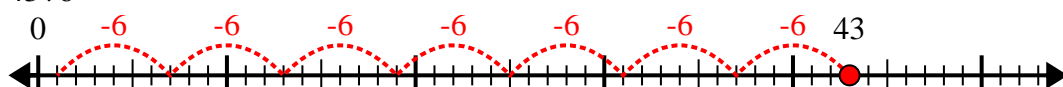
3)  $36 \div 5 =$



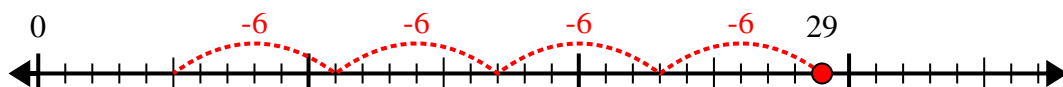
4)  $50 \div 8 =$



5)  $43 \div 6 =$



6)  $29 \div 6 =$



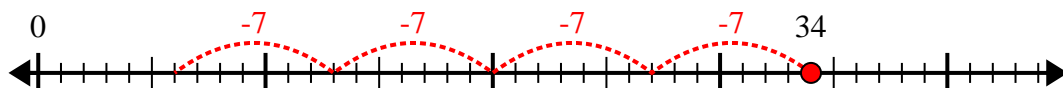
7)  $52 \div 6 =$



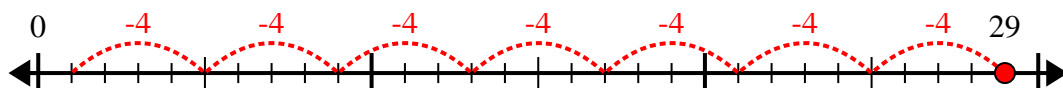
8)  $33 \div 5 =$



9)  $34 \div 7 =$



10)  $29 \div 4 =$



Answers

1. 6r3

2. 7r6

3. 7r1

4. 6r2

5. 7r1

6. 4r5

7. 8r4

8. 6r3

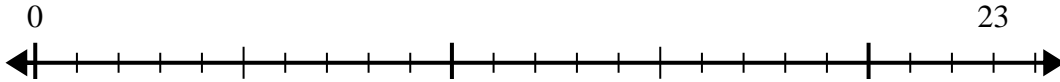
9. 4r6

10. 7r1

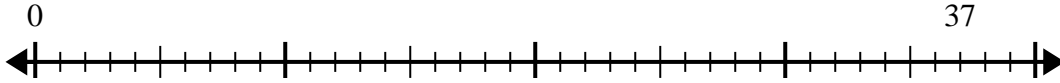


Use the number line to solve the division problem.

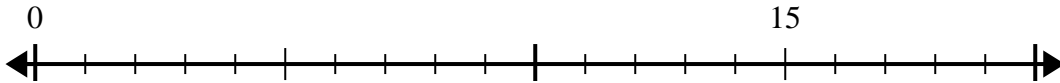
1)  $23 \div 4 =$   
0



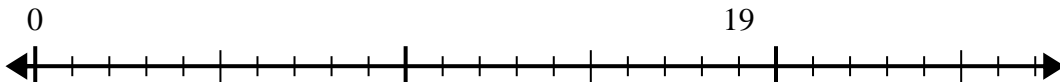
2)  $37 \div 8 =$   
0



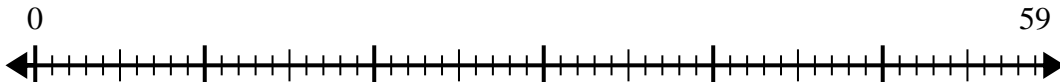
3)  $15 \div 4 =$   
0



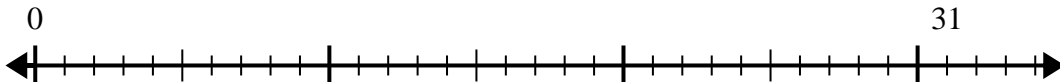
4)  $19 \div 6 =$   
0



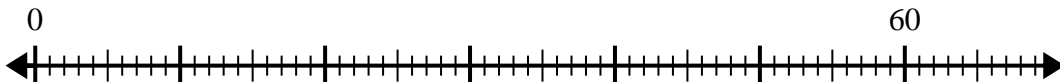
5)  $59 \div 8 =$   
0



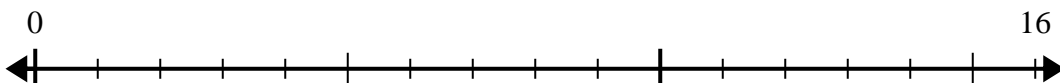
6)  $31 \div 8 =$   
0



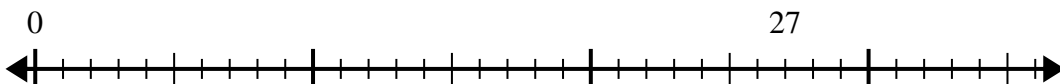
7)  $60 \div 7 =$   
0



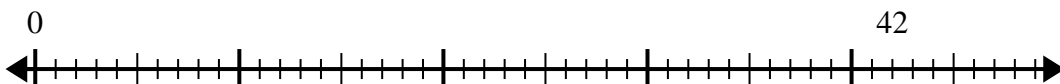
8)  $16 \div 5 =$   
0



9)  $27 \div 4 =$   
0



10)  $42 \div 5 =$   
0



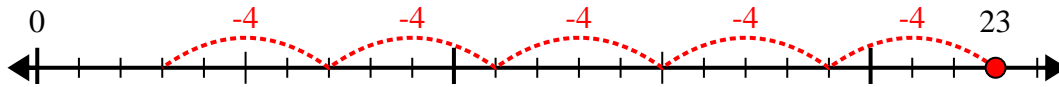
Answers

1. \_\_\_\_\_
2. \_\_\_\_\_
3. \_\_\_\_\_
4. \_\_\_\_\_
5. \_\_\_\_\_
6. \_\_\_\_\_
7. \_\_\_\_\_
8. \_\_\_\_\_
9. \_\_\_\_\_
10. \_\_\_\_\_

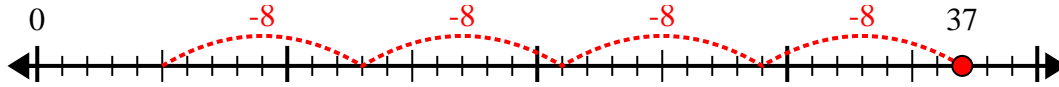


Use the number line to solve the division problem.

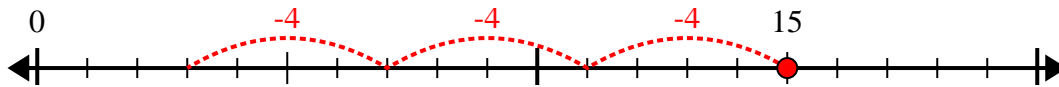
1)  $23 \div 4 =$



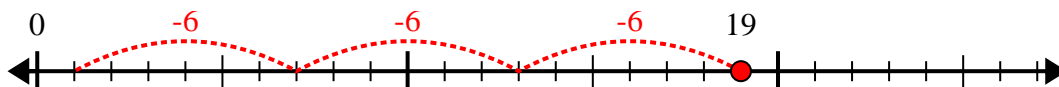
2)  $37 \div 8 =$



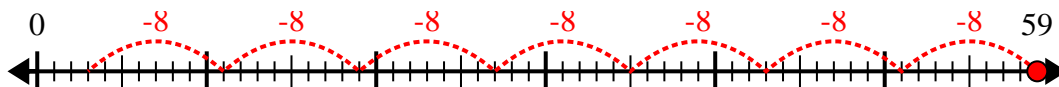
3)  $15 \div 4 =$



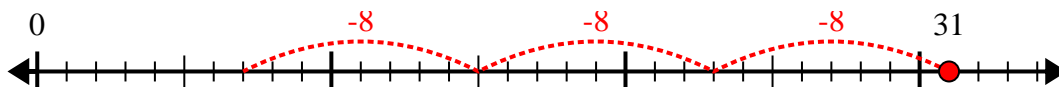
4)  $19 \div 6 =$



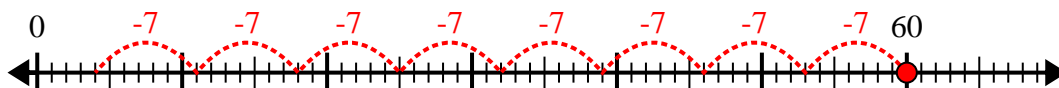
5)  $59 \div 8 =$



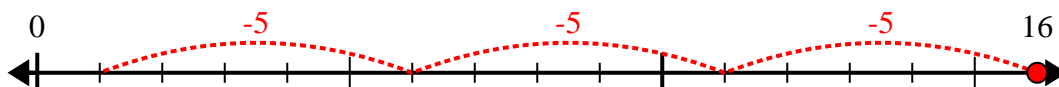
6)  $31 \div 8 =$



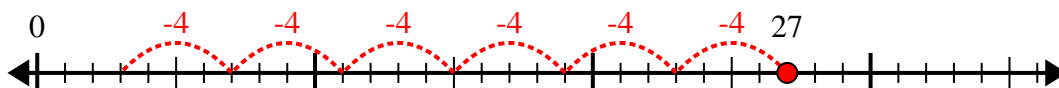
7)  $60 \div 7 =$



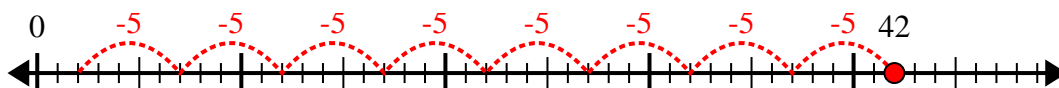
8)  $16 \div 5 =$



9)  $27 \div 4 =$



10)  $42 \div 5 =$



Answers

1. 5r3

2. 4r5

3. 3r3

4. 3r1

5. 7r3

6. 3r7

7. 8r4

8. 3r1

9. 6r3

10. 8r2