

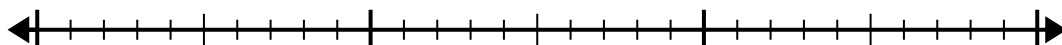


Use the number line to solve the division problem.

1) $27 \div 4 =$

0

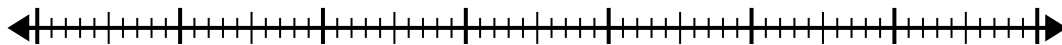
27



2) $62 \div 8 =$

0

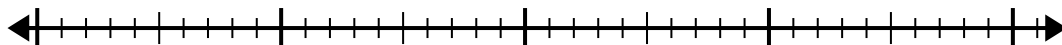
62



3) $36 \div 5 =$

0

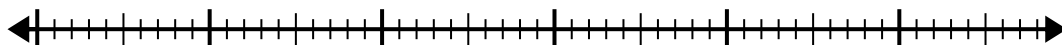
36



4) $50 \div 8 =$

0

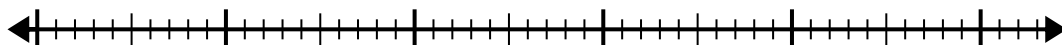
50



5) $43 \div 6 =$

0

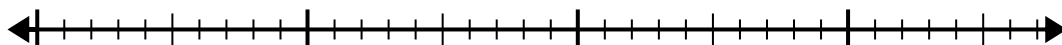
43



6) $29 \div 6 =$

0

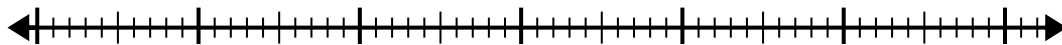
29



7) $52 \div 6 =$

0

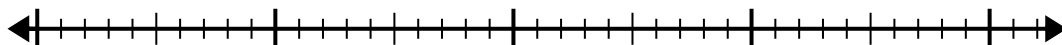
52



8) $33 \div 5 =$

0

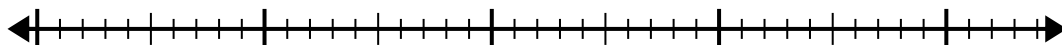
33



9) $34 \div 7 =$

0

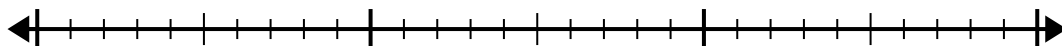
34



10) $29 \div 4 =$

0

29



Answers

1. _____

2. _____

3. _____

4. _____

5. _____

6. _____

7. _____

8. _____

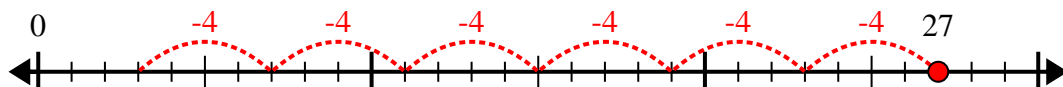
9. _____

10. _____

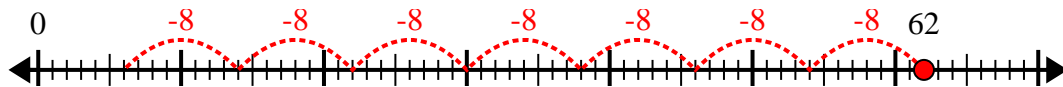


Use the number line to solve the division problem.

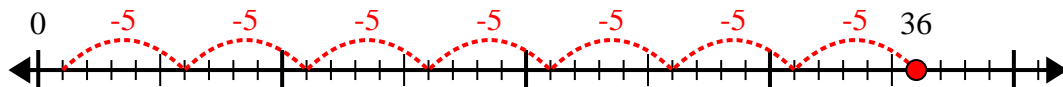
1) $27 \div 4 =$



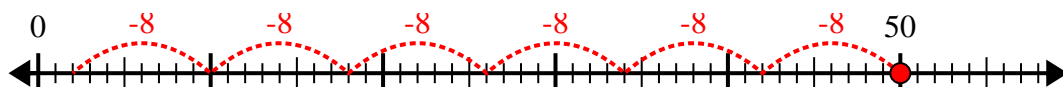
2) $62 \div 8 =$



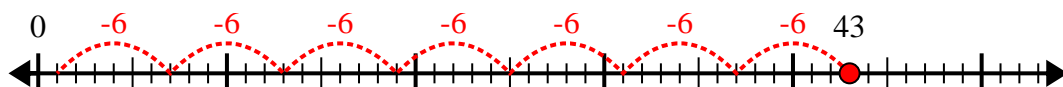
3) $36 \div 5 =$



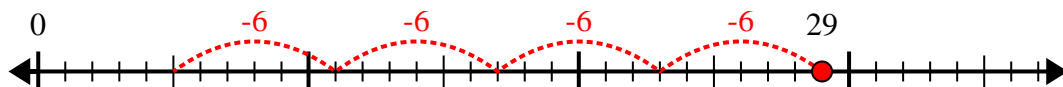
4) $50 \div 8 =$



5) $43 \div 6 =$



6) $29 \div 6 =$



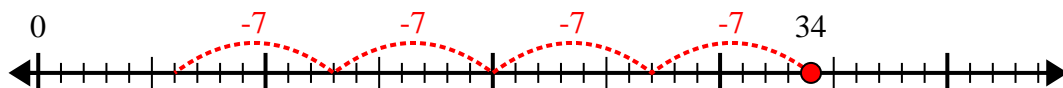
7) $52 \div 6 =$



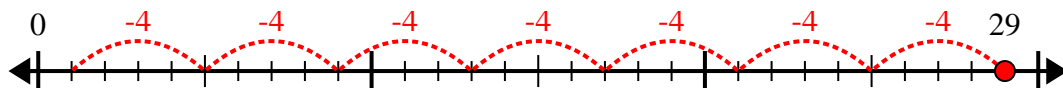
8) $33 \div 5 =$



9) $34 \div 7 =$



10) $29 \div 4 =$



Answers

1. 6r3

2. 7r6

3. 7r1

4. 6r2

5. 7r1

6. 4r5

7. 8r4

8. 6r3

9. 4r6

10. 7r1