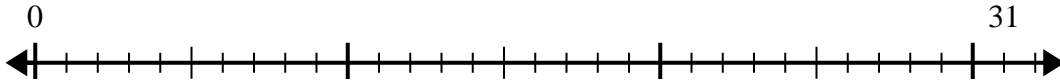


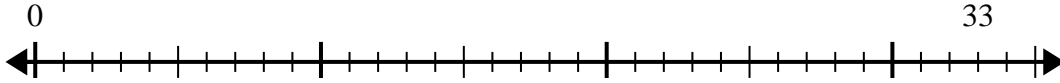


Use the number line to solve the division problem.

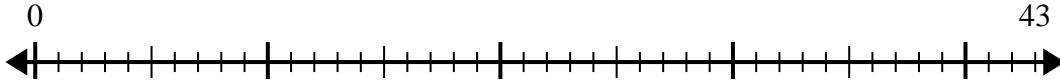
1)  $31 \div 6 =$   
0



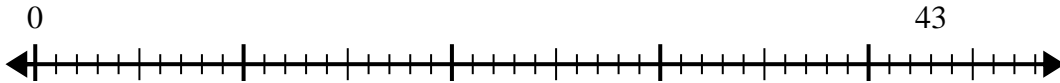
2)  $33 \div 4 =$   
0



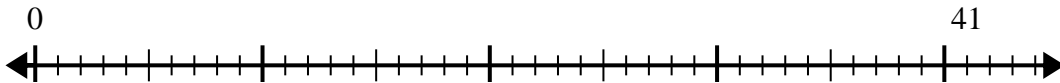
3)  $43 \div 7 =$   
0



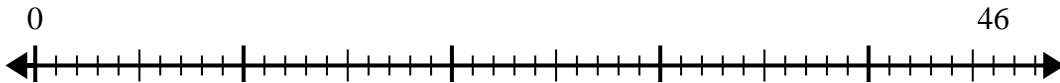
4)  $43 \div 5 =$   
0



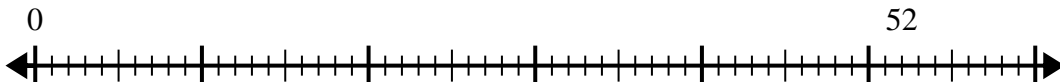
5)  $41 \div 8 =$   
0



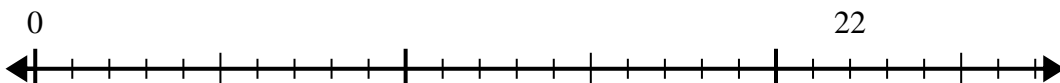
6)  $46 \div 6 =$   
0



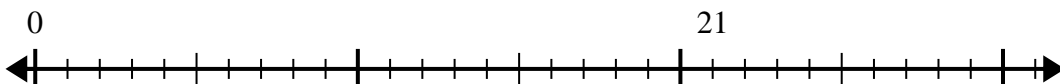
7)  $52 \div 6 =$   
0



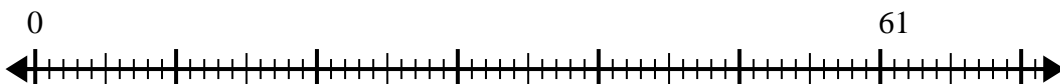
8)  $22 \div 4 =$   
0



9)  $21 \div 5 =$   
0



10)  $61 \div 8 =$   
0



Answers

1. \_\_\_\_\_
2. \_\_\_\_\_
3. \_\_\_\_\_
4. \_\_\_\_\_
5. \_\_\_\_\_
6. \_\_\_\_\_
7. \_\_\_\_\_
8. \_\_\_\_\_
9. \_\_\_\_\_
10. \_\_\_\_\_

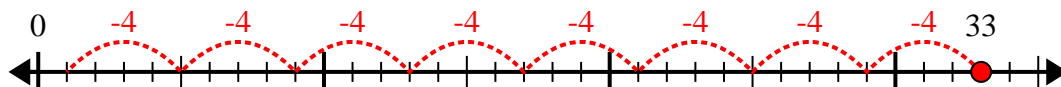


Use the number line to solve the division problem.

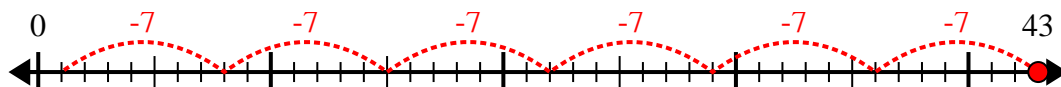
1)  $31 \div 6 =$



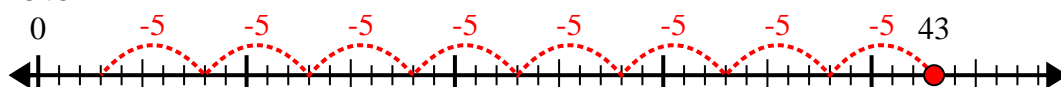
2)  $33 \div 4 =$



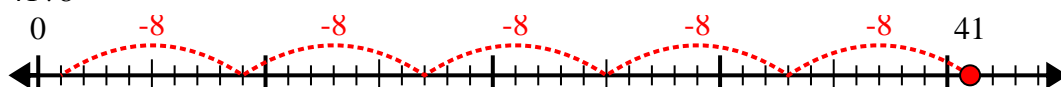
3)  $43 \div 7 =$



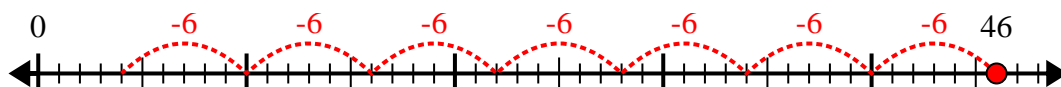
4)  $43 \div 5 =$



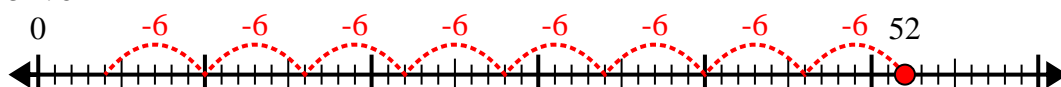
5)  $41 \div 8 =$



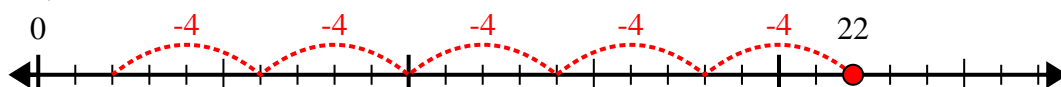
6)  $46 \div 6 =$



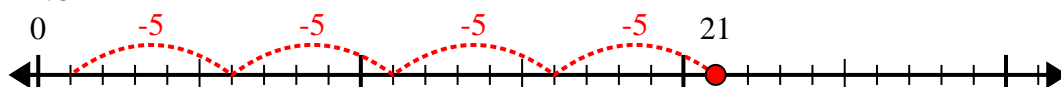
7)  $52 \div 6 =$



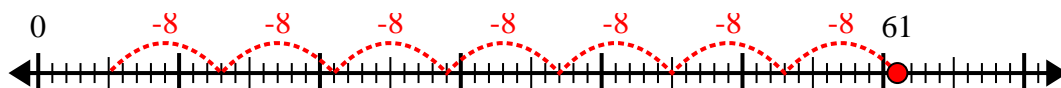
8)  $22 \div 4 =$



9)  $21 \div 5 =$



10)  $61 \div 8 =$



Answers

1. 5r1

2. 8r1

3. 6r1

4. 8r3

5. 5r1

6. 7r4

7. 8r4

8. 5r2

9. 4r1

10. 7r5