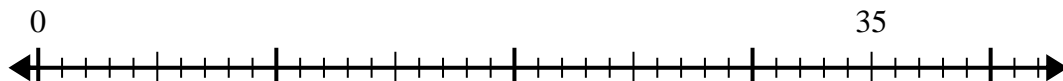




Use the number line to solve the division problem.

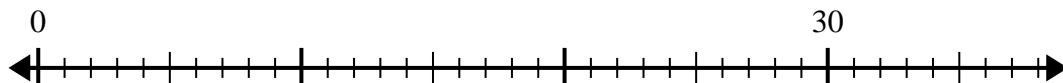
Answers

1) $35 \div 5 =$



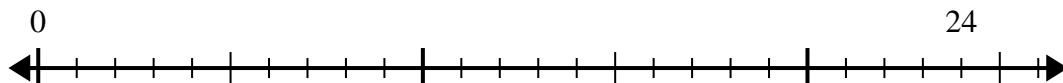
1. _____

2) $30 \div 5 =$



2. _____

3) $24 \div 4 =$



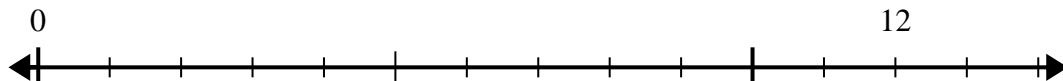
3. _____

4) $18 \div 6 =$



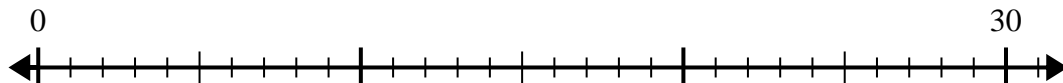
4. _____

5) $12 \div 4 =$



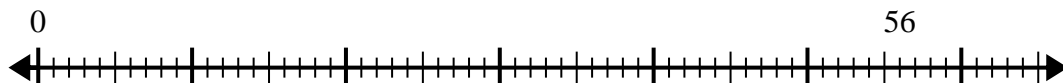
5. _____

6) $30 \div 6 =$



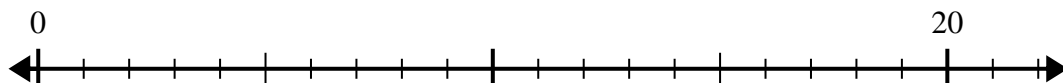
6. _____

7) $56 \div 7 =$



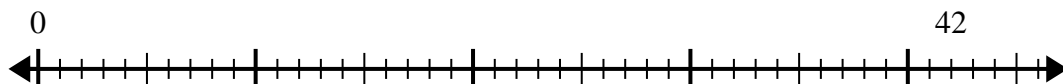
7. _____

8) $20 \div 5 =$



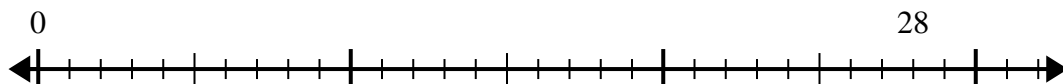
8. _____

9) $42 \div 7 =$



9. _____

10) $28 \div 7 =$

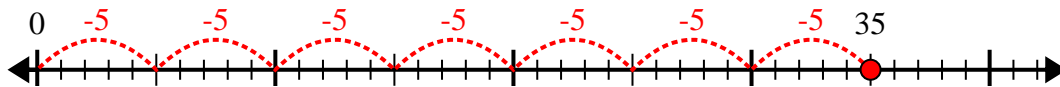


10. _____

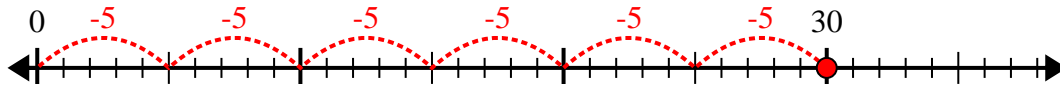


Use the number line to solve the division problem.

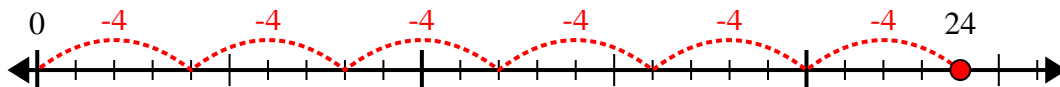
1) $35 \div 5 =$



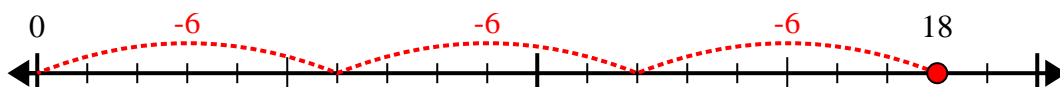
2) $30 \div 5 =$



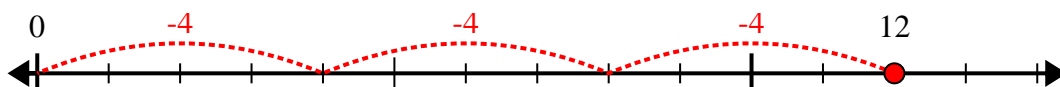
3) $24 \div 4 =$



4) $18 \div 6 =$



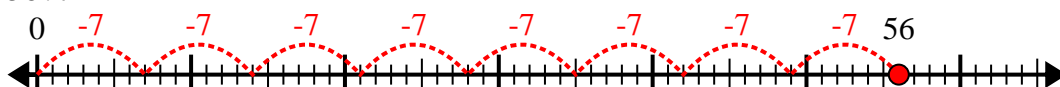
5) $12 \div 4 =$



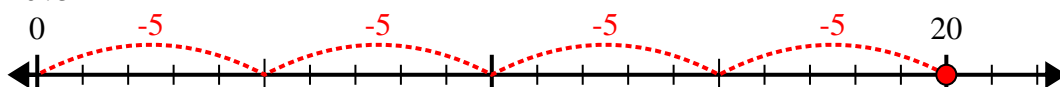
6) $30 \div 6 =$



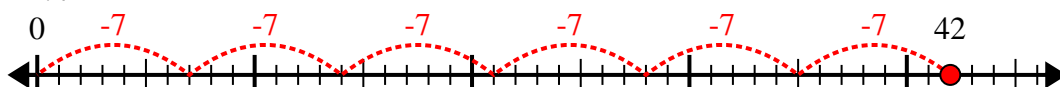
7) $56 \div 7 =$



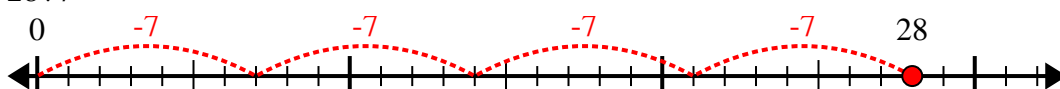
8) $20 \div 5 =$



9) $42 \div 7 =$



10) $28 \div 7 =$



Answers

1. 7

2. 6

3. 6

4. 3

5. 3

6. 5

7. 8

8. 4

9. 6

10. 4