

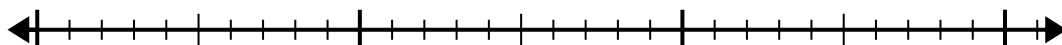


Use the number line to solve the division problem.

1) $24 \div 8 =$

0

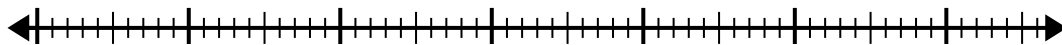
24



2) $56 \div 8 =$

0

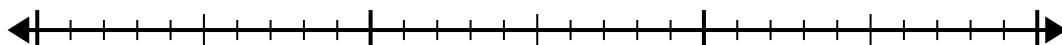
56



3) $24 \div 4 =$

0

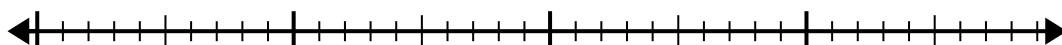
24



4) $32 \div 4 =$

0

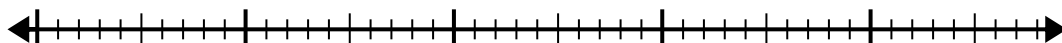
32



5) $48 \div 8 =$

0

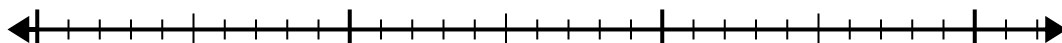
48



6) $24 \div 6 =$

0

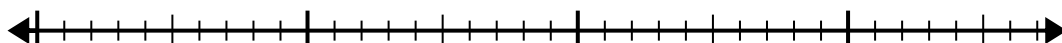
24



7) $28 \div 4 =$

0

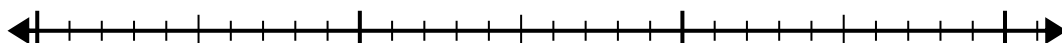
28



8) $21 \div 7 =$

0

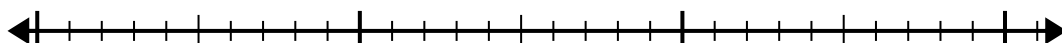
21



9) $28 \div 7 =$

0

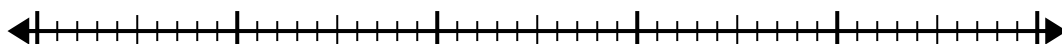
28



10) $40 \div 5 =$

0

40

**Answers**

1. _____

2. _____

3. _____

4. _____

5. _____

6. _____

7. _____

8. _____

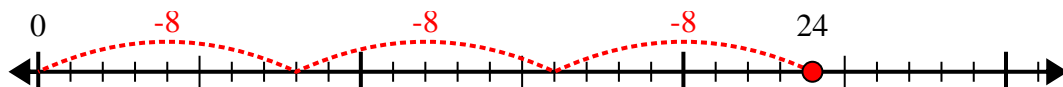
9. _____

10. _____

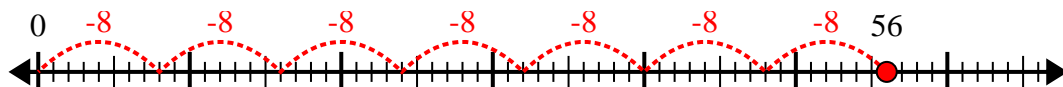


Use the number line to solve the division problem.

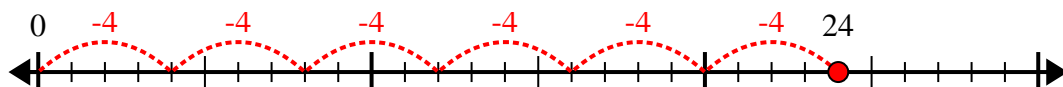
1) $24 \div 8 =$



2) $56 \div 8 =$



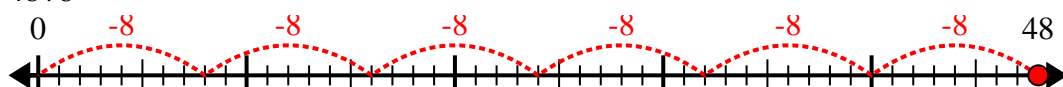
3) $24 \div 4 =$



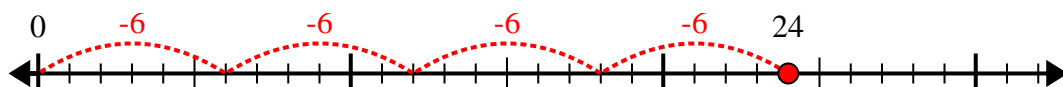
4) $32 \div 4 =$



5) $48 \div 8 =$



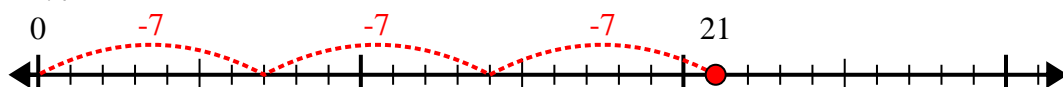
6) $24 \div 6 =$



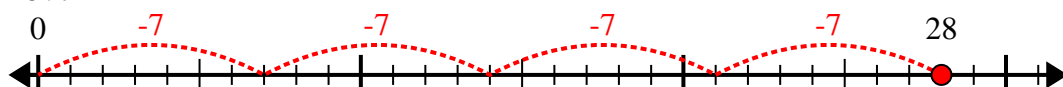
7) $28 \div 4 =$



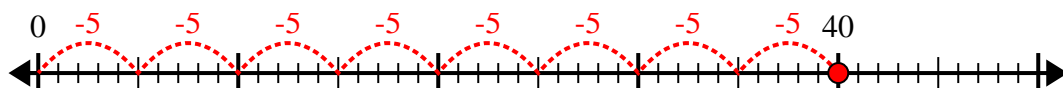
8) $21 \div 7 =$



9) $28 \div 7 =$



10) $40 \div 5 =$



Answers

1. 3

2. 7

3. 6

4. 8

5. 6

6. 4

7. 7

8. 3

9. 4

10. 8