

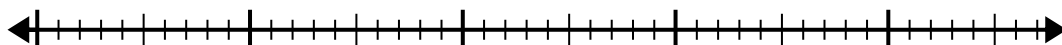


Use the number line to solve the division problem.

1)  $40 \div 5 =$

0

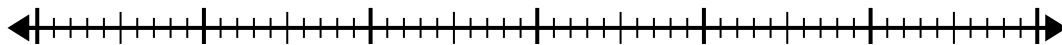
40



2)  $56 \div 7 =$

0

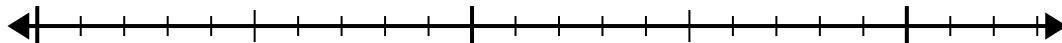
56



3)  $15 \div 5 =$

0

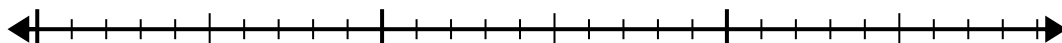
15



4)  $28 \div 4 =$

0

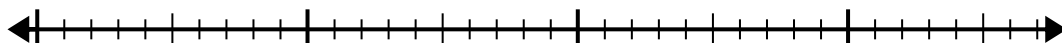
28



5)  $35 \div 7 =$

0

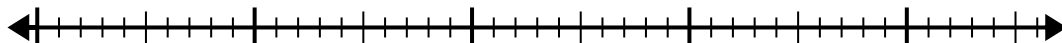
35



6)  $40 \div 8 =$

0

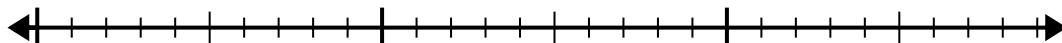
40



7)  $24 \div 4 =$

0

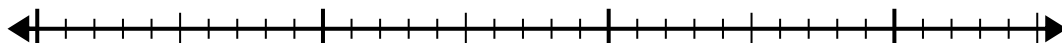
24



8)  $30 \div 5 =$

0

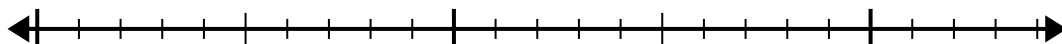
30



9)  $20 \div 4 =$

0

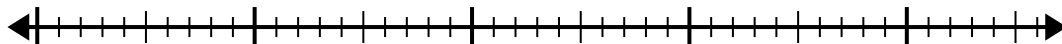
20



10)  $42 \div 6 =$

0

42

**Answers**

1. \_\_\_\_\_

2. \_\_\_\_\_

3. \_\_\_\_\_

4. \_\_\_\_\_

5. \_\_\_\_\_

6. \_\_\_\_\_

7. \_\_\_\_\_

8. \_\_\_\_\_

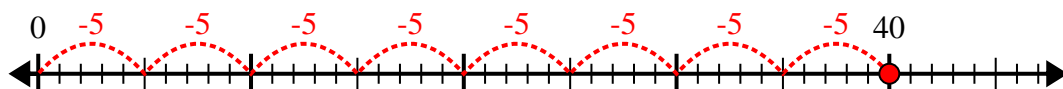
9. \_\_\_\_\_

10. \_\_\_\_\_

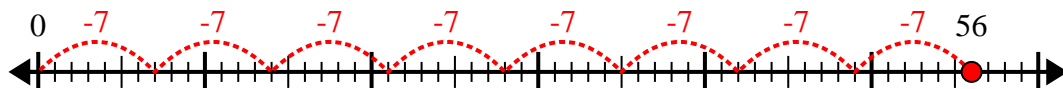


Use the number line to solve the division problem.

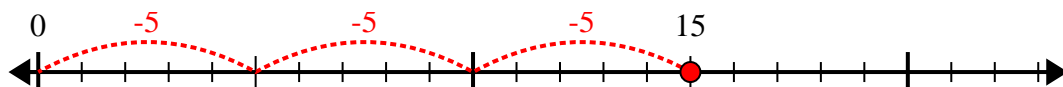
1)  $40 \div 5 =$



2)  $56 \div 7 =$



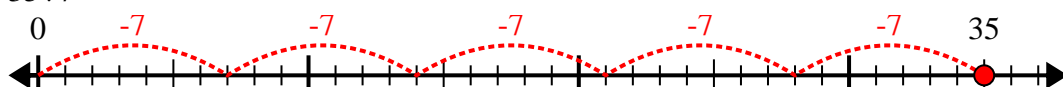
3)  $15 \div 5 =$



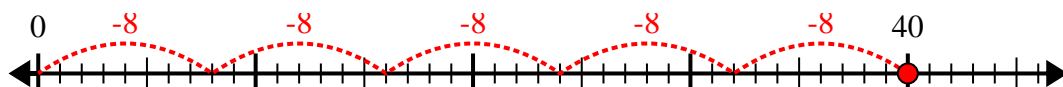
4)  $28 \div 4 =$



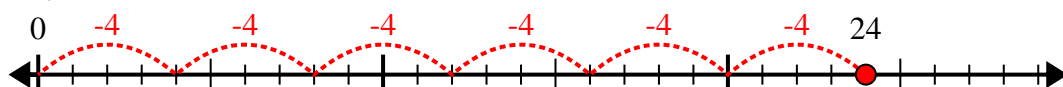
5)  $35 \div 7 =$



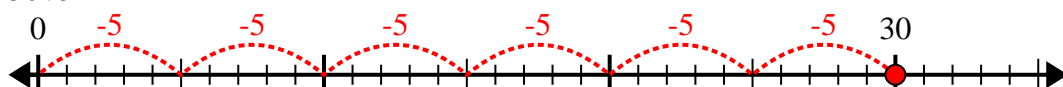
6)  $40 \div 8 =$



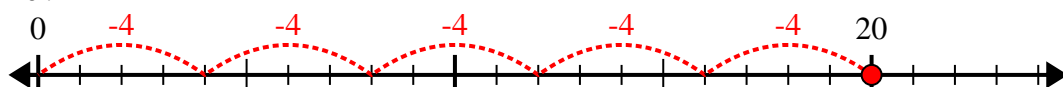
7)  $24 \div 4 =$



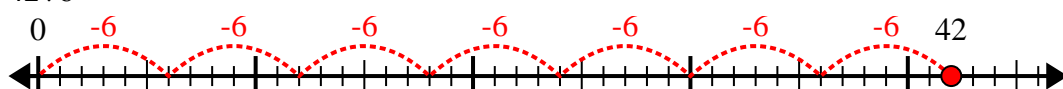
8)  $30 \div 5 =$



9)  $20 \div 4 =$



10)  $42 \div 6 =$



Answers

1. 8

2. 8

3. 3

4. 7

5. 5

6. 5

7. 6

8. 6

9. 5

10. 7