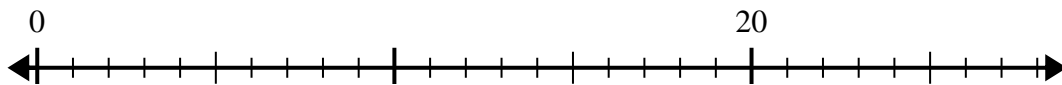


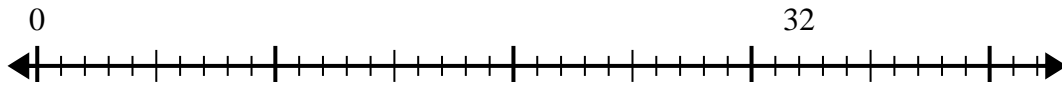


Use the number line to solve the division problem.

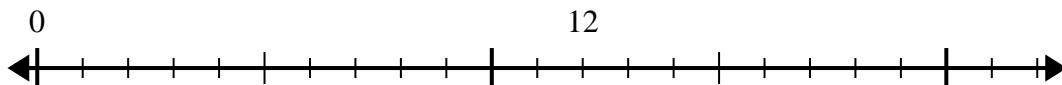
1)  $20 \div 4 =$



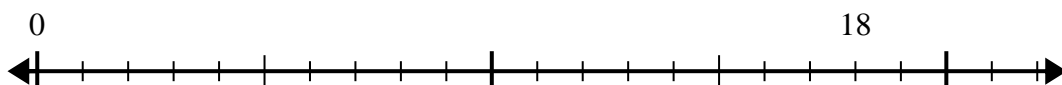
2)  $32 \div 8 =$



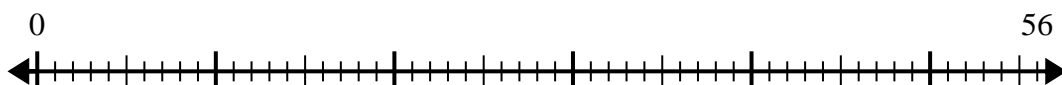
3)  $12 \div 4 =$



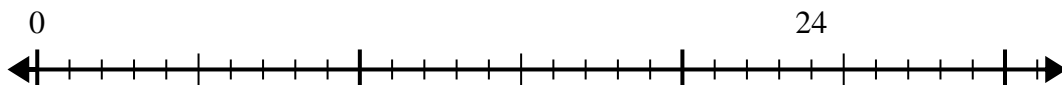
4)  $18 \div 6 =$



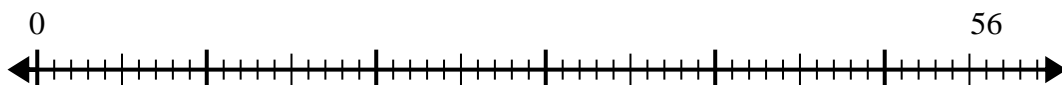
5)  $56 \div 8 =$



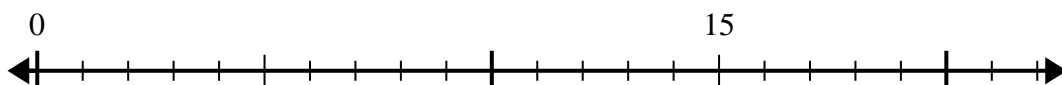
6)  $24 \div 8 =$



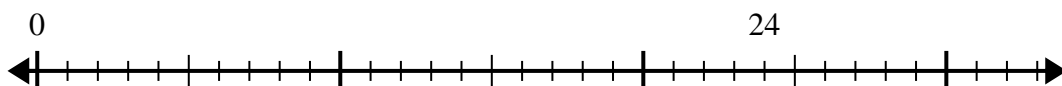
7)  $56 \div 7 =$



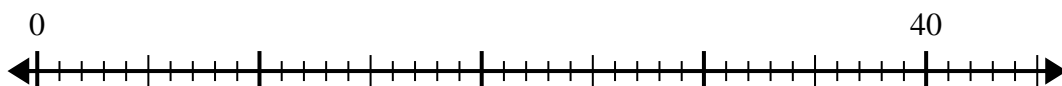
8)  $15 \div 5 =$



9)  $24 \div 4 =$



10)  $40 \div 5 =$

**Answers**

1. \_\_\_\_\_

2. \_\_\_\_\_

3. \_\_\_\_\_

4. \_\_\_\_\_

5. \_\_\_\_\_

6. \_\_\_\_\_

7. \_\_\_\_\_

8. \_\_\_\_\_

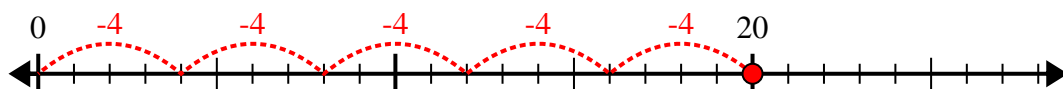
9. \_\_\_\_\_

10. \_\_\_\_\_

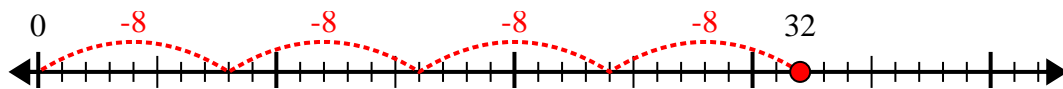


Use the number line to solve the division problem.

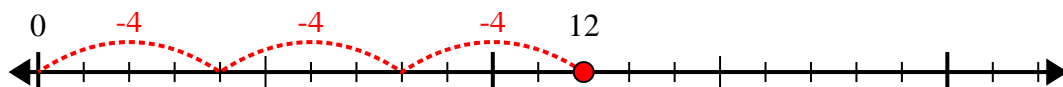
1)  $20 \div 4 =$



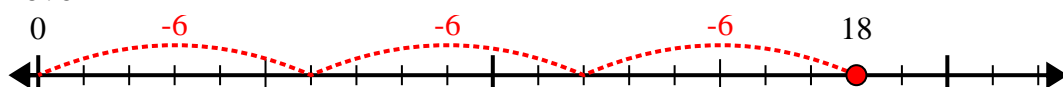
2)  $32 \div 8 =$



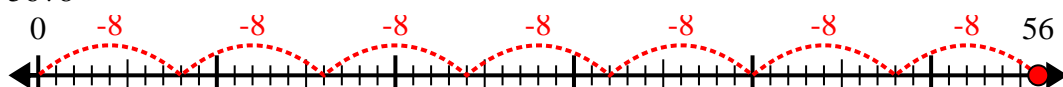
3)  $12 \div 4 =$



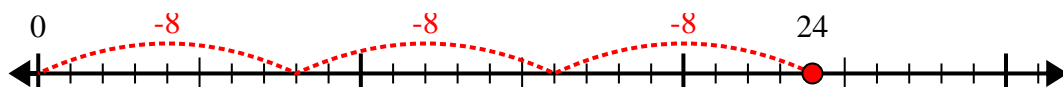
4)  $18 \div 6 =$



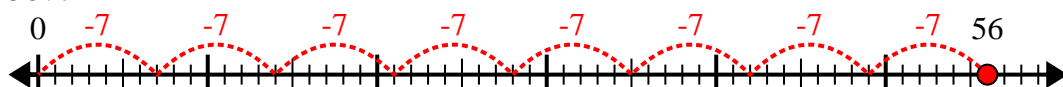
5)  $56 \div 8 =$



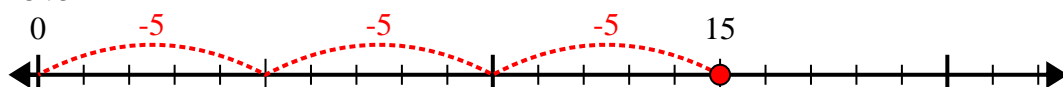
6)  $24 \div 8 =$



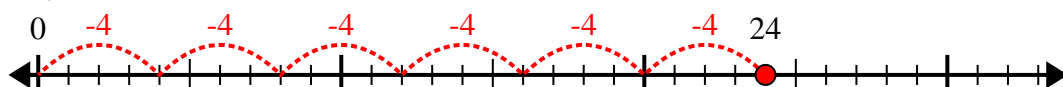
7)  $56 \div 7 =$



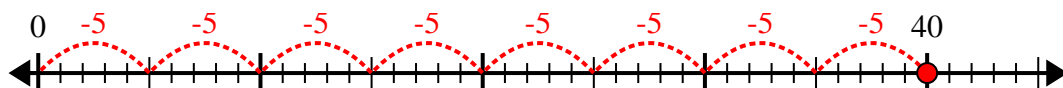
8)  $15 \div 5 =$



9)  $24 \div 4 =$



10)  $40 \div 5 =$



Answers

1. 5

2. 4

3. 3

4. 3

5. 7

6. 3

7. 8

8. 3

9. 6

10. 8