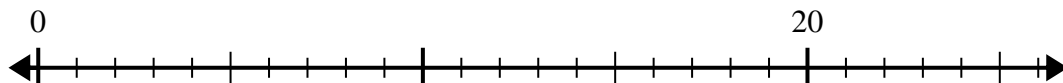


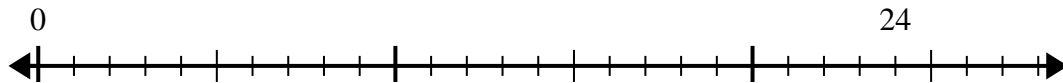


Use the number line to solve the division problem.

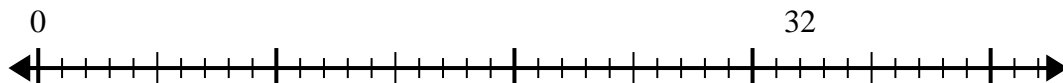
1) $20 \div 5 =$



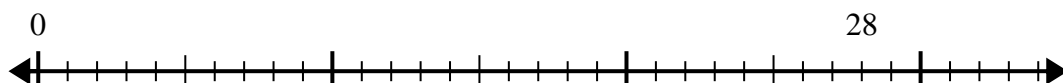
2) $24 \div 6 =$



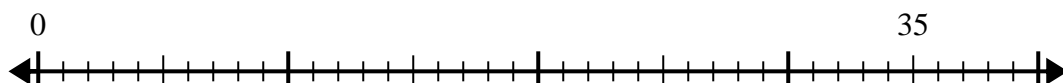
3) $32 \div 8 =$



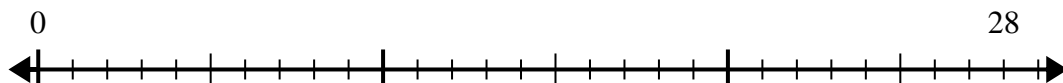
4) $28 \div 7 =$



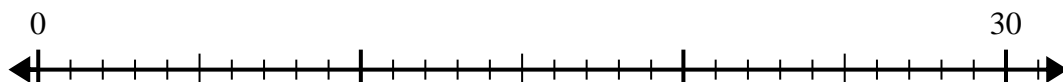
5) $35 \div 5 =$



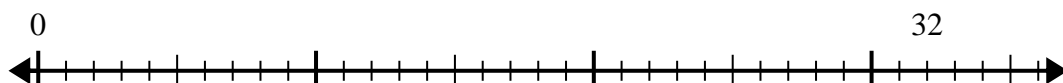
6) $28 \div 4 =$



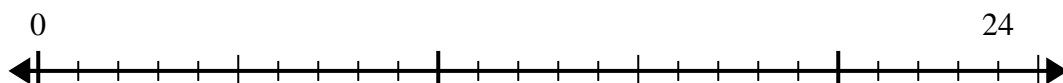
7) $30 \div 6 =$



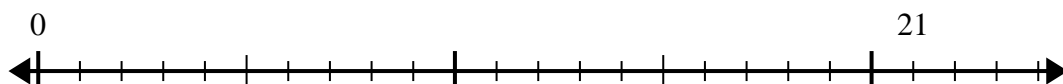
8) $32 \div 4 =$



9) $24 \div 4 =$



10) $21 \div 7 =$

**Answers**

1. _____

2. _____

3. _____

4. _____

5. _____

6. _____

7. _____

8. _____

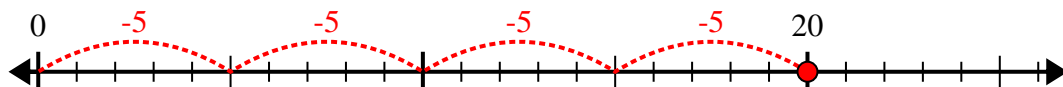
9. _____

10. _____

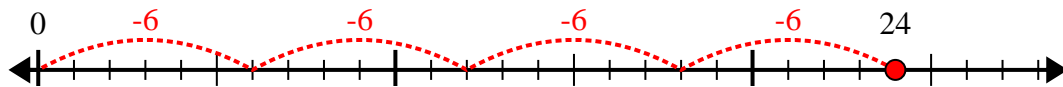


Use the number line to solve the division problem.

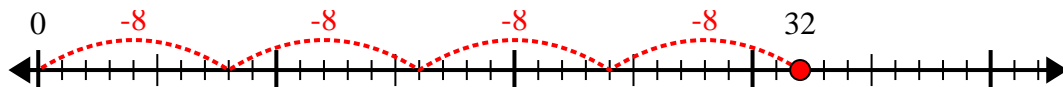
1) $20 \div 5 =$



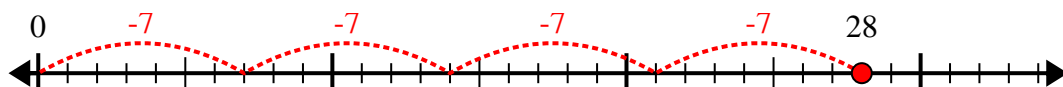
2) $24 \div 6 =$



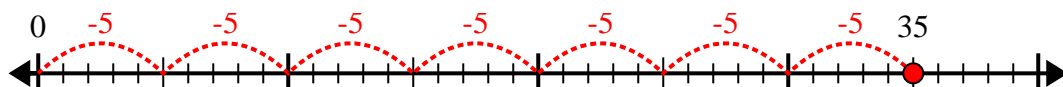
3) $32 \div 8 =$



4) $28 \div 7 =$



5) $35 \div 5 =$



6) $28 \div 4 =$



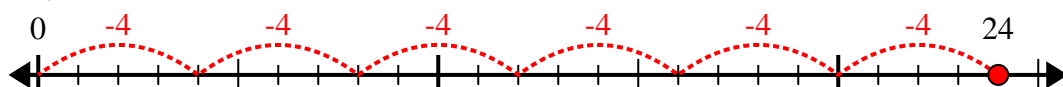
7) $30 \div 6 =$



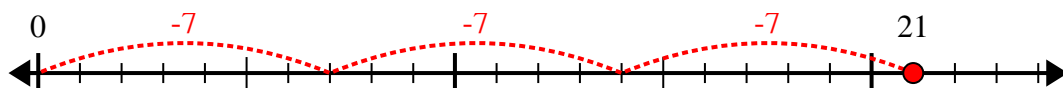
8) $32 \div 4 =$



9) $24 \div 4 =$



10) $21 \div 7 =$



Answers

1. 4

2. 4

3. 4

4. 4

5. 7

6. 7

7. 5

8. 8

9. 6

10. 3