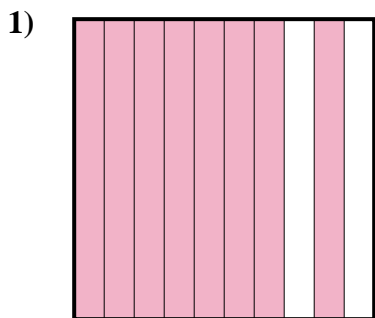


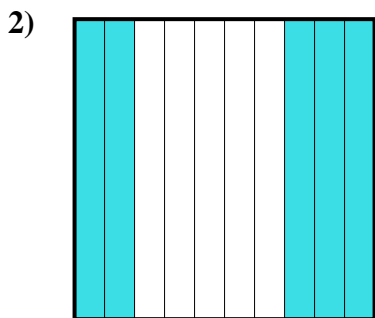


Determine which letter best represents the amount shaded of the whole.


Answers



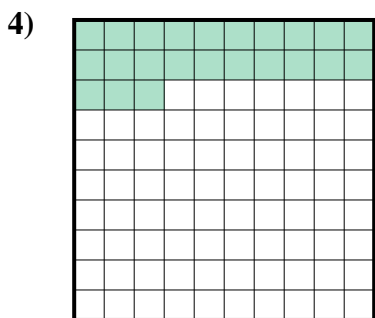
- A. 8
- B. 800.0
- C. 80
- D. 0.8



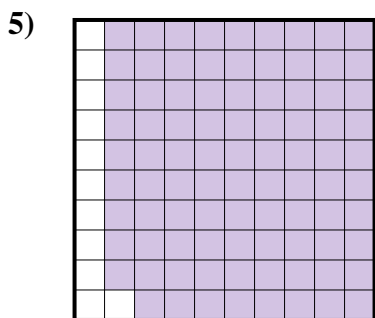
- A. 500.0
- B. 0.5
- C. 0.05
- D. 5



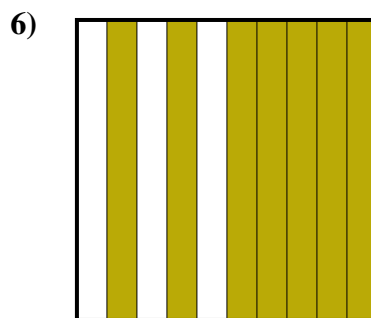
- A. 1
- B. 0.1
- C. 100.00
- D. 100.0



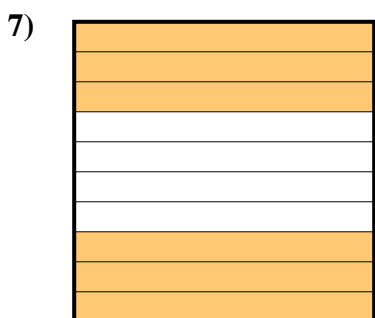
- A. 0.023
- B. 230.0
- C. 2.3
- D. 0.23




- A. 0.89
- B. 0.089
- C. 8.9
- D. 890.0



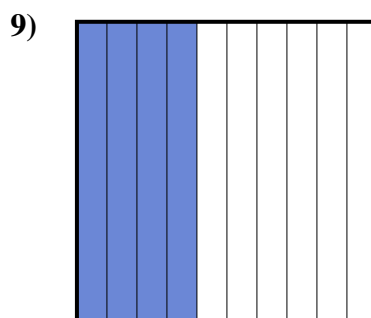
- A. 70
- B. 700.0
- C. 0.07
- D. 0.7



- A. 60
- B. 0.06
- C. 0.6
- D. 600.00



- A. 300.0
- B. 0.3
- C. 30
- D. 300.00



- A. 0.4
- B. 0.04
- C. 400.0
- D. 400.00

1. _____

2. _____

3. _____

4. _____

5. _____

6. _____

7. _____

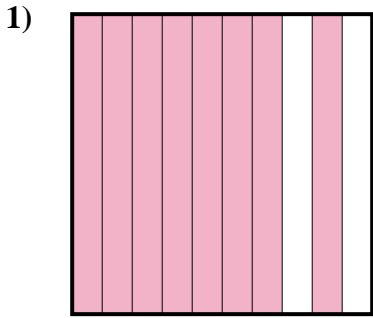
8. _____

9. _____

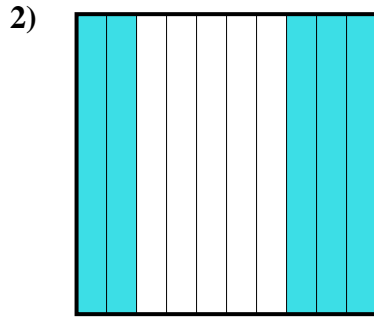


Determine which letter best represents the amount shaded of the whole.


Answers



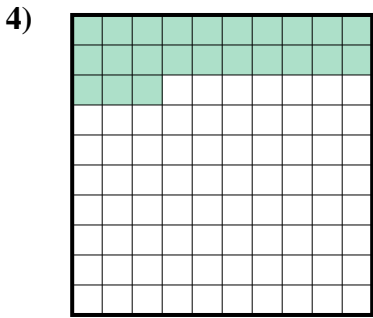
- A. 8
- B. 800.0
- C. 80
- D. 0.8



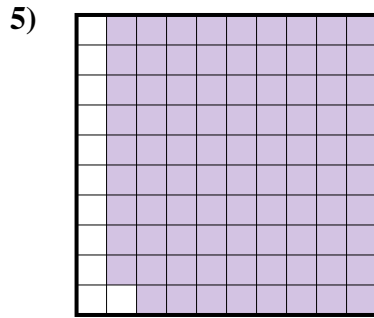
- A. 500.0
- B. 0.5
- C. 0.05
- D. 5



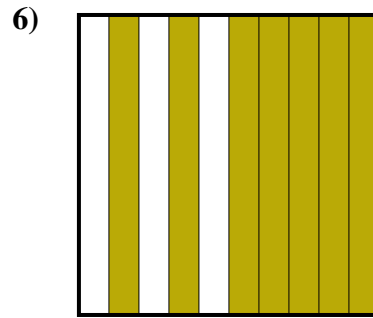
- A. 1
- B. 0.1
- C. 100.00
- D. 100.0



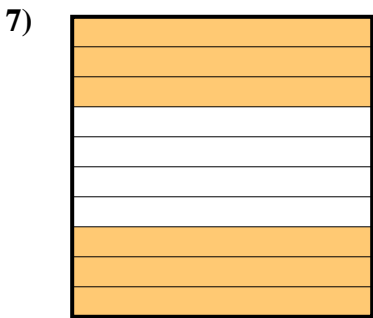
- A. 0.023
- B. 230.0
- C. 2.3
- D. 0.23




- A. 0.89
- B. 0.089
- C. 8.9
- D. 890.0



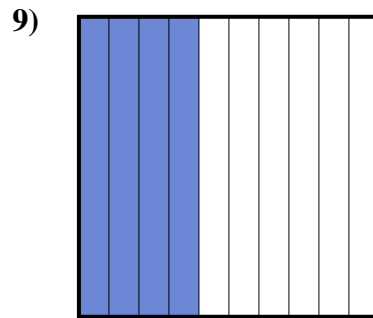
- A. 70
- B. 700.0
- C. 0.07
- D. 0.7



- A. 60
- B. 0.06
- C. 0.6
- D. 600.00



- A. 300.0
- B. 0.3
- C. 30
- D. 300.00



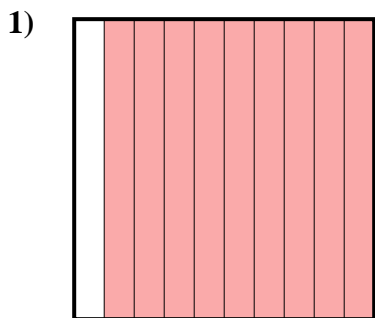
- A. 0.4
- B. 0.04
- C. 400.0
- D. 400.00

- 1. **D**
- 2. **B**
- 3. **B**
- 4. **D**
- 5. **A**
- 6. **D**
- 7. **C**
- 8. **B**
- 9. **A**

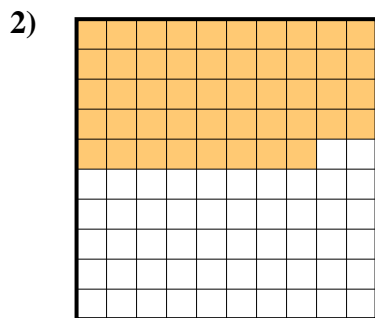


Determine which letter best represents the amount shaded of the whole.


Answers



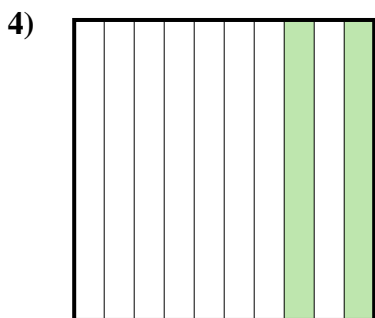
- A. 900.00
- B. 900.0
- C. 90
- D. 0.9



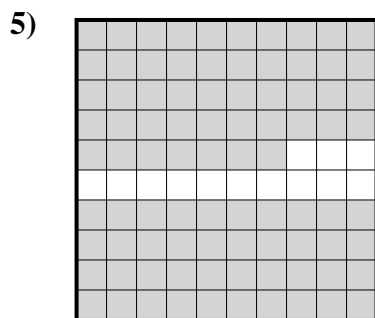
- A. 0.48
- B. 48
- C. 480.00
- D. 4.8



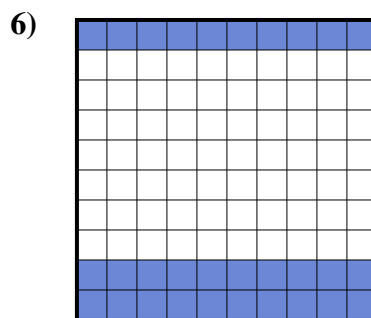
- A. 0.1
- B. 100.00
- C. 10
- D. 1



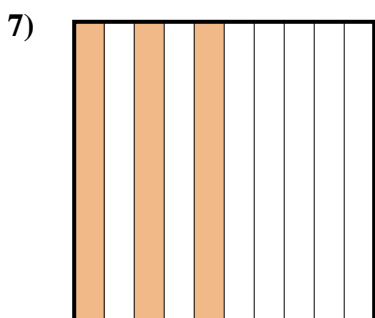
- A. 200.0
- B. 0.2
- C. 20
- D. 200.00



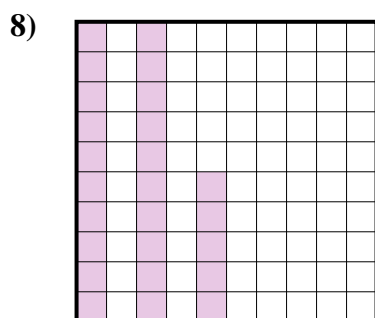
- A. 870.0
- B. 0.087
- C. 0.87
- D. 870.00




- A. 3
- B. 30
- C. 300.00
- D. 0.3



- A. 3
- B. 30
- C. 300.0
- D. 0.3



- A. 2.5
- B. 0.025
- C. 250.0
- D. 0.25



- A. 0.06
- B. 0.6
- C. 600.0
- D. 60

1. _____

2. _____

3. _____

4. _____

5. _____

6. _____

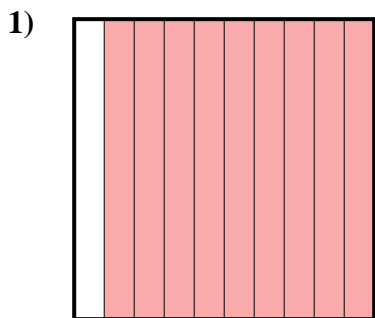
7. _____

8. _____

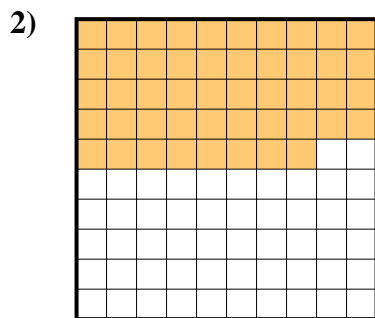
9. _____




Determine which letter best represents the amount shaded of the whole.



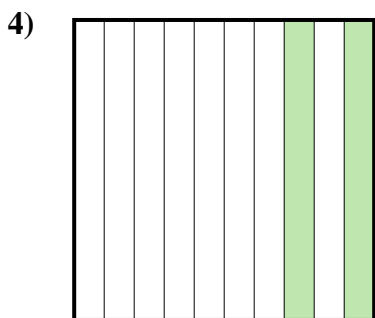
- A. 900.00
- B. 900.0
- C. 90
- D. 0.9



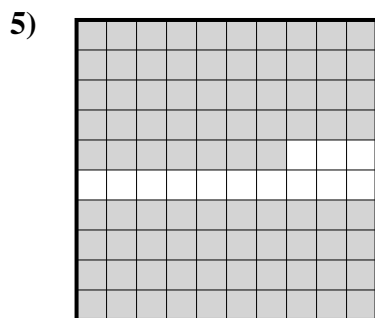
- A. 0.48
- B. 48
- C. 480.00
- D. 4.8



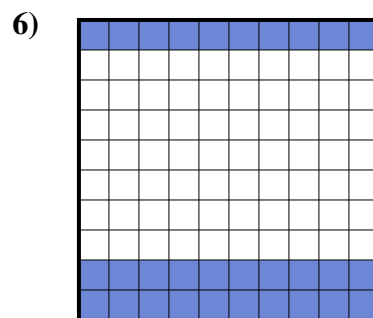
- A. 0.1
- B. 100.00
- C. 10
- D. 1



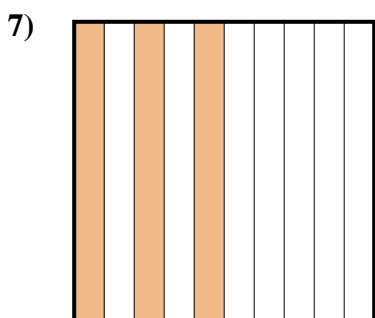
- A. 200.0
- B. 0.2
- C. 20
- D. 200.00



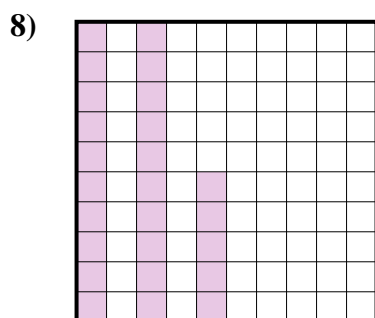
- A. 870.0
- B. 0.087
- C. 0.87
- D. 870.00




- A. 3
- B. 30
- C. 300.00
- D. 0.3



- A. 3
- B. 30
- C. 300.0
- D. 0.3



- A. 2.5
- B. 0.025
- C. 250.0
- D. 0.25



- A. 0.06
- B. 0.6
- C. 600.0
- D. 60

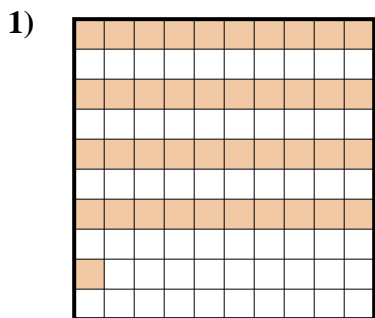
Answers

- 1. **D**
- 2. **A**
- 3. **A**
- 4. **B**
- 5. **C**
- 6. **D**
- 7. **D**
- 8. **D**
- 9. **B**

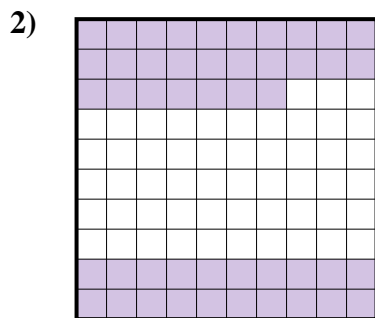


Determine which letter best represents the amount shaded of the whole.

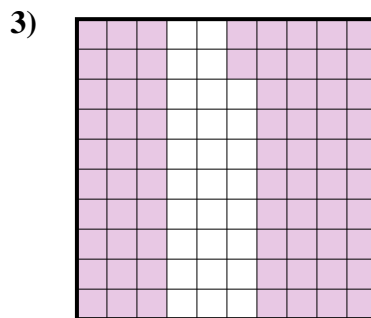
Answers



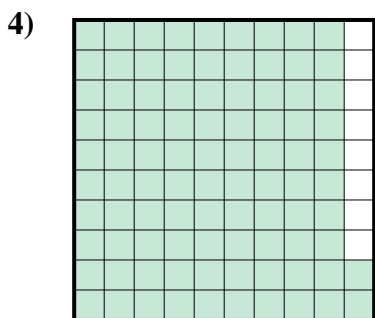
- A. 410.00
- B. 0.41
- C. 410.0
- D. 0.041




- A. 470.00
- B. 47
- C. 0.47
- D. 4.7



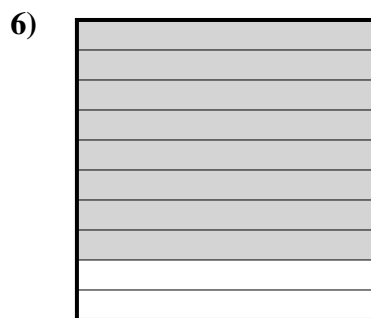
- A. 7.2
- B. 0.072
- C. 0.72
- D. 720.0



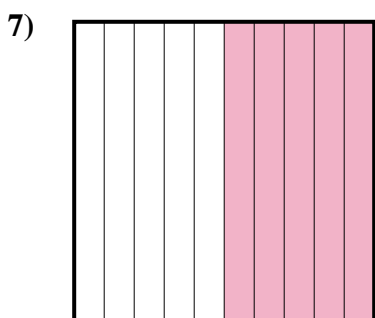
- A. 0.92
- B. 920.00
- C. 92
- D. 9.2




- A. 0.06
- B. 60
- C. 0.6
- D. 600.0



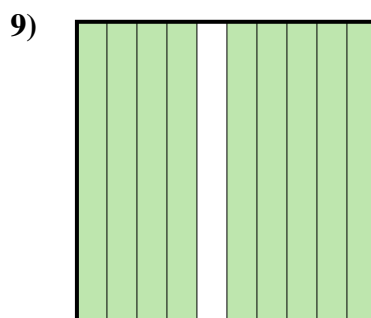
- A. 80
- B. 800.0
- C. 0.8
- D. 0.08



- A. 0.05
- B. 0.5
- C. 5
- D. 500.00



- A. 30
- B. 3
- C. 0.03
- D. 0.3



- A. 0.9
- B. 0.09
- C. 900.00
- D. 9

1. _____

2. _____

3. _____

4. _____

5. _____

6. _____

7. _____

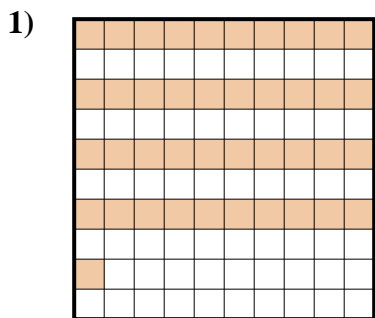
8. _____

9. _____

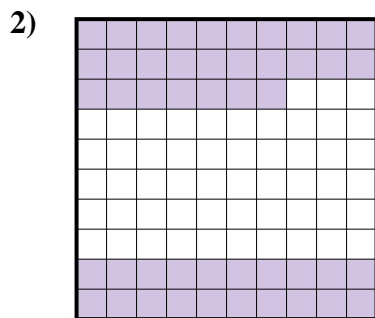


Determine which letter best represents the amount shaded of the whole.

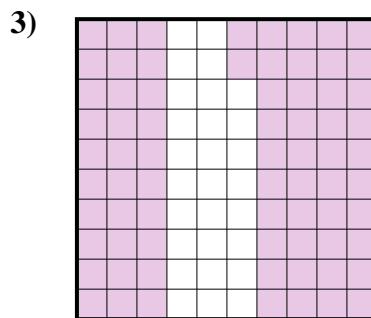
Answers



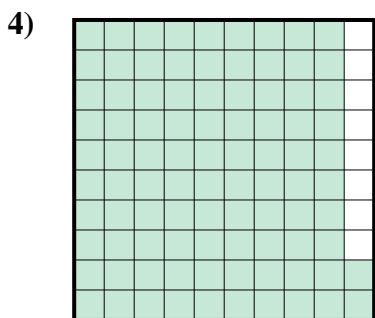
- A. 410.00
- B. 0.41
- C. 410.0
- D. 0.041




- A. 470.00
- B. 47
- C. 0.47
- D. 4.7



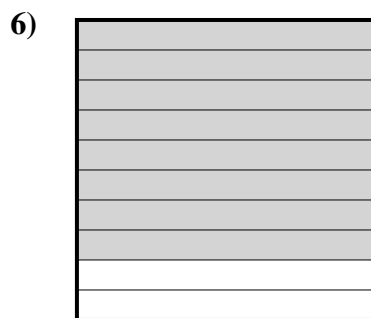
- A. 7.2
- B. 0.072
- C. 0.72
- D. 720.0



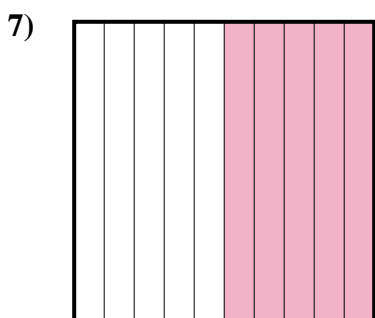
- A. 0.92
- B. 920.00
- C. 92
- D. 9.2




- A. 0.06
- B. 60
- C. 0.6
- D. 600.0



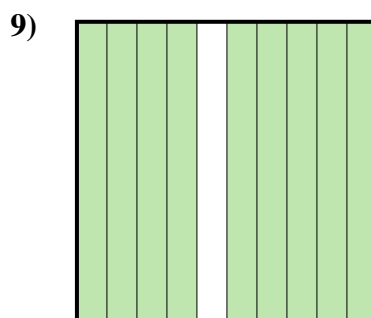
- A. 80
- B. 800.0
- C. 0.8
- D. 0.08



- A. 0.05
- B. 0.5
- C. 5
- D. 500.00



- A. 30
- B. 3
- C. 0.03
- D. 0.3



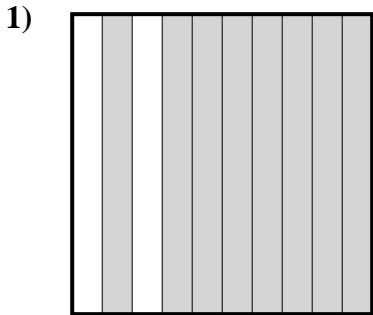
- A. 0.9
- B. 0.09
- C. 900.00
- D. 9

- 1. **B**
- 2. **C**
- 3. **C**
- 4. **A**
- 5. **C**
- 6. **C**
- 7. **B**
- 8. **D**
- 9. **A**

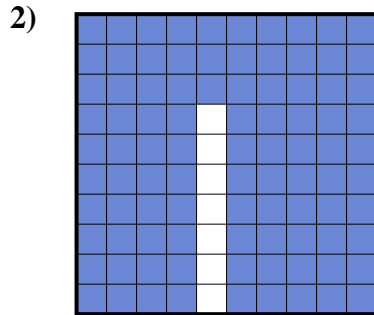


Determine which letter best represents the amount shaded of the whole.

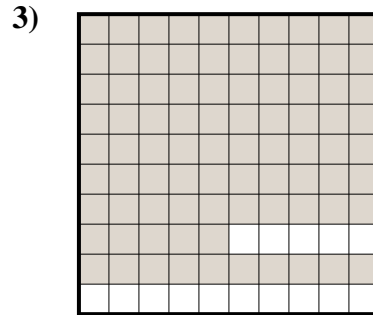
Answers



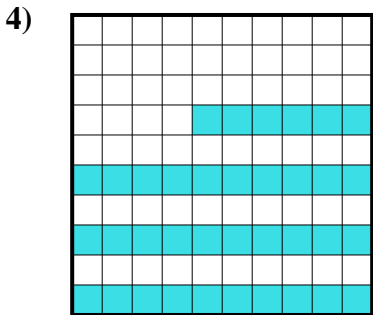
- A. 800.00
- B. 80
- C. 0.8
- D. 8



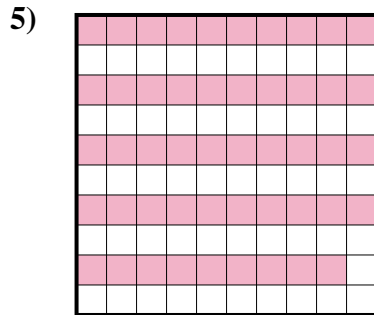
- A. 0.093
- B. 930.0
- C. 93
- D. 0.93




- A. 0.85
- B. 0.085
- C. 85
- D. 8.5



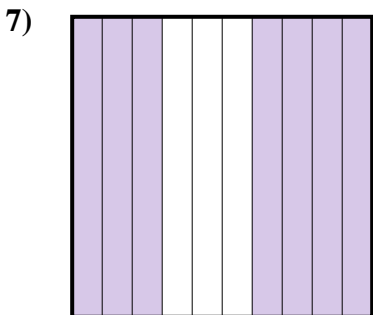
- A. 0.36
- B. 3.6
- C. 360.0
- D. 360.00



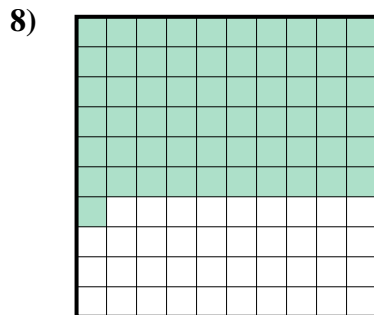
- A. 0.49
- B. 49
- C. 490.0
- D. 490.00



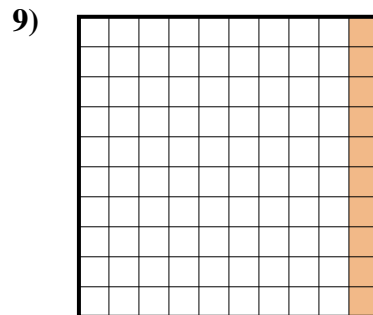
- A. 200.0
- B. 0.02
- C. 200.00
- D. 0.2



- A. 7
- B. 0.7
- C. 700.0
- D. 700.00



- A. 0.61
- B. 610.0
- C. 6.1
- D. 61



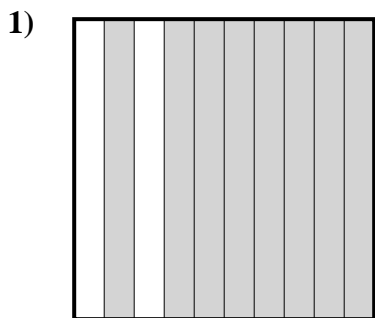
- A. 10
- B. 0.01
- C. 1
- D. 0.1

- 1. _____
- 2. _____
- 3. _____
- 4. _____
- 5. _____
- 6. _____
- 7. _____
- 8. _____
- 9. _____

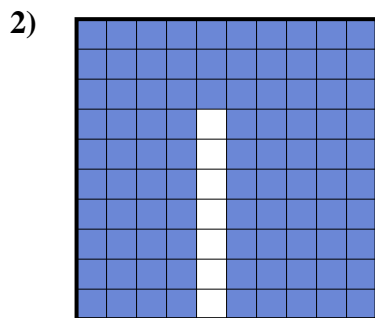


Determine which letter best represents the amount shaded of the whole.

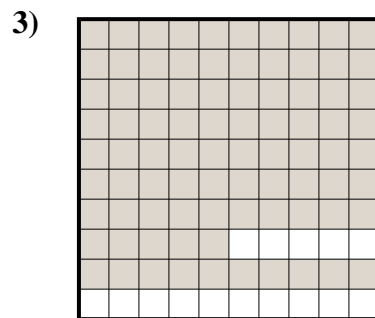
Answers



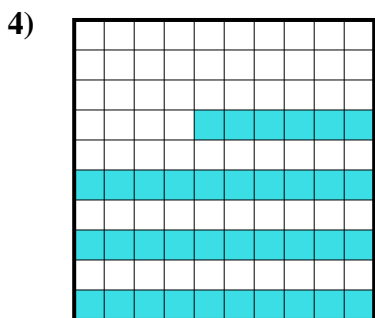
- A. 800.00
- B. 80
- C. 0.8
- D. 8



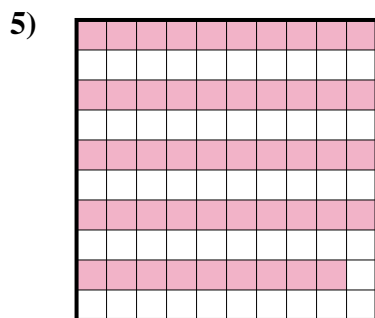
- A. 0.093
- B. 930.0
- C. 93
- D. 0.93




- A. 0.85
- B. 0.085
- C. 85
- D. 8.5



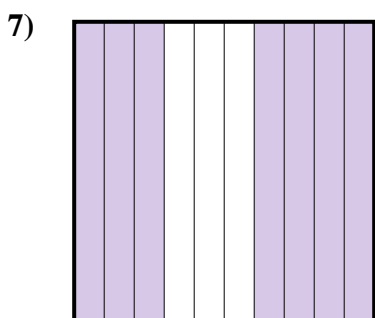
- A. 0.36
- B. 3.6
- C. 360.0
- D. 360.00



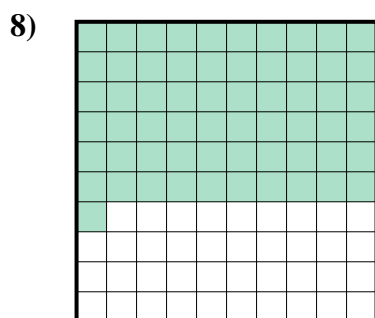
- A. 0.49
- B. 49
- C. 490.0
- D. 490.00



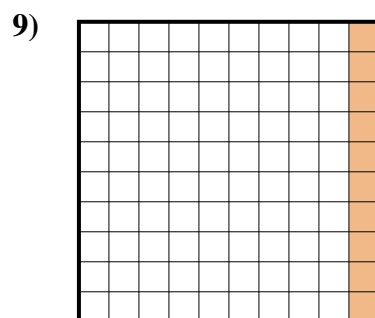
- A. 200.0
- B. 0.02
- C. 200.00
- D. 0.2



- A. 7
- B. 0.7
- C. 700.0
- D. 700.00



- A. 0.61
- B. 610.0
- C. 6.1
- D. 61




- A. 10
- B. 0.01
- C. 1
- D. 0.1

- 1. **C**
- 2. **D**
- 3. **A**
- 4. **A**
- 5. **A**
- 6. **D**
- 7. **B**
- 8. **A**
- 9. **D**

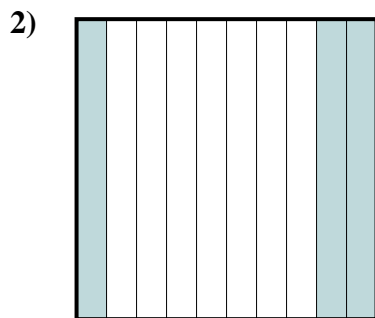


Determine which letter best represents the amount shaded of the whole.

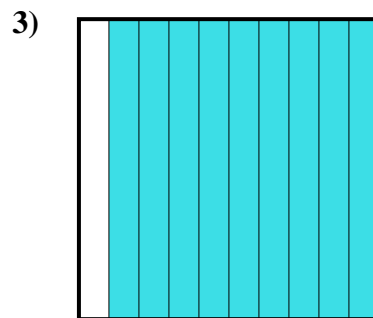
Answers



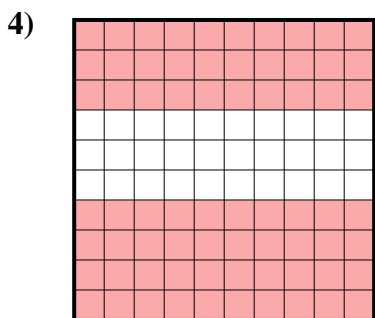
- A. 0.18
- B. 180.00
- C. 0.018
- D. 180.0



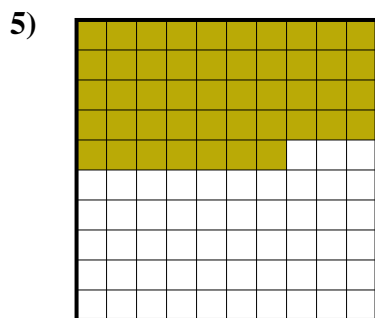
- A. 300.0
- B. 30
- C. 3
- D. 0.3




- A. 90
- B. 0.09
- C. 0.9
- D. 900.00



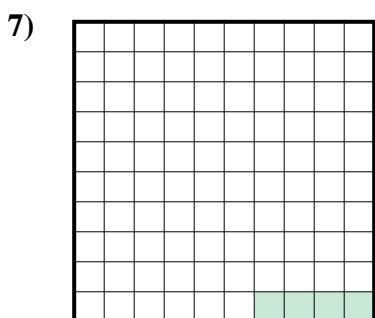
- A. 0.7
- B. 700.0
- C. 700.00
- D. 70



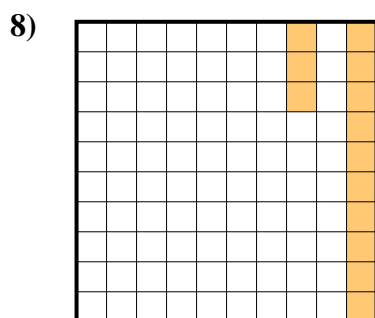
- A. 470.0
- B. 0.047
- C. 0.47
- D. 470.00



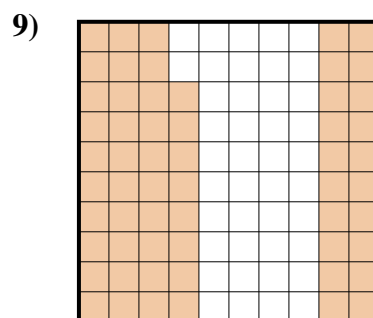
- A. 0.5
- B. 50
- C. 0.05
- D. 5



- A. 0.004
- B. 40.0
- C. 0.04
- D. 0.4



- A. 13
- B. 0.13
- C. 1.3
- D. 130.0



- A. 0.058
- B. 580.00
- C. 0.58
- D. 580.0

1. _____

2. _____

3. _____

4. _____

5. _____

6. _____

7. _____

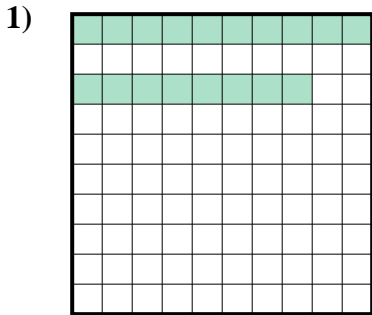
8. _____

9. _____

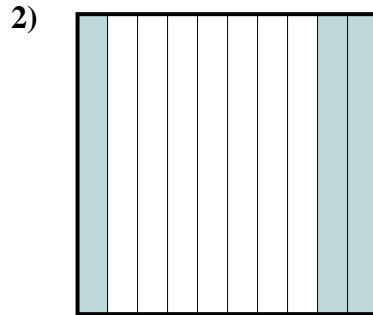


Determine which letter best represents the amount shaded of the whole.

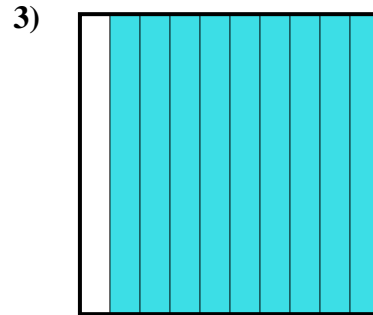
Answers



- A. 0.18
- B. 180.00
- C. 0.018
- D. 180.0



- A. 300.0
- B. 30
- C. 3
- D. 0.3



- A. 90
- B. 0.09
- C. 0.9
- D. 900.00

1. **A**

2. **D**

3. **C**

4. **A**

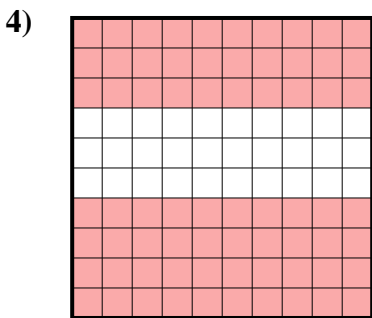
5. **C**

6. **A**

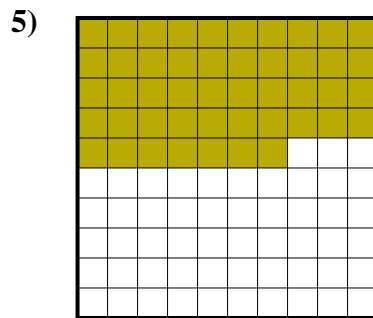
7. **C**

8. **B**


9. **C**



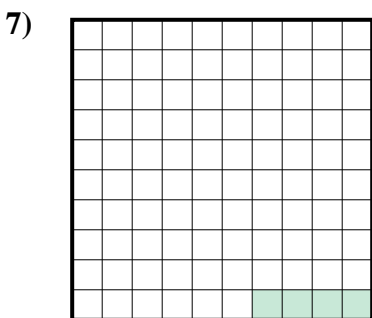
- A. 0.7
- B. 700.0
- C. 700.00
- D. 70



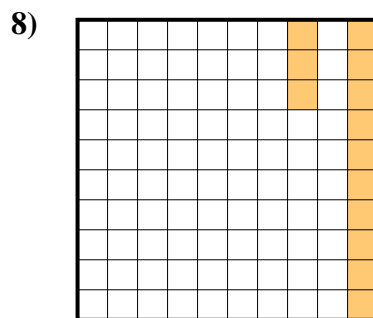
- A. 470.0
- B. 0.047
- C. 0.47
- D. 470.00



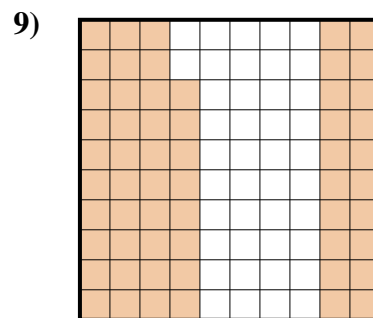
- A. 0.5
- B. 50
- C. 0.05
- D. 5



- A. 0.004
- B. 40.0
- C. 0.04
- D. 0.4



- A. 13
- B. 0.13
- C. 1.3
- D. 130.0




- A. 0.058
- B. 580.00
- C. 0.58
- D. 580.0




Determine which letter best represents the amount shaded of the whole.


Answers



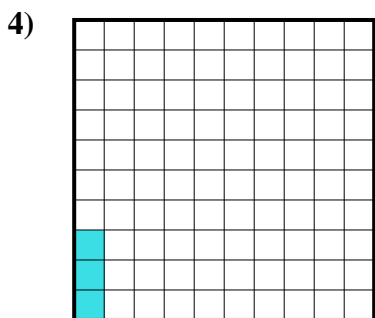
- A. 6
- B. 0.6
- C. 0.06
- D. 600.00



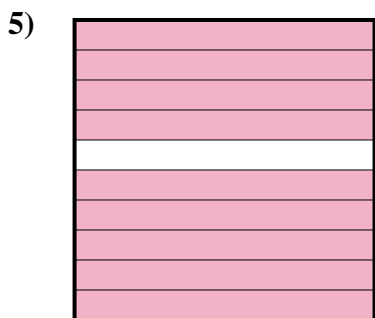
- A. 0.08
- B. 8
- C. 80
- D. 0.8



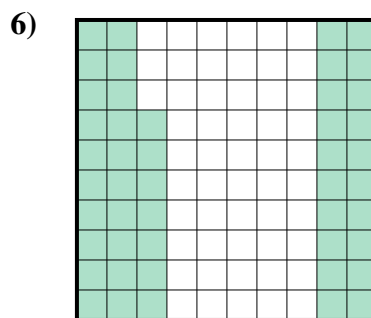
- A. 70
- B. 0.07
- C. 700.00
- D. 0.7



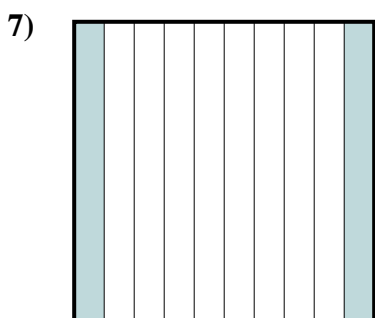
- A. 0.3
- B. 0.003
- C. 0.03
- D. 3



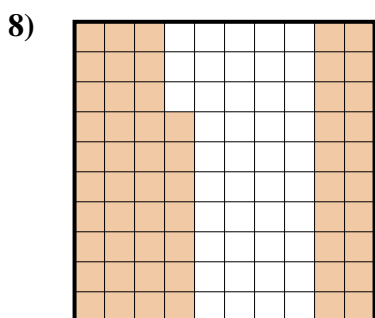
- A. 0.9
- B. 90
- C. 0.09
- D. 900.00




- A. 470.00
- B. 0.47
- C. 4.7
- D. 47



- A. 200.0
- B. 200.00
- C. 20
- D. 0.2



- A. 5.7
- B. 0.57
- C. 57
- D. 0.057



- A. 0.5
- B. 500.00
- C. 5
- D. 0.05

1. _____

2. _____

3. _____

4. _____

5. _____

6. _____


7. _____

8. _____


9. _____




Determine which letter best represents the amount shaded of the whole.



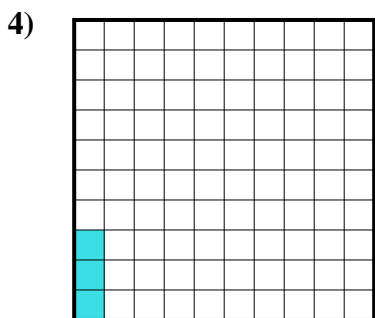
- A. 6
- B. 0.6
- C. 0.06
- D. 600.00



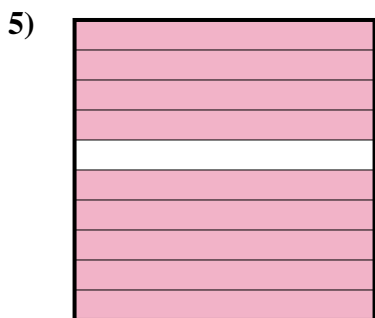
- A. 0.08
- B. 8
- C. 80
- D. 0.8



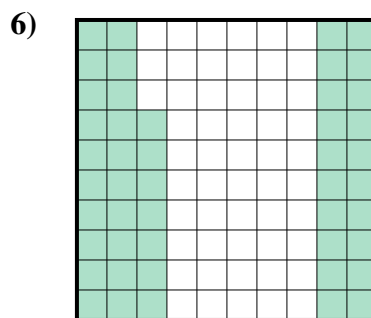
- A. 70
- B. 0.07
- C. 700.00
- D. 0.7



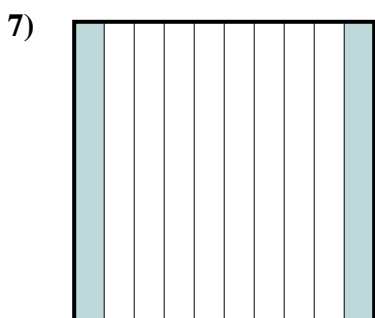
- A. 0.3
- B. 0.003
- C. 0.03
- D. 3



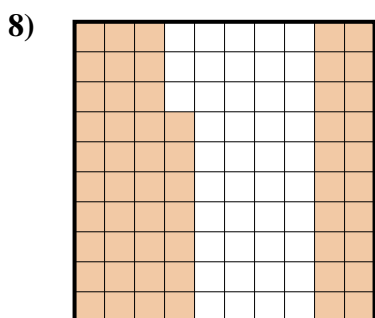
- A. 0.9
- B. 90
- C. 0.09
- D. 900.00




- A. 470.00
- B. 0.47
- C. 4.7
- D. 47



- A. 200.0
- B. 200.00
- C. 20
- D. 0.2



- A. 5.7
- B. 0.57
- C. 57
- D. 0.057



- A. 0.5
- B. 500.00
- C. 5
- D. 0.05

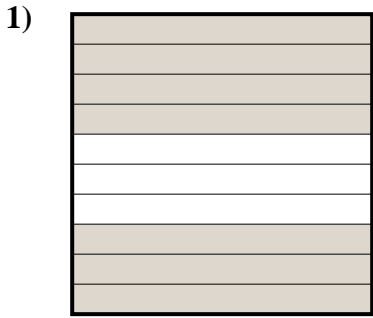
Answers

- 1. **B**
- 2. **D**
- 3. **D**
- 4. **C**
- 5. **A**
- 6. **B**
- 7. **D**
- 8. **B**
- 9. **A**

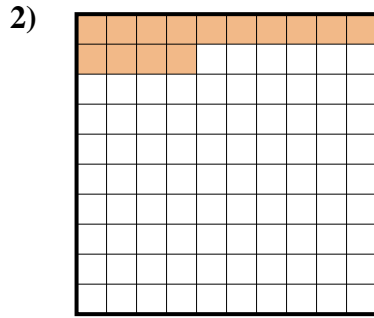


Determine which letter best represents the amount shaded of the whole.

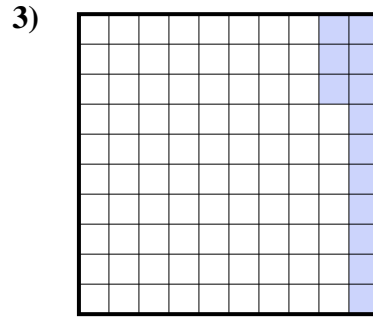
Answers




- A. 0.7
- B. 0.07
- C. 700.0
- D. 7



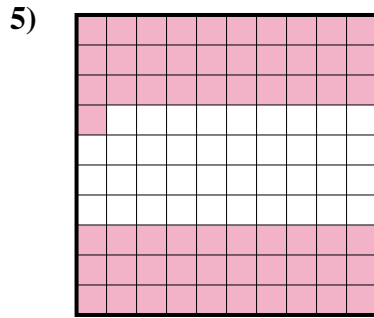
- A. 14
- B. 1.4
- C. 140.0
- D. 0.14



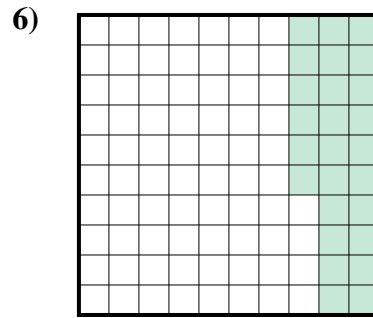
- A. 1.3
- B. 13
- C. 0.13
- D. 0.013



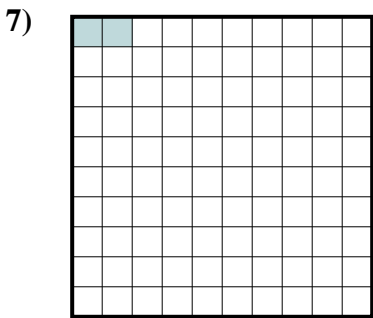
- A. 0.09
- B. 90
- C. 0.9
- D. 900.00



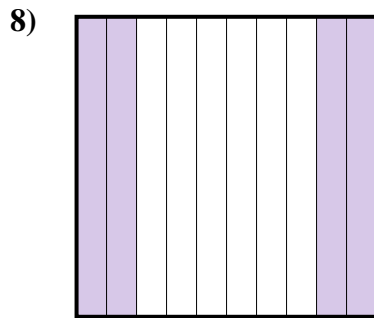
- A. 6.1
- B. 0.61
- C. 610.0
- D. 0.061



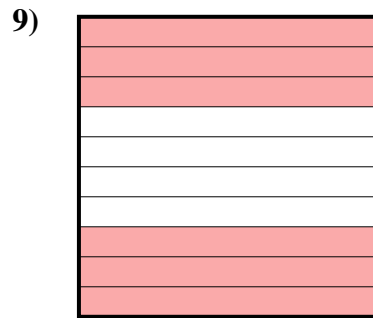
- A. 26
- B. 260.0
- C. 0.26
- D. 0.026



- A. 20.0
- B. 0.2
- C. 0.02
- D. 20.00



- A. 40
- B. 400.0
- C. 0.4
- D. 0.04




- A. 600.00
- B. 60
- C. 0.6
- D. 0.06

- 1. _____
- 2. _____
- 3. _____
- 4. _____
- 5. _____
- 6. _____
- 7. _____
- 8. _____
- 9. _____

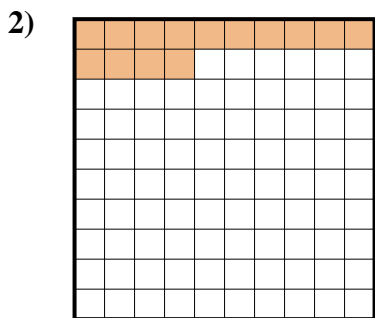


Determine which letter best represents the amount shaded of the whole.

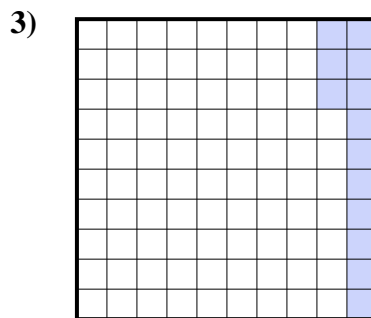
Answers




- A. 0.7
- B. 0.07
- C. 700.0
- D. 7



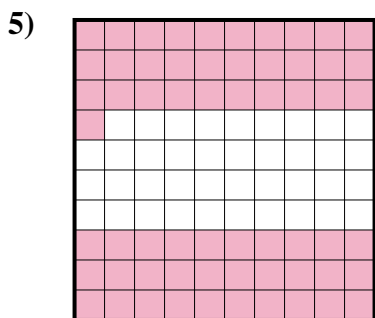
- A. 14
- B. 1.4
- C. 140.0
- D. 0.14



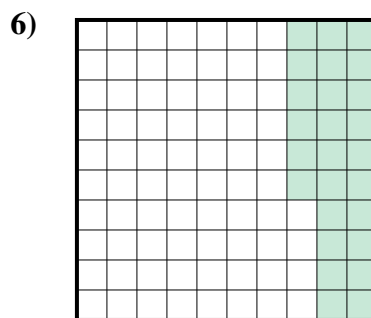
- A. 1.3
- B. 13
- C. 0.13
- D. 0.013



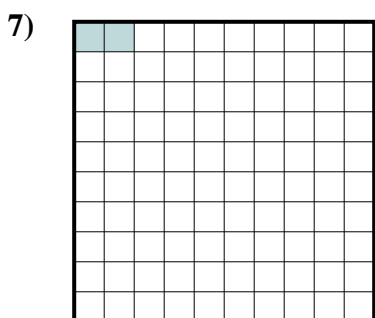
- A. 0.09
- B. 90
- C. 0.9
- D. 900.00



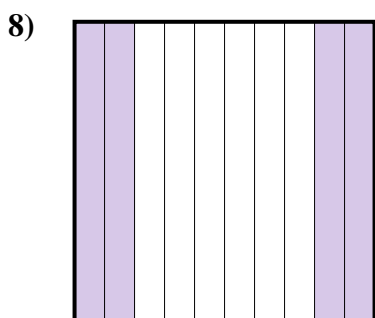
- A. 6.1
- B. 0.61
- C. 610.0
- D. 0.061



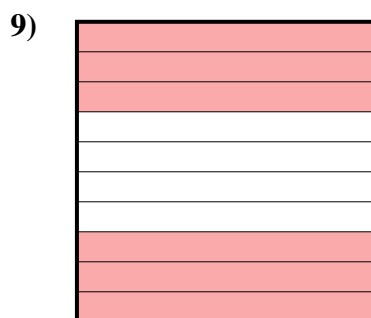
- A. 26
- B. 260.0
- C. 0.26
- D. 0.026



- A. 20.0
- B. 0.2
- C. 0.02
- D. 20.00



- A. 40
- B. 400.0
- C. 0.4
- D. 0.04




- A. 600.00
- B. 60
- C. 0.6
- D. 0.06

- 1. **A**
- 2. **D**
- 3. **C**
- 4. **C**
- 5. **B**
- 6. **C**
- 7. **C**
- 8. **C**
- 9. **C**

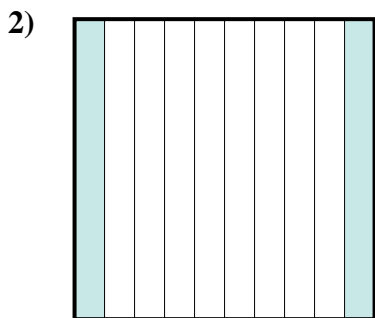


Determine which letter best represents the amount shaded of the whole.

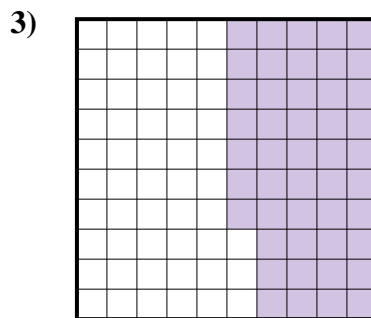
Answers



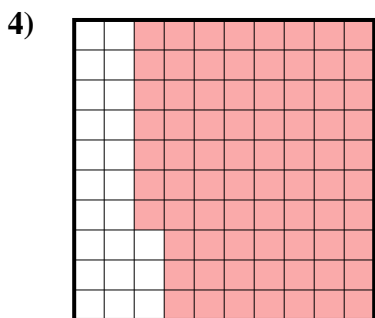
- A. 0.6
- B. 600.00
- C. 600.0
- D. 6




- A. 2
- B. 200.00
- C. 20
- D. 0.2



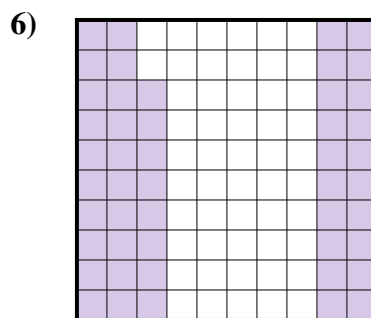
- A. 470.00
- B. 0.047
- C. 0.47
- D. 47



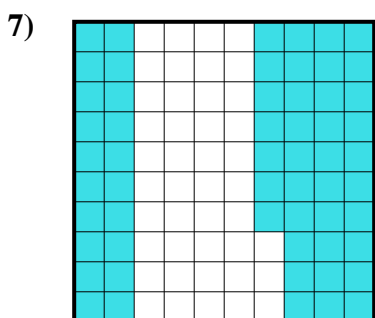
- A. 77
- B. 770.00
- C. 0.077
- D. 0.77



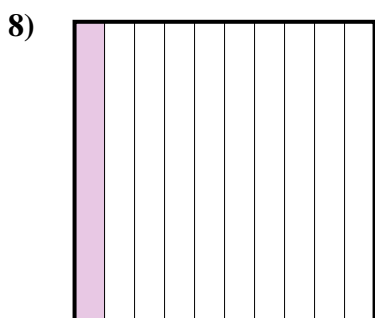
- A. 700.0
- B. 70
- C. 0.7
- D. 0.07



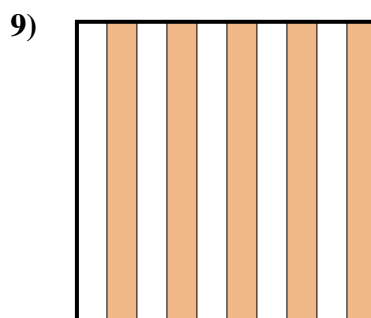
- A. 48
- B. 480.00
- C. 480.0
- D. 0.48



- A. 5.7
- B. 570.00
- C. 0.57
- D. 57



- A. 1
- B. 0.1
- C. 10
- D. 100.0



- A. 0.5
- B. 50
- C. 500.00
- D. 5

1. _____

2. _____

3. _____

4. _____

5. _____

6. _____

7. _____

8. _____

9. _____

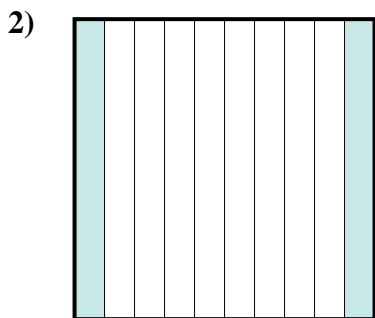


Determine which letter best represents the amount shaded of the whole.

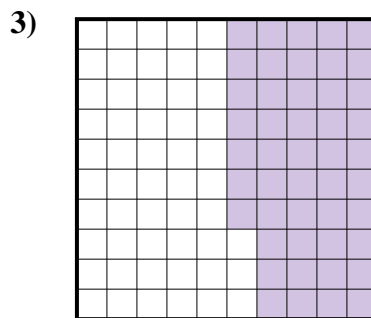
Answers



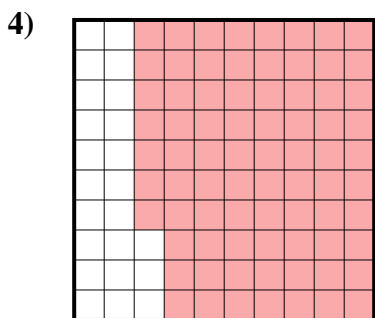
- A. 0.6
- B. 600.00
- C. 600.0
- D. 6




- A. 2
- B. 200.00
- C. 20
- D. 0.2



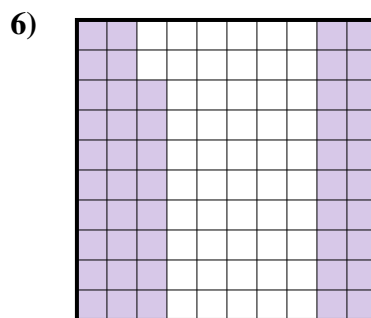
- A. 470.00
- B. 0.047
- C. 0.47
- D. 47



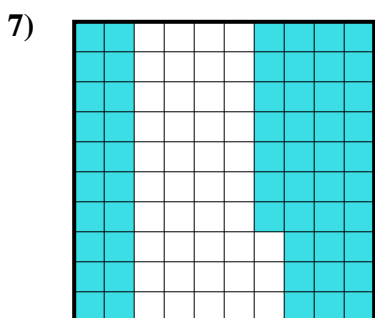
- A. 77
- B. 770.00
- C. 0.077
- D. 0.77



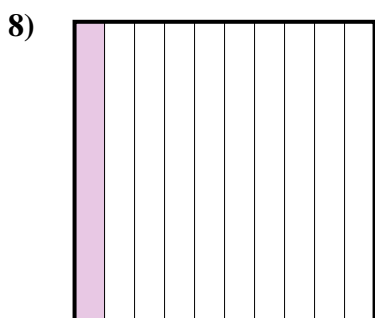
- A. 700.0
- B. 70
- C. 0.7
- D. 0.07



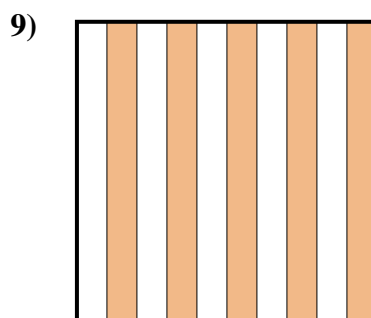
- A. 48
- B. 480.00
- C. 480.0
- D. 0.48



- A. 5.7
- B. 570.00
- C. 0.57
- D. 57



- A. 1
- B. 0.1
- C. 10
- D. 100.0



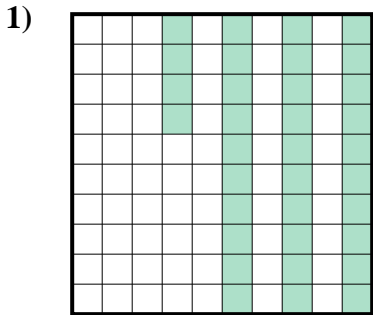
- A. 0.5
- B. 50
- C. 500.00
- D. 5

- 1. **A**
- 2. **D**
- 3. **C**
- 4. **D**
- 5. **C**
- 6. **D**
- 7. **C**
- 8. **B**
- 9. **A**

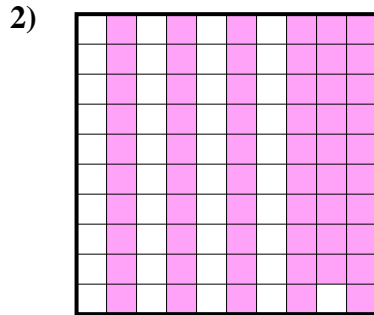


Determine which letter best represents the amount shaded of the whole.

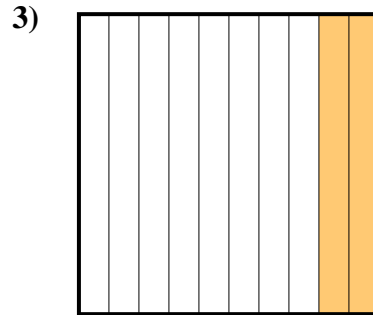
Answers



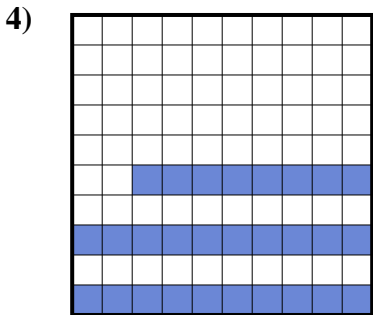
- A. 0.034
- B. 3.4
- C. 340.00
- D. 0.34




- A. 590.00
- B. 0.59
- C. 0.059
- D. 59



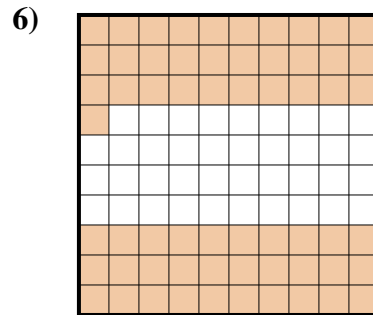
- A. 200.00
- B. 20
- C. 0.2
- D. 0.02



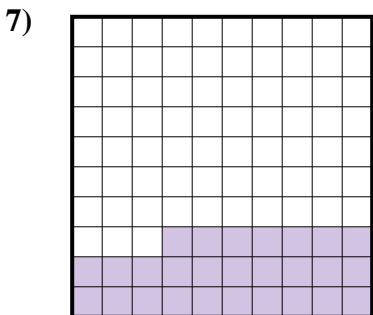
- A. 0.028
- B. 280.00
- C. 0.28
- D. 28




- A. 300.00
- B. 0.3
- C. 0.03
- D. 3



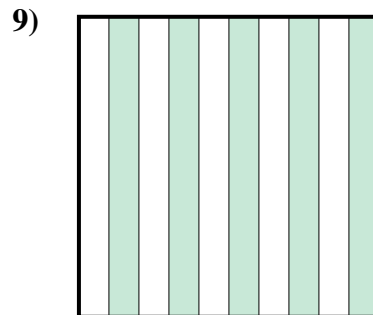
- A. 610.0
- B. 0.61
- C. 61
- D. 6.1



- A. 0.27
- B. 27
- C. 2.7
- D. 270.00



- A. 100.00
- B. 0.1
- C. 0.01
- D. 1



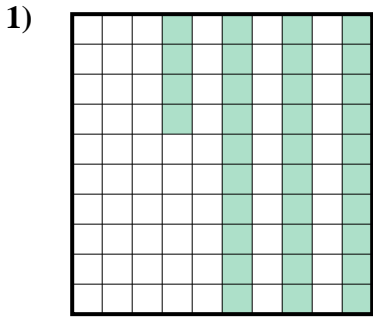
- A. 0.05
- B. 500.0
- C. 500.00
- D. 0.5

- 1. _____
- 2. _____
- 3. _____
- 4. _____
- 5. _____
- 6. _____
- 7. _____
- 8. _____
- 9. _____

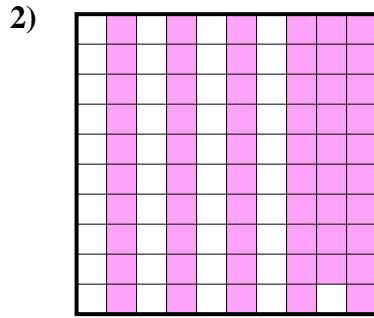


Determine which letter best represents the amount shaded of the whole.

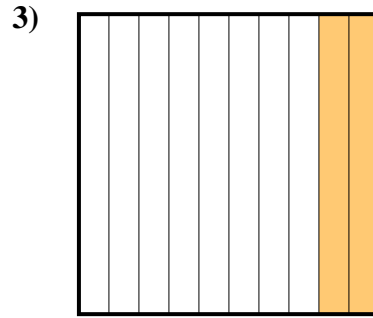
Answers



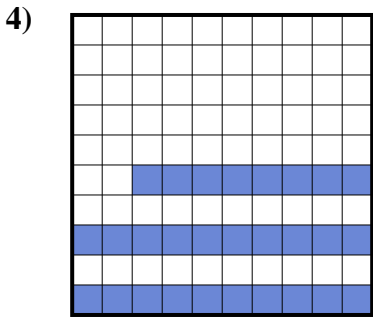
- A. 0.034
- B. 3.4
- C. 340.00
- D. 0.34



- A. 590.00
- B. 0.59
- C. 0.059
- D. 59



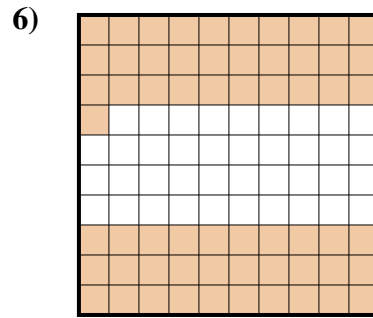
- A. 200.00
- B. 20
- C. 0.2
- D. 0.02



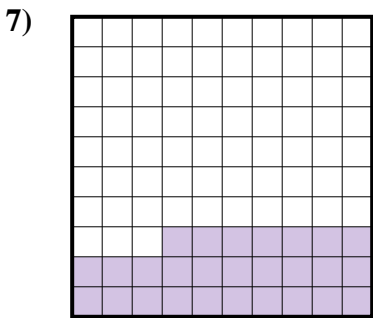
- A. 0.028
- B. 280.00
- C. 0.28
- D. 28




- A. 300.00
- B. 0.3
- C. 0.03
- D. 3



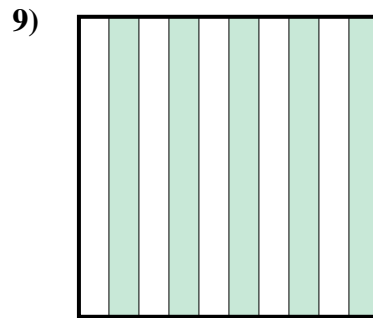
- A. 610.0
- B. 0.61
- C. 61
- D. 6.1



- A. 0.27
- B. 27
- C. 2.7
- D. 270.00



- A. 100.00
- B. 0.1
- C. 0.01
- D. 1



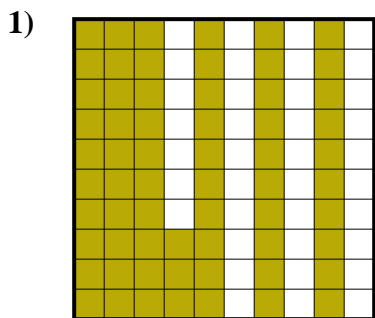
- A. 0.05
- B. 500.0
- C. 500.00
- D. 0.5

- 1. **D**
- 2. **B**
- 3. **C**
- 4. **C**
- 5. **B**
- 6. **B**
- 7. **A**
- 8. **B**
- 9. **D**

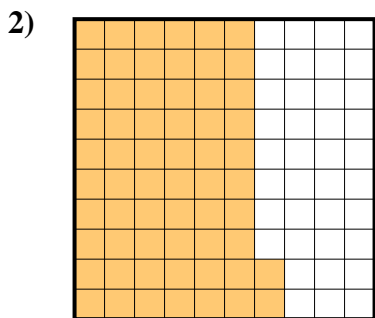


Determine which letter best represents the amount shaded of the whole.

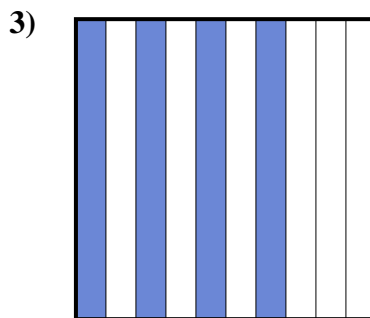
Answers



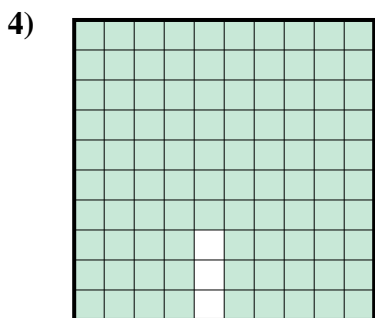
- A. 6.3
- B. 0.063
- C. 630.00
- D. 0.63



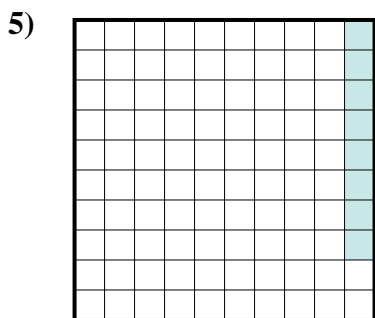
- A. 62
- B. 6.2
- C. 0.62
- D. 620.0



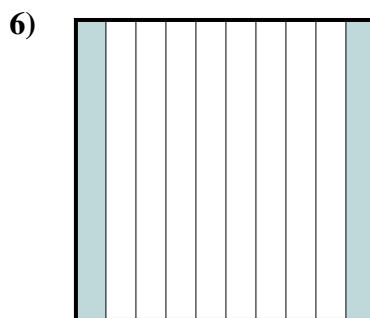
- A. 40
- B. 400.0
- C. 0.04
- D. 0.4



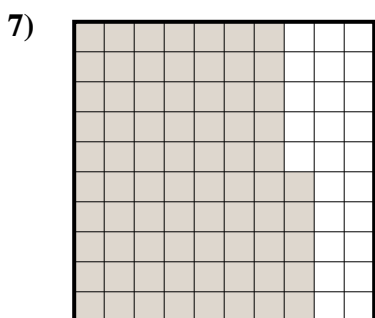
- A. 970.0
- B. 0.097
- C. 0.97
- D. 9.7



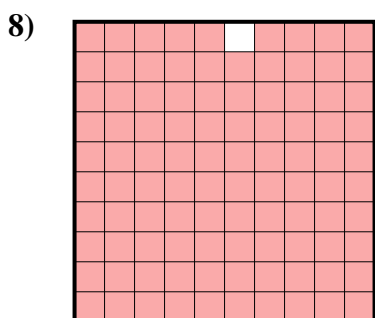
- A. 0.008
- B. 0.8
- C. 8
- D. 0.08




- A. 20
- B. 0.02
- C. 2
- D. 0.2



- A. 0.75
- B. 75
- C. 7.5
- D. 0.075



- A. 0.99
- B. 0.099
- C. 990.0
- D. 9.9



- A. 90
- B. 0.09
- C. 0.9
- D. 9

1. _____

2. _____

3. _____

4. _____

5. _____

6. _____

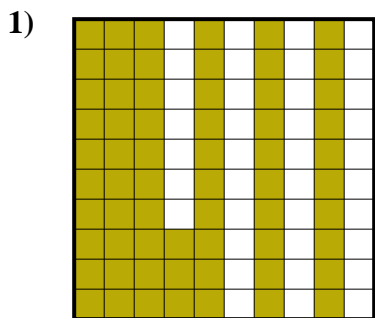
7. _____

8. _____

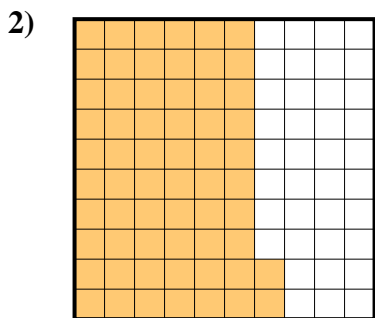
9. _____



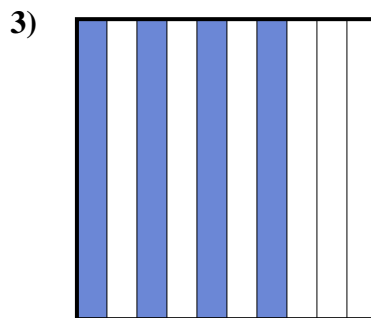
Determine which letter best represents the amount shaded of the whole.



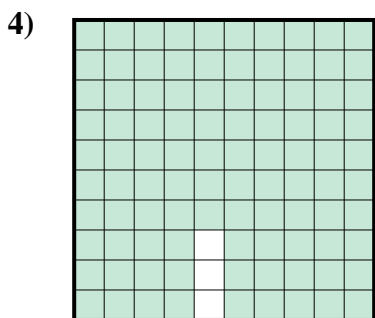
- A. 6.3
- B. 0.063
- C. 630.00
- D. 0.63



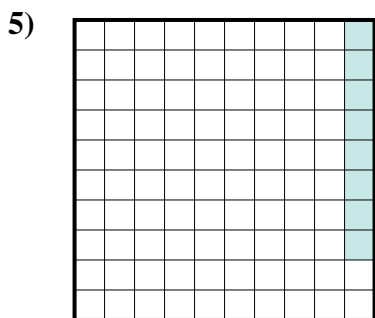
- A. 62
- B. 6.2
- C. 0.62
- D. 620.0



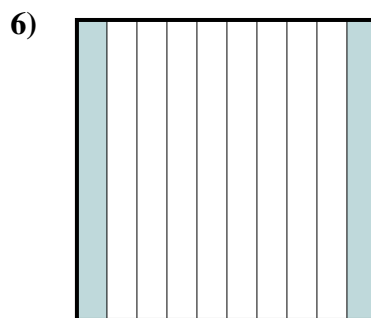
- A. 40
- B. 400.0
- C. 0.04
- D. 0.4



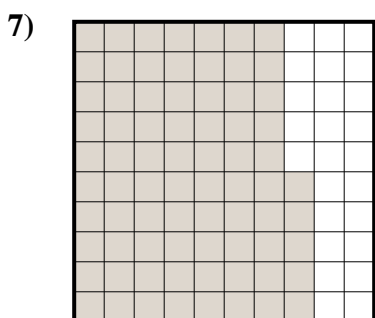
- A. 970.0
- B. 0.097
- C. 0.97
- D. 9.7



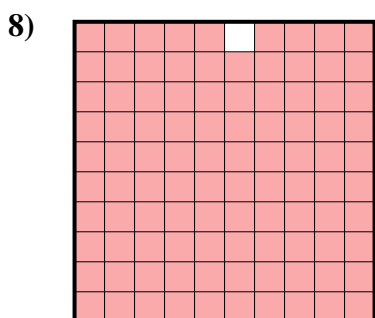
- A. 0.008
- B. 0.8
- C. 8
- D. 0.08




- A. 20
- B. 0.02
- C. 2
- D. 0.2



- A. 0.75
- B. 75
- C. 7.5
- D. 0.075



- A. 0.99
- B. 0.099
- C. 990.0
- D. 9.9



- A. 90
- B. 0.09
- C. 0.9
- D. 9

Answers

- 1. **D**
- 2. **C**
- 3. **D**
- 4. **C**
- 5. **D**
- 6. **D**
- 7. **A**
- 8. **A**
- 9. **C**