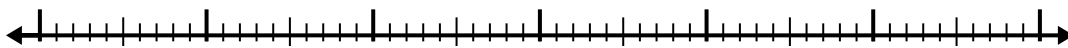





Use the number line to solve each problem.

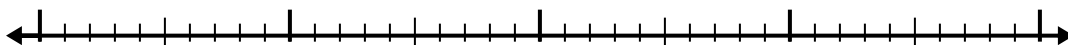
1) $6.6 - 3.1 =$



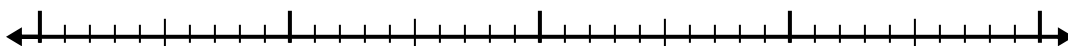
2) $6.3 - 3.9 =$



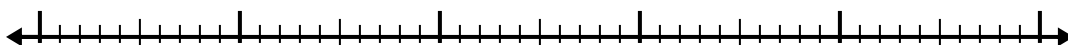
3) $5.8 - 2.9 =$



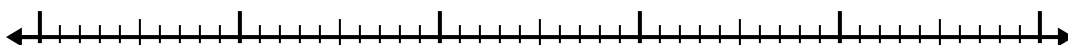
4) $3.5 - 1.4 =$



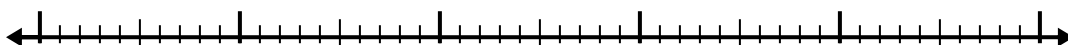
5) $4.8 - 3.1 =$




6) $4.3 - 2.9 =$



7) $6.6 - 3.8 =$



8) $12 - 3.2 =$



9) $3 - 1.3 =$



10) $4.2 - 1.8 =$



Answers

1. _____

2. _____

3. _____

4. _____

5. _____

6. _____

7. _____

8. _____

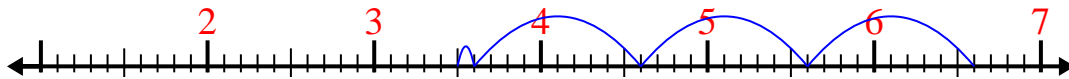
9. _____

10. _____

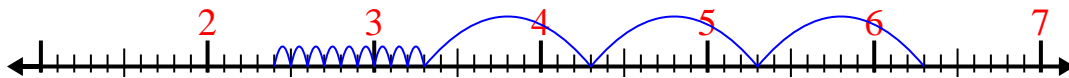


Use the number line to solve each problem.

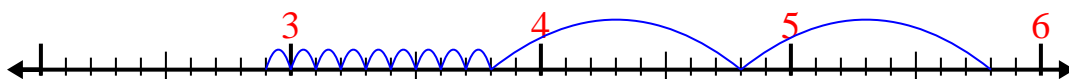
1) $6.6 - 3.1 =$



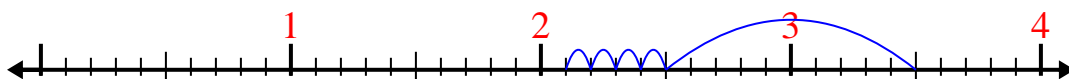
2) $6.3 - 3.9 =$



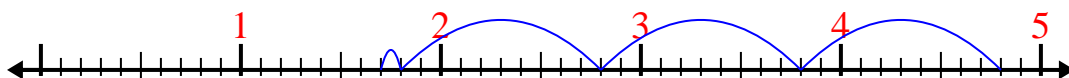
3) $5.8 - 2.9 =$



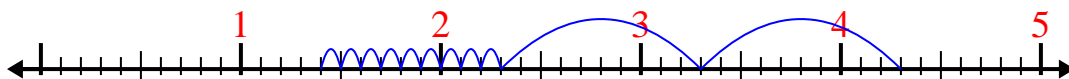
4) $3.5 - 1.4 =$



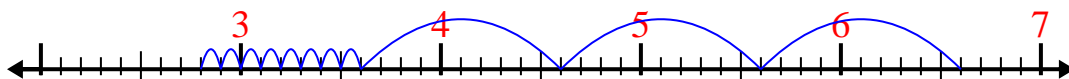
5) $4.8 - 3.1 =$




6) $4.3 - 2.9 =$



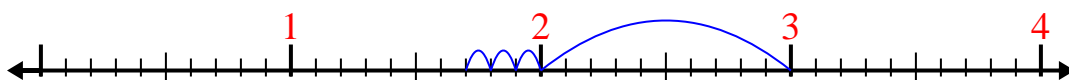
7) $6.6 - 3.8 =$



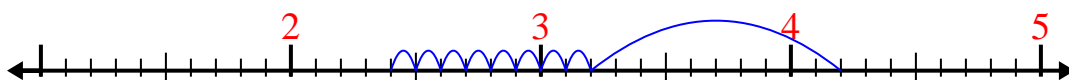
8) $12 - 3.2 =$



9) $3 - 1.3 =$



10) $4.2 - 1.8 =$

Answers1. 3.52. 2.43. 2.94. 2.15. 1.76. 1.47. 2.88. 8.89. 1.710. 2.4