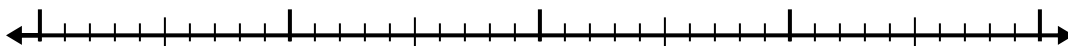


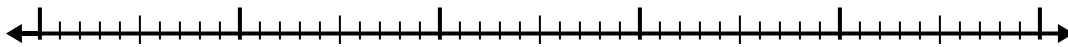


Use the number line to solve each problem.

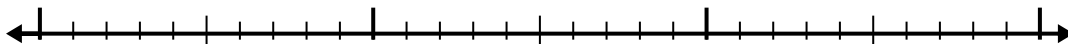
1) $4.5 - 2.5 =$



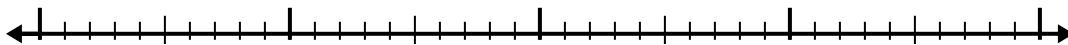
2) $4.9 - 3.6 =$



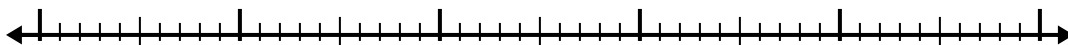
3) $3.4 - 1.9 =$



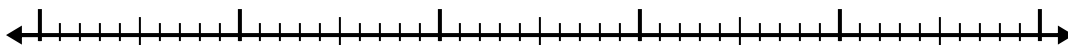
4) $4.6 - 2.4 =$



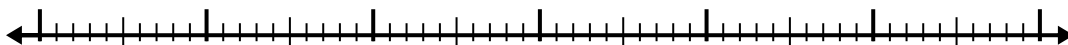
5) $9.2 - 3.9 =$



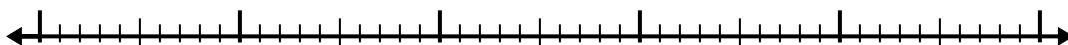
6) $9.4 - 2.4 =$



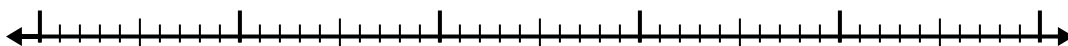
7) $11.4 - 3.7 =$




8) $10.7 - 3.3 =$



9) $10 - 2.9 =$



10) $11.5 - 3.8 =$



Answers

1. _____

2. _____

3. _____

4. _____

5. _____

6. _____

7. _____

8. _____

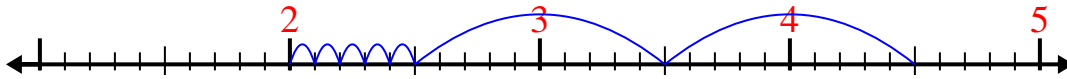
9. _____

10. _____

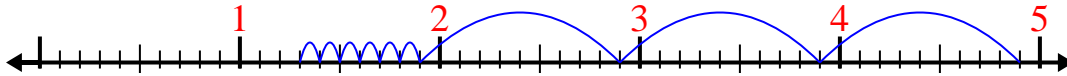


Use the number line to solve each problem.


1) $4.5 - 2.5 =$



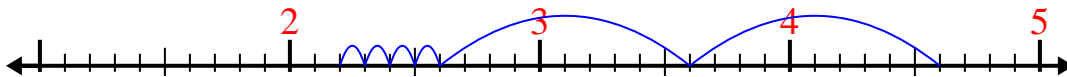
2) $4.9 - 3.6 =$



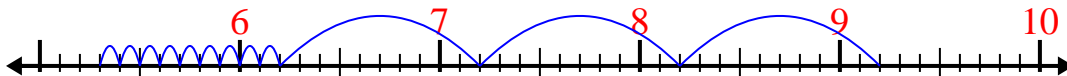
3) $3.4 - 1.9 =$



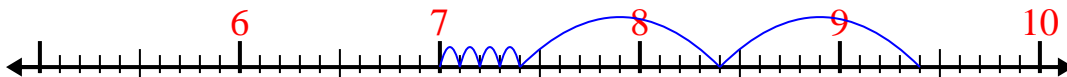
4) $4.6 - 2.4 =$



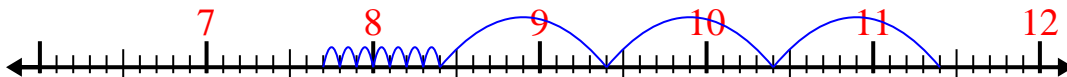
5) $9.2 - 3.9 =$



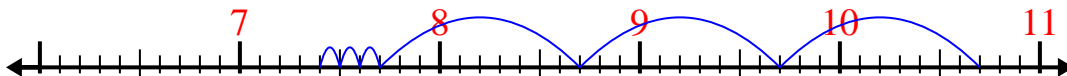
6) $9.4 - 2.4 =$



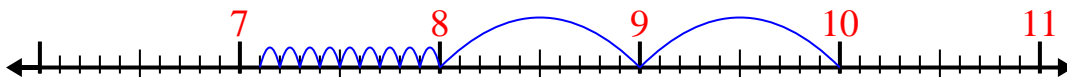
7) $11.4 - 3.7 =$



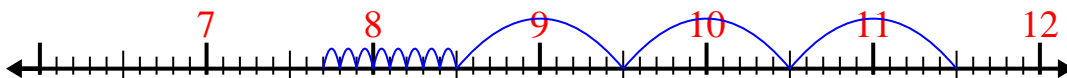
8) $10.7 - 3.3 =$



9) $10 - 2.9 =$



10) $11.5 - 3.8 =$

Answers1. 22. 1.33. 1.54. 2.25. 5.36. 77. 7.78. 7.49. 7.110. 7.7