




Use the number line to solve each problem.

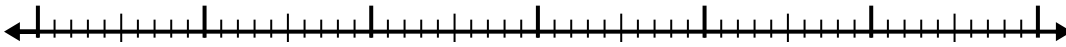
1) $5.8 - 3.1 =$



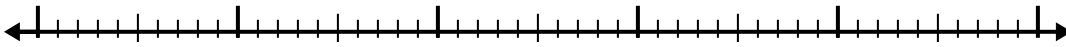
2) $7.4 - 2.3 =$



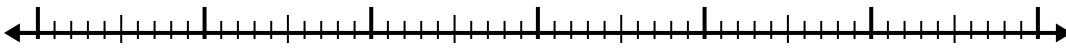
3) $10.3 - 3.1 =$



4) $6.9 - 3.7 =$



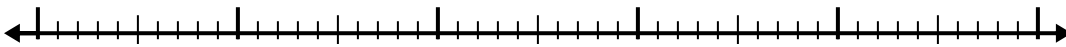
5) $11.2 - 3.6 =$




6) $4.5 - 2.7 =$



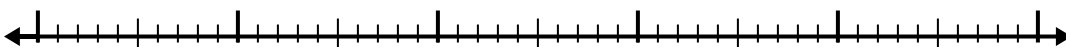
7) $4.1 - 2.4 =$



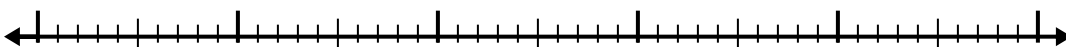
8) $12.4 - 3.6 =$



9) $11.5 - 2.6 =$



10) $9.2 - 3.9 =$



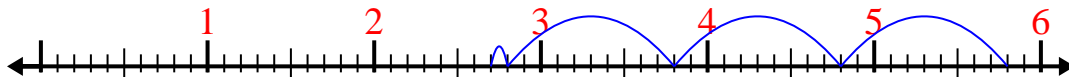
Answers

- 1. _____
- 2. _____
- 3. _____
- 4. _____
- 5. _____
- 6. _____
- 7. _____
- 8. _____
- 9. _____
- 10. _____

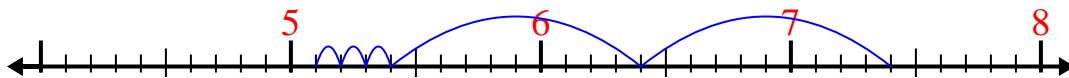


Use the number line to solve each problem.

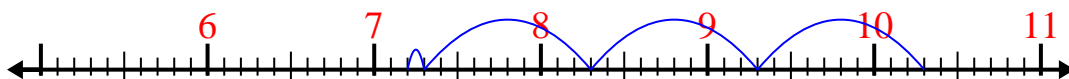
1) $5.8 - 3.1 =$



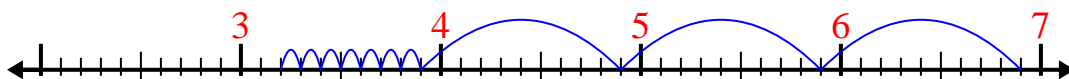
2) $7.4 - 2.3 =$



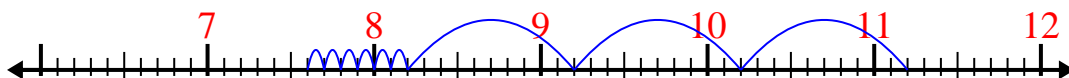
3) $10.3 - 3.1 =$



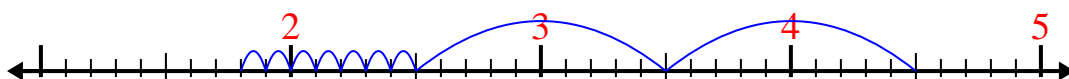
4) $6.9 - 3.7 =$



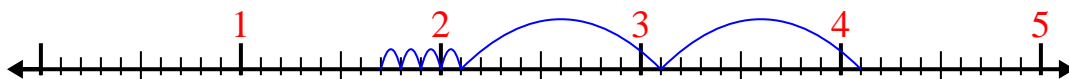
5) $11.2 - 3.6 =$



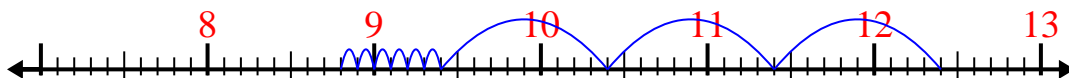
6) $4.5 - 2.7 =$



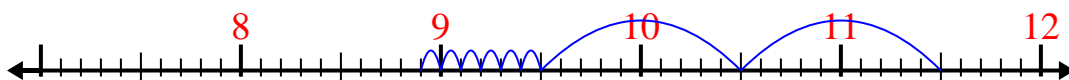
7) $4.1 - 2.4 =$



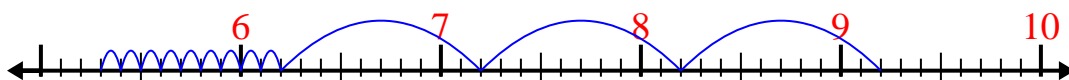
8) $12.4 - 3.6 =$



9) $11.5 - 2.6 =$



10) $9.2 - 3.9 =$

Answers1. 2.72. 5.13. 7.24. 3.25. 7.66. 1.87. 1.78. 8.89. 8.910. 5.3