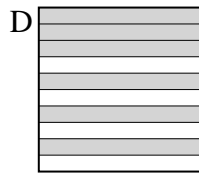
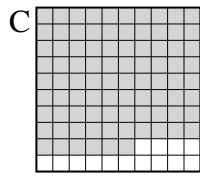
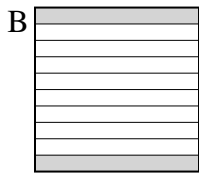
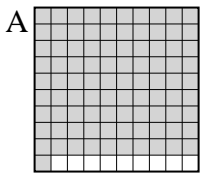




Put the boxes in order from least to greatest based on the shaded amount.

Answers

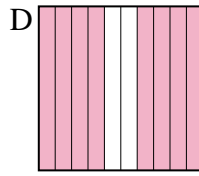
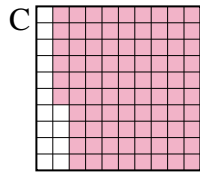
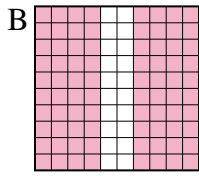
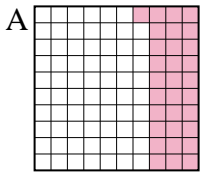
Ex)



small 0.2 - B
0.6 - D
0.86 - C
large 0.91 - A

Ex. B,D,C,A

1)



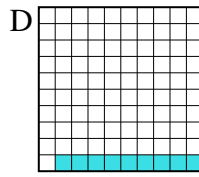
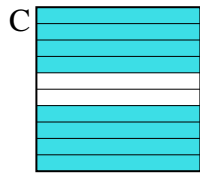
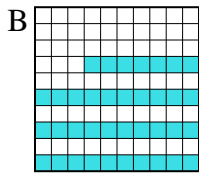
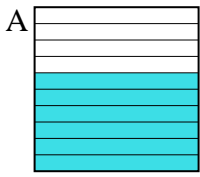
small _____
large _____

1. _____

2. _____

3. _____

2)

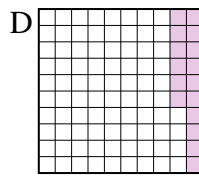
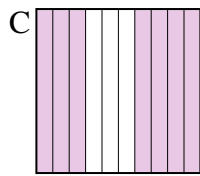
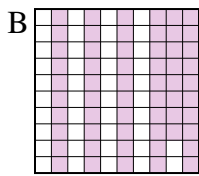
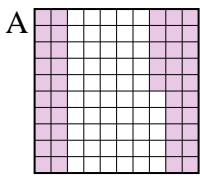


small _____
large _____

4. _____

5. _____

3)




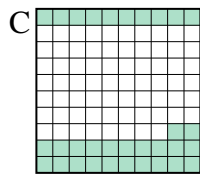
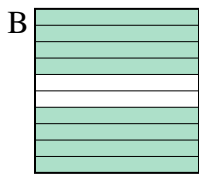
small _____
large _____

6. _____

7. _____

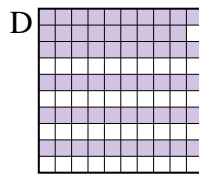
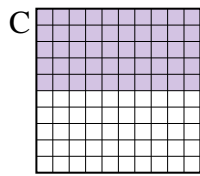
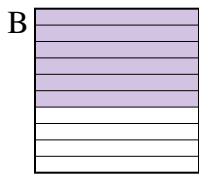
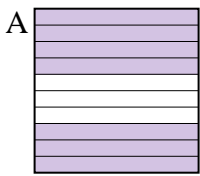
8. _____

4)





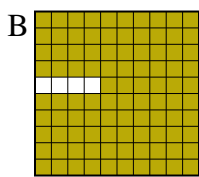

small _____
large _____

5)



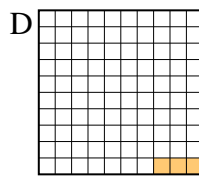
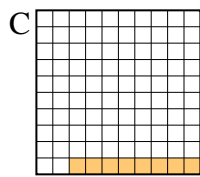
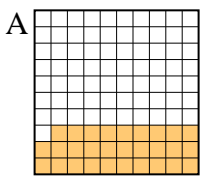
small _____
large _____

6)



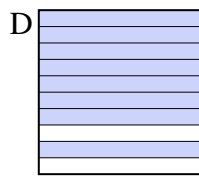
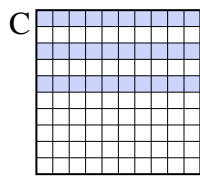
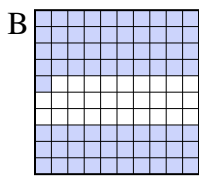
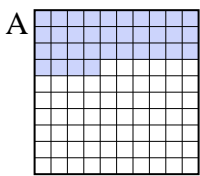
small _____
large _____

7)



small _____
large _____

8)



small _____
large _____



Put the boxes in order from least to greatest based on the shaded amount.

Ex) A B C D

small $\frac{0.2}{0.6} - B$
 $\frac{0.86}{0.91} - C$
 large

1) A B C D

small $\frac{0.31}{0.8} - A$
 $\frac{0.8}{0.8} - B$
 $\frac{0.8}{0.86} - C$
 large

2) A B C D

small $\frac{0.09}{0.37} - D$
 $\frac{0.6}{0.6} - A$
 large $\frac{0.8}{0.8} - C$

3) A B C D

small $\frac{0.16}{0.45} - D$
 $\frac{0.58}{0.7} - B$
 large

4) A B C D

small $\frac{0.2}{0.32} - D$
 $\frac{0.5}{0.5} - A$
 large $\frac{0.8}{0.8} - B$

5) A B C D

small $\frac{0.5}{0.59} - C$
 $\frac{0.6}{0.7} - B$
 large

6) A B C D

small $\frac{0.1}{0.7} - C$
 $\frac{0.9}{0.9} - A$
 large $\frac{0.96}{0.96} - B$

7) A B C D

small $\frac{0.03}{0.08} - D$
 $\frac{0.1}{0.1} - B$
 large $\frac{0.29}{0.29} - A$

8) A B C D

small $\frac{0.3}{0.34} - C$
 $\frac{0.71}{0.71} - B$
 large $\frac{0.8}{0.8} - D$

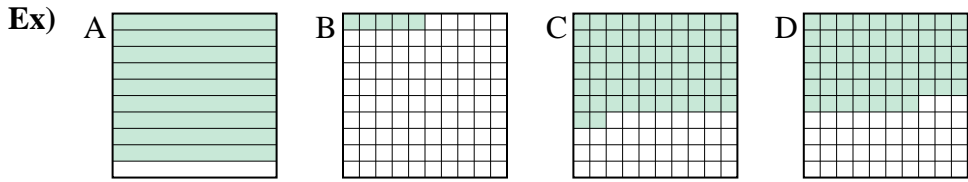
Answers

- Ex. B,D,C,A
1. A,B,B,C
2. D,B,A,C
3. D,A,B,C
4. D,C,A,B
5. C,D,B,A
6. C,D,A,B
7. D,C,B,A
8. C,A,B,D



Put the boxes in order from least to greatest based on the shaded amount.

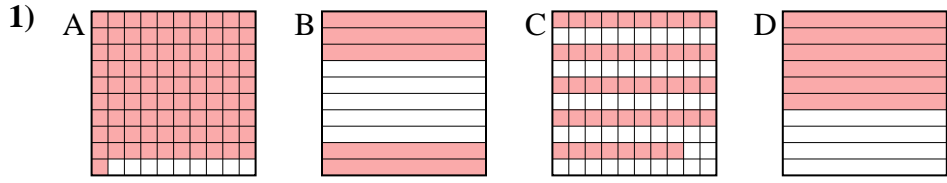
Answers



small 0.05 - B
0.57 - D
0.62 - C
 large 0.9 - A

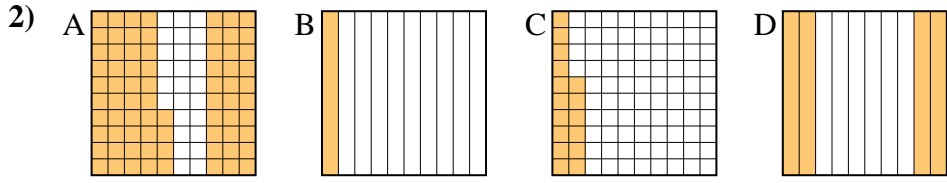
Ex. B,D,C,A

1. _____
2. _____
3. _____
4. _____
5. _____
6. _____
7. _____
8. _____



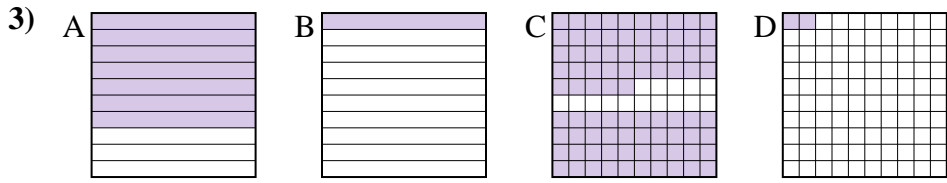
small _____

 large _____



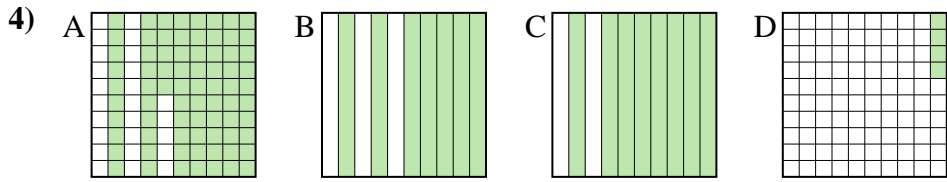
small _____

 large _____



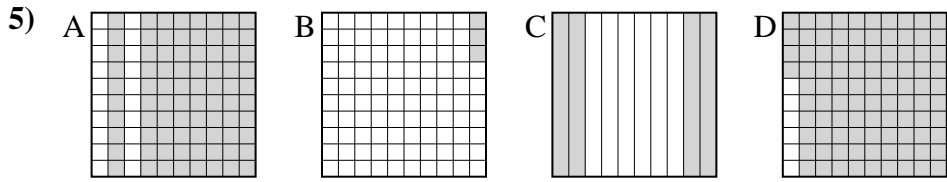
small _____

 large _____



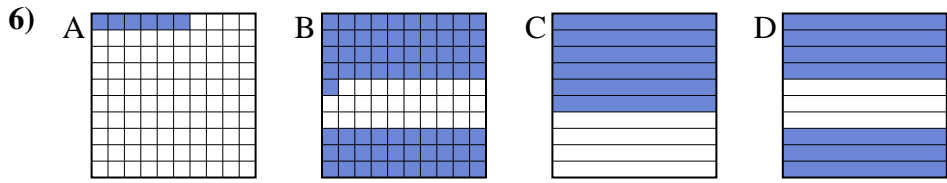
small _____

 large _____



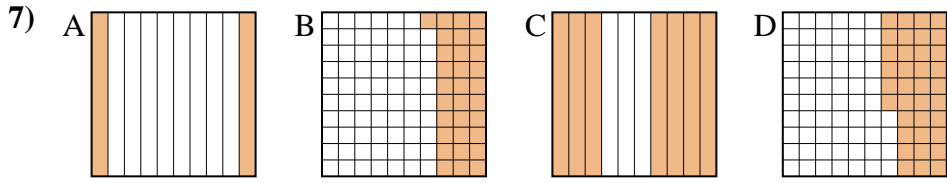
small _____

 large _____



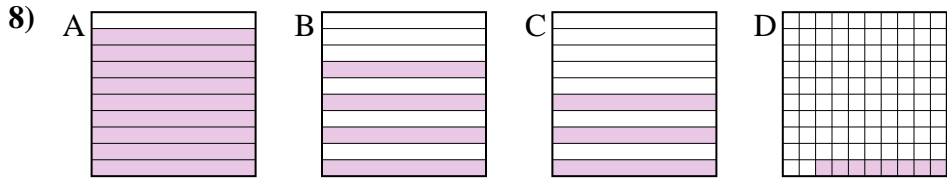
small _____

 large _____



small _____

 large _____


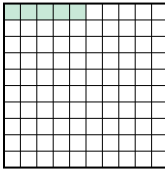




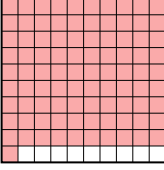

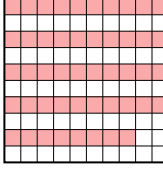

small _____

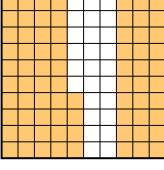
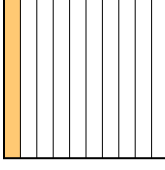
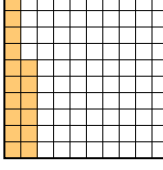
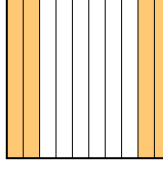
 large _____

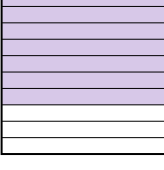

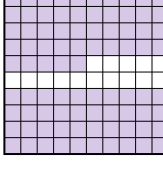






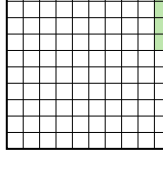
Put the boxes in order from least to greatest based on the shaded amount.



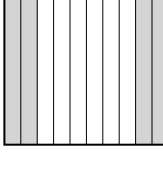

Ex) A  B  C  D  small $\frac{0.05}{0.57}$ - B
 $\frac{0.62}{0.9}$ - C
large $\frac{0.9}{0.05}$ - A


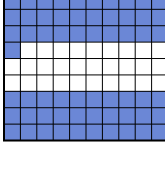


1) A  B  C  D  small $\frac{0.48}{0.5}$ - C
 $\frac{0.6}{0.91}$ - D
large $\frac{0.91}{0.48}$ - A

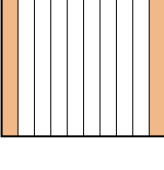
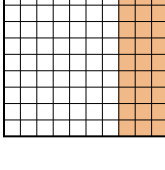
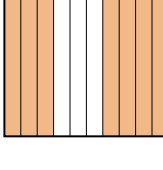
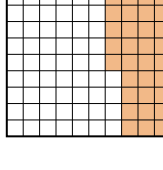
2) A  B  C  D  small $\frac{0.1}{0.16}$ - B
 $\frac{0.4}{0.74}$ - D
large $\frac{0.74}{0.1}$ - A




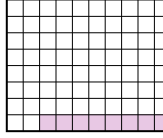
3) A  B  C  D  small $\frac{0.02}{0.1}$ - D
 $\frac{0.7}{0.85}$ - A
large $\frac{0.85}{0.02}$ - C

4) A  B  C  D  small $\frac{0.04}{0.7}$ - D
 $\frac{0.75}{0.8}$ - A
large $\frac{0.8}{0.04}$ - C

5) A  B  C  D  small $\frac{0.03}{0.4}$ - B
 $\frac{0.8}{0.94}$ - A
large $\frac{0.94}{0.03}$ - D

6) A  B  C  D  small $\frac{0.06}{0.6}$ - A
 $\frac{0.7}{0.71}$ - D
large $\frac{0.71}{0.06}$ - B

7) A  B  C  D  small $\frac{0.2}{0.31}$ - A
 $\frac{0.36}{0.7}$ - D
large $\frac{0.7}{0.2}$ - C

8) A  B  C  D  small $\frac{0.08}{0.3}$ - D
 $\frac{0.4}{0.9}$ - A
large $\frac{0.9}{0.08}$ - A

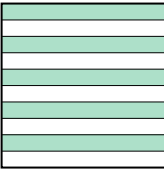
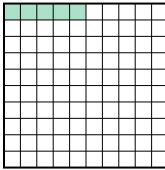
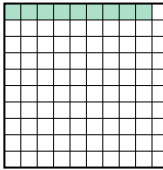

Answers

- Ex. **B,D,C,A**
1. **C,B,D,A**
2. **B,C,D,A**
3. **D,B,A,C**
4. **D,B,A,C**
5. **B,C,A,D**
6. **A,C,D,B**
7. **A,B,D,C**
8. **D,C,B,A**



Put the boxes in order from least to greatest based on the shaded amount.

Answers

Ex) A  B  C  D 

small 0.05 - B
0.09 - C
0.5 - A
large 0.6 - D

Ex. **B,C,A,D**

1. _____

2. _____

3. _____


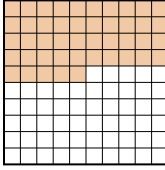
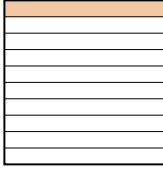
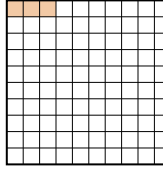
4. _____

5. _____

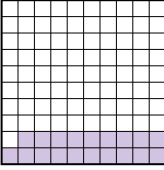

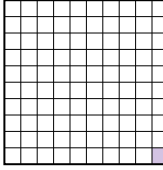
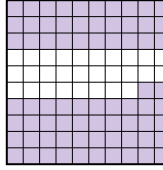
6. _____

7. _____

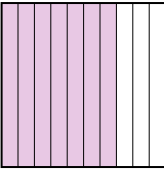
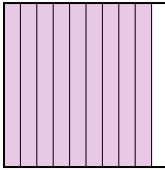

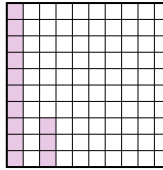
8. _____

1) A  B  C  D 




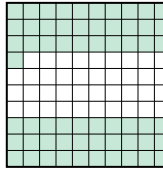
small _____
large _____

2) A  B  C  D 

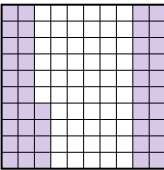

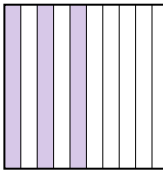
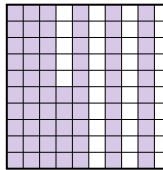
small _____
large _____

3) A  B  C  D 

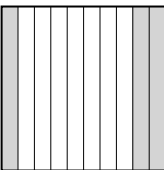

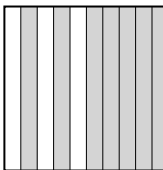

small _____
large _____

4) A  B  C  D 

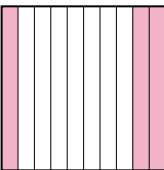

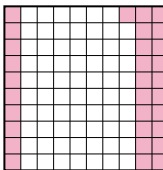
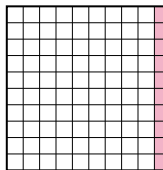
small _____
large _____

5) A  B  C  D 


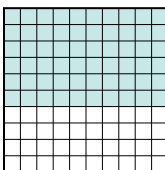

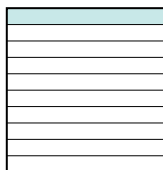
small _____
large _____

6) A  B  C  D 

small _____
large _____

7) A  B  C  D 

small _____
large _____

8) A  B  C  D 

small _____
large _____



Put the boxes in order from least to greatest based on the shaded amount.

Ex) A B C D small $\frac{0.05}{0.09}{0.5}{0.6}$ - B - C - A - D

1) A B C D small $\frac{0.03}{0.1}{0.4}{0.45}$ - D - C - A - B

2) A B C D small $\frac{0.01}{0.19}{0.72}$ - C - A - D - B

3) A B C D small $\frac{0.13}{0.7}{0.83}$ - D - A - C - B

4) A B C D small $\frac{0.39}{0.61}{0.8}{0.92}$ - A - D - B - C

5) A B C D small $\frac{0.3}{0.44}{0.65}$ - C - A - D - B

6) A B C D small $\frac{0.03}{0.14}{0.3}{0.7}$ - D - B - A - C

7) A B C D small $\frac{0.1}{0.3}{0.31}$ - D - A - C - B

8) A B C D small $\frac{0.1}{0.6}{0.7}{0.9}$ - D - B - A - C

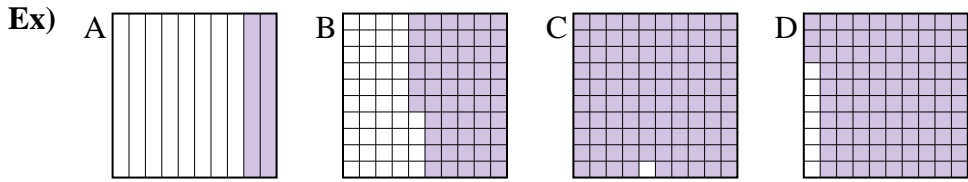
Answers

- Ex. B,C,A,D
1. D,C,A,B
2. C,A,D,B
3. D,A,C,B
4. A,D,B,C
5. C,A,D,B
6. D,B,A,C
7. D,A,C,B
8. D,B,A,C



Put the boxes in order from least to greatest based on the shaded amount.

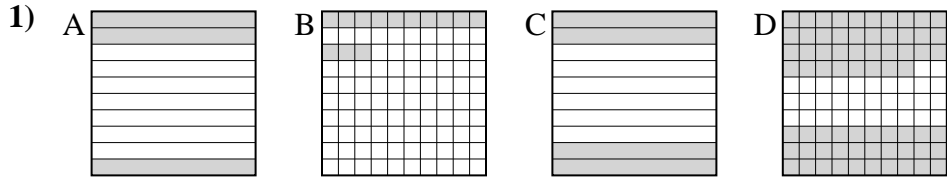
Answers



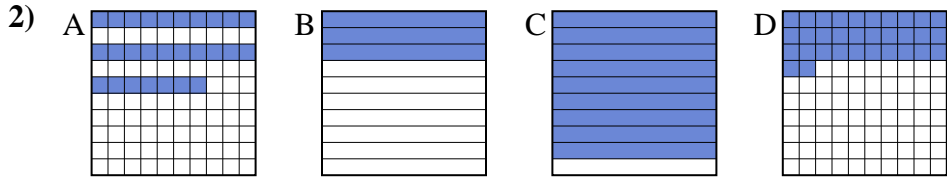
small 0.2 - A
0.56 - B
0.93 - D
 large 0.99 - C

Ex. A,B,D,C

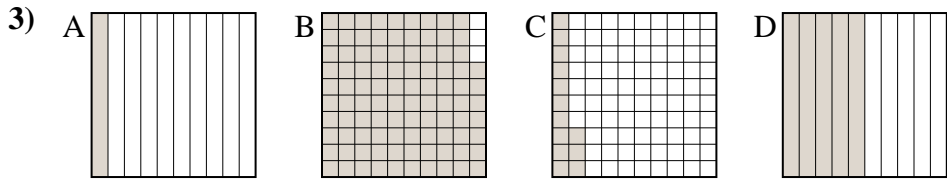
1. _____
2. _____
3. _____
4. _____
5. _____
6. _____
7. _____
8. _____



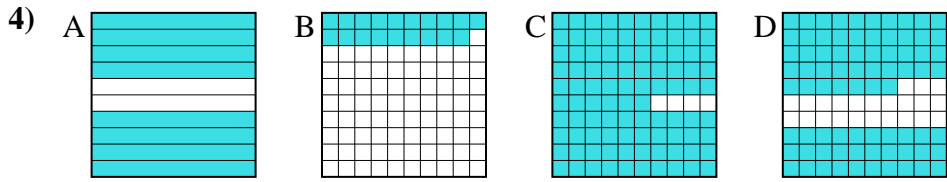
small _____
 large _____



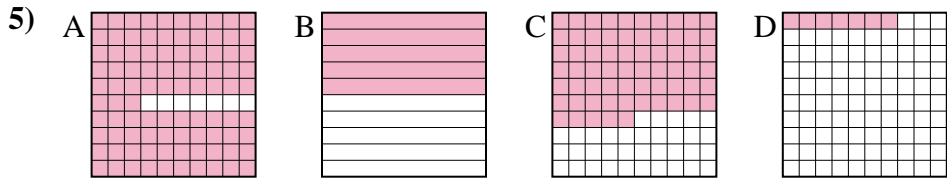
small _____
 large _____



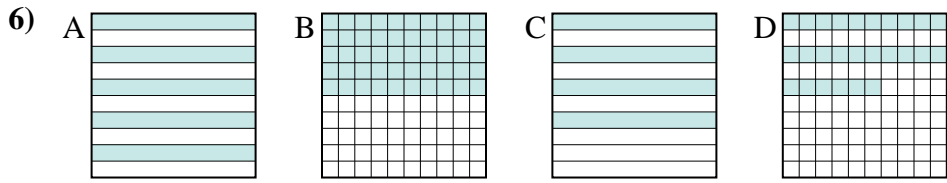
small _____
 large _____



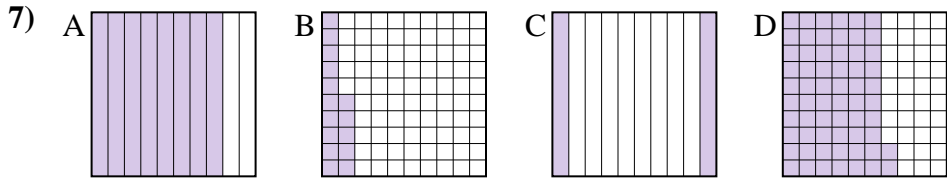
small _____
 large _____



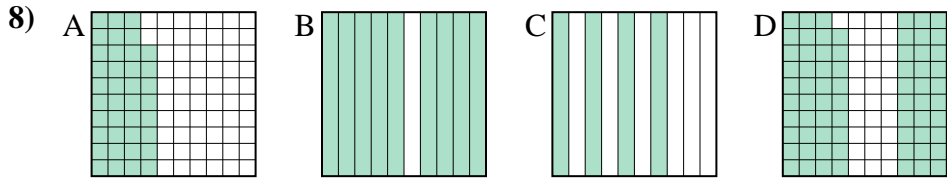
small _____
 large _____



small _____
 large _____



small _____
 large _____



small _____
 large _____



Put the boxes in order from least to greatest based on the shaded amount.

Ex) A B C D small $\frac{0.2}{0.56} - A$
large $\frac{0.93}{0.99} - C$

1) A B C D small $\frac{0.13}{0.3} - B$
large $\frac{0.4}{0.68} - D$

2) A B C D small $\frac{0.27}{0.3} - A$
large $\frac{0.32}{0.9} - C$

3) A B C D small $\frac{0.1}{0.13} - A$
large $\frac{0.5}{0.97} - B$

4) A B C D small $\frac{0.19}{0.77} - B$
large $\frac{0.8}{0.96} - A$

5) A B C D small $\frac{0.07}{0.5} - D$
large $\frac{0.65}{0.93} - C$

6) A B C D small $\frac{0.26}{0.4} - D$
large $\frac{0.5}{0.5} - A$

7) A B C D small $\frac{0.15}{0.2} - B$
large $\frac{0.62}{0.8} - D$

8) A B C D small $\frac{0.38}{0.4} - A$
large $\frac{0.69}{0.9} - B$

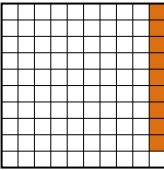
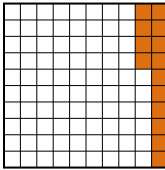

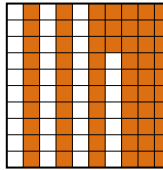
Answers

- Ex. A,B,D,C
1. B,A,C,D
2. A,B,D,C
3. A,C,D,B
4. B,D,A,C
5. D,B,C,A
6. D,C,A,A
7. B,C,D,A
8. A,C,D,B



Put the boxes in order from least to greatest based on the shaded amount.

Answers

Ex) A  B  C  D  small 0.09 - A
0.14 - B
0.2 - C
large 0.63 - D

Ex. A,B,C,D

1. _____

2. _____

3. _____



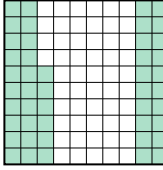

4. _____

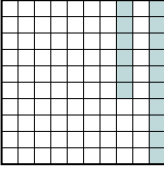
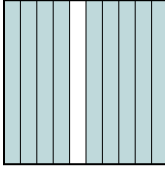
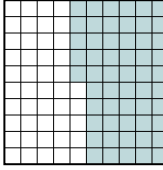
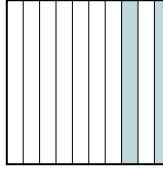
5. _____

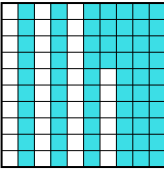
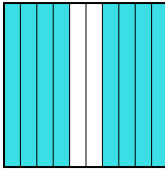


6. _____

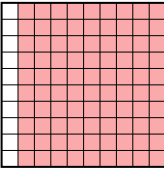
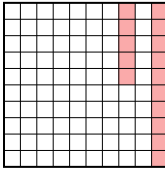
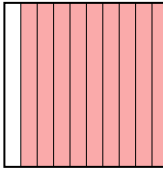
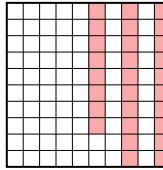
7. _____


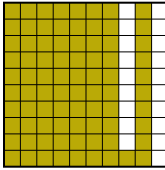
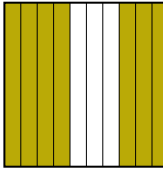

8. _____

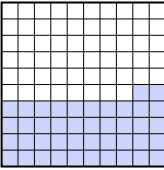

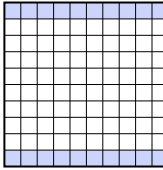

1) A  B  C  D  small _____
large _____

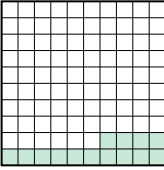

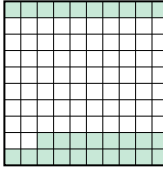

2) A  B  C  D  small _____
large _____


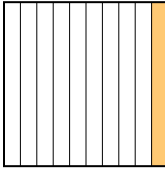
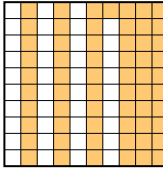
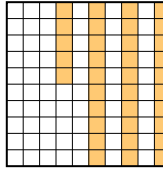
3) A  B  C  D  small _____
large _____

4) A  B  C  D  small _____
large _____

5) A  B  C  D  small _____
large _____

6) A  B  C  D  small _____
large _____

7) A  B  C  D  small _____
large _____

8) A  B  C  D  small _____
large _____



Put the boxes in order from least to greatest based on the shaded amount.

Ex) A B C D small $\frac{0.09 - A}{0.14 - B}$
large $\frac{0.2 - C}{0.63 - D}$

1) A B C D small $\frac{0.07 - B}{0.1 - D}$
large $\frac{0.2 - A}{0.46 - C}$

2) A B C D small $\frac{0.16 - A}{0.2 - D}$
large $\frac{0.55 - C}{0.9 - B}$

3) A B C D small $\frac{0.37 - D}{0.5 - C}$
large $\frac{0.64 - A}{0.8 - B}$

4) A B C D small $\frac{0.15 - B}{0.28 - D}$
large $\frac{0.9 - A}{0.9 - A}$

5) A B C D small $\frac{0.63 - A}{0.7 - C}$
large $\frac{0.8 - D}{0.81 - B}$

6) A B C D small $\frac{0.1 - B}{0.2 - C}$
large $\frac{0.42 - A}{0.9 - D}$

7) A B C D small $\frac{0.14 - A}{0.2 - B}$
large $\frac{0.28 - C}{0.8 - D}$

8) A B C D small $\frac{0.1 - B}{0.35 - D}$
large $\frac{0.61 - C}{0.64 - A}$

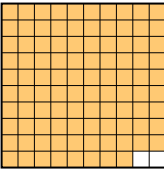
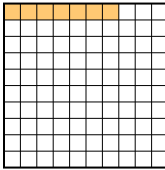

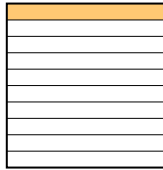
Answers

- Ex. A,B,C,D
1. B,D,A,C
2. A,D,C,B
3. D,C,A,B
4. B,D,A,A
5. A,C,D,B
6. B,C,A,D
7. A,B,C,D
8. B,D,C,A



Put the boxes in order from least to greatest based on the shaded amount.



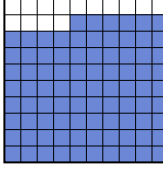
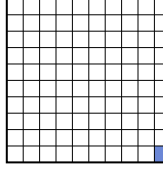
Answers

Ex) A  B  C  D 


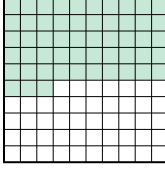

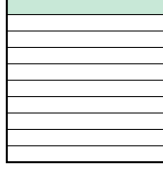
small 0.07 - B
0.1 - D
0.4 - C
 large 0.98 - A

Ex. B,D,C,A


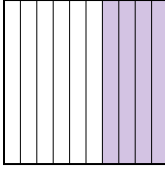
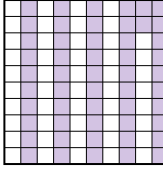
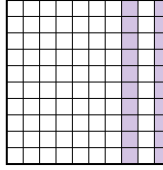
1. _____
2. _____
3. _____
4. _____
5. _____
6. _____
7. _____
8. _____

1) A  B  C  D 


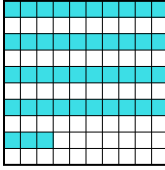


small _____
 large _____

2) A  B  C  D 


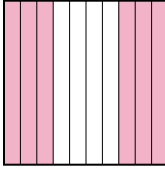
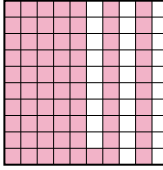
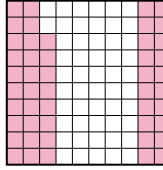
small _____
 large _____

3) A  B  C  D 

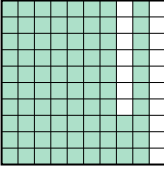
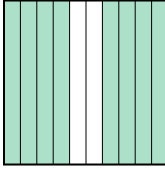
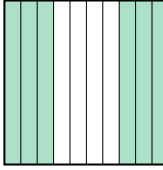

small _____
 large _____

4) A  B  C  D 


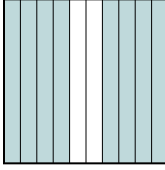

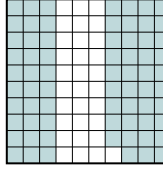
small _____
 large _____

5) A  B  C  D 


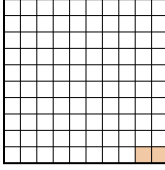
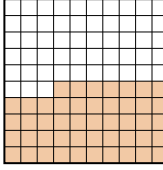
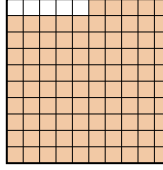
small _____
 large _____

6) A  B  C  D 

small _____
 large _____

7) A  B  C  D 

small _____
 large _____

8) A  B  C  D 

small _____
 large _____



Put the boxes in order from least to greatest based on the shaded amount.

Ex) A B C D

small $\frac{0.07 - B}{0.1 - D}$
 $\frac{0.4 - C}{0.98 - A}$

large

1) A B C D

small $\frac{0.01 - D}{0.3 - A}$
 $\frac{0.86 - C}{0.9 - B}$

large

2) A B C D

small $\frac{0.1 - D}{0.5 - A}$
 $\frac{0.53 - B}{0.8 - C}$

large

3) A B C D

small $\frac{0.2 - D}{0.4 - B}$
 $\frac{0.5 - A}{0.52 - C}$

large

4) A B C D

small $\frac{0.03 - A}{0.2 - C}$
 $\frac{0.43 - B}{0.9 - D}$

large

5) A B C D

small $\frac{0.1 - A}{0.48 - D}$
 $\frac{0.6 - B}{0.71 - C}$

large

6) A B C D

small $\frac{0.5 - D}{0.6 - C}$
 $\frac{0.8 - B}{0.83 - A}$

large

7) A B C D

small $\frac{0.69 - D}{0.7 - A}$
 $\frac{0.8 - B}{0.9 - C}$

large

8) A B C D

small $\frac{0.02 - B}{0.47 - C}$
 $\frac{0.7 - A}{0.95 - D}$

large

Answers

Ex. B,D,C,A

1. D,A,C,B

2. D,A,B,C

3. D,B,A,C

4. A,C,B,D

5. A,D,B,C

6. D,C,B,A

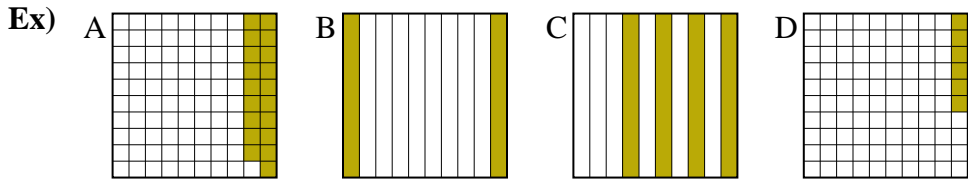
7. D,A,B,C

8. B,C,A,D



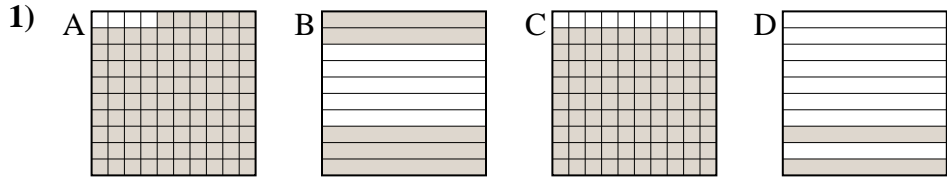
Put the boxes in order from least to greatest based on the shaded amount.

Answers



small 0.06 - D
0.19 - A
0.2 - B
 large 0.4 - C

Ex. D,A,B,C



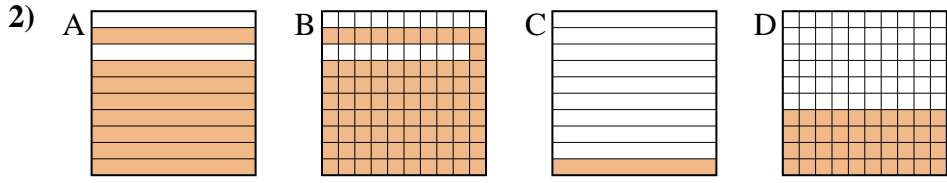
small _____

 large _____

1. _____

2. _____

3. _____

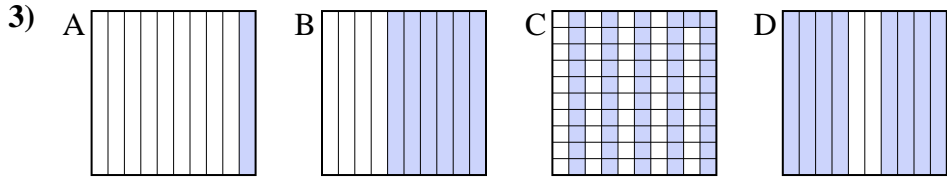


small _____

 large _____

4. _____

5. _____



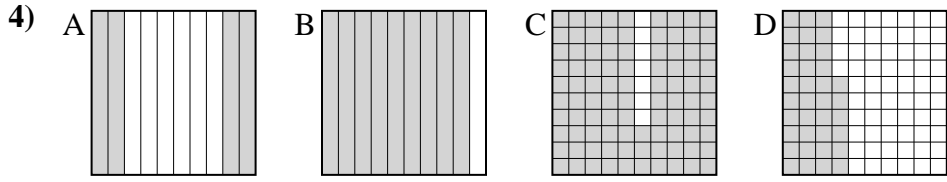
small _____

 large _____

6. _____

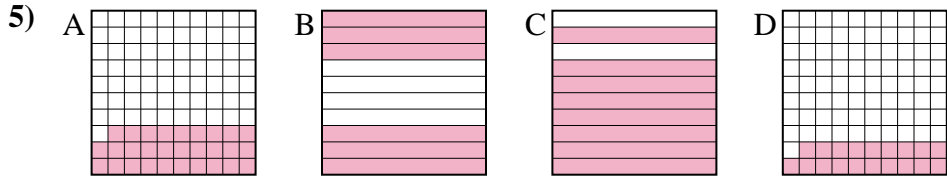
7. _____

8. _____



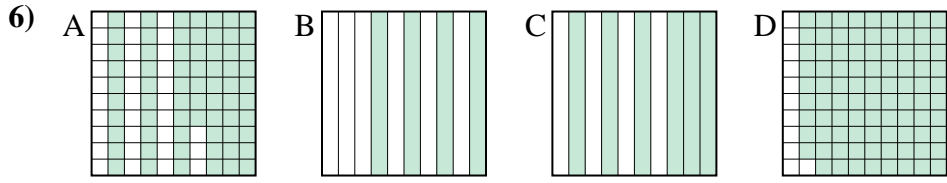
small _____

 large _____



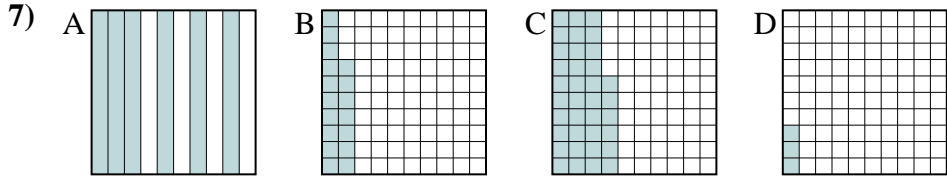
small _____

 large _____



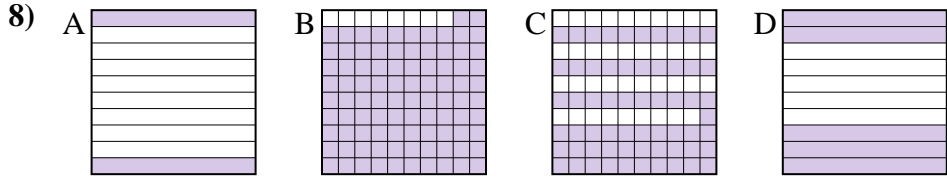
small _____

 large _____



small _____

 large _____

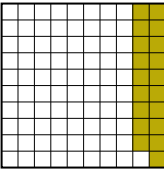


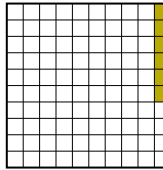




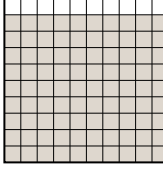

small _____

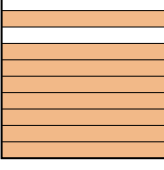
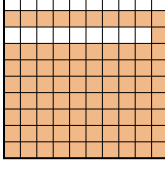

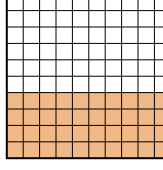
 large _____

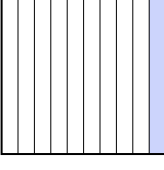

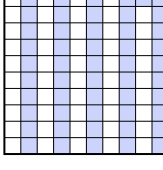
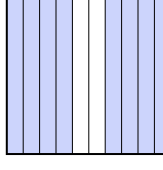


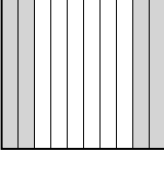
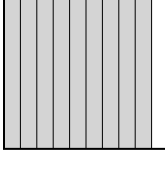


Put the boxes in order from least to greatest based on the shaded amount.

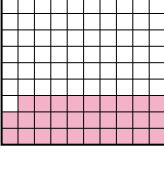


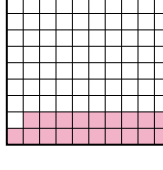
Ex) A  B  C  D  small $\frac{0.06 - D}{0.19 - A}$
large $\frac{0.2 - B}{0.4 - C}$


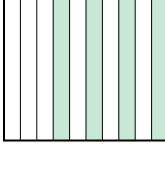
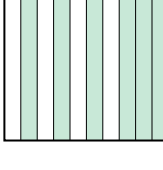

1) A  B  C  D  small $\frac{0.2 - D}{0.5 - B}$
large $\frac{0.9 - C}{0.96 - A}$

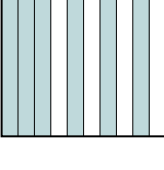

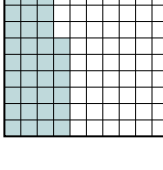
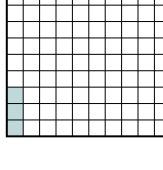
2) A  B  C  D  small $\frac{0.1 - C}{0.4 - D}$
large $\frac{0.8 - A}{0.81 - B}$



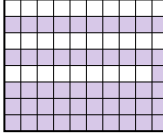

3) A  B  C  D  small $\frac{0.1 - A}{0.51 - C}$
large $\frac{0.6 - B}{0.8 - D}$

4) A  B  C  D  small $\frac{0.36 - D}{0.4 - A}$
large $\frac{0.9 - B}{0.93 - C}$

5) A  B  C  D  small $\frac{0.19 - D}{0.29 - A}$
large $\frac{0.6 - B}{0.8 - C}$

6) A  B  C  D  small $\frac{0.4 - B}{0.6 - C}$
large $\frac{0.67 - A}{0.89 - D}$

7) A  B  C  D  small $\frac{0.03 - D}{0.17 - B}$
large $\frac{0.36 - C}{0.6 - A}$

8) A  B  C  D  small $\frac{0.2 - A}{0.5 - D}$
large $\frac{0.61 - C}{0.92 - B}$

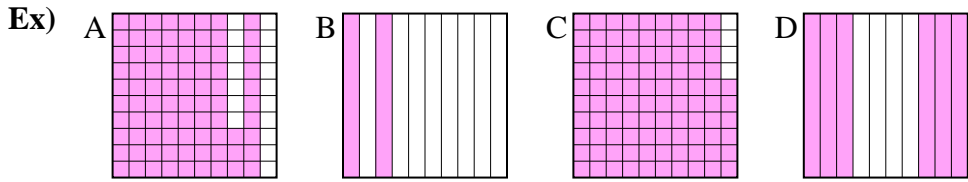
Answers

- Ex. D,A,B,C
1. D,B,C,A
2. C,D,A,B
3. A,C,B,D
4. D,A,B,C
5. D,A,B,C
6. B,C,A,D
7. D,B,C,A
8. A,D,C,B



Put the boxes in order from least to greatest based on the shaded amount.

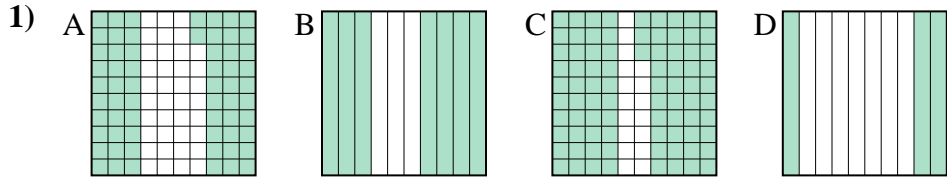
Answers



small 0.2 - B
0.6 - D
0.83 - A
 large 0.96 - C

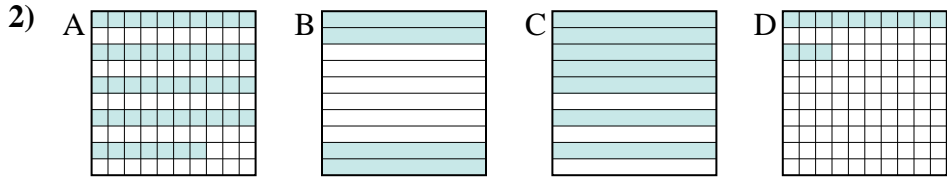
Ex. B,D,A,C

1. _____
2. _____
3. _____
4. _____
5. _____
6. _____
7. _____
8. _____



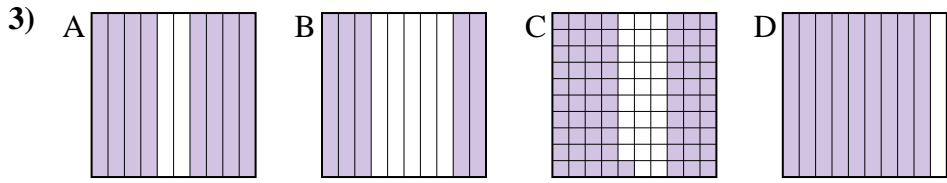
small _____

 large _____



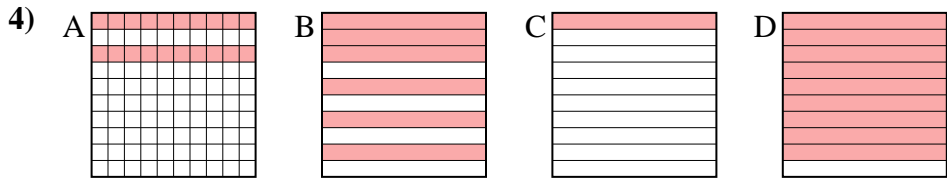
small _____

 large _____



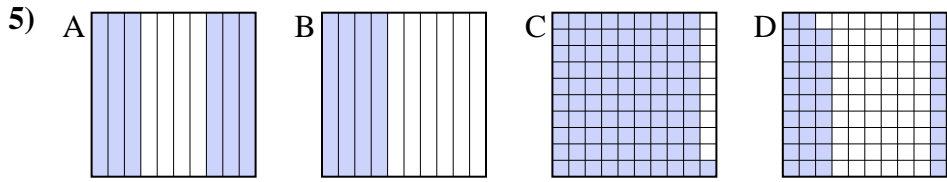
small _____

 large _____



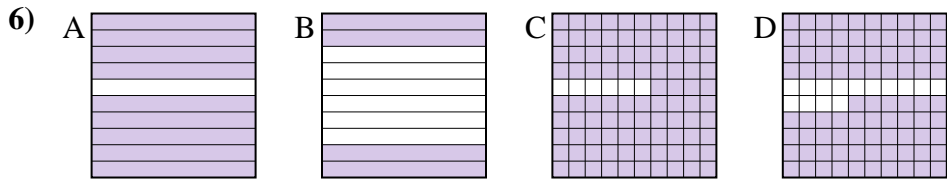
small _____

 large _____



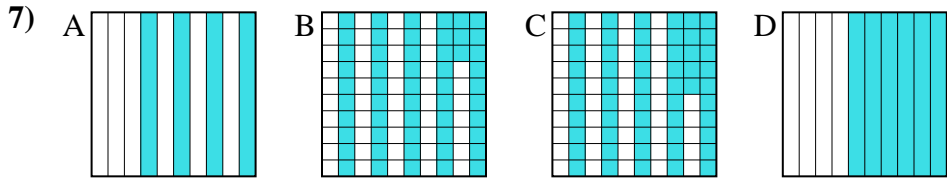
small _____

 large _____



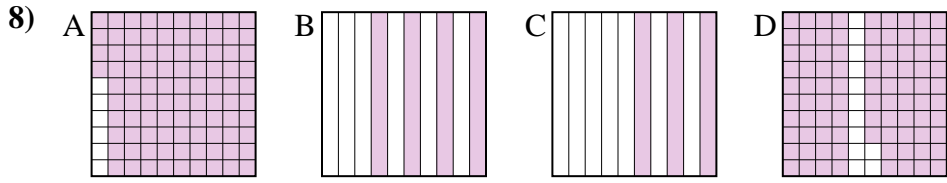
small _____

 large _____



small _____

 large _____


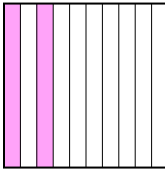

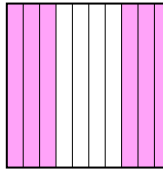


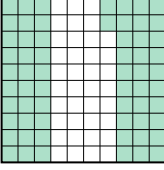
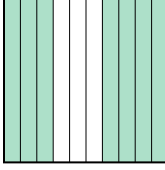
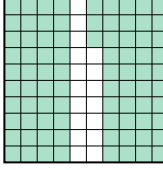
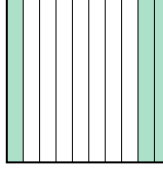
small _____

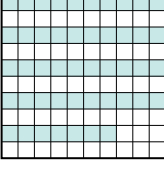


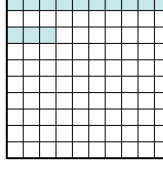
 large _____


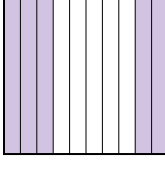
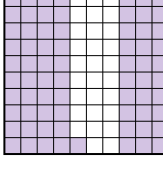
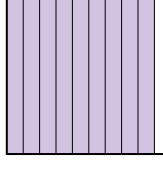






Put the boxes in order from least to greatest based on the shaded amount.

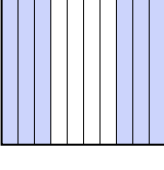
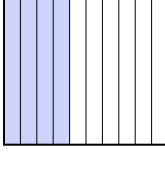

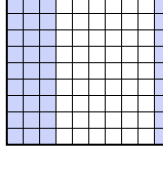
Ex) A  B  C  D  small $\frac{0.2 - B}{0.6 - D}{0.83 - A}$ large $\frac{0.96 - C}$



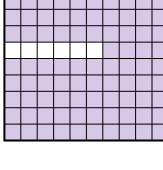
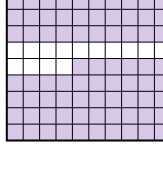
1) A  B  C  D  small $\frac{0.3 - D}{0.62 - A}{0.7 - B}$ large $\frac{0.83 - C}$



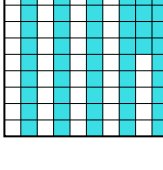

2) A  B  C  D  small $\frac{0.13 - D}{0.4 - B}{0.47 - A}$ large $\frac{0.7 - C}$


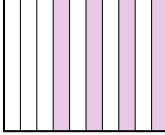
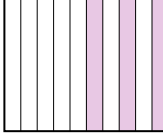
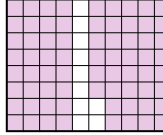
3) A  B  C  D  small $\frac{0.5 - B}{0.71 - C}{0.8 - A}$ large $\frac{0.9 - D}$

4) A  B  C  D  small $\frac{0.1 - C}{0.2 - A}{0.6 - B}$ large $\frac{0.9 - D}$

5) A  B  C  D  small $\frac{0.39 - D}{0.4 - B}{0.6 - A}$ large $\frac{0.91 - C}$

6) A  B  C  D  small $\frac{0.4 - B}{0.86 - D}{0.9 - A}$ large $\frac{0.94 - C}$

7) A  B  C  D  small $\frac{0.4 - A}{0.53 - B}{0.55 - C}$ large $\frac{0.6 - D}$

8) A  B  C  D  small $\frac{0.3 - C}{0.4 - B}{0.88 - D}$ large $\frac{0.94 - A}$


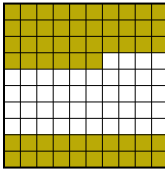


Answers

- Ex. B,D,A,C
1. D,A,B,C
2. D,B,A,C
3. B,C,A,D
4. C,A,B,D
5. D,B,A,C
6. B,D,A,C
7. A,B,C,D
8. C,B,D,A



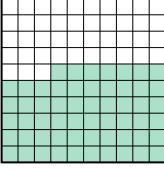

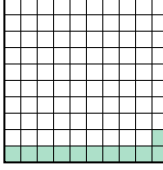

Put the boxes in order from least to greatest based on the shaded amount.

Answers

Ex) A  B  C  D 

small 0.12 - C
0.56 - B
0.7 - D
large 0.8 - A

Ex. C,B,D,A

1) A  B  C  D 

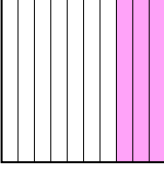
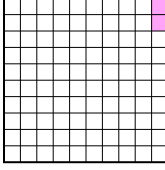
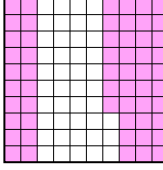
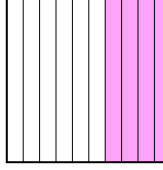
small _____

large _____

1. _____

2. _____

3. _____

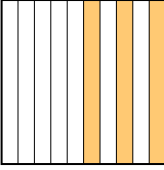
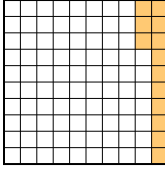
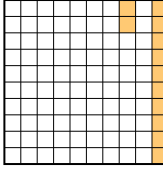
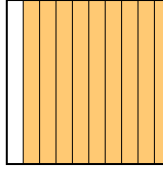
2) A  B  C  D 

small _____

large _____

4. _____

5. _____

3) A  B  C  D 

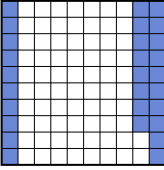
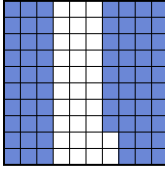
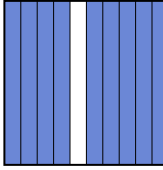
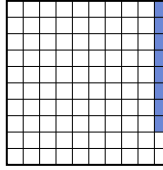
small _____

large _____

6. _____


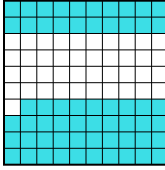


7. _____

8. _____

4) A  B  C  D 




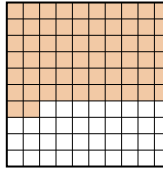
small _____

large _____

5) A  B  C  D 


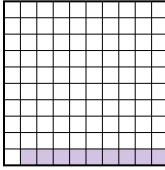

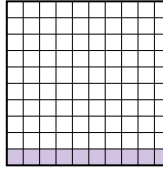
small _____

large _____

6) A  B  C  D 




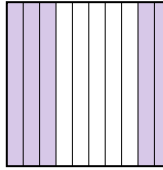
small _____

large _____

7) A  B  C  D 

small _____

large _____

8) A  B  C  D 

small _____

large _____



Put the boxes in order from least to greatest based on the shaded amount.

Ex) A B C D

small $\frac{0.12}{0.56} - C$
 $\frac{0.7}{0.8} - D$
 large $\frac{0.8}{0.9} - A$

1) A B C D

small $\frac{0.11}{0.57} - C$
 $\frac{0.7}{0.9} - D$
 large $\frac{0.9}{0.9} - B$

2) A B C D

small $\frac{0.02}{0.3} - B$
 $\frac{0.4}{0.57} - D$
 large $\frac{0.57}{0.57} - C$

3) A B C D

small $\frac{0.12}{0.13} - C$
 $\frac{0.3}{0.3} - A$
 large $\frac{0.9}{0.9} - D$

4) A B C D

small $\frac{0.08}{0.28} - D$
 $\frac{0.68}{0.9} - B$
 large $\frac{0.9}{0.9} - C$

5) A B C D

small $\frac{0.3}{0.4} - D$
 $\frac{0.59}{0.9} - B$
 large $\frac{0.9}{0.9} - A$

6) A B C D

small $\frac{0.2}{0.6} - C$
 $\frac{0.62}{0.9} - D$
 large $\frac{0.9}{0.9} - A$

7) A B C D

small $\frac{0.09}{0.1} - B$
 $\frac{0.1}{0.1} - C$
 large $\frac{0.6}{0.6} - A$

8) A B C D

small $\frac{0.5}{0.78} - D$
 $\frac{0.8}{0.8} - C$
 large $\frac{0.98}{0.98} - A$

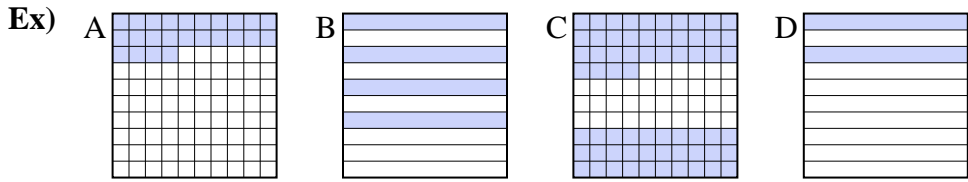
Answers

- Ex. C,B,D,A
1. C,A,D,B
2. B,A,D,C
3. C,B,A,D
4. D,A,B,C
5. D,C,B,A
6. C,B,D,A
7. B,C,C,A
8. D,B,C,A



Put the boxes in order from least to greatest based on the shaded amount.

Answers



small 0.2 - D
0.24 - A
0.4 - B
 large 0.64 - C

Ex. D,A,B,C

1. _____

2. _____

3. _____

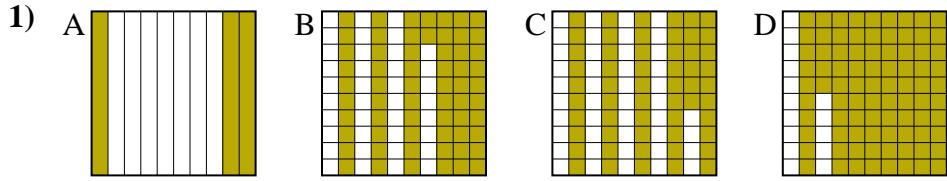
4. _____

5. _____

6. _____

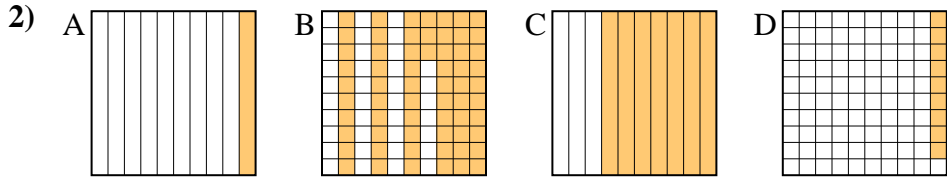
7. _____

8. _____



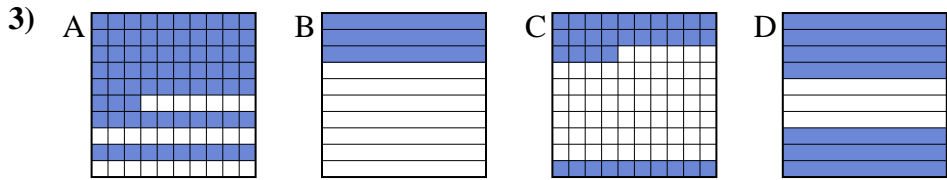
small _____

 large _____



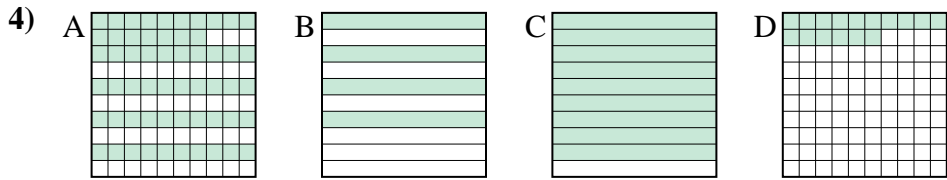
small _____

 large _____



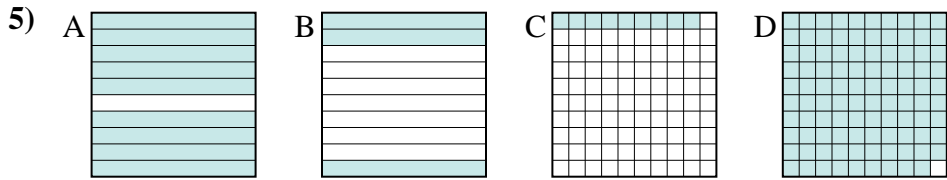
small _____

 large _____



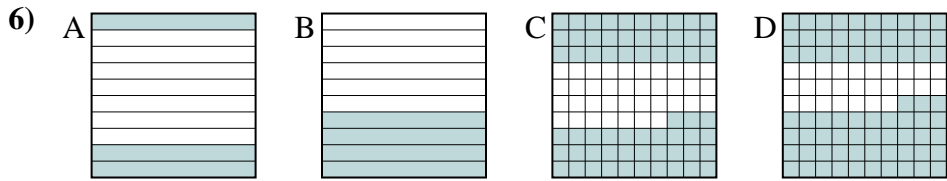
small _____

 large _____



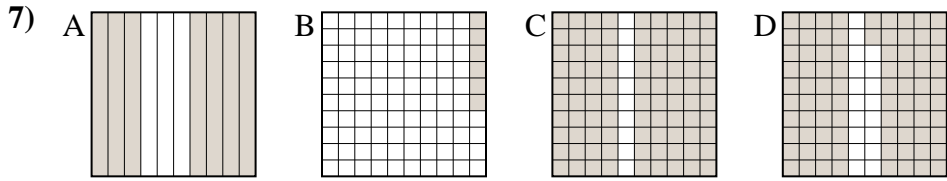
small _____

 large _____



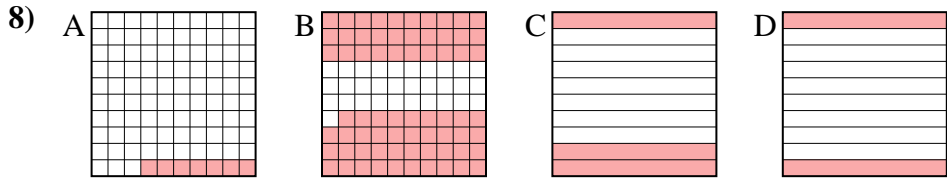
small _____

 large _____



small _____

 large _____



small _____

 large _____



Put the boxes in order from least to greatest based on the shaded amount.

Ex) A B C D

small $\frac{0.2}{0.24} - D$
 $\frac{0.4}{0.64} - C$

large

1) A B C D

small $\frac{0.3}{0.56} - A$
 $\frac{0.62}{0.85} - B$

large

2) A B C D

small $\frac{0.09}{0.1} - D$
 $\frac{0.63}{0.7} - B$

large

3) A B C D

small $\frac{0.3}{0.34} - B$
 $\frac{0.7}{0.73} - D$

large

4) A B C D

small $\frac{0.16}{0.4} - D$
 $\frac{0.57}{0.9} - A$

large

5) A B C D

small $\frac{0.09}{0.3} - C$
 $\frac{0.9}{0.99} - A$

large

6) A B C D

small $\frac{0.3}{0.4} - A$
 $\frac{0.63}{0.73} - C$

large

7) A B C D

small $\frac{0.06}{0.7} - B$
 $\frac{0.82}{0.9} - D$

large

8) A B C D

small $\frac{0.07}{0.2} - A$
 $\frac{0.3}{0.69} - C$

large

Answers

- Ex. D,A,B,C
1. A,C,B,D
2. D,A,B,C
3. B,C,D,A
4. D,B,A,C
5. C,B,A,D
6. A,B,C,D
7. B,A,D,C
8. A,D,C,B