
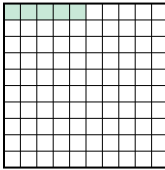






Put the boxes in order from least to greatest based on the shaded amount.

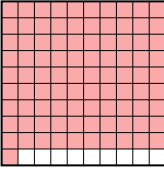

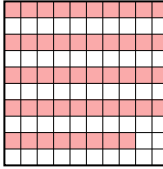

Answers

Ex) A  B  C  D 

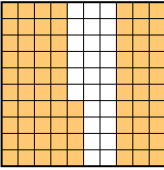
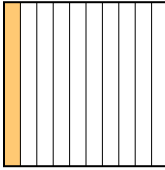
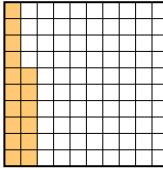
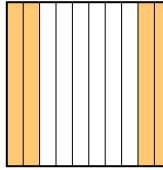
small 0.05 - B
0.57 - D
0.62 - C
 large 0.9 - A

Ex. B,D,C,A

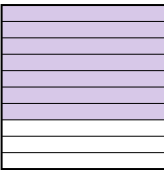
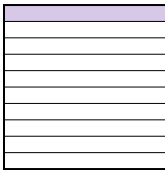
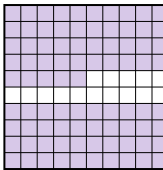
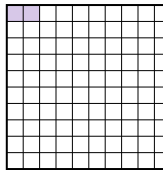
1. _____
2. _____
3. _____
4. _____
5. _____
6. _____
7. _____
8. _____

1) A  B  C  D 

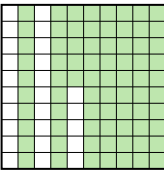

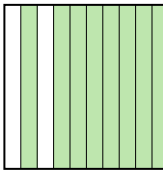
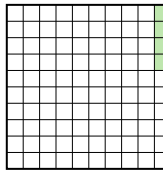
small _____
 large _____

2) A  B  C  D 



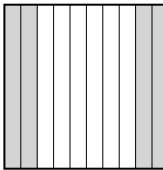

small _____
 large _____

3) A  B  C  D 


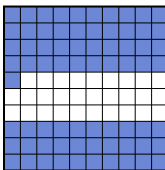


small _____
 large _____

4) A  B  C  D 

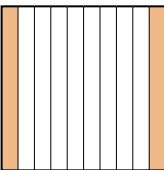
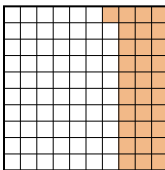
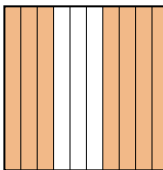
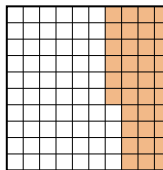
small _____
 large _____

5) A  B  C  D 

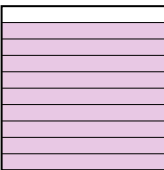

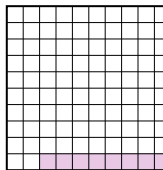
small _____
 large _____

6) A  B  C  D 

small _____
 large _____

7) A  B  C  D 


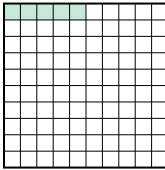


small _____
 large _____

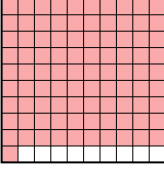

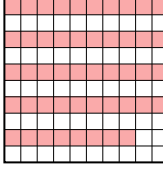

8) A  B  C  D 

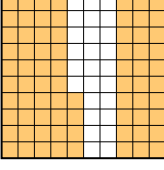
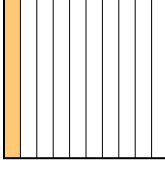
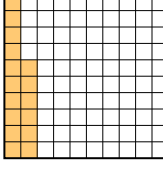
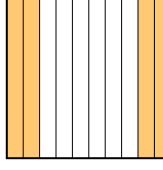
small _____
 large _____

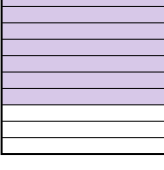

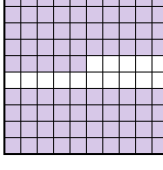






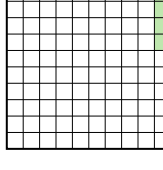
Put the boxes in order from least to greatest based on the shaded amount.



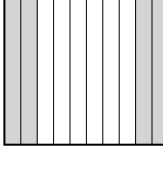

Ex) A  B  C  D  small $\frac{0.05}{0.57} - B$
 $\frac{0.62}{0.9} - C$ large


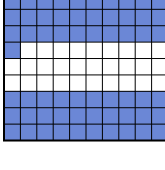


1) A  B  C  D  small $\frac{0.48}{0.5} - C$
 $\frac{0.6}{0.91} - D$ large

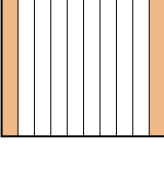
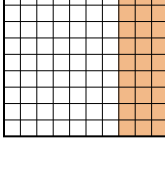
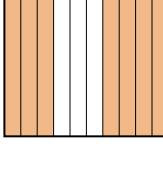
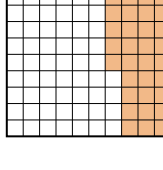
2) A  B  C  D  small $\frac{0.1}{0.16} - B$
 $\frac{0.4}{0.74} - D$ large




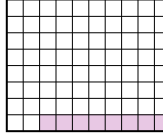
3) A  B  C  D  small $\frac{0.02}{0.1} - D$
 $\frac{0.7}{0.85} - C$ large

4) A  B  C  D  small $\frac{0.04}{0.7} - D$
 $\frac{0.75}{0.8} - C$ large

5) A  B  C  D  small $\frac{0.03}{0.4} - B$
 $\frac{0.8}{0.94} - D$ large

6) A  B  C  D  small $\frac{0.06}{0.6} - A$
 $\frac{0.7}{0.71} - D$ large

7) A  B  C  D  small $\frac{0.2}{0.31} - A$
 $\frac{0.36}{0.7} - D$ large

8) A  B  C  D  small $\frac{0.08}{0.3} - D$
 $\frac{0.4}{0.9} - B$ large

Answers

- Ex. **B,D,C,A**
1. **C,B,D,A**
2. **B,C,D,A**
3. **D,B,A,C**
4. **D,B,A,C**
5. **B,C,A,D**
6. **A,C,D,B**
7. **A,B,D,C**
8. **D,C,B,A**