
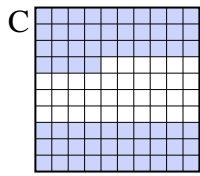

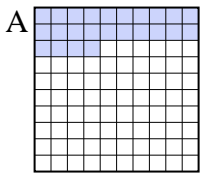




Put the boxes in order from least to greatest based on the shaded amount.

**Answers**

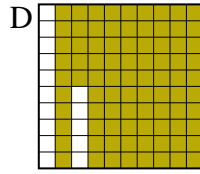
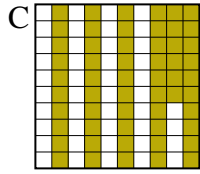
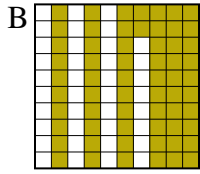
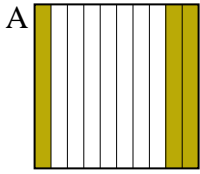
Ex)



small 0.2 - D  
0.24 - A  
0.4 - B  
large 0.64 - C

Ex. D,A,B,C

1)



small \_\_\_\_\_  
\_\_\_\_\_

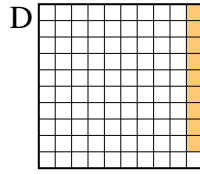
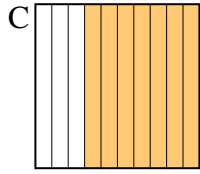
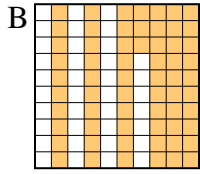
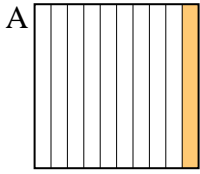
large \_\_\_\_\_

1. \_\_\_\_\_

2. \_\_\_\_\_

3. \_\_\_\_\_

2)



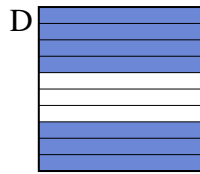
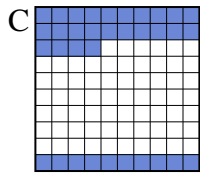

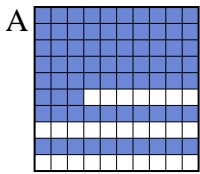
small \_\_\_\_\_

large \_\_\_\_\_

4. \_\_\_\_\_

5. \_\_\_\_\_

3)



small \_\_\_\_\_

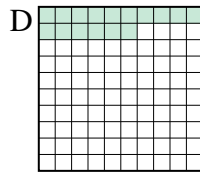
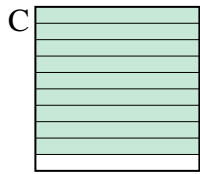

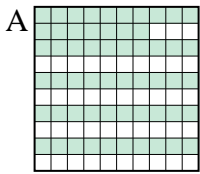
large \_\_\_\_\_

6. \_\_\_\_\_

7. \_\_\_\_\_

8. \_\_\_\_\_

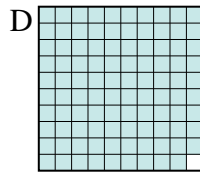
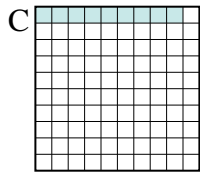
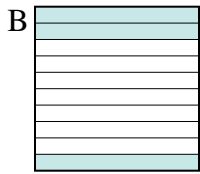
4)



small \_\_\_\_\_

large \_\_\_\_\_

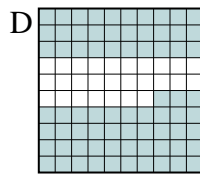
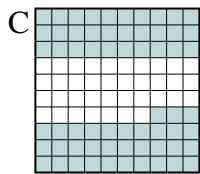
5)



small \_\_\_\_\_

large \_\_\_\_\_

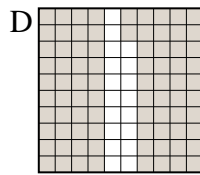
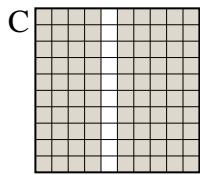
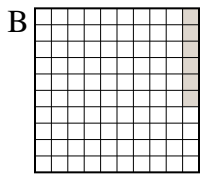
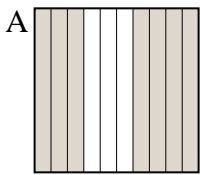
6)



small \_\_\_\_\_

large \_\_\_\_\_

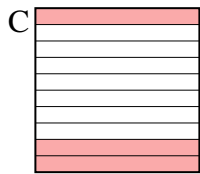
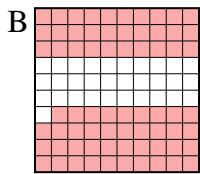
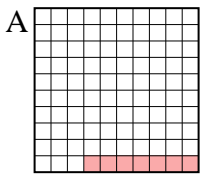
7)



small \_\_\_\_\_

large \_\_\_\_\_

8)



small \_\_\_\_\_

large \_\_\_\_\_



Put the boxes in order from least to greatest based on the shaded amount.

Ex) A B C D small  $\frac{0.2}{0.24} - D$   
large  $\frac{0.4}{0.64} - C$

1) A B C D small  $\frac{0.3}{0.56} - A$   
large  $\frac{0.62}{0.85} - D$

2) A B C D small  $\frac{0.09}{0.1} - D$   
large  $\frac{0.63}{0.7} - C$

3) A B C D small  $\frac{0.3}{0.34} - B$   
large  $\frac{0.7}{0.73} - A$

4) A B C D small  $\frac{0.16}{0.4} - D$   
large  $\frac{0.57}{0.9} - C$

5) A B C D small  $\frac{0.09}{0.3} - C$   
large  $\frac{0.9}{0.99} - D$

6) A B C D small  $\frac{0.3}{0.4} - A$   
large  $\frac{0.63}{0.73} - D$

7) A B C D small  $\frac{0.06}{0.7} - B$   
large  $\frac{0.82}{0.9} - C$

8) A B C D small  $\frac{0.07}{0.2} - A$   
large  $\frac{0.3}{0.69} - B$

**Answers**

- Ex. D,A,B,C
1. A,C,B,D
2. D,A,B,C
3. B,C,D,A
4. D,B,A,C
5. C,B,A,D
6. A,B,C,D
7. B,A,D,C
8. A,D,C,B