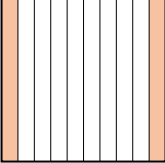
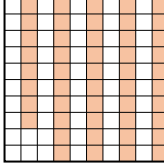
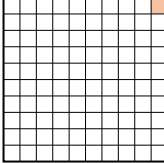
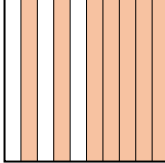




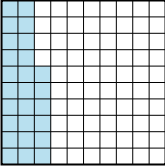

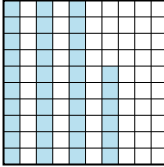
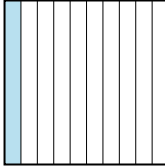
Ordering Decimal Visually

Name: _____

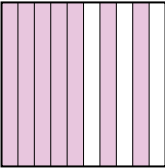
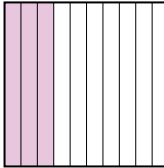

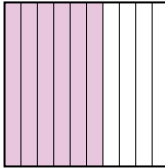
Put the boxes in order from least to greatest based on the shaded amount.

Ex) A  B  C  D 

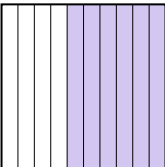
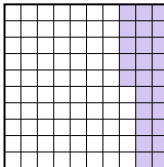
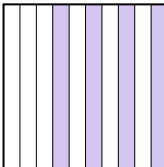
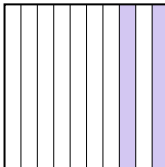
small 0.01 - C
0.2 - A
0.48 - B
large 0.7 - D

1) A  B  C  D 




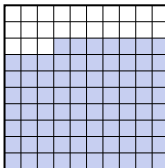
small _____
large _____

2) A  B  C  D 

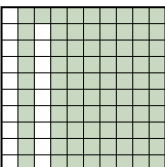

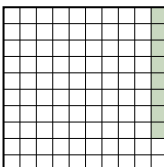
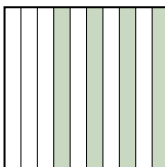
small _____
large _____

3) A  B  C  D 

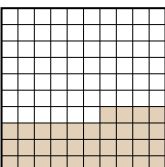


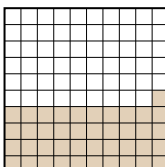
small _____
large _____

4) A  B  C  D 

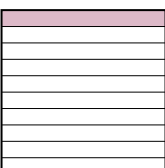


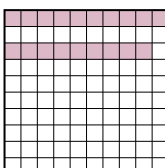
small _____
large _____

5) A  B  C  D 

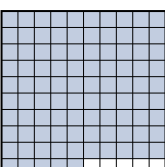
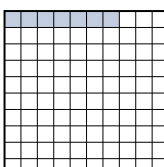
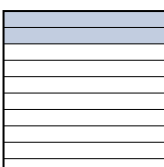

small _____
large _____

6) A  B  C  D 

small _____
large _____

7) A  B  C  D 

small _____
large _____

8) A  B  C  D 

small _____
large _____

Answers

Ex. C A B D

1. _____

2. _____

3. _____

4. _____

5. _____

6. _____

7. _____

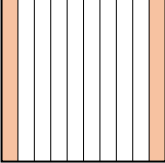
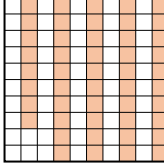
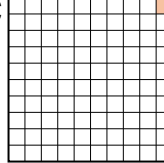
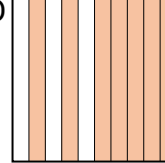
8. _____



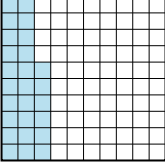
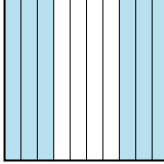
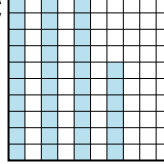
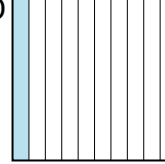
Ordering Decimal Visually

Name: **Answer Key**

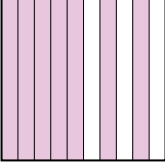
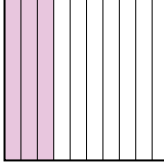
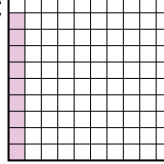
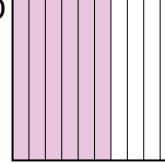
Put the boxes in order from least to greatest based on the shaded amount.

Ex) A  B  C  D 


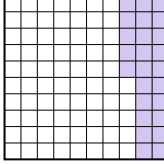

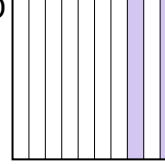
small $\frac{0.01 - C}{0.2 - A}{0.48 - B}$
large $\frac{0.7 - D}$

1) A  B  C  D 




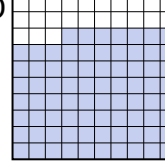
small $\frac{0.1 - D}{0.26 - A}{0.36 - C}$
large $\frac{0.6 - B}$

2) A  B  C  D 

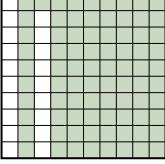

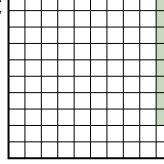
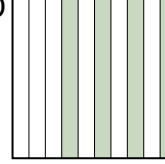
small $\frac{0.09 - C}{0.3 - B}{0.6 - D}$
large $\frac{0.7 - A}$

3) A  B  C  D 

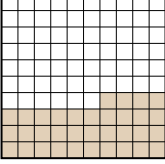


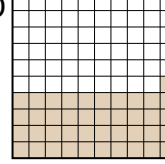
small $\frac{0.2 - D}{0.25 - B}{0.4 - C}$
large $\frac{0.6 - A}$

4) A  B  C  D 


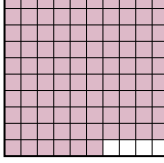

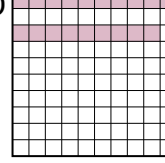
small $\frac{0.6 - A}{0.7 - C}{0.77 - D}$
large $\frac{0.8 - B}$

5) A  B  C  D 

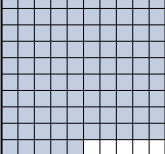
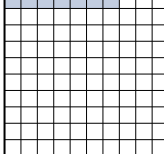
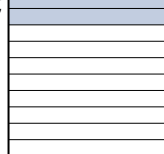

small $\frac{0.08 - C}{0.4 - D}{0.81 - A}$
large $\frac{0.9 - B}$

6) A  B  C  D 

small $\frac{0.3 - B}{0.34 - A}{0.41 - D}$
large $\frac{0.7 - C}$

7) A  B  C  D 

small $\frac{0.1 - A}{0.19 - D}{0.3 - C}$
large $\frac{0.96 - B}$

8) A  B  C  D 

small $\frac{0.07 - B}{0.2 - C}{0.6 - D}$
large $\frac{0.95 - A}$

Answers

- Ex. **C A B D**
1. **D A C B**
2. **C B D A**
3. **D B C A**
4. **A C D B**
5. **C D A B**
6. **B A D C**
7. **A D C B**
8. **B C D A**